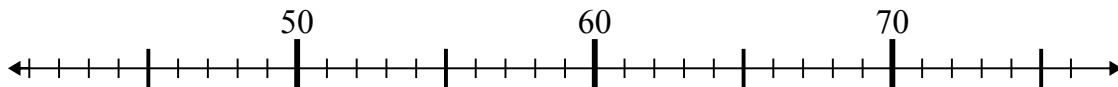


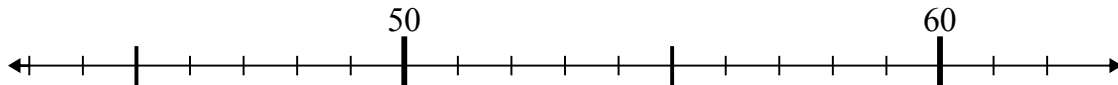


Dùng trục số để giải phép tính.

1) $52 - 10 =$



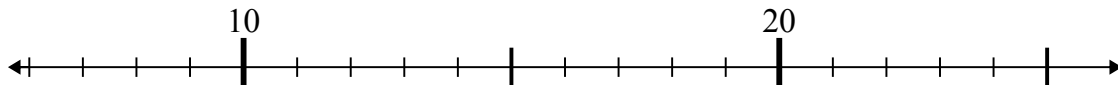
2) $60 - 1 =$



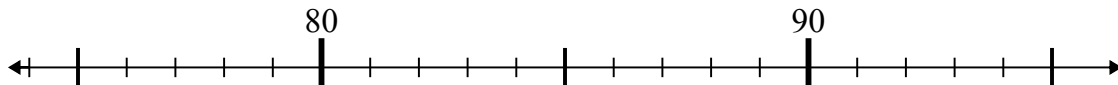
3) $58 - 6 =$



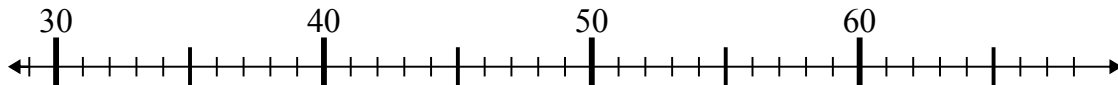
4) $13 - 1 =$



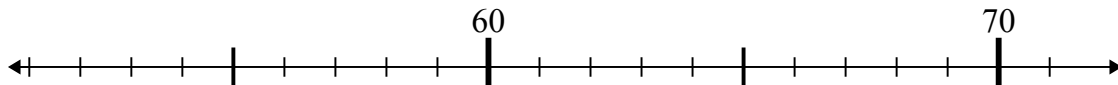
5) $86 + 9 =$



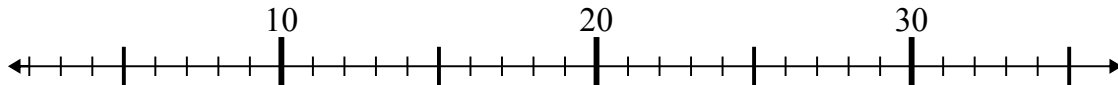
6) $31 + 26 =$



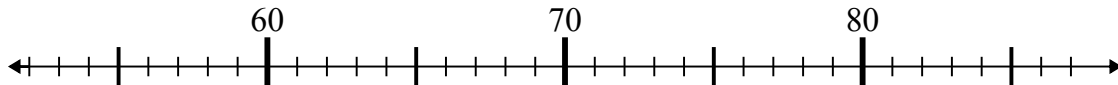
7) $55 + 2 =$



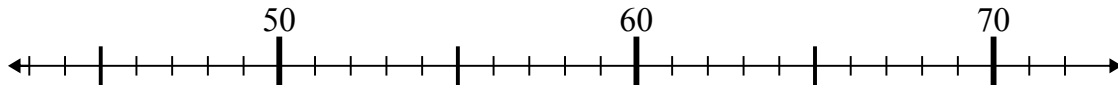
8) $35 - 18 =$



9) $76 - 24 =$



10) $46 + 15 =$



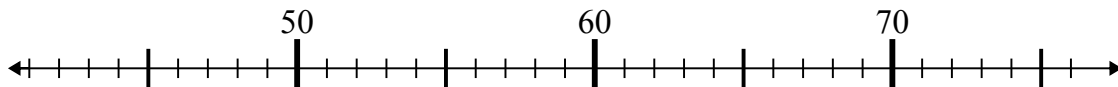
Câu trả lời

1. _____
2. _____
3. _____
4. _____
5. _____
6. _____
7. _____
8. _____
9. _____
10. _____

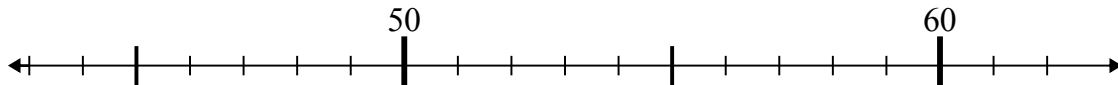


Dùng trục số để giải phép tính.

1) $52 - 10 =$



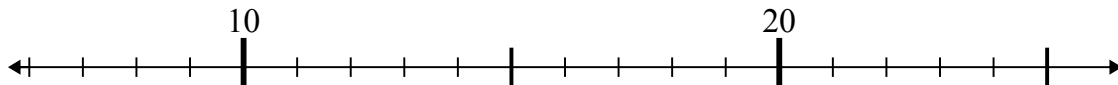
2) $60 - 1 =$



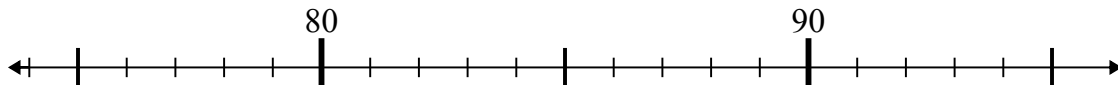
3) $58 - 6 =$



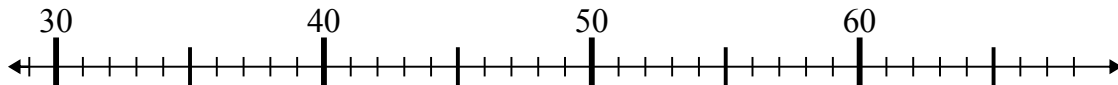
4) $13 - 1 =$



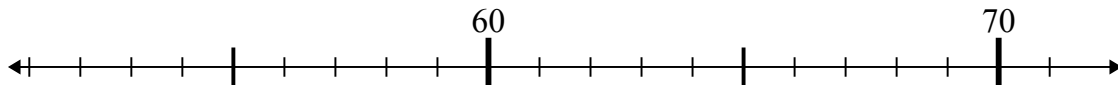
5) $86 + 9 =$



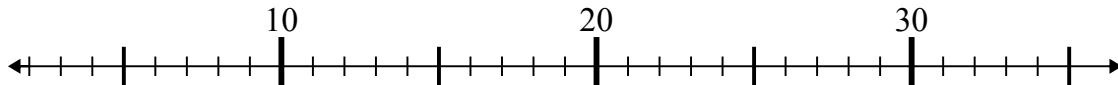
6) $31 + 26 =$



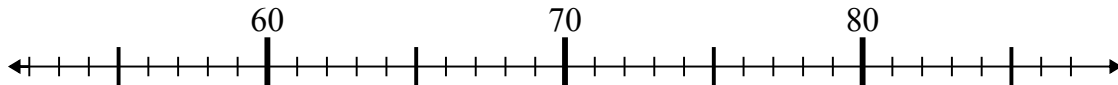
7) $55 + 2 =$



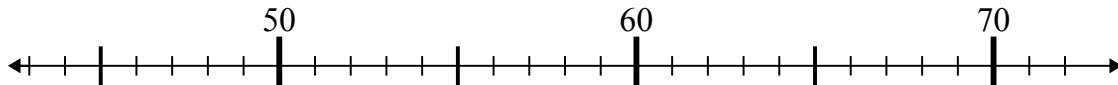
8) $35 - 18 =$



9) $76 - 24 =$



10) $46 + 15 =$



Câu trả lời

1. 42

2. 59

3. 52

4. 12

5. 95

6. 57

7. 57

8. 17

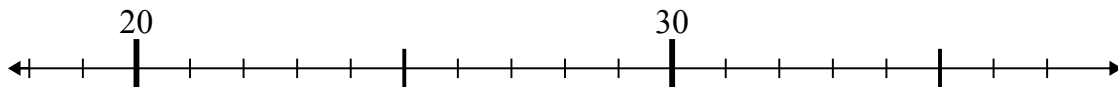
9. 52

10. 61



Dùng trục số để giải phép tính.

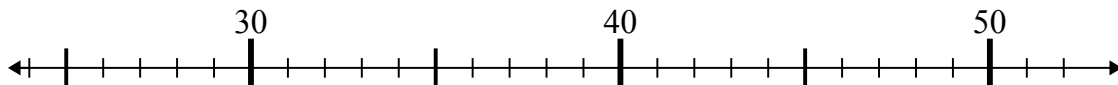
1) $23 - 4 =$



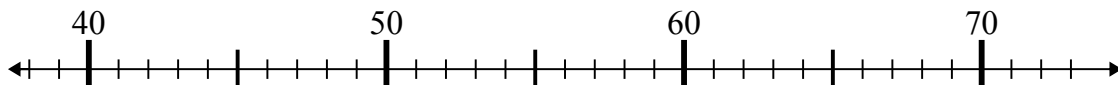
2) $73 - 6 =$



3) $44 + 2 =$



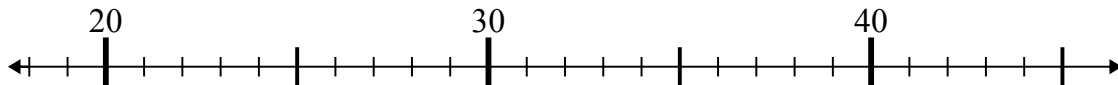
4) $42 + 1 =$



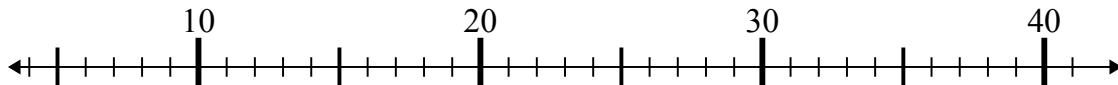
5) $40 + 13 =$



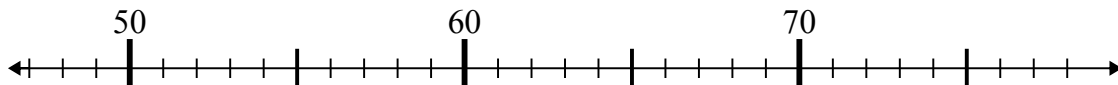
6) $26 + 0 =$



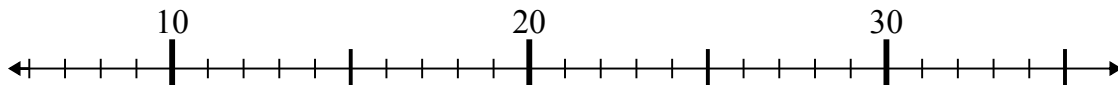
7) $36 - 27 =$



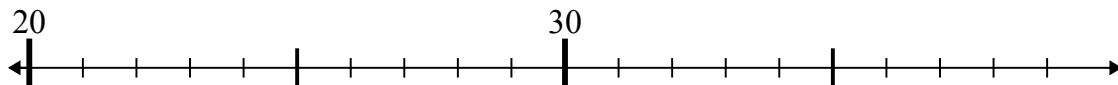
8) $54 - 5 =$



9) $10 + 1 =$



10) $24 + 1 =$



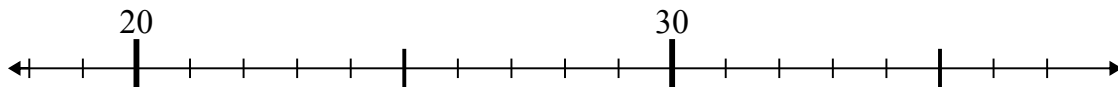
Câu trả lời

1. _____
2. _____
3. _____
4. _____
5. _____
6. _____
7. _____
8. _____
9. _____
10. _____

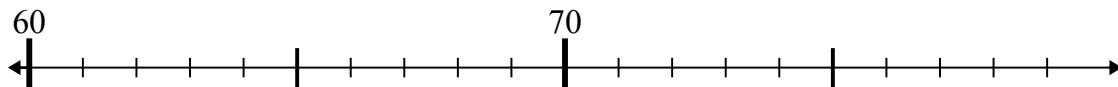


Dùng trục số để giải phép tính.

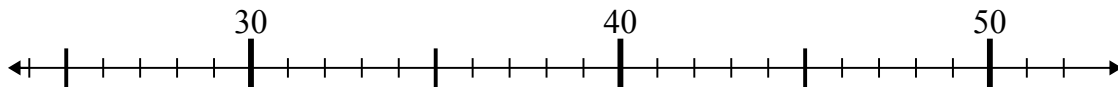
1) $23 - 4 =$



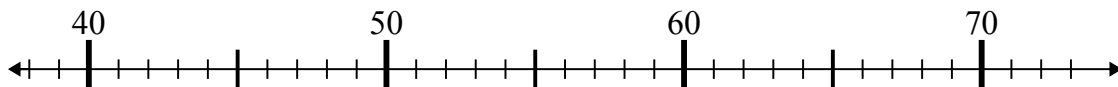
2) $73 - 6 =$



3) $44 + 2 =$



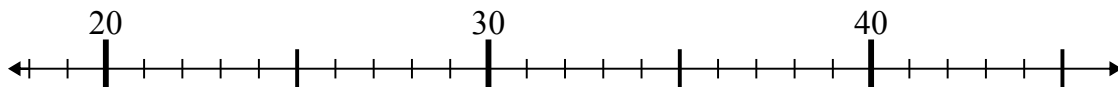
4) $42 + 1 =$



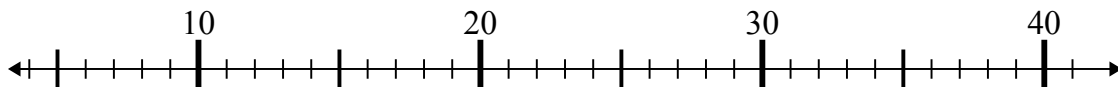
5) $40 + 13 =$



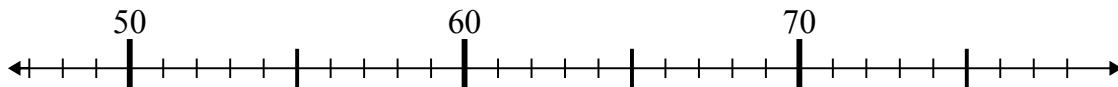
6) $26 + 0 =$



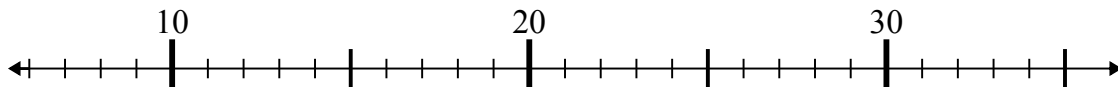
7) $36 - 27 =$



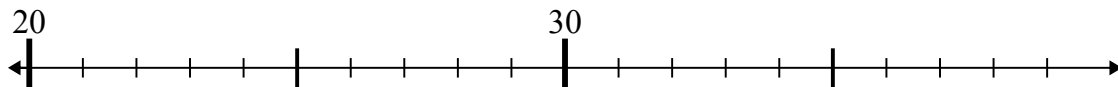
8) $54 - 5 =$



9) $10 + 1 =$



10) $24 + 1 =$



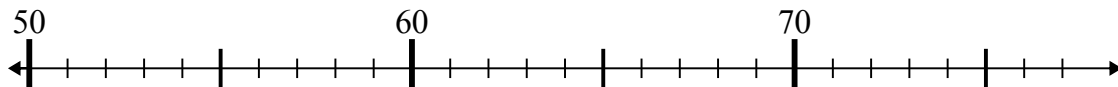
Câu trả lời

1. 19
2. 67
3. 46
4. 43
5. 53
6. 26
7. 9
8. 49
9. 11
10. 25

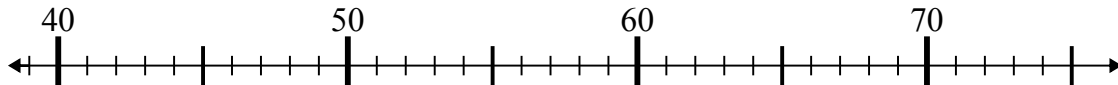


Dùng trục số để giải phép tính.

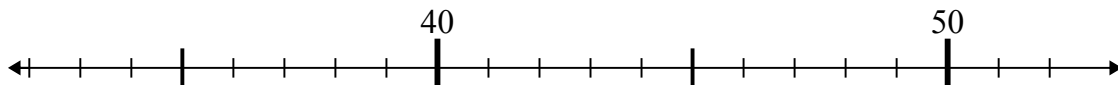
1) $70 - 16 =$



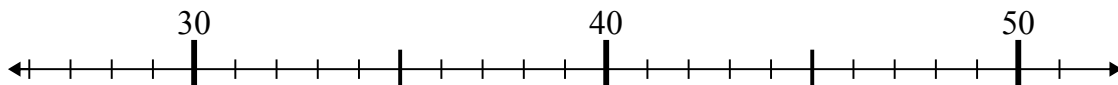
2) $39 + 6 =$



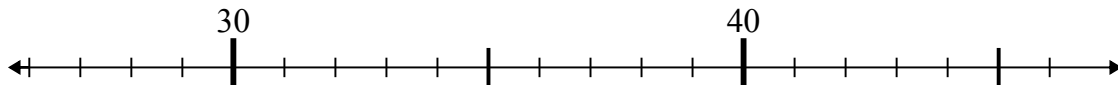
3) $46 + 3 =$



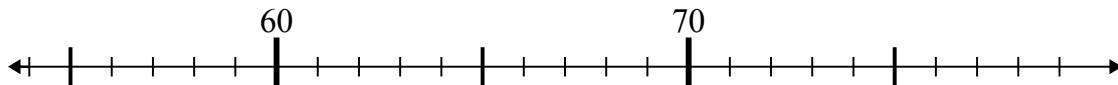
4) $31 + 8 =$



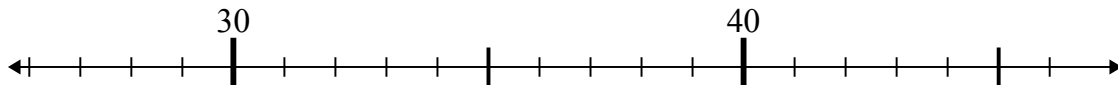
5) $36 - 1 =$



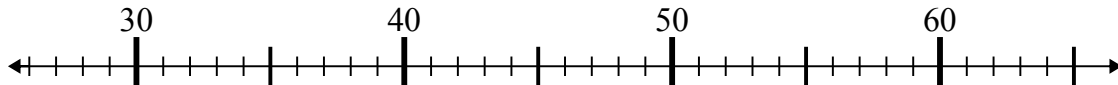
6) $70 + 8 =$



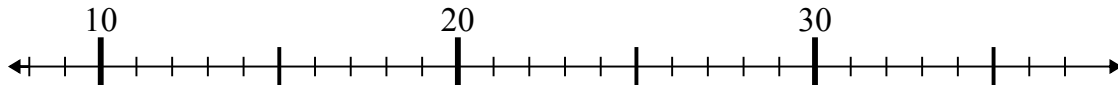
7) $46 - 1 =$



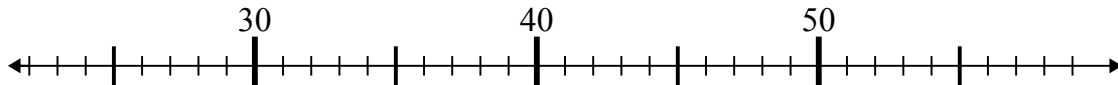
8) $27 + 8 =$



9) $18 + 1 =$



10) $25 + 3 =$



Câu trả lời

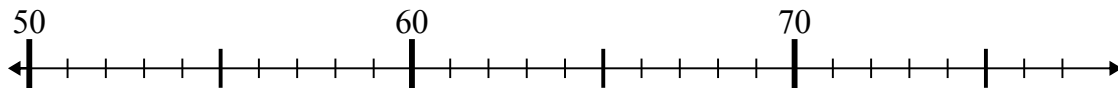
1. _____
2. _____
3. _____
4. _____
5. _____
6. _____
7. _____
8. _____
9. _____
10. _____



Dùng trục số để giải phép tính.

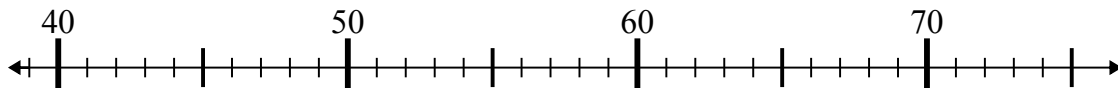
Câu trả lời

1) $70 - 16 =$



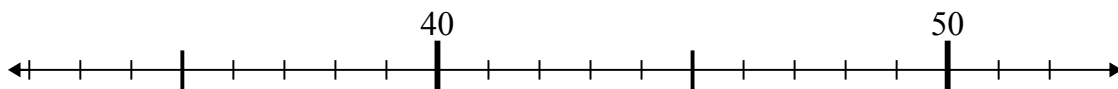
1. 54

2) $39 + 6 =$



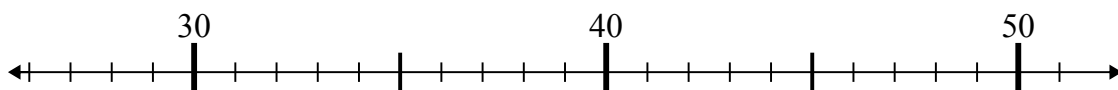
2. 45

3) $46 + 3 =$



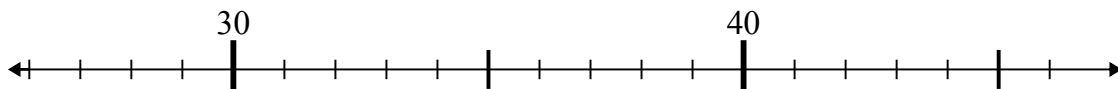
3. 49

4) $31 + 8 =$



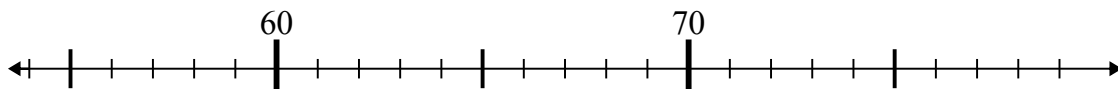
4. 39

5) $36 - 1 =$



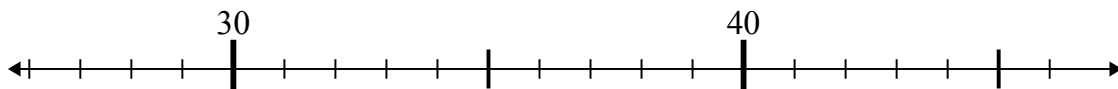
5. 35

6) $70 + 8 =$



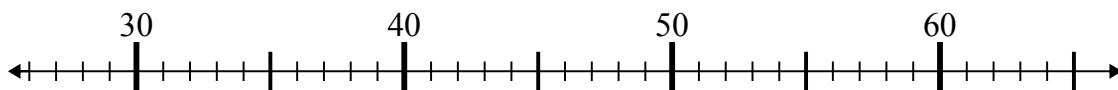
6. 78

7) $46 - 1 =$



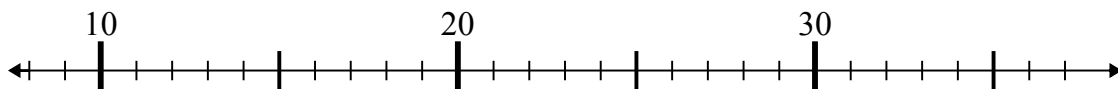
7. 45

8) $27 + 8 =$



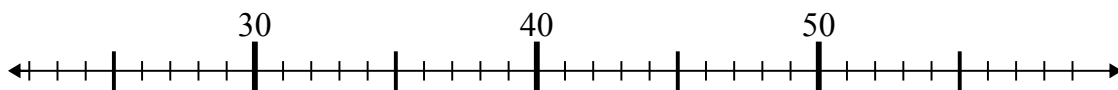
8. 35

9) $18 + 1 =$



9. 19

10) $25 + 3 =$

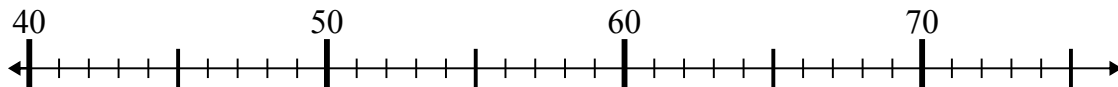


10. 28

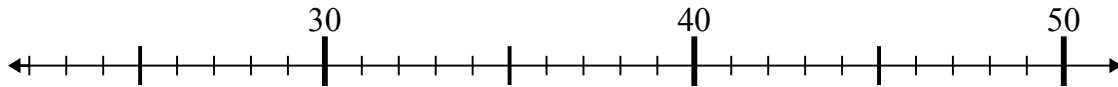


Dùng trục số để giải phép tính.

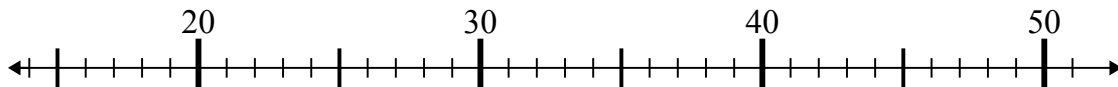
1) $46 - 5 =$



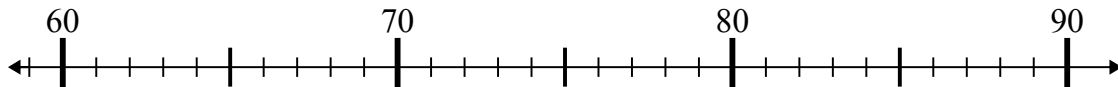
2) $22 + 19 =$



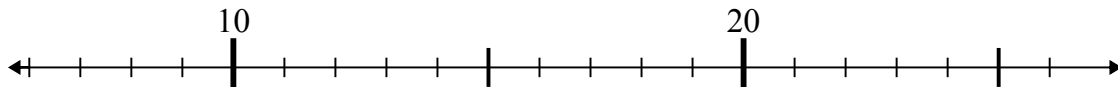
3) $21 + 25 =$



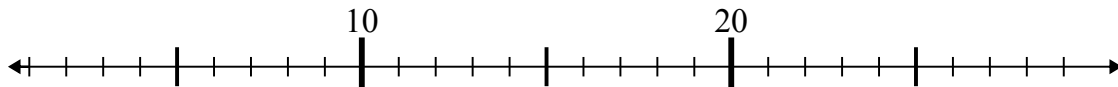
4) $73 + 15 =$



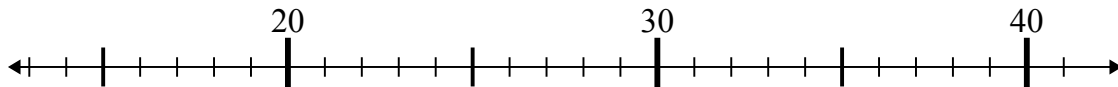
5) $11 + 2 =$



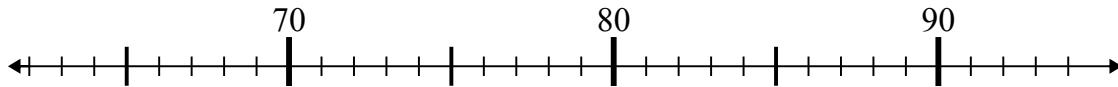
6) $5 + 1 =$



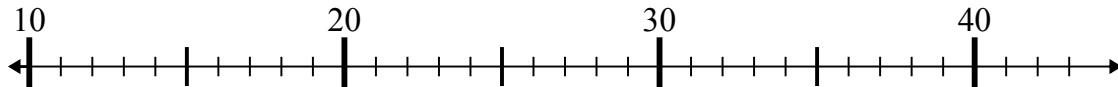
7) $23 + 4 =$



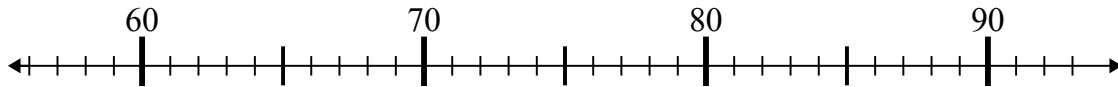
8) $82 - 14 =$



9) $22 - 10 =$



10) $65 + 1 =$



Câu trả lời

1. _____

2. _____

3. _____

4. _____

5. _____

6. _____

7. _____

8. _____

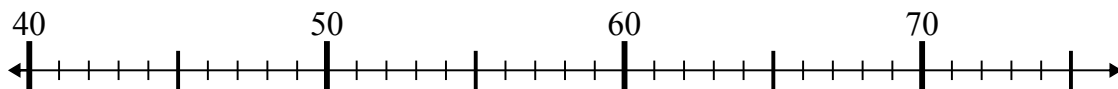
9. _____

10. _____

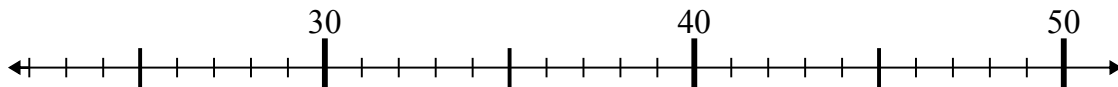


Dùng trục số để giải phép tính.

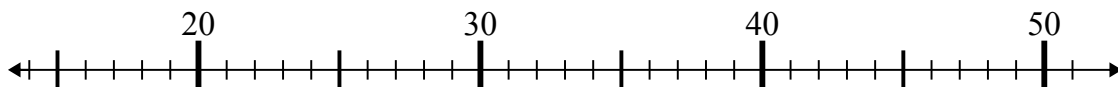
1) $46 - 5 =$



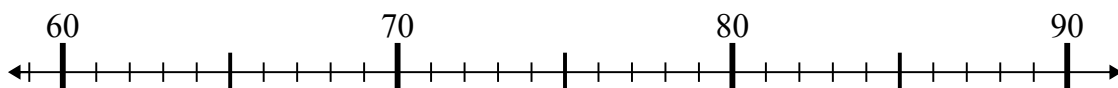
2) $22 + 19 =$



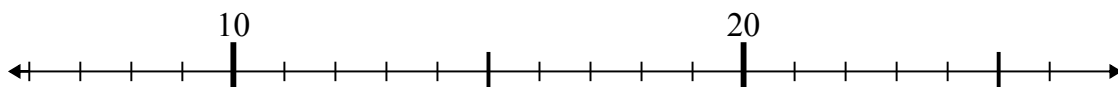
3) $21 + 25 =$



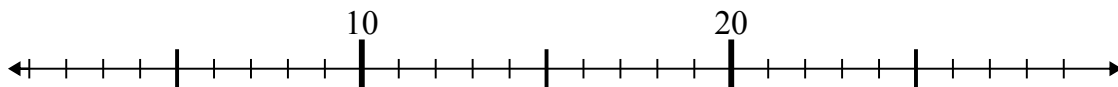
4) $73 + 15 =$



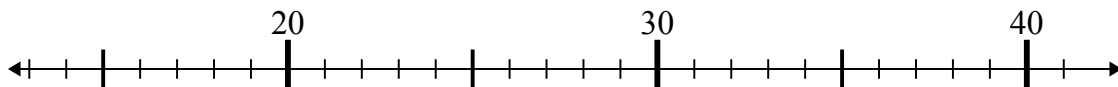
5) $11 + 2 =$



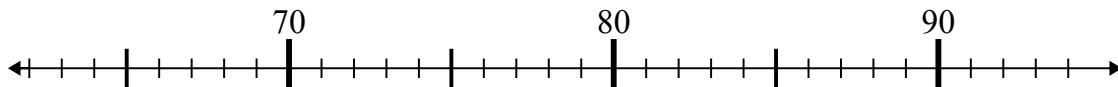
6) $5 + 1 =$



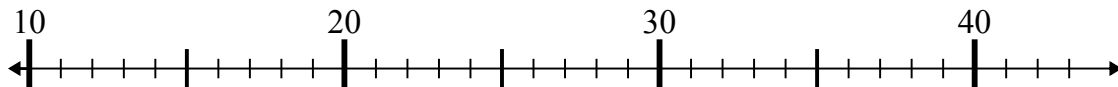
7) $23 + 4 =$



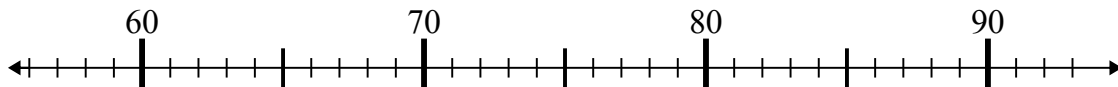
8) $82 - 14 =$



9) $22 - 10 =$



10) $65 + 1 =$



Câu trả lời

1. 41

2. 41

3. 46

4. 88

5. 13

6. 6

7. 27

8. 68

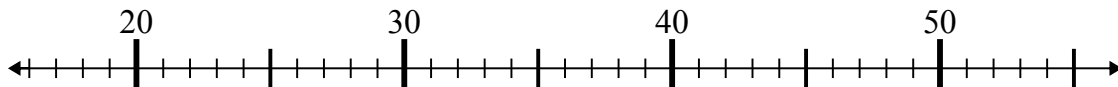
9. 12

10. 66

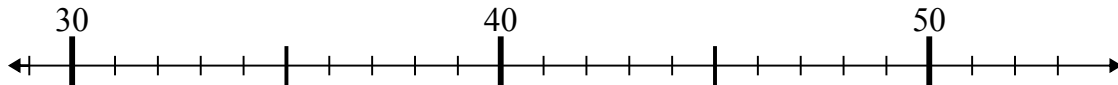


Dùng trục số để giải phép tính.

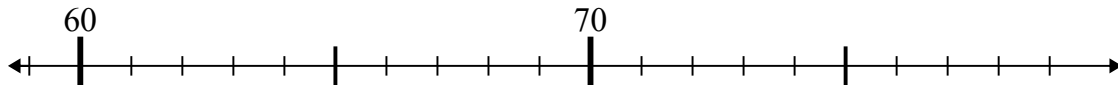
1) $26 - 4 =$



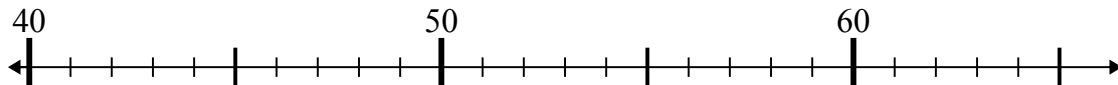
2) $45 - 2 =$



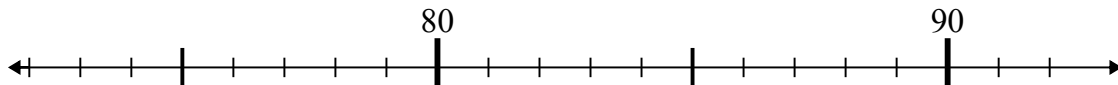
3) $62 + 14 =$



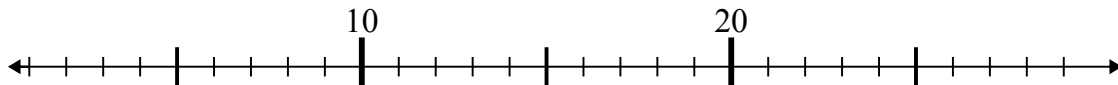
4) $51 - 7 =$



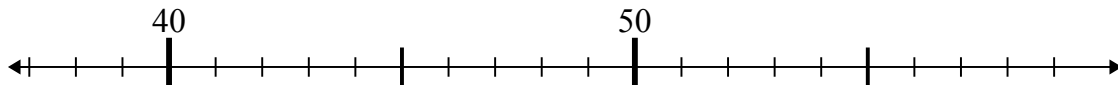
5) $76 + 1 =$



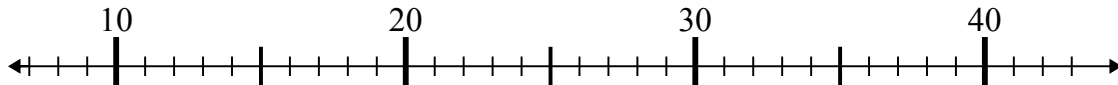
6) $27 - 21 =$



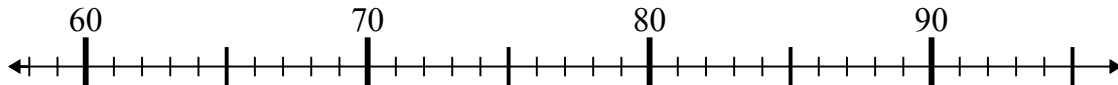
7) $55 - 15 =$



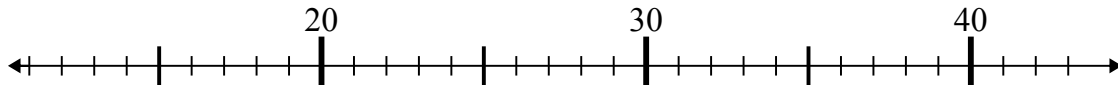
8) $31 - 17 =$



9) $66 + 9 =$



10) $27 + 15 =$



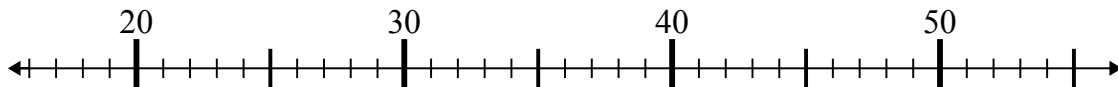
Câu trả lời

1. _____
2. _____
3. _____
4. _____
5. _____
6. _____
7. _____
8. _____
9. _____
10. _____

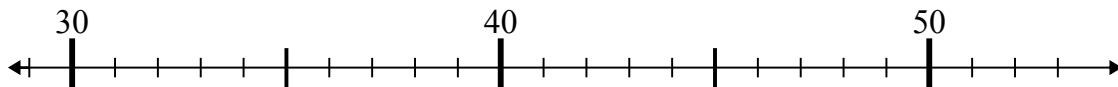


Dùng trục số để giải phép tính.

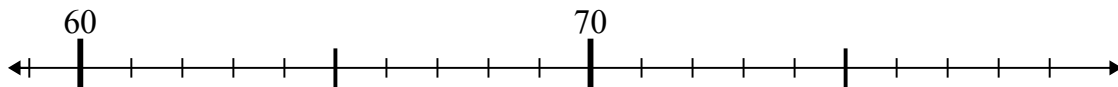
1) $26 - 4 =$



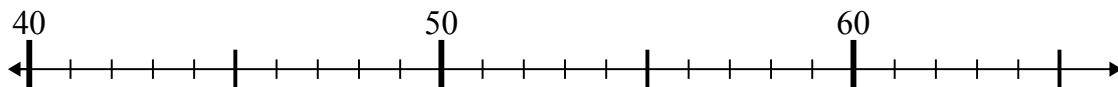
2) $45 - 2 =$



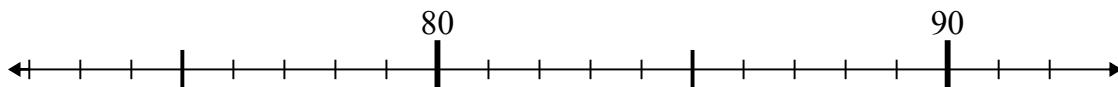
3) $62 + 14 =$



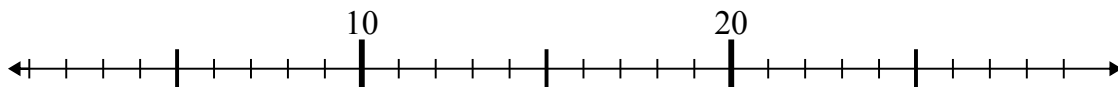
4) $51 - 7 =$



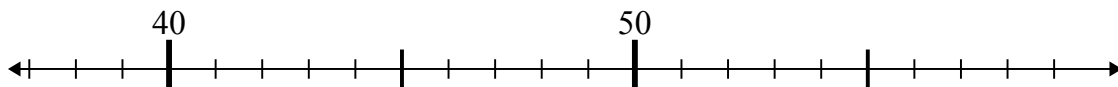
5) $76 + 1 =$



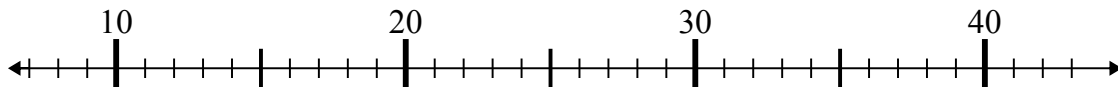
6) $27 - 21 =$



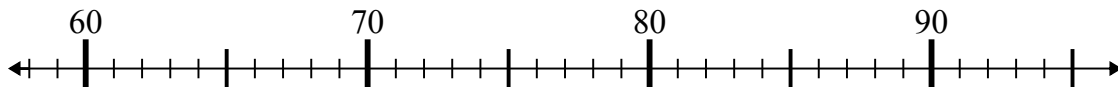
7) $55 - 15 =$



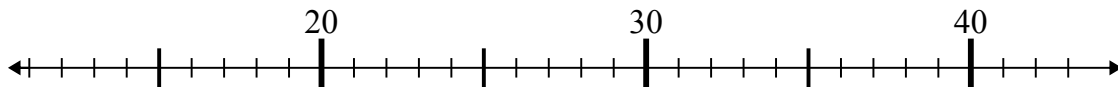
8) $31 - 17 =$



9) $66 + 9 =$



10) $27 + 15 =$



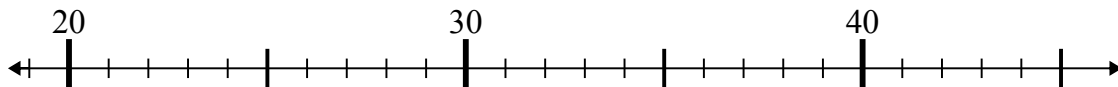
Câu trả lời

1. 22
2. 43
3. 76
4. 44
5. 77
6. 6
7. 40
8. 14
9. 75
10. 42

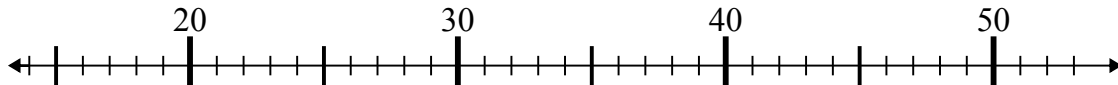


Dùng trục số để giải phép tính.

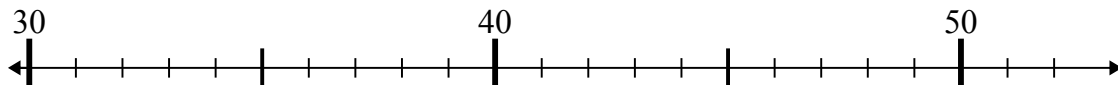
1) $29 + 7 =$



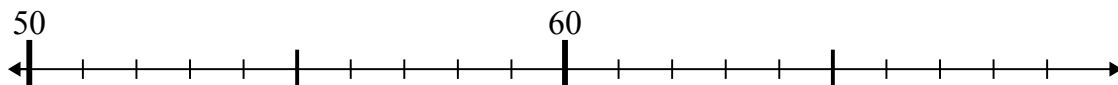
2) $36 - 6 =$



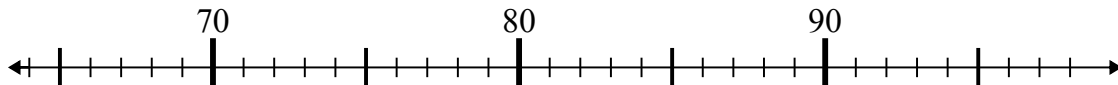
3) $50 - 1 =$



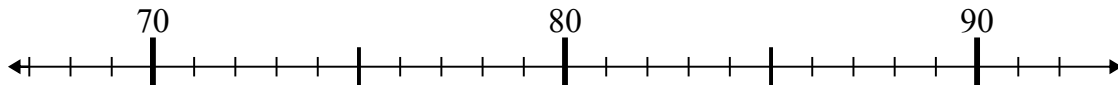
4) $68 - 6 =$



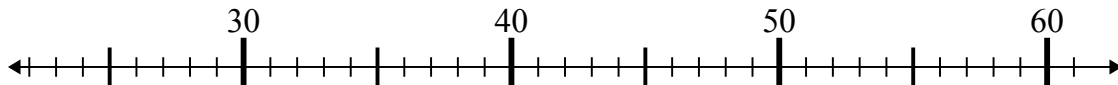
5) $71 + 11 =$



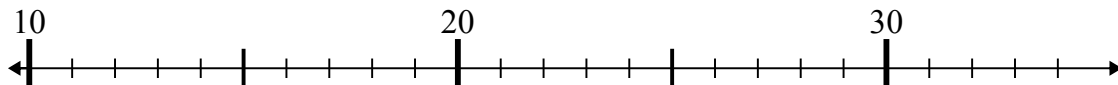
6) $68 + 4 =$



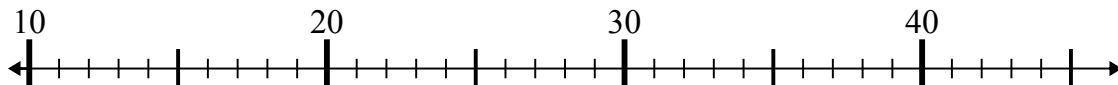
7) $35 - 9 =$



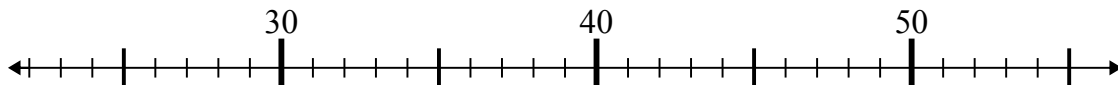
8) $34 + 0 =$



9) $42 - 21 =$



10) $45 - 3 =$



Câu trả lời

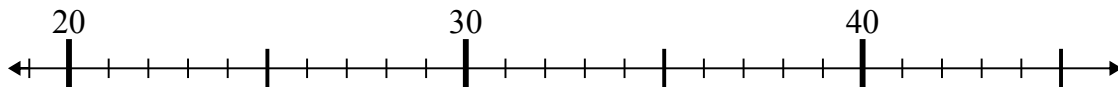
1. _____
2. _____
3. _____
4. _____
5. _____
6. _____
7. _____
8. _____
9. _____
10. _____



Dùng trục số để giải phép tính.

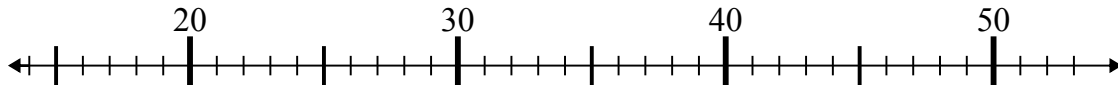
Câu trả lời

1) $29 + 7 =$



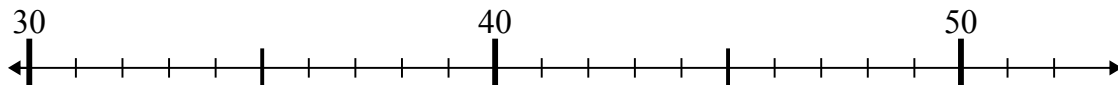
1. 36

2) $36 - 6 =$



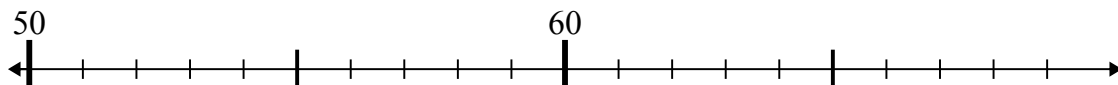
2. 30

3) $50 - 1 =$



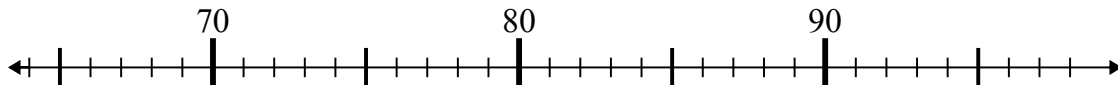
3. 49

4) $68 - 6 =$



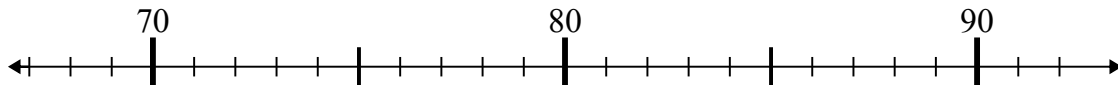
4. 62

5) $71 + 11 =$



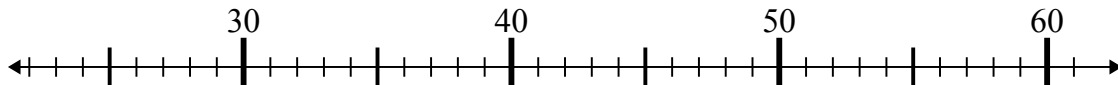
5. 82

6) $68 + 4 =$



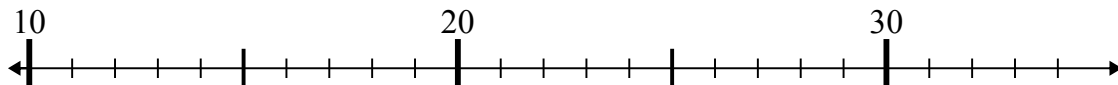
6. 72

7) $35 - 9 =$



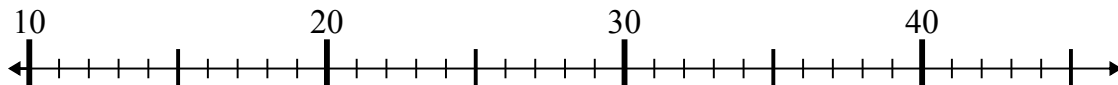
7. 26

8) $34 + 0 =$



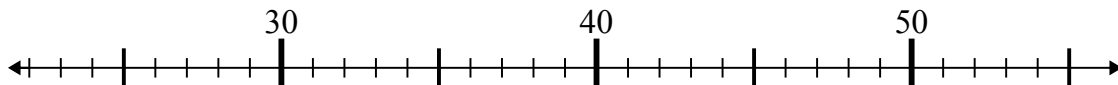
8. 34

9) $42 - 21 =$



9. 21

10) $45 - 3 =$

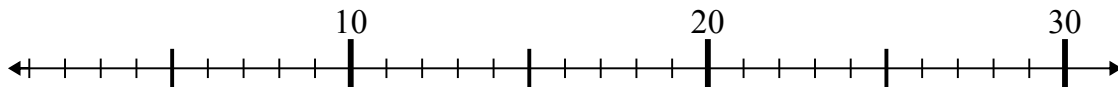


10. 42

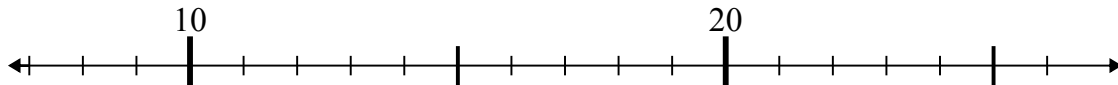


Dùng trục số để giải phép tính.

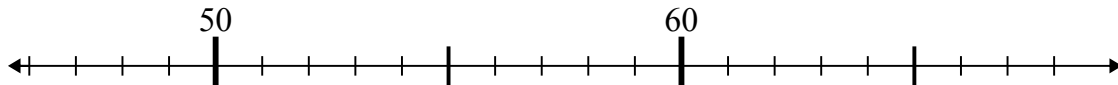
1) $3 + 17 =$



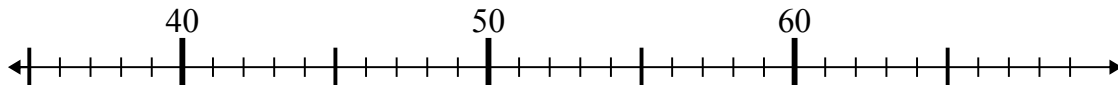
2) $14 + 9 =$



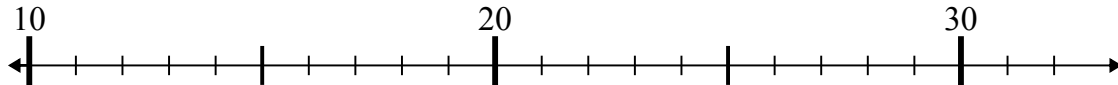
3) $59 - 8 =$



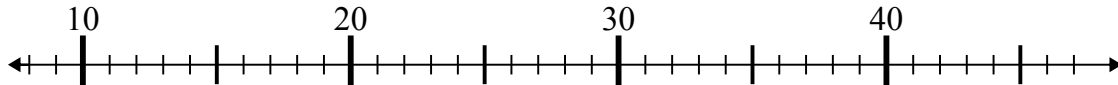
4) $43 - 5 =$



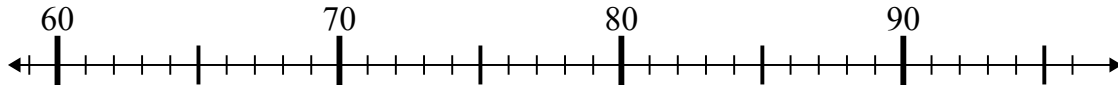
5) $26 - 14 =$



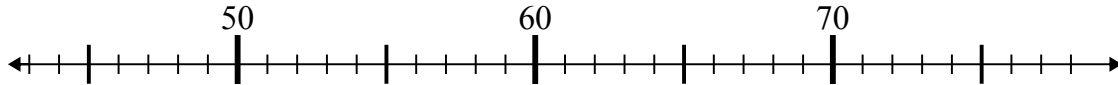
6) $15 + 23 =$



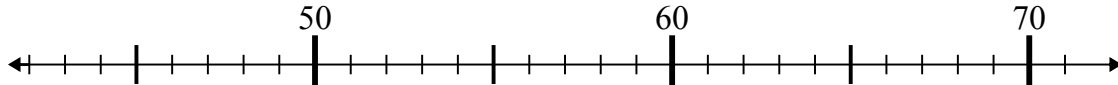
7) $91 + 2 =$



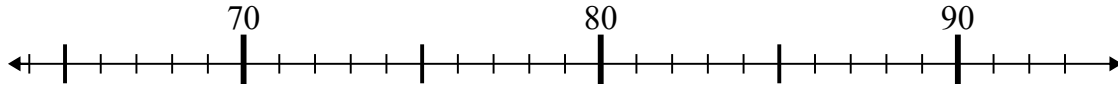
8) $47 + 1 =$



9) $71 - 8 =$



10) $72 + 16 =$



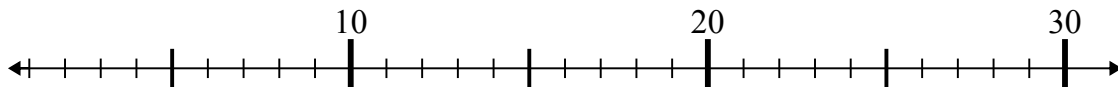
Câu trả lời

1. _____
2. _____
3. _____
4. _____
5. _____
6. _____
7. _____
8. _____
9. _____
10. _____

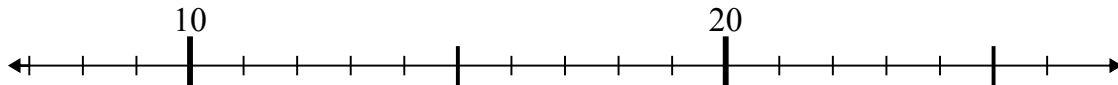


Dùng trục số để giải phép tính.

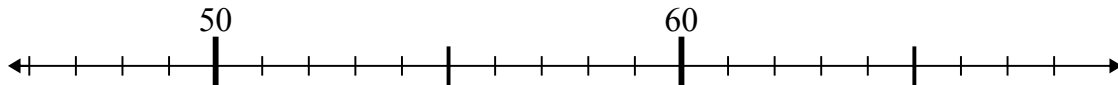
1) $3 + 17 =$



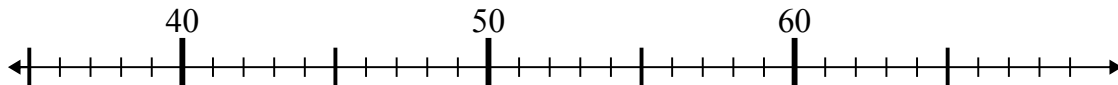
2) $14 + 9 =$



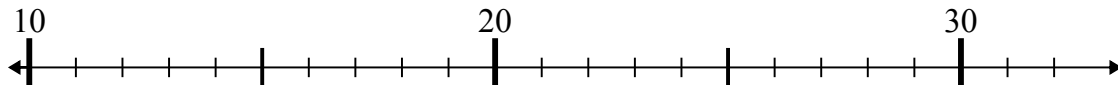
3) $59 - 8 =$



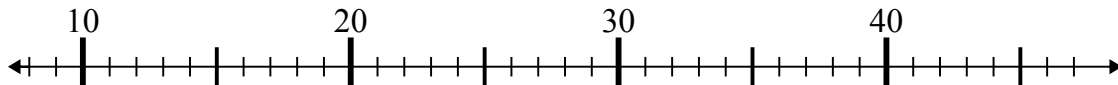
4) $43 - 5 =$



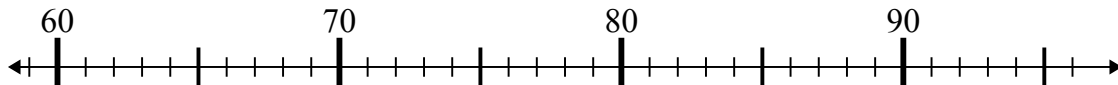
5) $26 - 14 =$



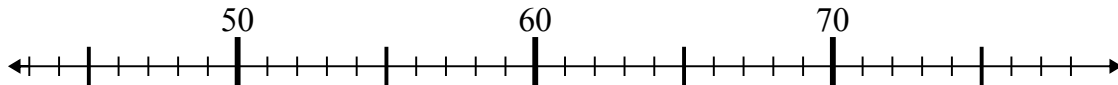
6) $15 + 23 =$



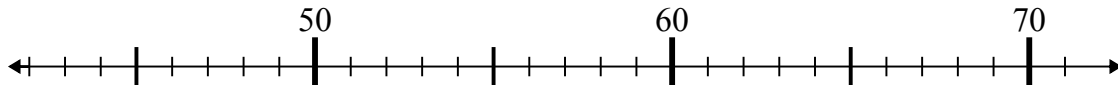
7) $91 + 2 =$



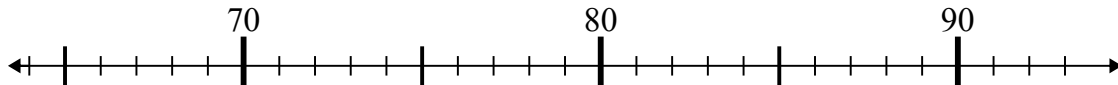
8) $47 + 1 =$



9) $71 - 8 =$



10) $72 + 16 =$



Câu trả lời

1. 20

2. 23

3. 51

4. 38

5. 12

6. 38

7. 93

8. 48

9. 63

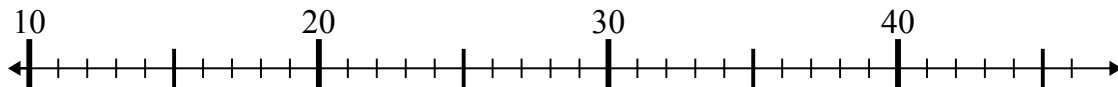
10. 88



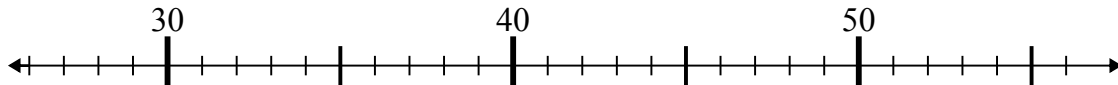
Dùng trục số để giải phép tính.

Câu trả lời

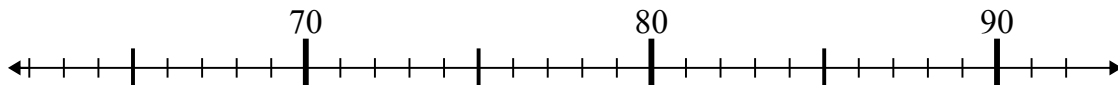
1) $24 - 11 =$



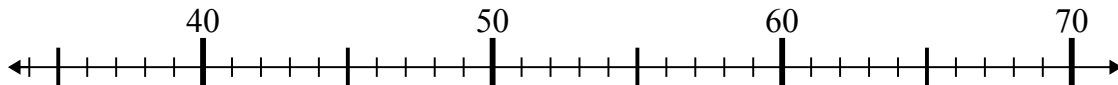
2) $29 + 6 =$



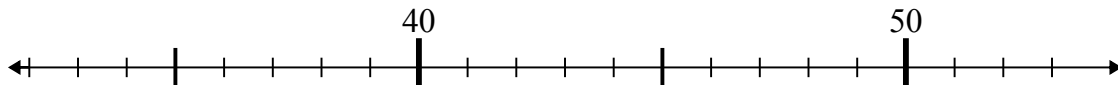
3) $72 + 7 =$



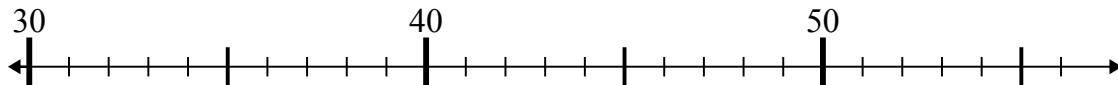
4) $41 + 16 =$



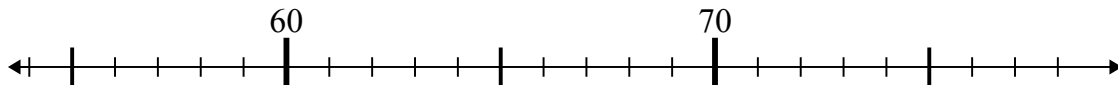
5) $51 - 3 =$



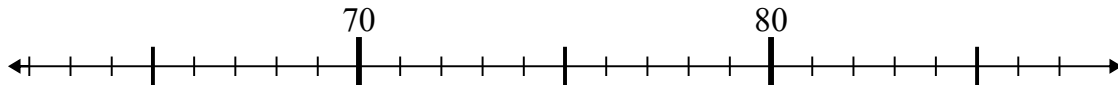
6) $35 - 0 =$



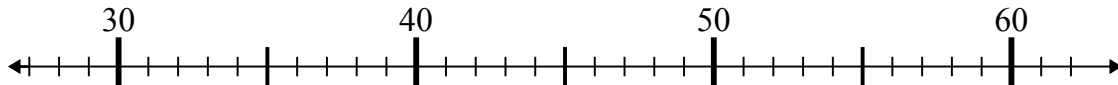
7) $65 + 10 =$



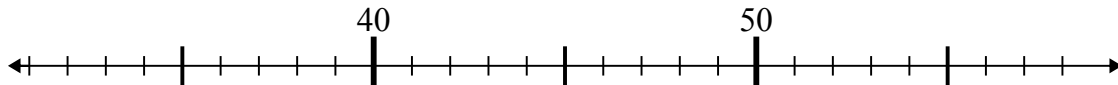
8) $65 + 14 =$



9) $57 - 16 =$



10) $58 - 19 =$

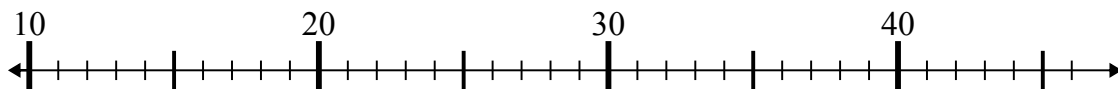


1. _____
2. _____
3. _____
4. _____
5. _____
6. _____
7. _____
8. _____
9. _____
10. _____

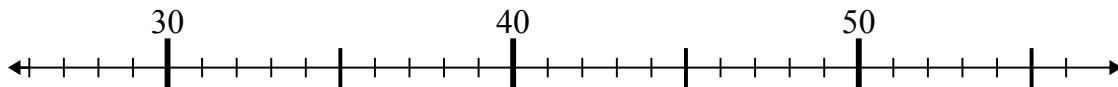


Dùng trục số để giải phép tính.

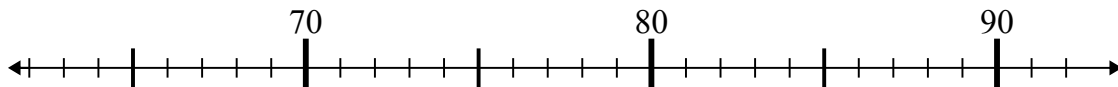
1) $24 - 11 =$



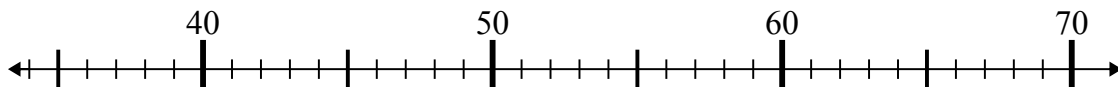
2) $29 + 6 =$



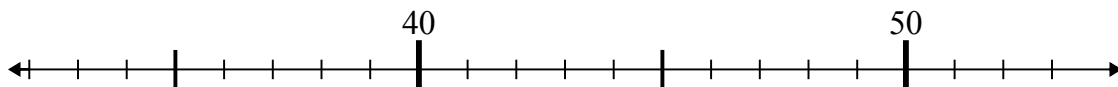
3) $72 + 7 =$



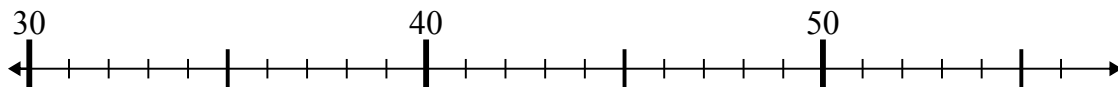
4) $41 + 16 =$



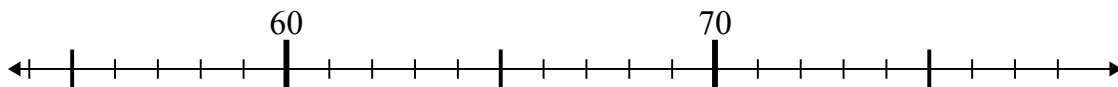
5) $51 - 3 =$



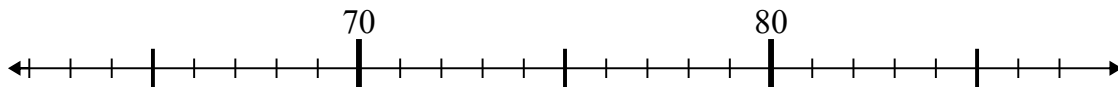
6) $35 - 0 =$



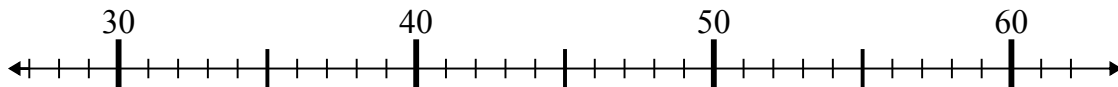
7) $65 + 10 =$



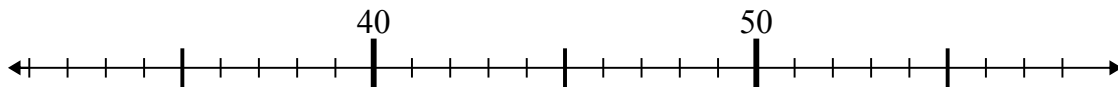
8) $65 + 14 =$



9) $57 - 16 =$



10) $58 - 19 =$



Câu trả lời

1. **13**

2. **35**

3. **79**

4. **57**

5. **48**

6. **35**

7. **75**

8. **79**

9. **41**

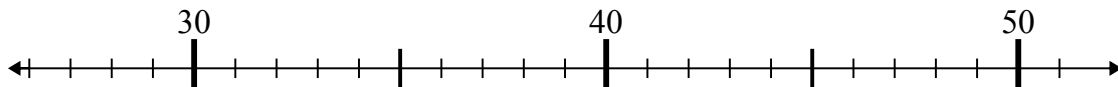
10. **39**



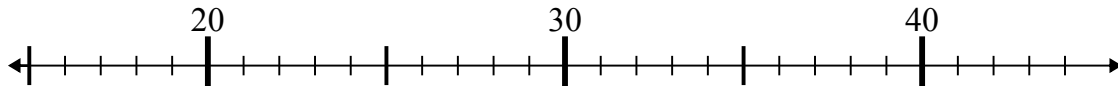
Dùng trục số để giải phép tính.

Câu trả lời

1) $32 - 5 =$



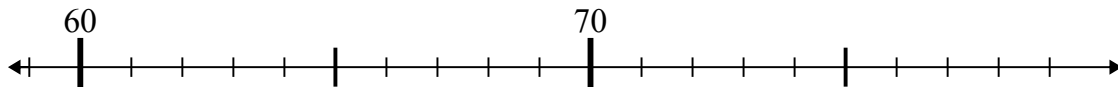
2) $16 + 7 =$



3) $25 + 12 =$



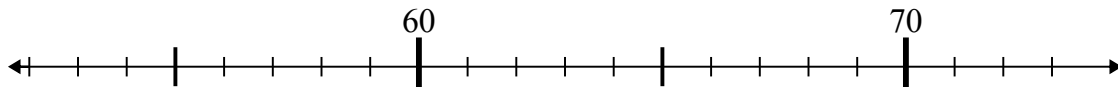
4) $75 - 14 =$



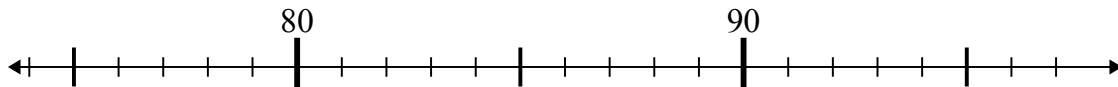
5) $28 + 26 =$



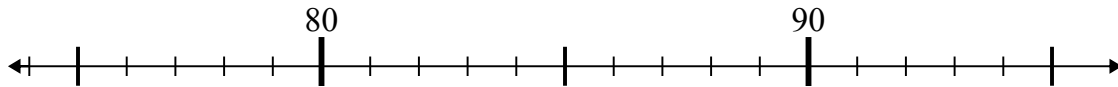
6) $65 - 10 =$



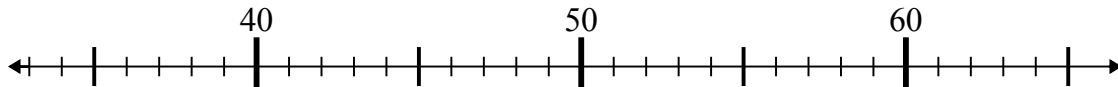
7) $81 - 2 =$



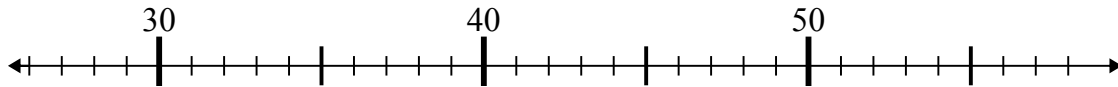
8) $95 - 8 =$



9) $48 - 11 =$



10) $32 + 18 =$



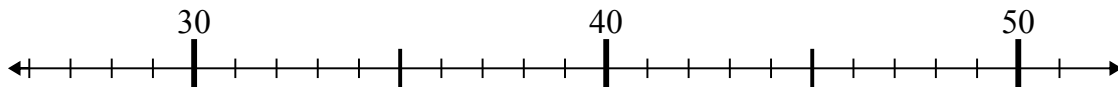
1. _____
2. _____
3. _____
4. _____
5. _____
6. _____
7. _____
8. _____
9. _____
10. _____



Dùng trục số để giải phép tính.

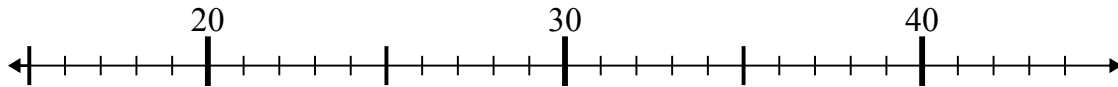
Câu trả lời

1) $32 - 5 =$



1. 27

2) $16 + 7 =$



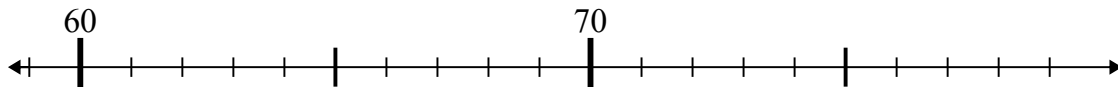
2. 23

3) $25 + 12 =$



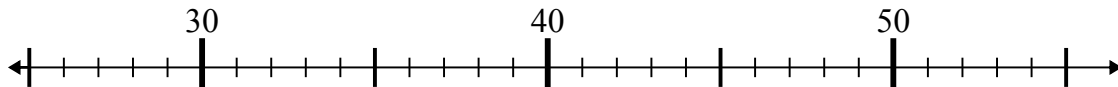
3. 37

4) $75 - 14 =$



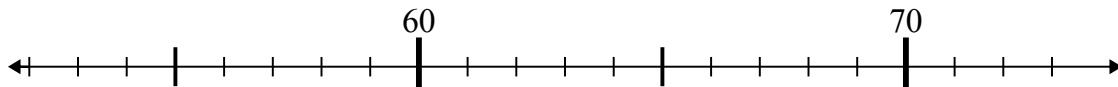
4. 61

5) $28 + 26 =$



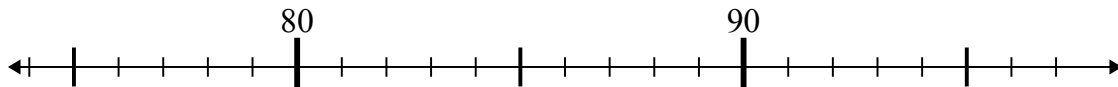
5. 54

6) $65 - 10 =$



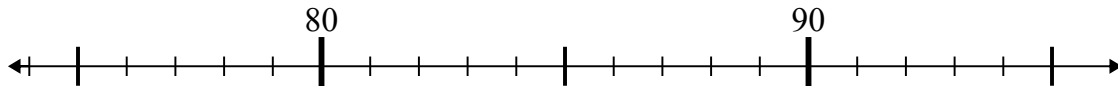
6. 55

7) $81 - 2 =$



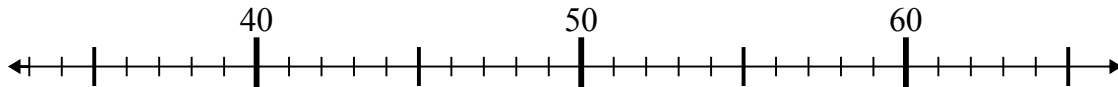
7. 79

8) $95 - 8 =$



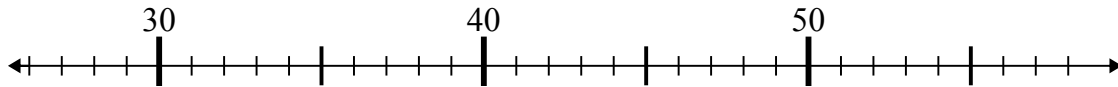
8. 87

9) $48 - 11 =$



9. 37

10) $32 + 18 =$



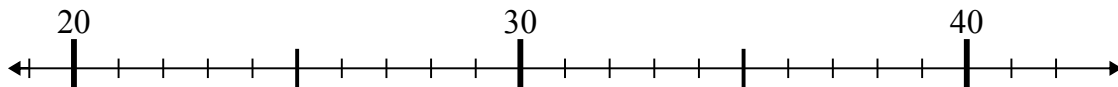
10. 50



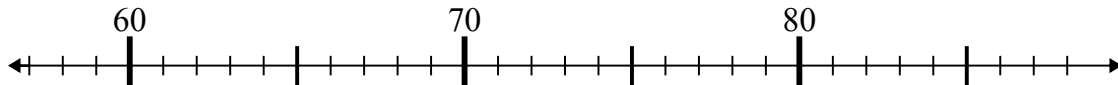
Dùng trục số để giải phép tính.

Câu trả lời

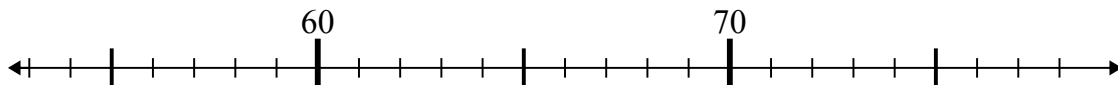
1) $31 + 4 =$



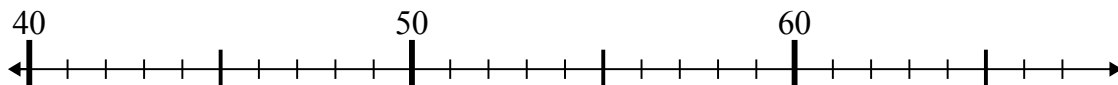
2) $76 - 18 =$



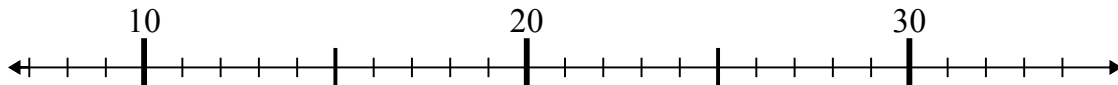
3) $57 + 5 =$



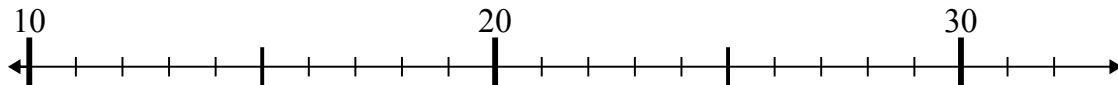
4) $40 + 8 =$



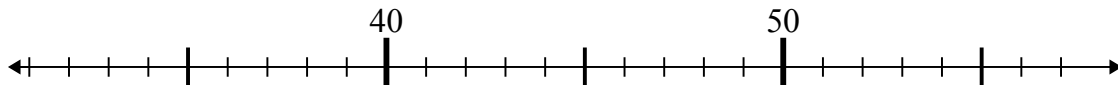
5) $8 + 20 =$



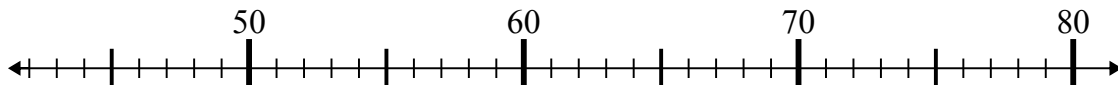
6) $13 + 4 =$



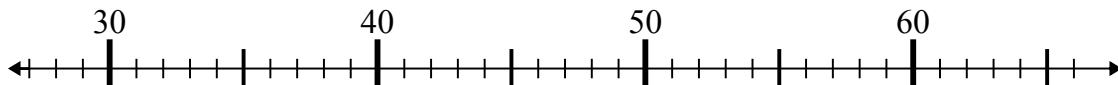
7) $56 - 18 =$



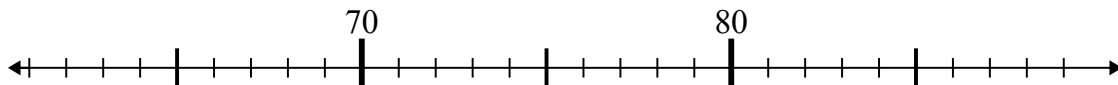
8) $61 - 13 =$



9) $40 + 16 =$



10) $78 + 3 =$



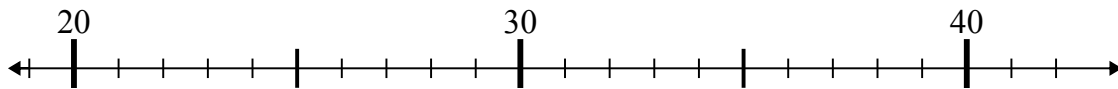
1. _____
2. _____
3. _____
4. _____
5. _____
6. _____
7. _____
8. _____
9. _____
10. _____



Dùng trục số để giải phép tính.

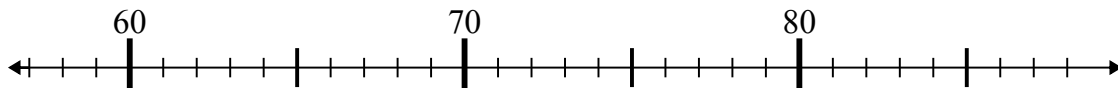
Câu trả lời

1) $31 + 4 =$



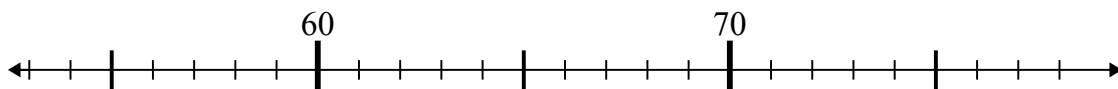
1. 35

2) $76 - 18 =$



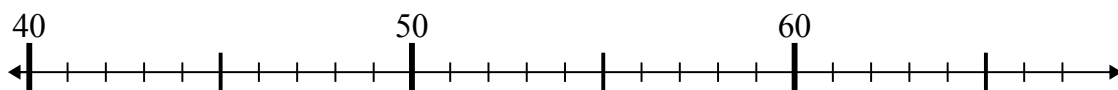
2. 58

3) $57 + 5 =$



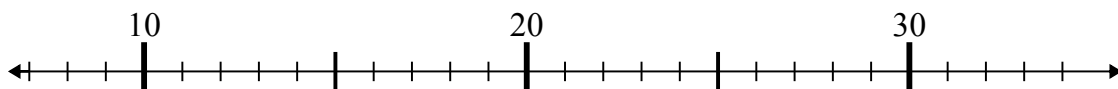
3. 62

4) $40 + 8 =$



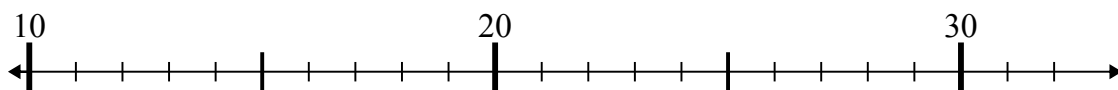
4. 48

5) $8 + 20 =$



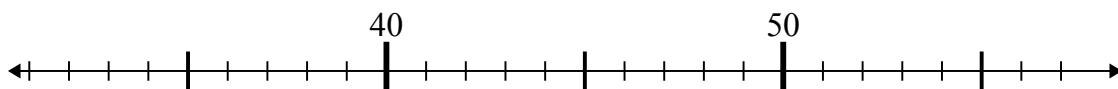
5. 28

6) $13 + 4 =$



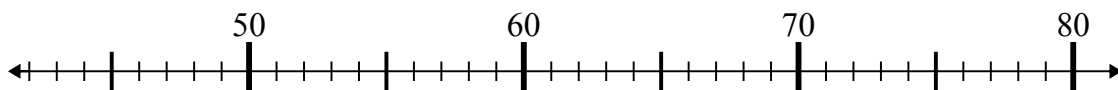
6. 17

7) $56 - 18 =$



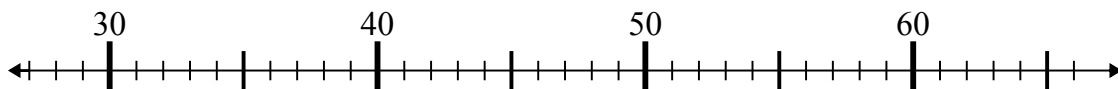
7. 38

8) $61 - 13 =$



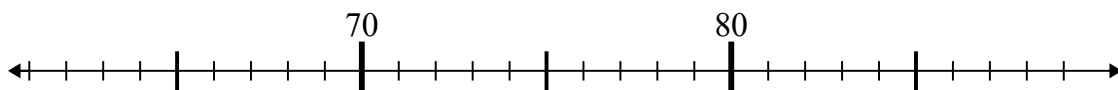
8. 48

9) $40 + 16 =$



9. 56

10) $78 + 3 =$



10. 81