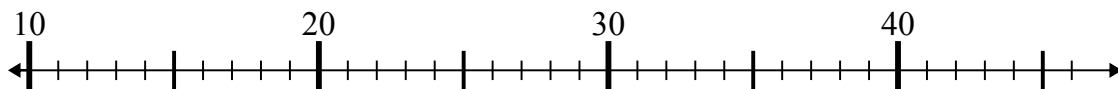


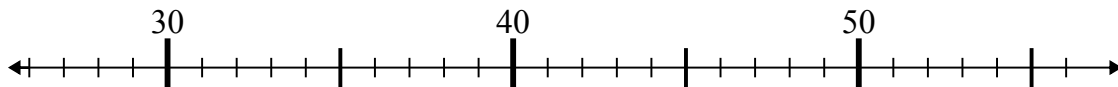


Dùng trục số để giải phép tính.

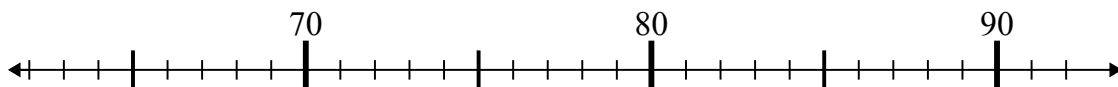
1)  $24 - 11 =$



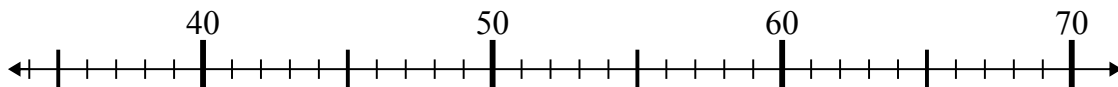
2)  $29 + 6 =$



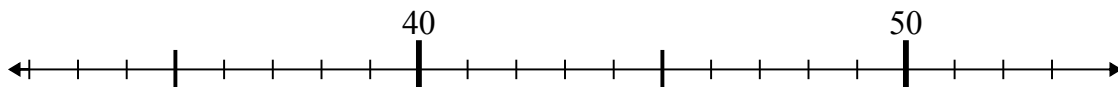
3)  $72 + 7 =$



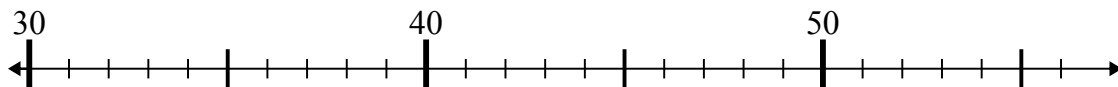
4)  $41 + 16 =$



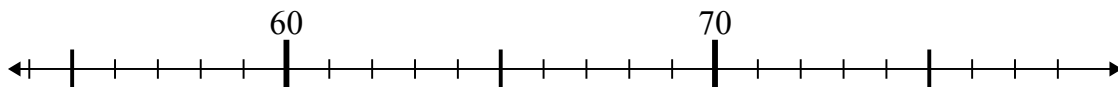
5)  $51 - 3 =$



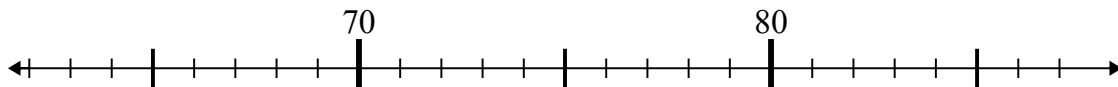
6)  $35 - 0 =$



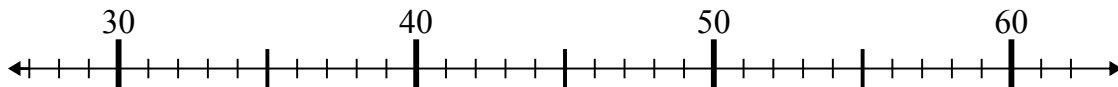
7)  $65 + 10 =$



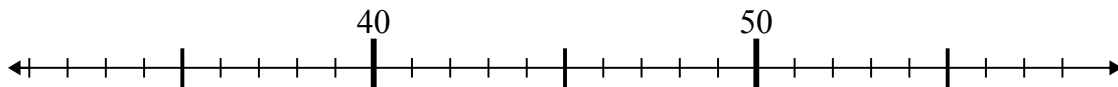
8)  $65 + 14 =$



9)  $57 - 16 =$



10)  $58 - 19 =$



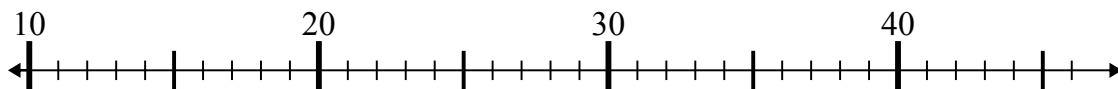
**Câu trả lời**

1. \_\_\_\_\_
2. \_\_\_\_\_
3. \_\_\_\_\_
4. \_\_\_\_\_
5. \_\_\_\_\_
6. \_\_\_\_\_
7. \_\_\_\_\_
8. \_\_\_\_\_
9. \_\_\_\_\_
10. \_\_\_\_\_

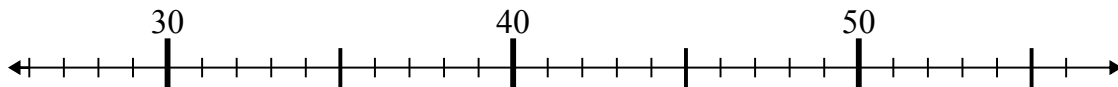


Dùng trục số để giải phép tính.

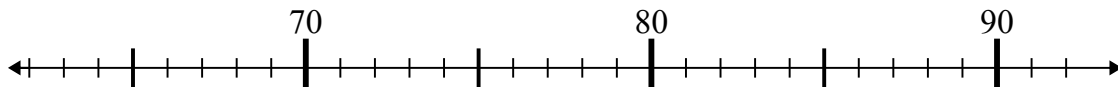
1)  $24 - 11 =$



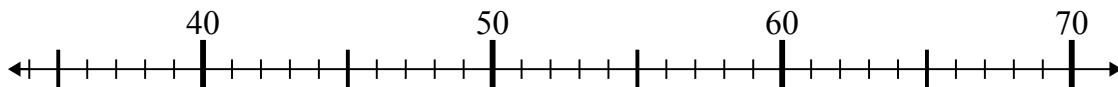
2)  $29 + 6 =$



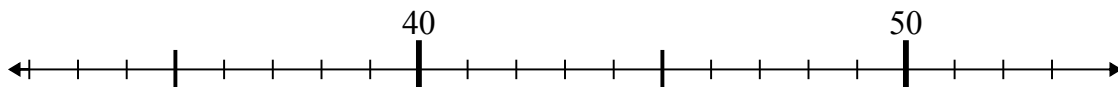
3)  $72 + 7 =$



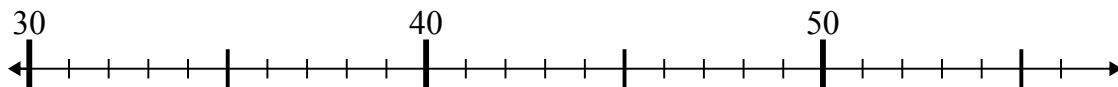
4)  $41 + 16 =$



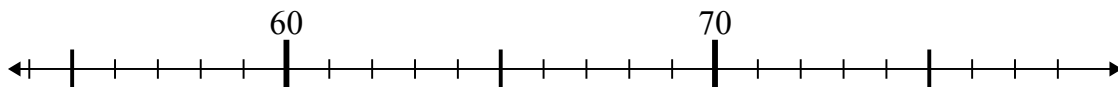
5)  $51 - 3 =$



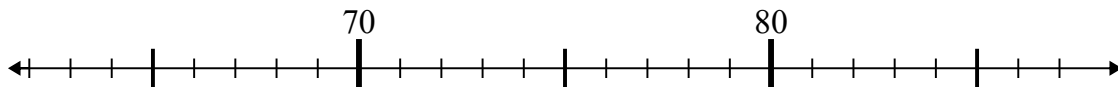
6)  $35 - 0 =$



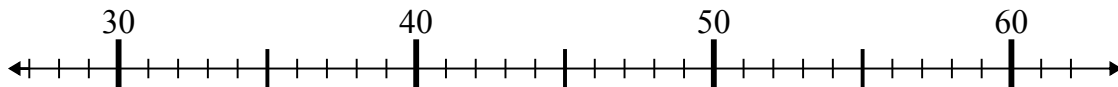
7)  $65 + 10 =$



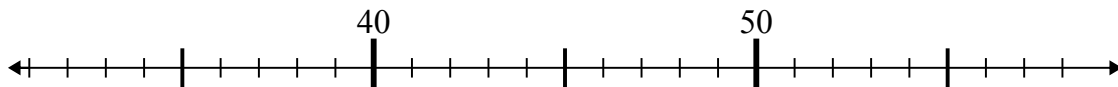
8)  $65 + 14 =$



9)  $57 - 16 =$



10)  $58 - 19 =$



**Câu trả lời**

1. 13
2. 35
3. 79
4. 57
5. 48
6. 35
7. 75
8. 79
9. 41
10. 39