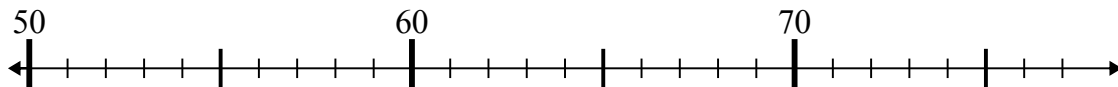




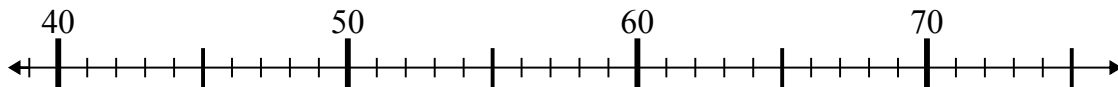
Dùng trục số để giải phép tính.

**Câu trả lời**

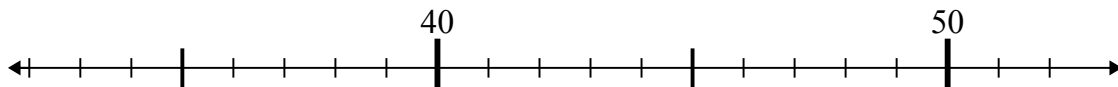
1)  $70 - 16 =$



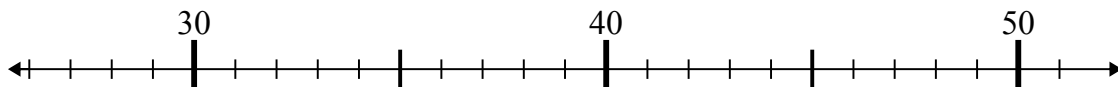
2)  $39 + 6 =$



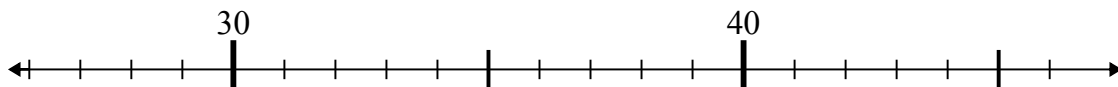
3)  $46 + 3 =$



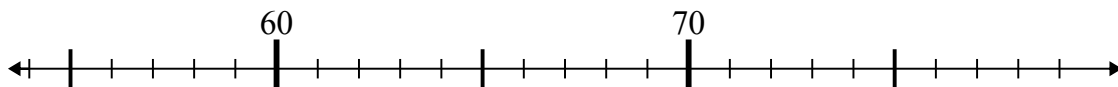
4)  $31 + 8 =$



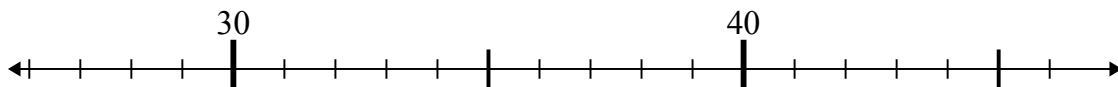
5)  $36 - 1 =$



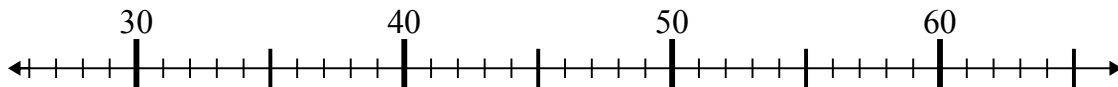
6)  $70 + 8 =$



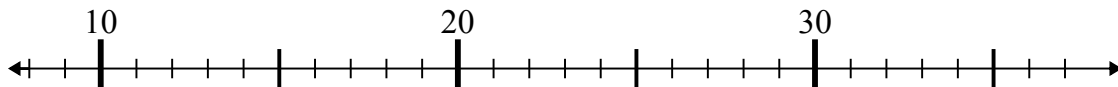
7)  $46 - 1 =$



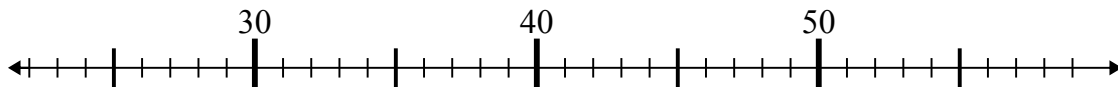
8)  $27 + 8 =$



9)  $18 + 1 =$



10)  $25 + 3 =$



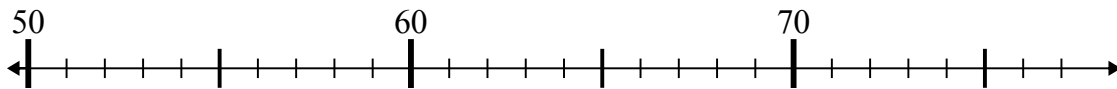
1. \_\_\_\_\_
2. \_\_\_\_\_
3. \_\_\_\_\_
4. \_\_\_\_\_
5. \_\_\_\_\_
6. \_\_\_\_\_
7. \_\_\_\_\_
8. \_\_\_\_\_
9. \_\_\_\_\_
10. \_\_\_\_\_



Dùng trục số để giải phép tính.

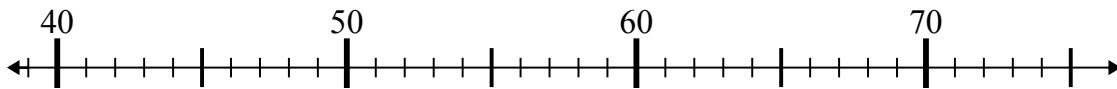
**Câu trả lời**

1)  $70 - 16 =$



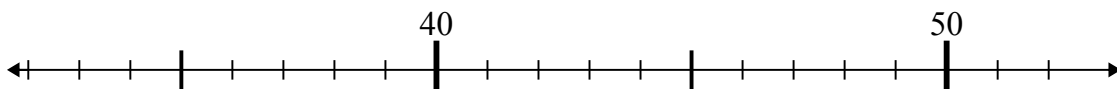
1. 54

2)  $39 + 6 =$



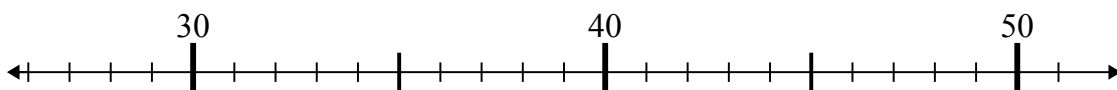
2. 45

3)  $46 + 3 =$



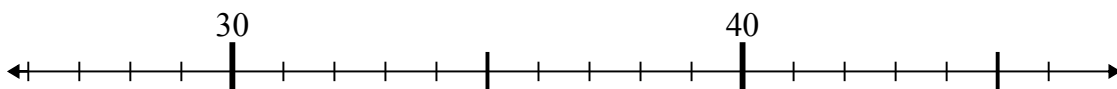
3. 49

4)  $31 + 8 =$



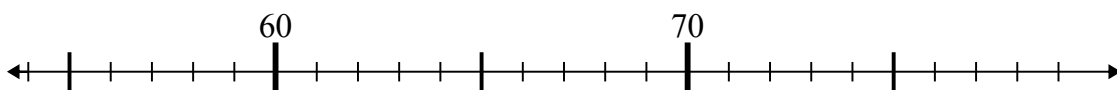
4. 39

5)  $36 - 1 =$



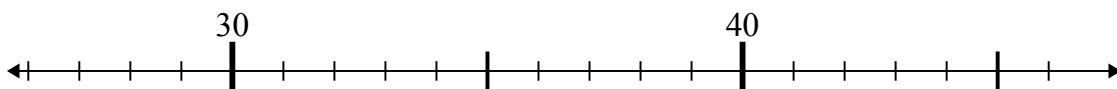
5. 35

6)  $70 + 8 =$



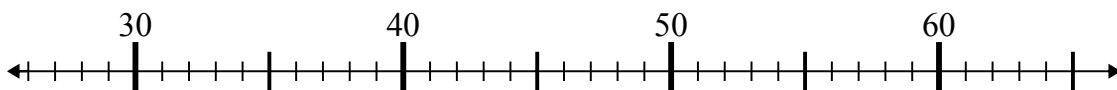
6. 78

7)  $46 - 1 =$



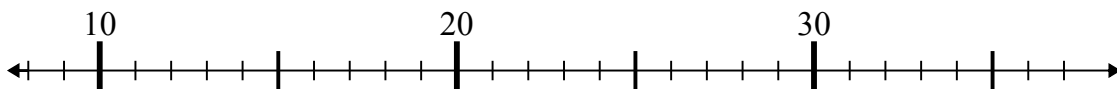
7. 45

8)  $27 + 8 =$



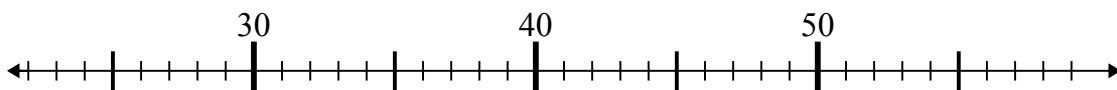
8. 35

9)  $18 + 1 =$



9. 19

10)  $25 + 3 =$



10. 28