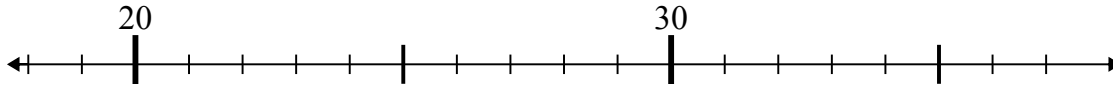


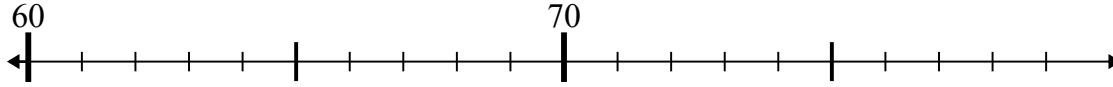


Dùng trục số để giải phép tính.

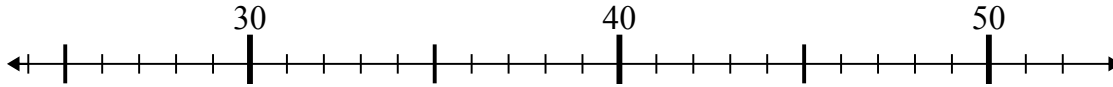
1)  $23 - 4 =$



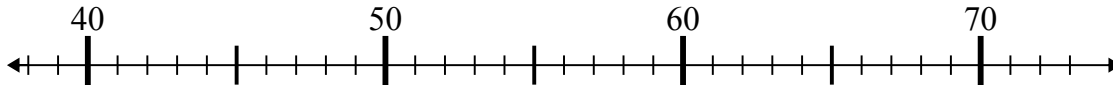
2)  $73 - 6 =$



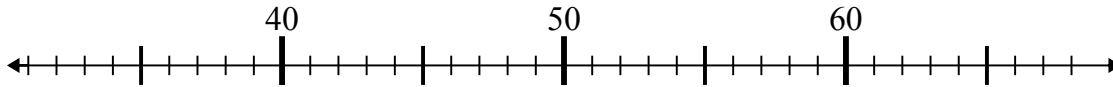
3)  $44 + 2 =$



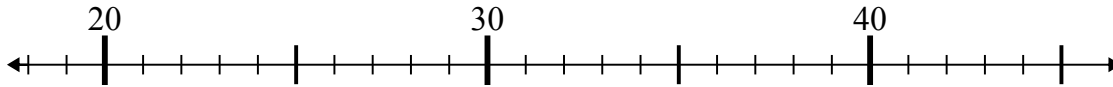
4)  $42 + 1 =$



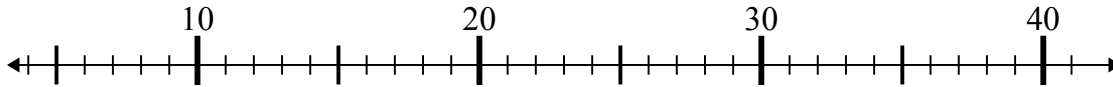
5)  $40 + 13 =$



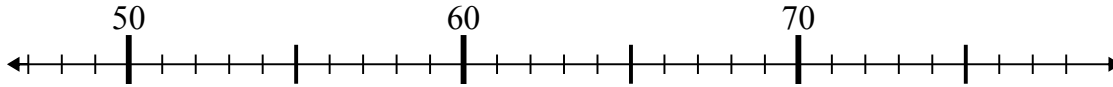
6)  $26 + 0 =$



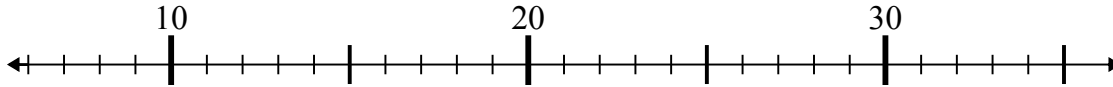
7)  $36 - 27 =$



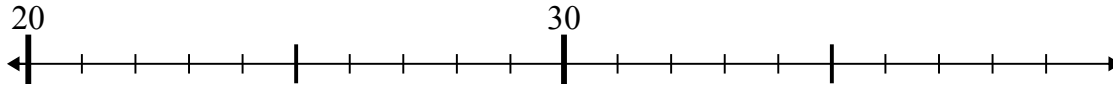
8)  $54 - 5 =$



9)  $10 + 1 =$



10)  $24 + 1 =$



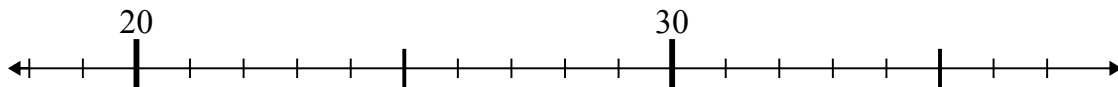
**Câu trả lời**

1. \_\_\_\_\_
2. \_\_\_\_\_
3. \_\_\_\_\_
4. \_\_\_\_\_
5. \_\_\_\_\_
6. \_\_\_\_\_
7. \_\_\_\_\_
8. \_\_\_\_\_
9. \_\_\_\_\_
10. \_\_\_\_\_

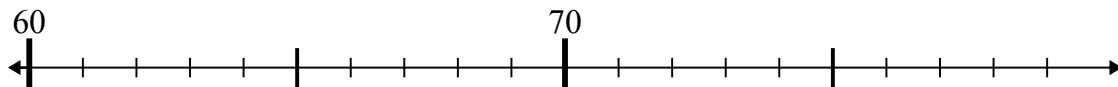


Dùng trục số để giải phép tính.

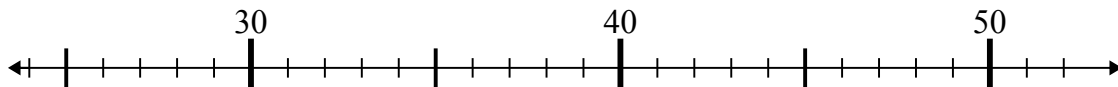
1)  $23 - 4 =$



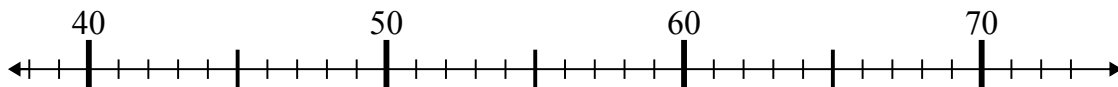
2)  $73 - 6 =$



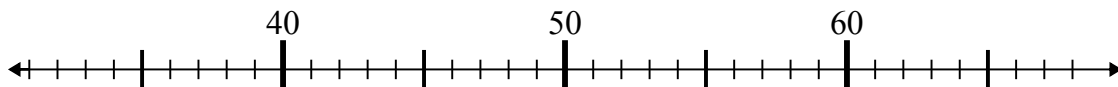
3)  $44 + 2 =$



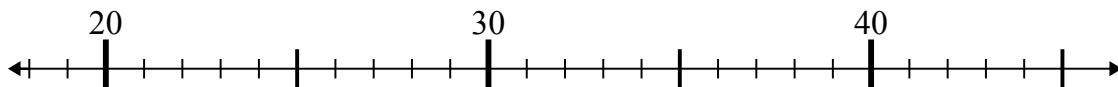
4)  $42 + 1 =$



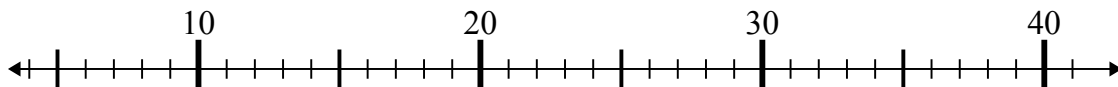
5)  $40 + 13 =$



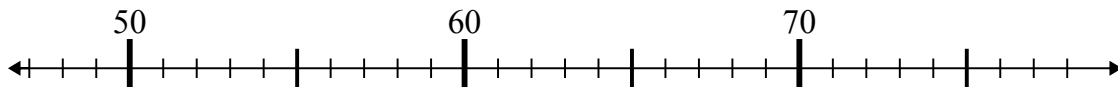
6)  $26 + 0 =$



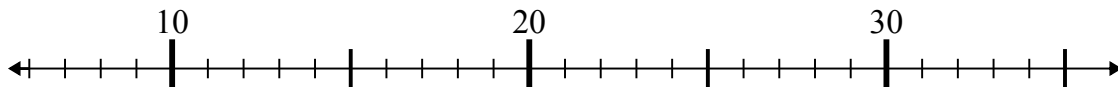
7)  $36 - 27 =$



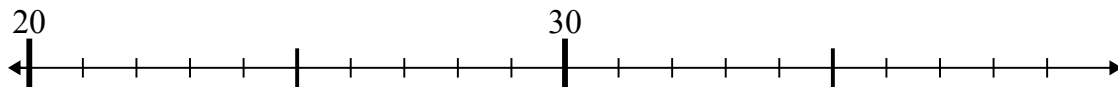
8)  $54 - 5 =$



9)  $10 + 1 =$



10)  $24 + 1 =$



**Câu trả lời**

1. **19**

2. **67**

3. **46**

4. **43**

5. **53**

6. **26**

7. **9**

8. **49**

9. **11**

10. **25**