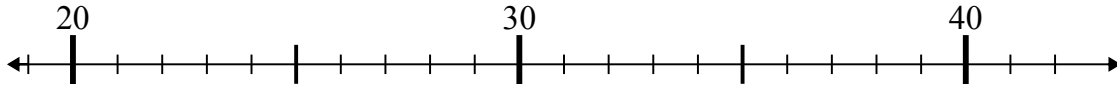




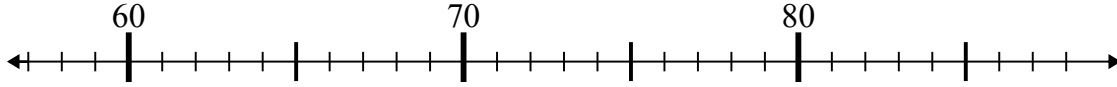
Dùng trục số để giải phép tính.

Câu trả lời

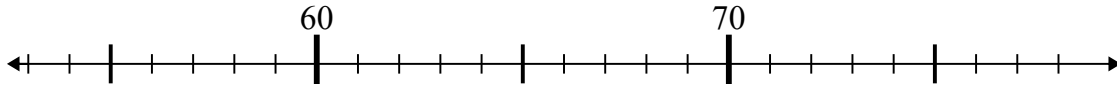
1) $31 + 4 =$



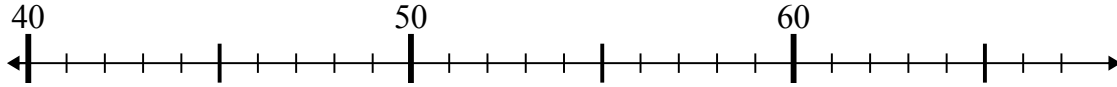
2) $76 - 18 =$



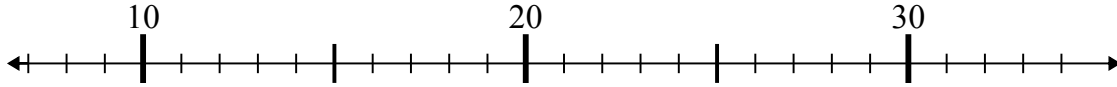
3) $57 + 5 =$



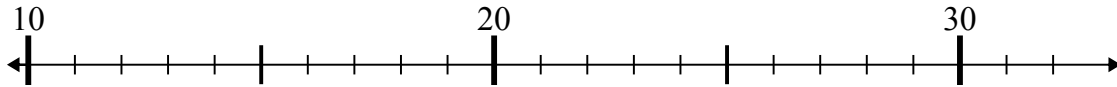
4) $40 + 8 =$



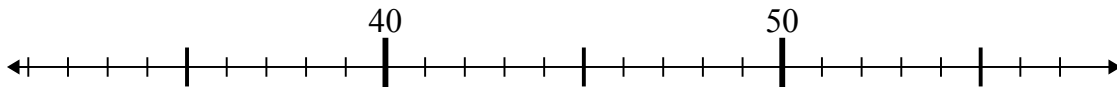
5) $8 + 20 =$



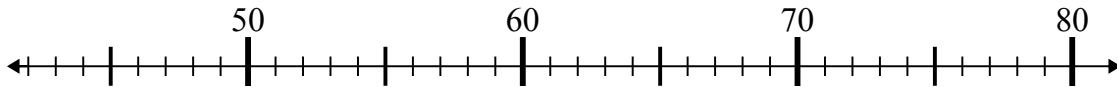
6) $13 + 4 =$



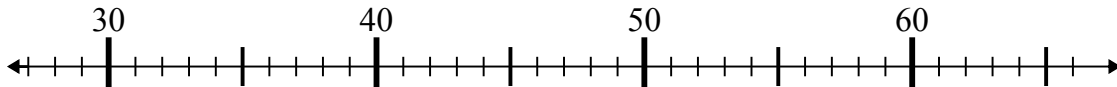
7) $56 - 18 =$



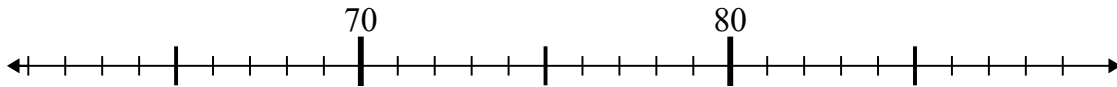
8) $61 - 13 =$



9) $40 + 16 =$



10) $78 + 3 =$



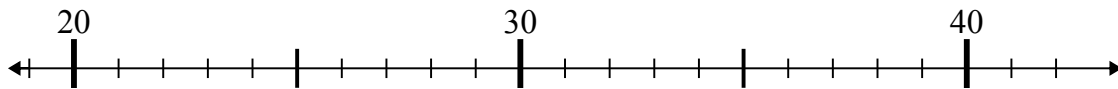
1. _____
2. _____
3. _____
4. _____
5. _____
6. _____
7. _____
8. _____
9. _____
10. _____



Dùng trục số để giải phép tính.

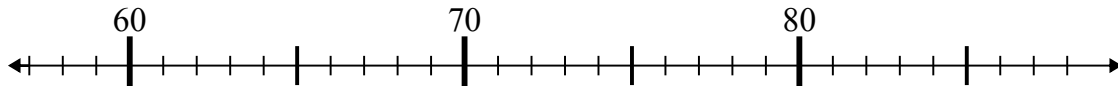
Câu trả lời

1) $31 + 4 =$



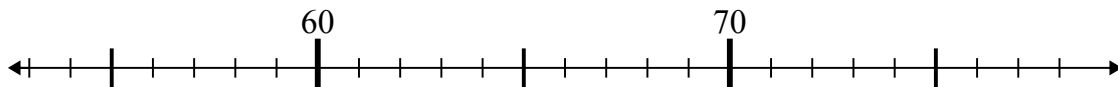
1. 35

2) $76 - 18 =$



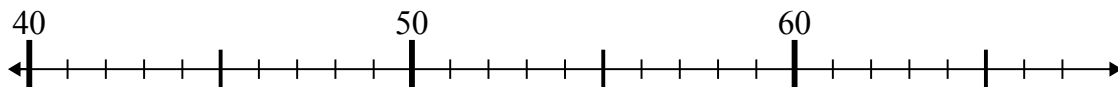
2. 58

3) $57 + 5 =$



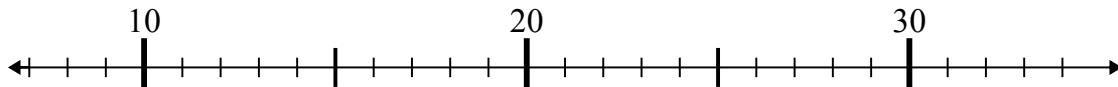
3. 62

4) $40 + 8 =$



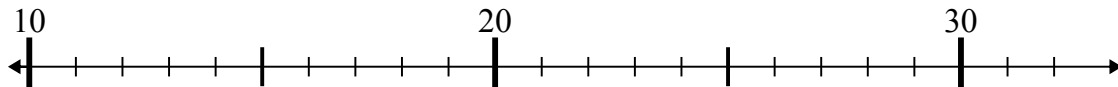
4. 48

5) $8 + 20 =$



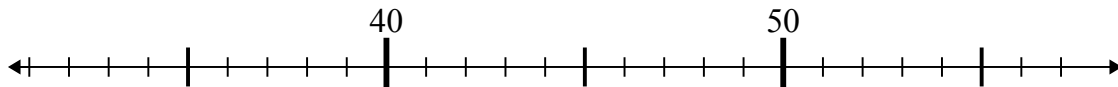
5. 28

6) $13 + 4 =$



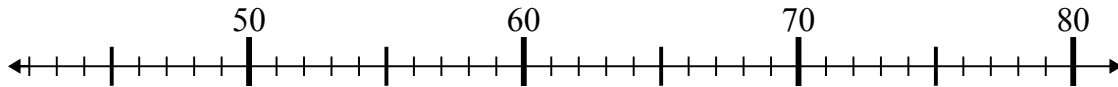
6. 17

7) $56 - 18 =$



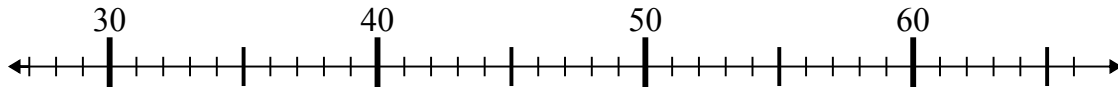
7. 38

8) $61 - 13 =$



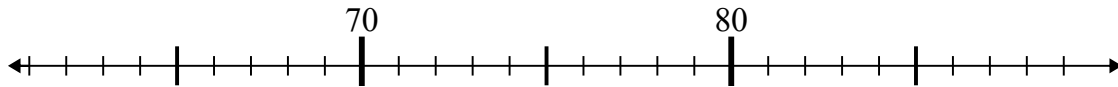
8. 48

9) $40 + 16 =$



9. 56

10) $78 + 3 =$



10. 81