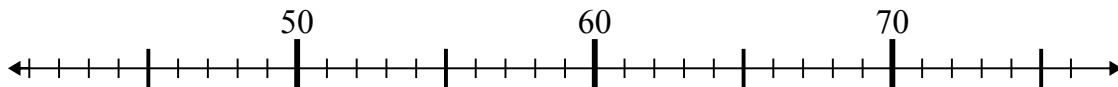


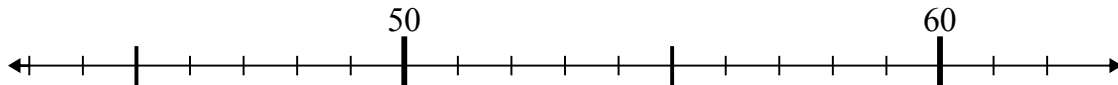


Dùng trục số để giải phép tính.

1)  $52 - 10 =$



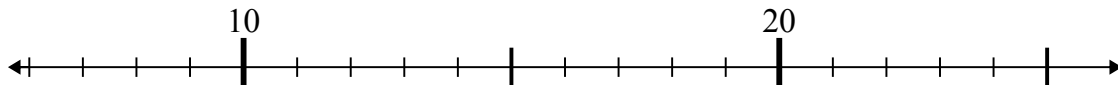
2)  $60 - 1 =$



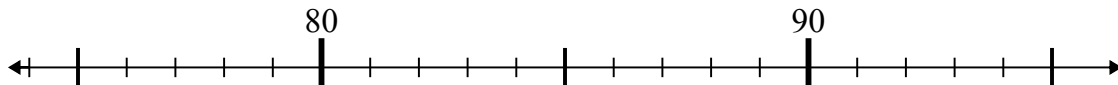
3)  $58 - 6 =$



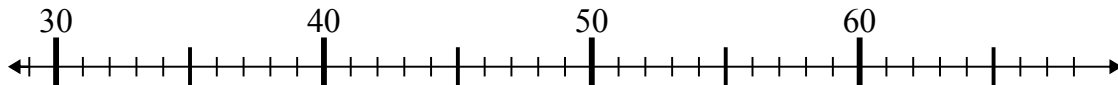
4)  $13 - 1 =$



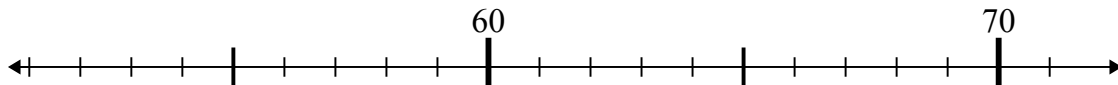
5)  $86 + 9 =$



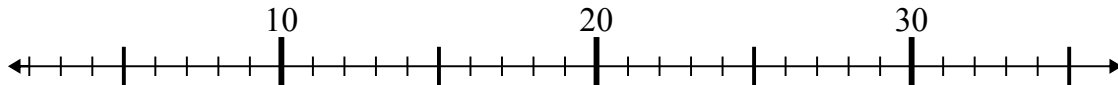
6)  $31 + 26 =$



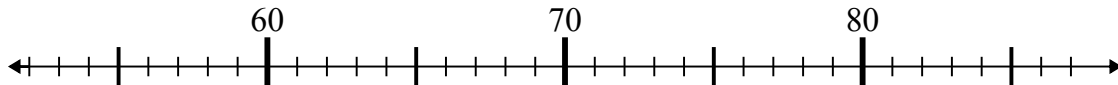
7)  $55 + 2 =$



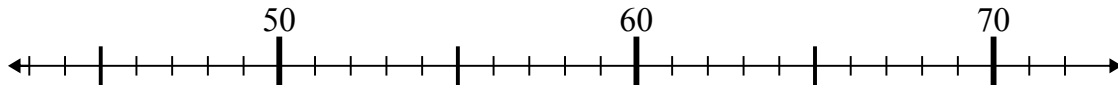
8)  $35 - 18 =$



9)  $76 - 24 =$



10)  $46 + 15 =$



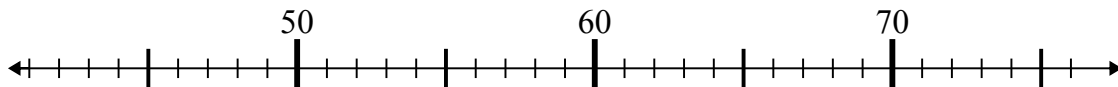
**Câu trả lời**

1. \_\_\_\_\_
2. \_\_\_\_\_
3. \_\_\_\_\_
4. \_\_\_\_\_
5. \_\_\_\_\_
6. \_\_\_\_\_
7. \_\_\_\_\_
8. \_\_\_\_\_
9. \_\_\_\_\_
10. \_\_\_\_\_

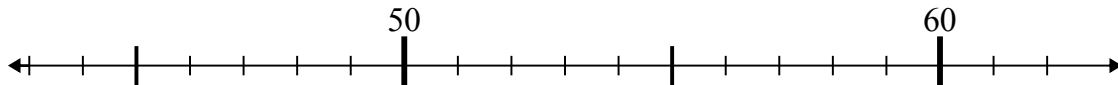


Dùng trục số để giải phép tính.

1)  $52 - 10 =$



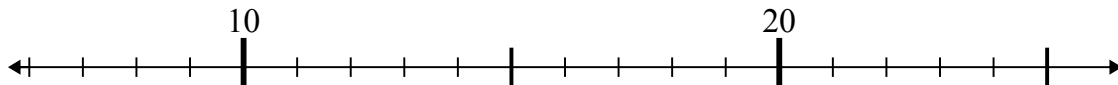
2)  $60 - 1 =$



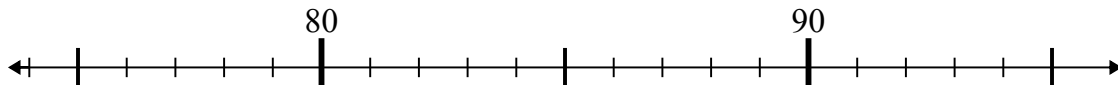
3)  $58 - 6 =$



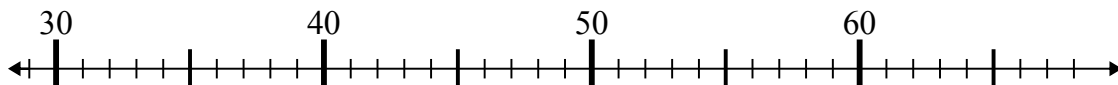
4)  $13 - 1 =$



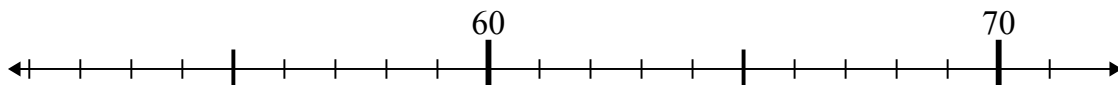
5)  $86 + 9 =$



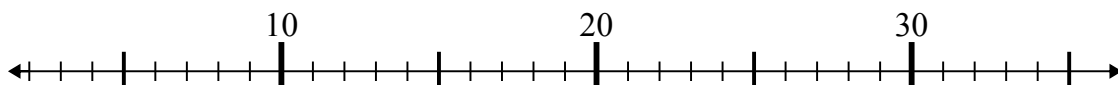
6)  $31 + 26 =$



7)  $55 + 2 =$



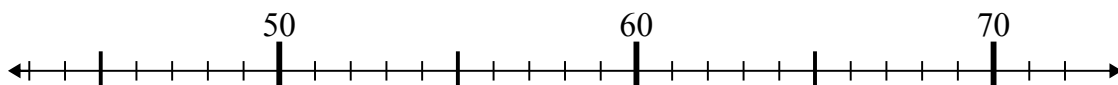
8)  $35 - 18 =$



9)  $76 - 24 =$



10)  $46 + 15 =$



**Câu trả lời**

1. 42
2. 59
3. 52
4. 12
5. 95
6. 57
7. 57
8. 17
9. 52
10. 61