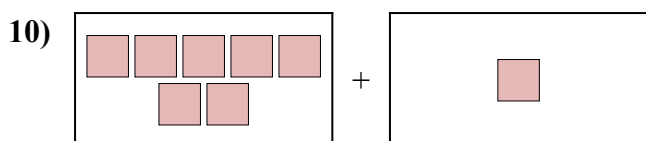
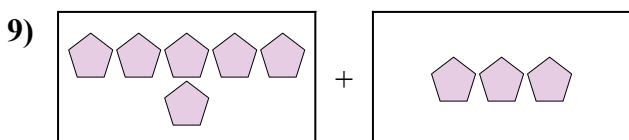
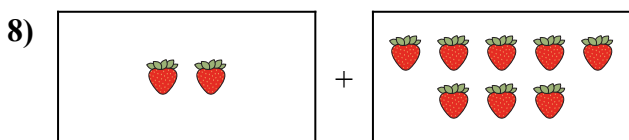
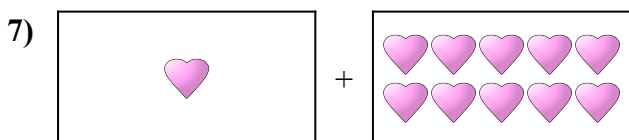
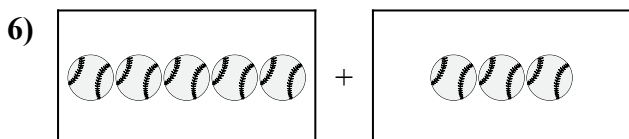
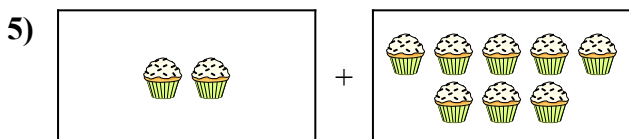
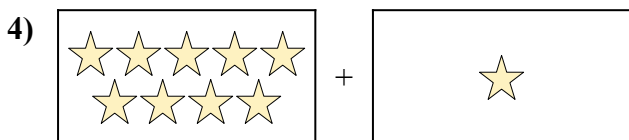
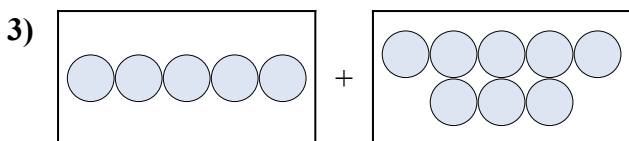
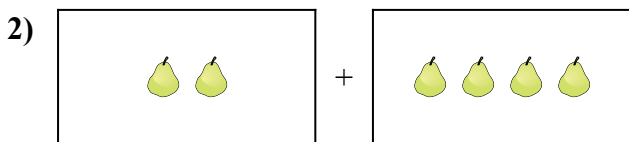
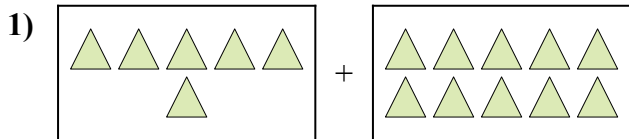




Diễn đạt bài toán trực quan dưới dạng một phương trình có đáp án.

Câu trả lời

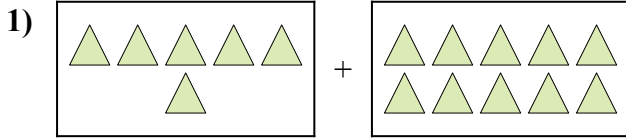


1. \_\_\_\_\_
2. \_\_\_\_\_
3. \_\_\_\_\_
4. \_\_\_\_\_
5. \_\_\_\_\_
6. \_\_\_\_\_
7. \_\_\_\_\_
8. \_\_\_\_\_
9. \_\_\_\_\_
10. \_\_\_\_\_

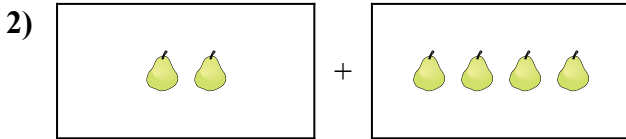


Diễn đạt bài toán trực quan dưới dạng một phương trình có đáp án.

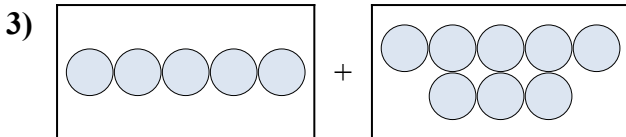
Câu trả lời



1.  $6 + 10 = 16$

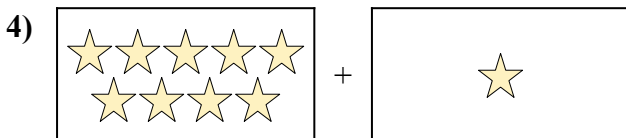


2.  $2 + 4 = 6$



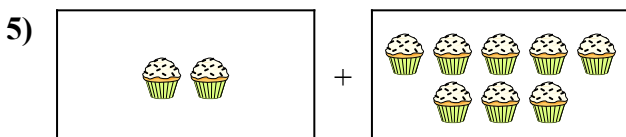
3.  $5 + 8 = 13$

4.  $9 + 1 = 10$



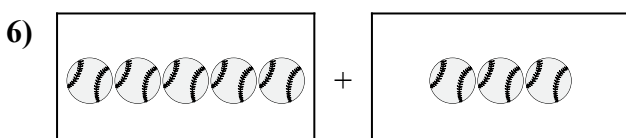
5.  $2 + 8 = 10$

6.  $5 + 3 = 8$



7.  $1 + 10 = 11$

8.  $2 + 8 = 10$



9.  $6 + 3 = 9$

10.  $7 + 1 = 8$

