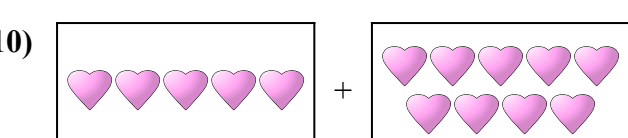

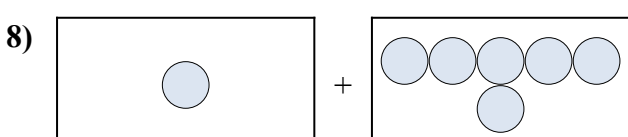
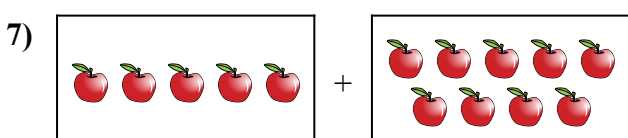

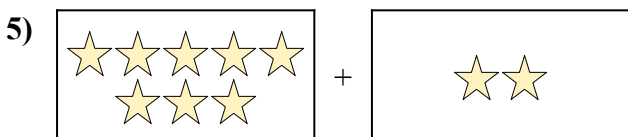
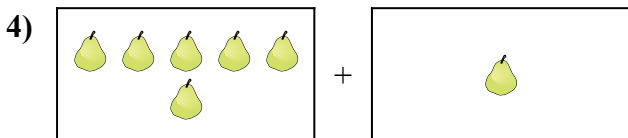
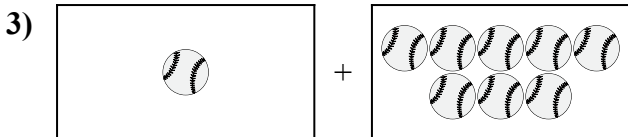
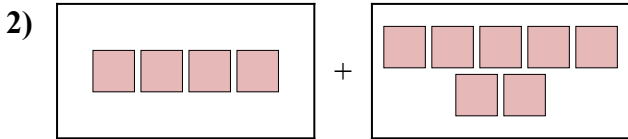
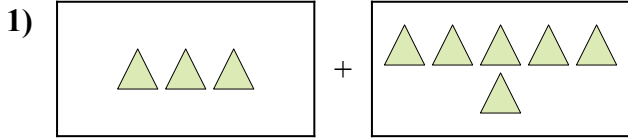




Điền dạng bài toán trực quan dưới dạng một phương trình có đáp án.

Câu trả lời

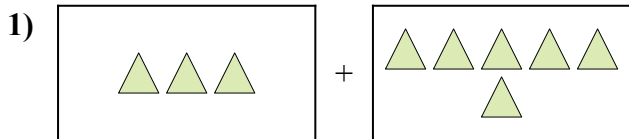


1. \_\_\_\_\_
2. \_\_\_\_\_
3. \_\_\_\_\_
4. \_\_\_\_\_
5. \_\_\_\_\_
6. \_\_\_\_\_
7. \_\_\_\_\_
8. \_\_\_\_\_
9. \_\_\_\_\_
10. \_\_\_\_\_

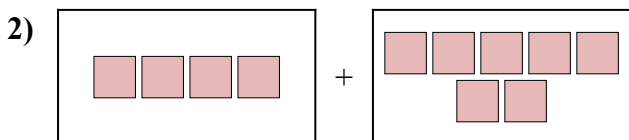


Điền dạng bài toán trực quan dưới dạng một phương trình có đáp án.

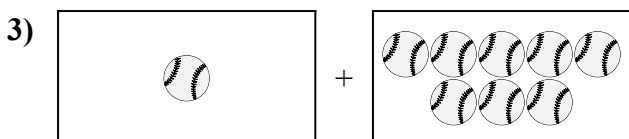
**Câu trả lời**



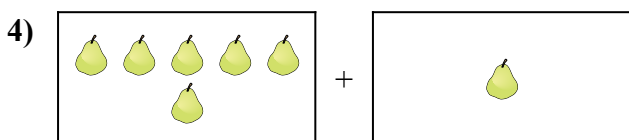
1.  $3 + 6 = 9$



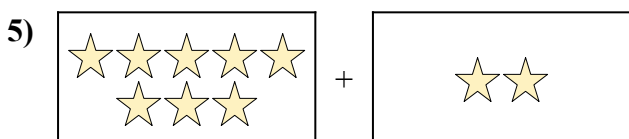
2.  $4 + 7 = 11$




3.  $1 + 8 = 9$



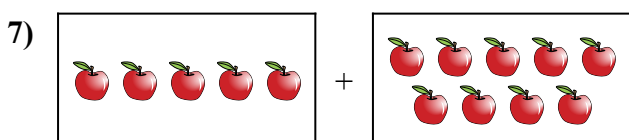
4.  $6 + 1 = 7$



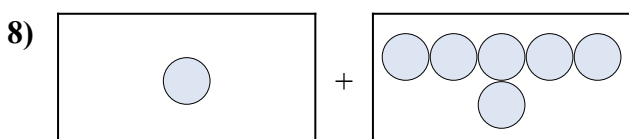
5.  $8 + 2 = 10$



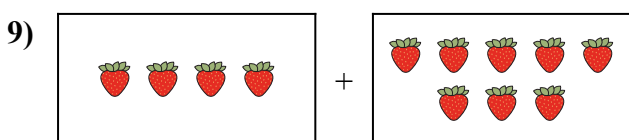
6.  $10 + 9 = 19$



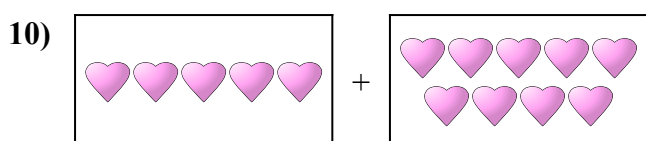
7.  $5 + 9 = 14$



8.  $1 + 6 = 7$



9.  $4 + 8 = 12$

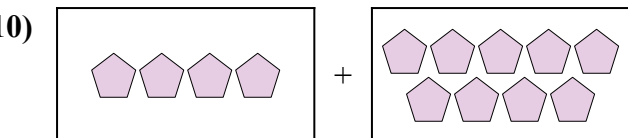
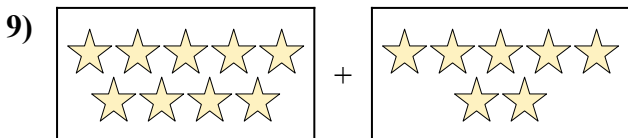
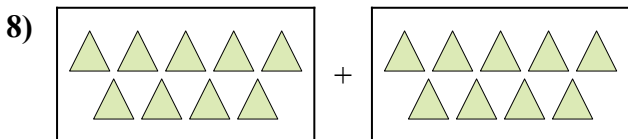

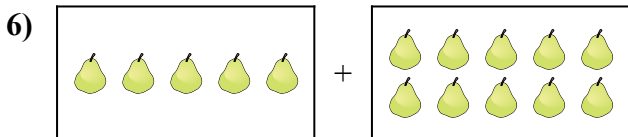
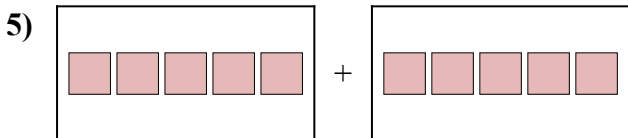
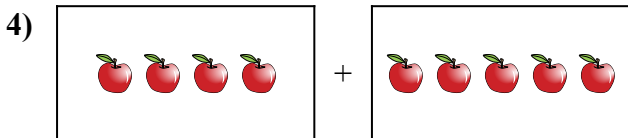

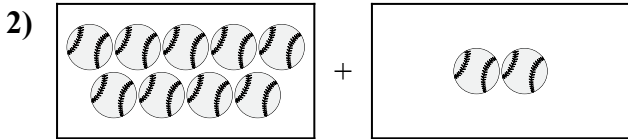
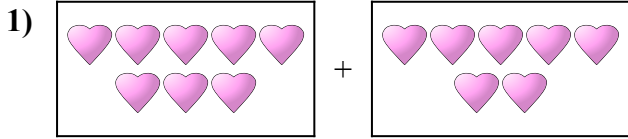


10.  $5 + 9 = 14$



Diễn đạt bài toán trực quan dưới dạng một phương trình có đáp án.

Câu trả lời

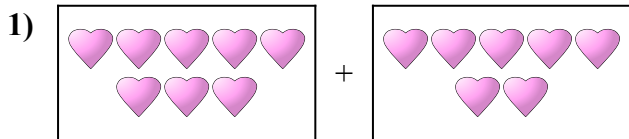


1. \_\_\_\_\_
2. \_\_\_\_\_
3. \_\_\_\_\_
4. \_\_\_\_\_
5. \_\_\_\_\_
6. \_\_\_\_\_
7. \_\_\_\_\_
8. \_\_\_\_\_
9. \_\_\_\_\_
10. \_\_\_\_\_

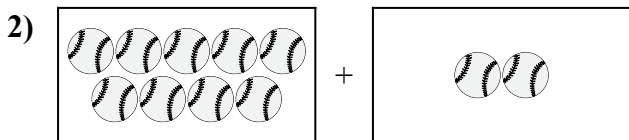


Diễn đạt bài toán trực quan dưới dạng một phương trình có đáp án.


**Câu trả lời**



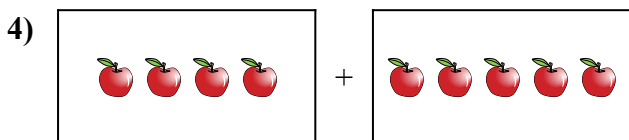
1.  $8 + 7 = 15$



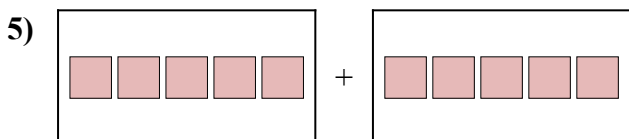
2.  $9 + 2 = 11$



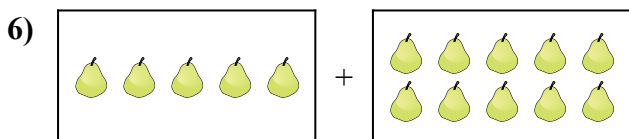
3.  $8 + 7 = 15$




4.  $4 + 5 = 9$



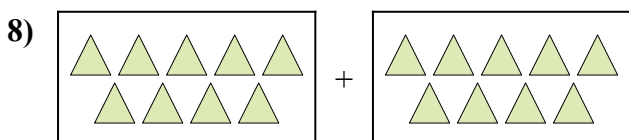
5.  $5 + 5 = 10$



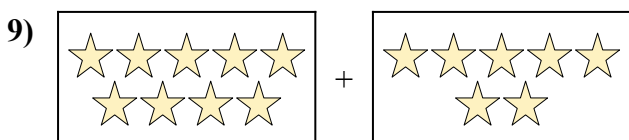
6.  $5 + 10 = 15$



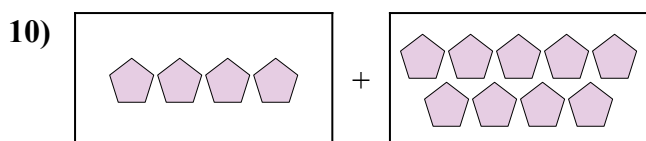
7.  $5 + 7 = 12$



8.  $9 + 9 = 18$



9.  $9 + 7 = 16$





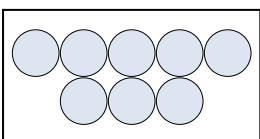
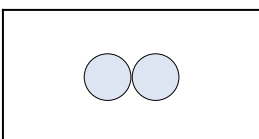
10.  $4 + 9 = 13$







Điền dạng bài toán trực quan dưới dạng một phương trình có đáp án.

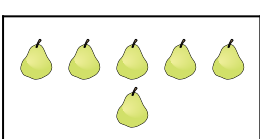
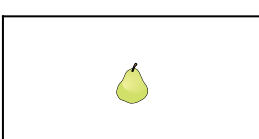
**Câu trả lời**

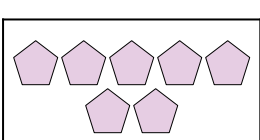
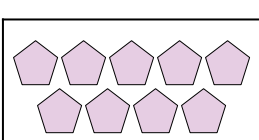
1)  + 

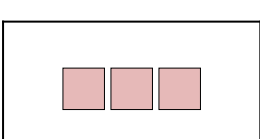
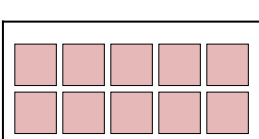
2)  + 



3)  + 



4)  + 


5)  + 

6)  + 

7)  + 

8)  + 

9)  + 


10)  + 

1. \_\_\_\_\_
2. \_\_\_\_\_
3. \_\_\_\_\_
4. \_\_\_\_\_
5. \_\_\_\_\_
6. \_\_\_\_\_
7. \_\_\_\_\_
8. \_\_\_\_\_
9. \_\_\_\_\_
10. \_\_\_\_\_

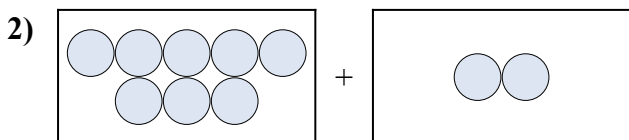


Diễn đạt bài toán trực quan dưới dạng một phương trình có đáp án.

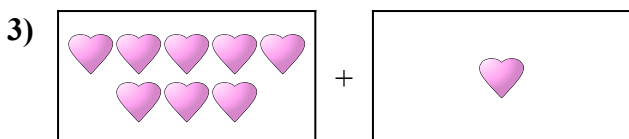
**Câu trả lời**



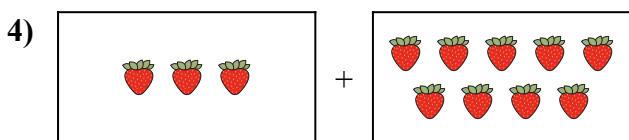
1. 9 + 1 = 10



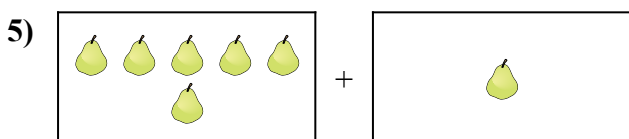
2. 8 + 2 = 10



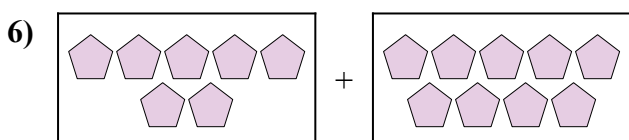
3. 8 + 1 = 9



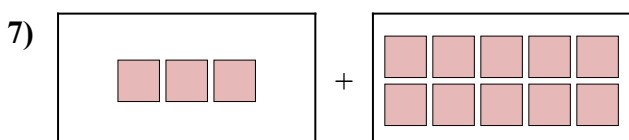
4. 3 + 9 = 12



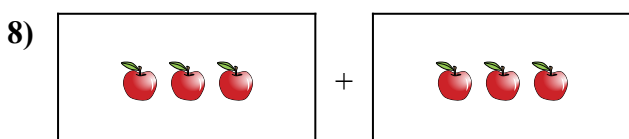
5. 6 + 1 = 7



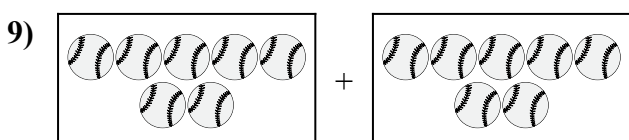
6. 7 + 9 = 16



7. 3 + 10 = 13



8. 3 + 3 = 6



9. 7 + 7 = 14

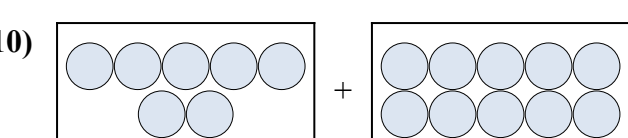

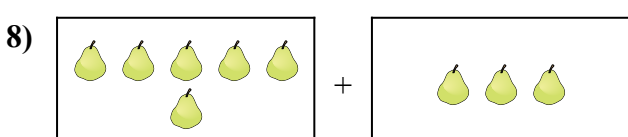

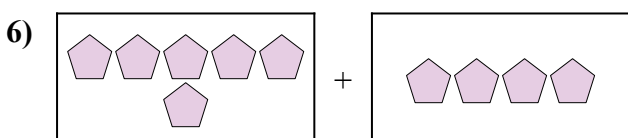
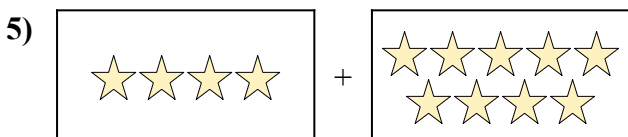
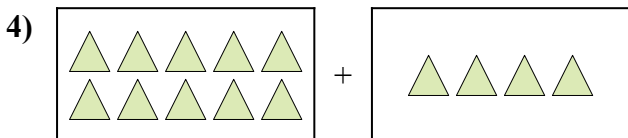
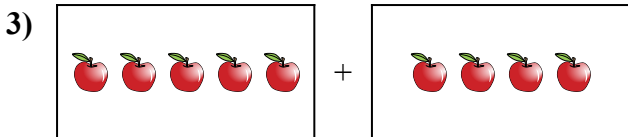
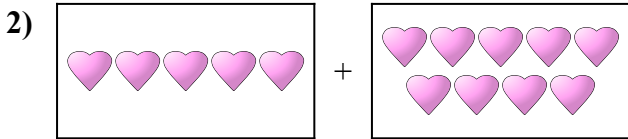
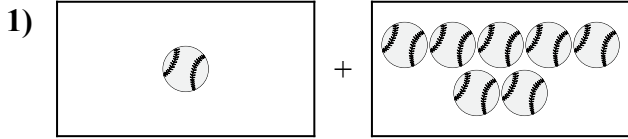


10. 5 + 2 = 7



Diễn đạt bài toán trực quan dưới dạng một phương trình có đáp án.

Câu trả lời

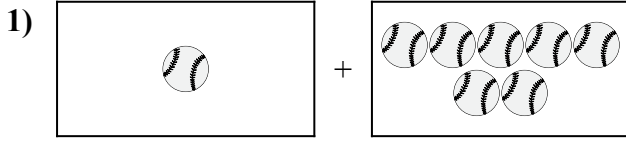


1. \_\_\_\_\_
2. \_\_\_\_\_
3. \_\_\_\_\_
4. \_\_\_\_\_
5. \_\_\_\_\_
6. \_\_\_\_\_
7. \_\_\_\_\_
8. \_\_\_\_\_
9. \_\_\_\_\_
10. \_\_\_\_\_

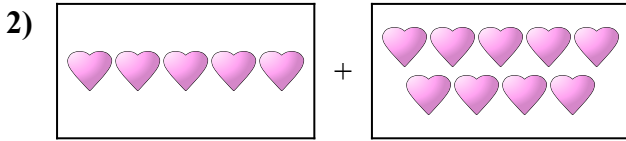


Diễn đạt bài toán trực quan dưới dạng một phương trình có đáp án.

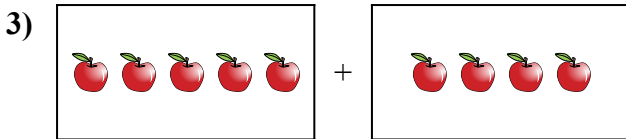
**Câu trả lời**



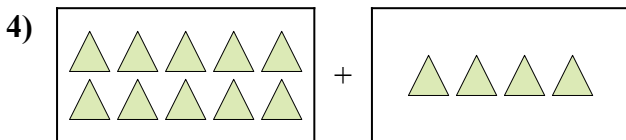
1.  $1 + 7 = 8$



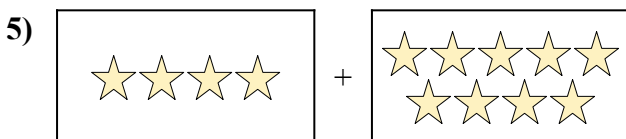
2.  $5 + 9 = 14$



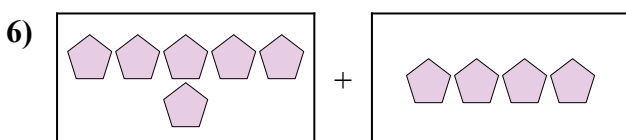
3.  $5 + 4 = 9$




4.  $10 + 4 = 14$



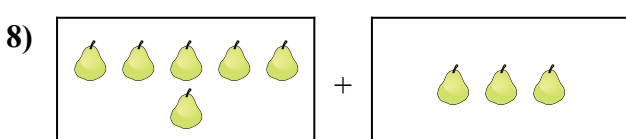
5.  $4 + 9 = 13$




6.  $6 + 4 = 10$



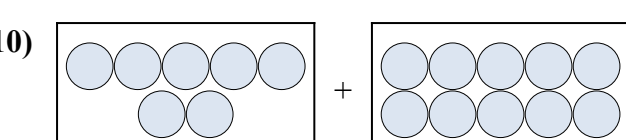
7.  $6 + 10 = 16$



8.  $6 + 3 = 9$



9.  $7 + 4 = 11$



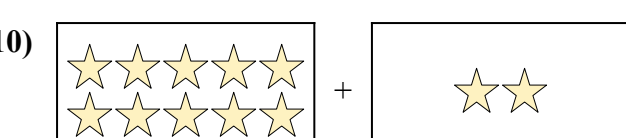
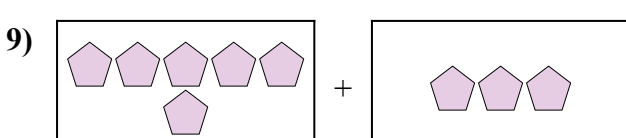
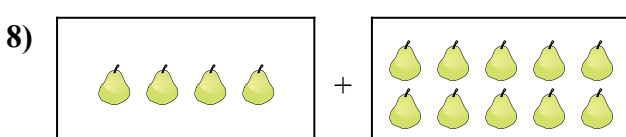
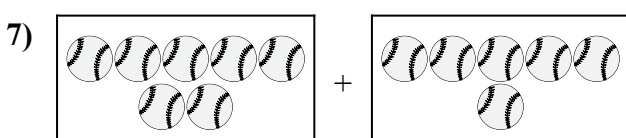

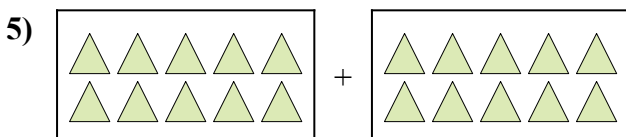
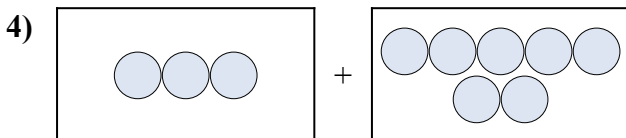
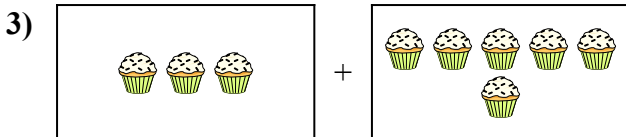
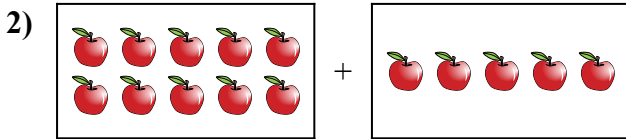
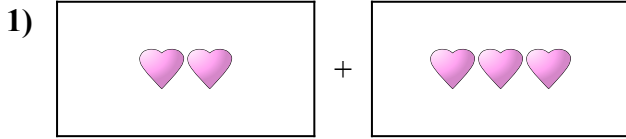
10.  $7 + 10 = 17$





Điền dạng bài toán trực quan dưới dạng một phương trình có đáp án.

Câu trả lời

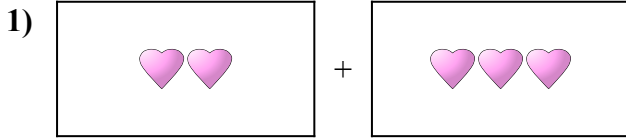


1. \_\_\_\_\_
2. \_\_\_\_\_
3. \_\_\_\_\_
4. \_\_\_\_\_
5. \_\_\_\_\_
6. \_\_\_\_\_
7. \_\_\_\_\_
8. \_\_\_\_\_
9. \_\_\_\_\_
10. \_\_\_\_\_

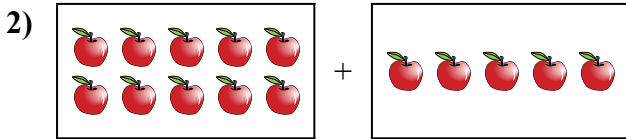


Điền dạng bài toán trực quan dưới dạng một phương trình có đáp án.

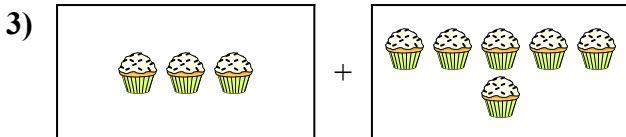
**Câu trả lời**



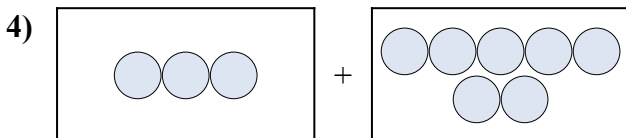
1.  $2 + 3 = 5$



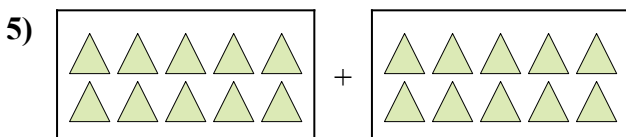
2.  $10 + 5 = 15$




3.  $3 + 6 = 9$



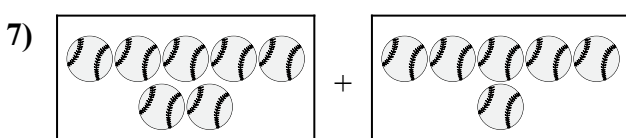
4.  $3 + 7 = 10$



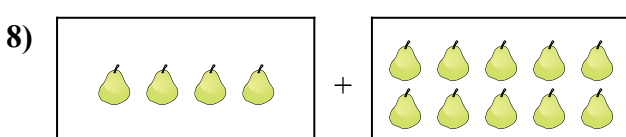
5.  $10 + 10 = 20$



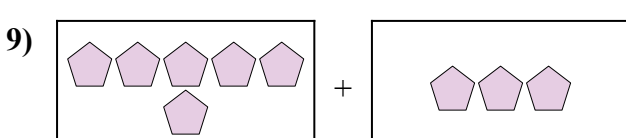
6.  $10 + 3 = 13$



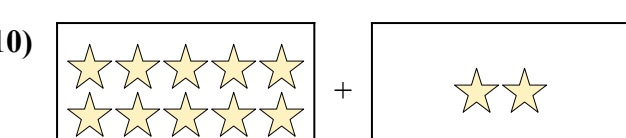
7.  $7 + 6 = 13$



8.  $4 + 10 = 14$



9.  $6 + 3 = 9$

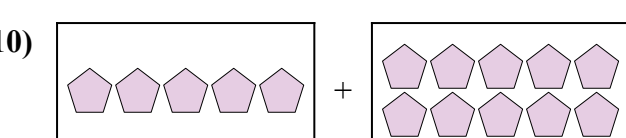
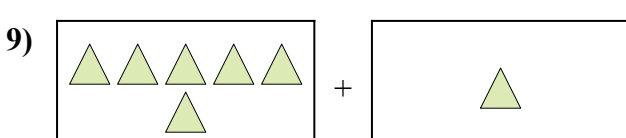
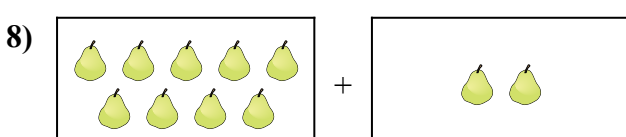
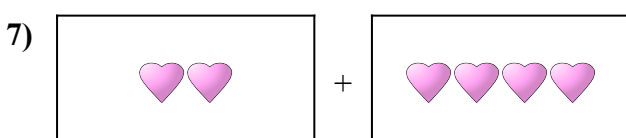
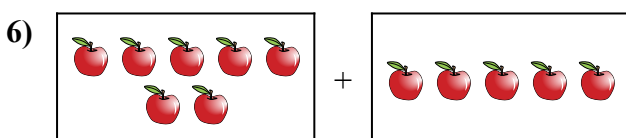
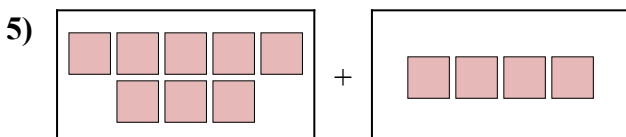
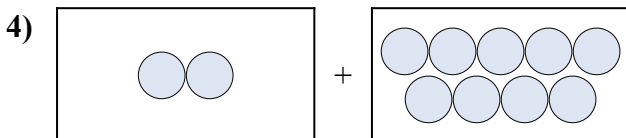
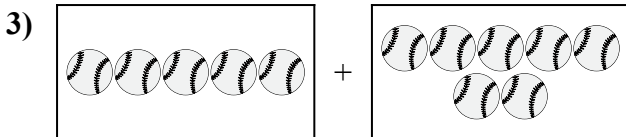

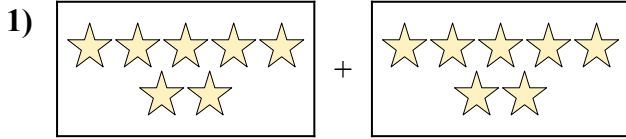


10.  $10 + 2 = 12$



Diễn đạt bài toán trực quan dưới dạng một phương trình có đáp án.

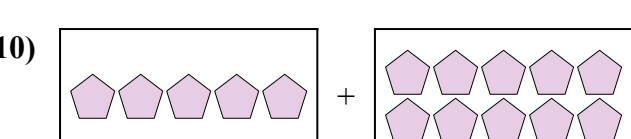
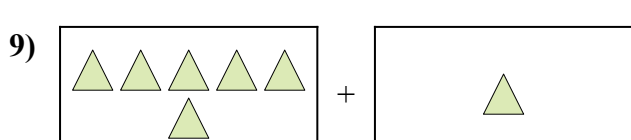
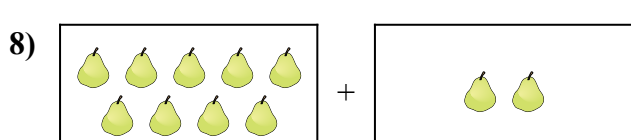
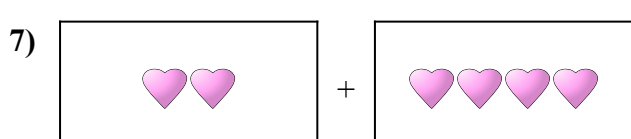
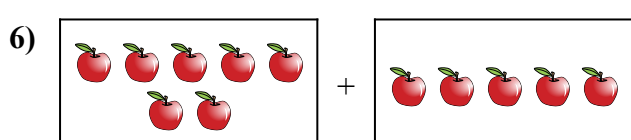
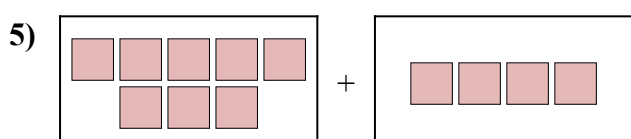
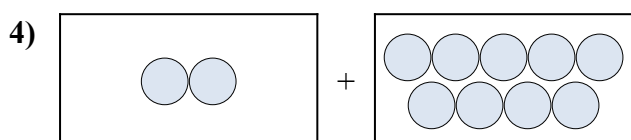
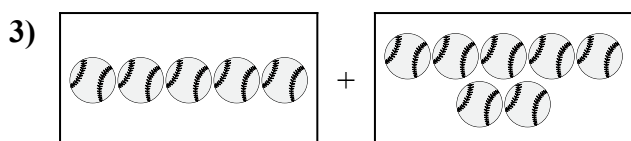

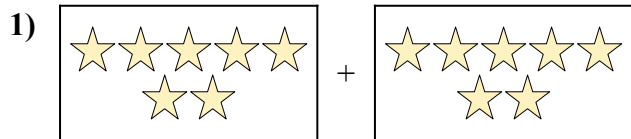
Câu trả lời



1. \_\_\_\_\_
2. \_\_\_\_\_
3. \_\_\_\_\_
4. \_\_\_\_\_
5. \_\_\_\_\_
6. \_\_\_\_\_
7. \_\_\_\_\_
8. \_\_\_\_\_
9. \_\_\_\_\_
10. \_\_\_\_\_



Diễn đạt bài toán trực quan dưới dạng một phương trình có đáp án.



**Câu trả lời**

1.  $7 + 7 = 14$

2.  $6 + 1 = 7$

3.  $5 + 7 = 12$

4.  $2 + 9 = 11$

5.  $8 + 4 = 12$

6.  $7 + 5 = 12$

7.  $2 + 4 = 6$

8.  $9 + 2 = 11$

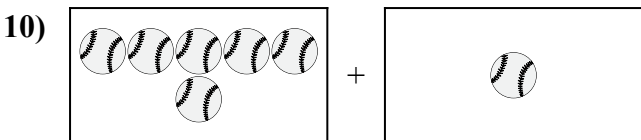
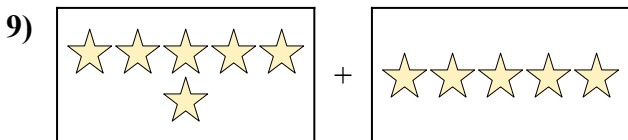
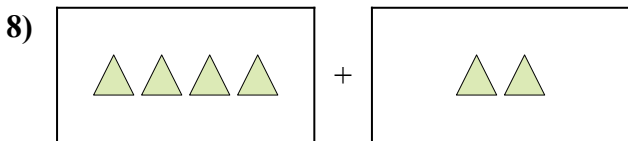
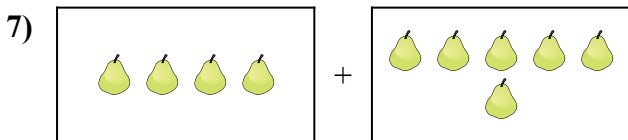
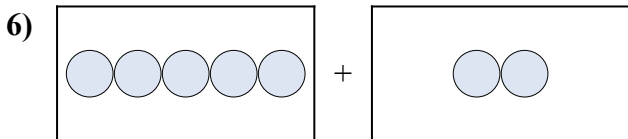
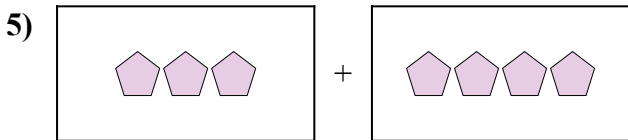
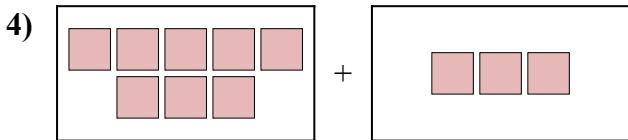

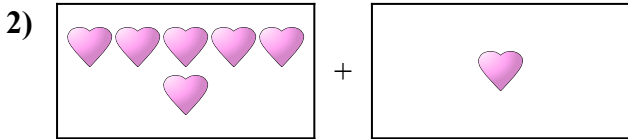
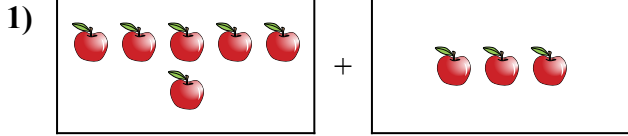
9.  $6 + 1 = 7$

10.  $5 + 10 = 15$



Diễn đạt bài toán trực quan dưới dạng một phương trình có đáp án.

Câu trả lời

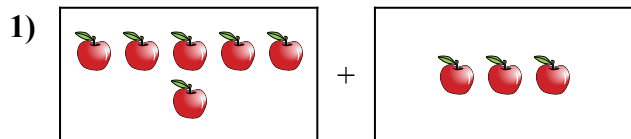


1. \_\_\_\_\_
2. \_\_\_\_\_
3. \_\_\_\_\_
4. \_\_\_\_\_
5. \_\_\_\_\_
6. \_\_\_\_\_
7. \_\_\_\_\_
8. \_\_\_\_\_
9. \_\_\_\_\_
10. \_\_\_\_\_

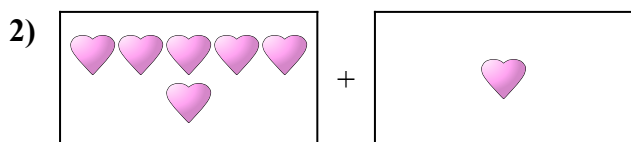


Diễn đạt bài toán trực quan dưới dạng một phương trình có đáp án.


Câu trả lời



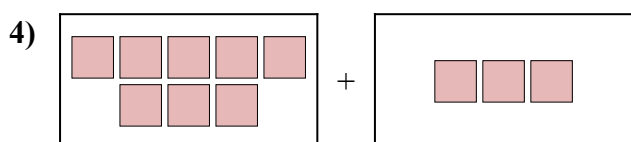
1.  $6 + 3 = 9$



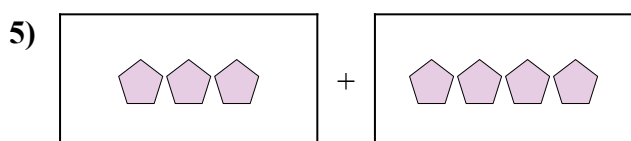
2.  $6 + 1 = 7$



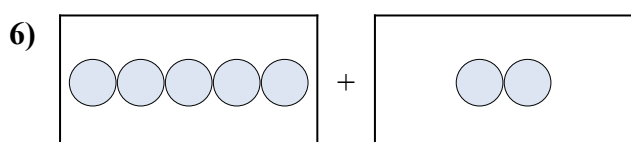
3.  $10 + 4 = 14$



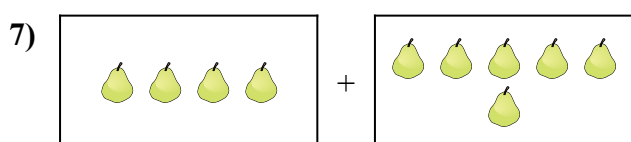
4.  $8 + 3 = 11$



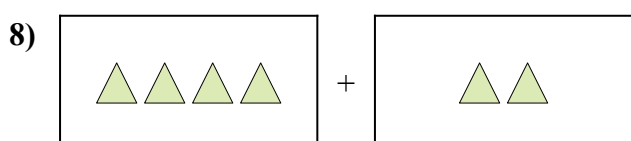
5.  $3 + 4 = 7$



6.  $5 + 2 = 7$



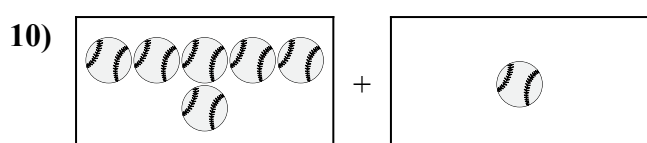
7.  $4 + 6 = 10$



8.  $4 + 2 = 6$



9.  $6 + 5 = 11$


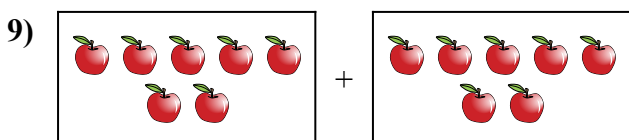
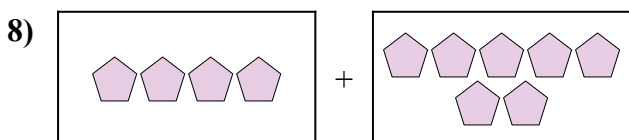
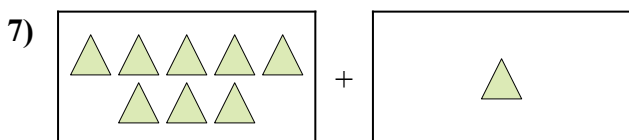
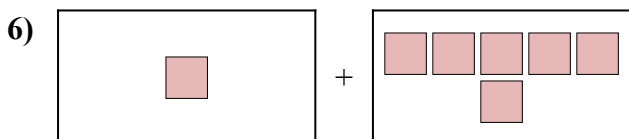
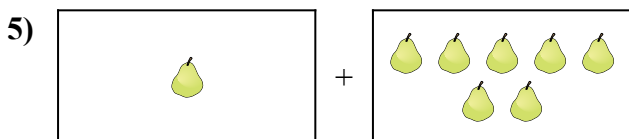
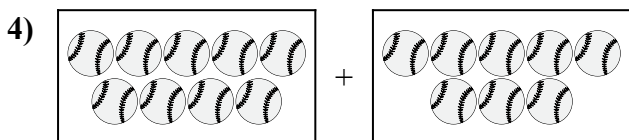
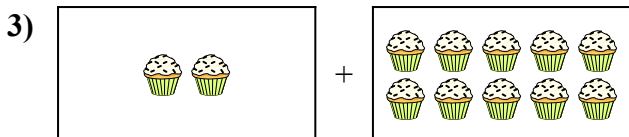
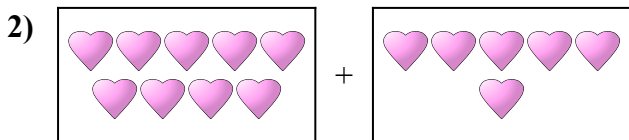
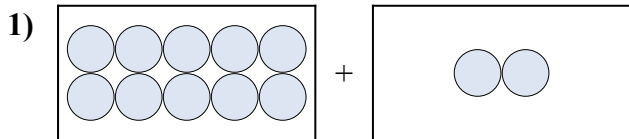


10.  $6 + 1 = 7$



Diễn đạt bài toán trực quan dưới dạng một phương trình có đáp án.

**Câu trả lời**

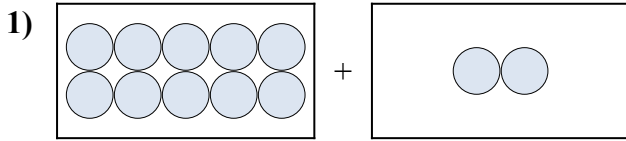


1. \_\_\_\_\_
2. \_\_\_\_\_
3. \_\_\_\_\_
4. \_\_\_\_\_
5. \_\_\_\_\_
6. \_\_\_\_\_
7. \_\_\_\_\_
8. \_\_\_\_\_
9. \_\_\_\_\_
10. \_\_\_\_\_

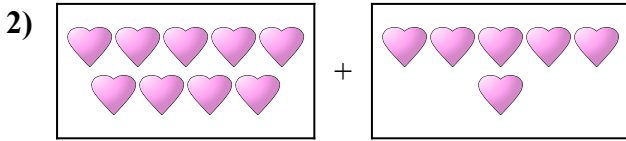


Diễn đạt bài toán trực quan dưới dạng một phương trình có đáp án.

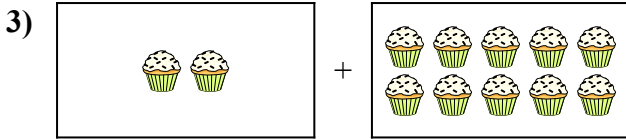
Câu trả lời



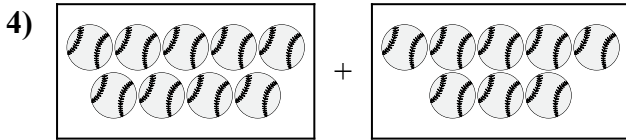
1.  $10 + 2 = 12$



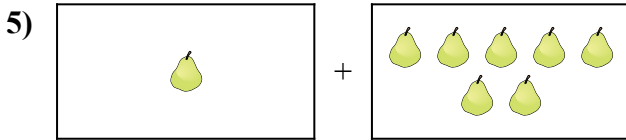
2.  $9 + 6 = 15$



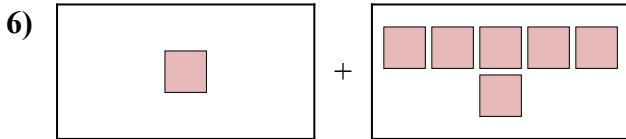
3.  $2 + 10 = 12$



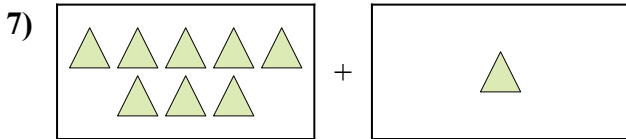
4.  $9 + 8 = 17$



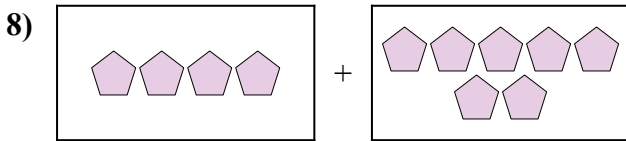
5.  $1 + 7 = 8$



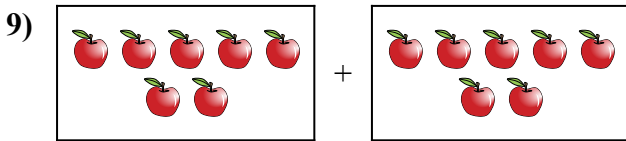
6.  $1 + 6 = 7$




7.  $8 + 1 = 9$



8.  $4 + 7 = 11$



9.  $7 + 7 = 14$



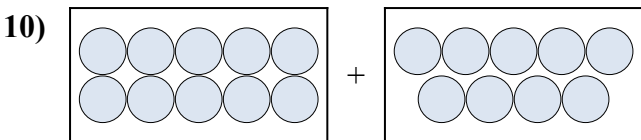
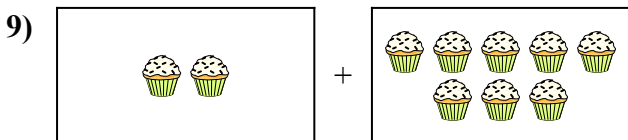
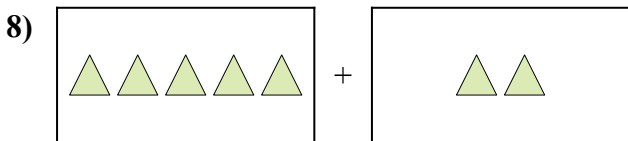
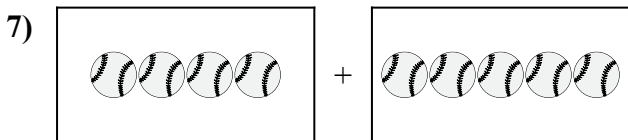
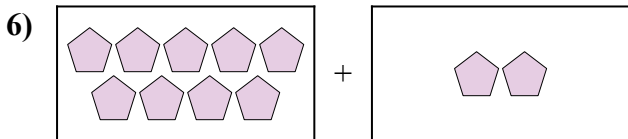
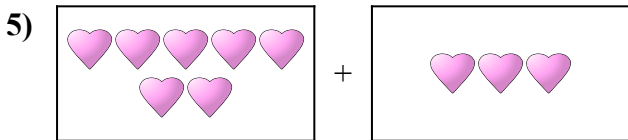
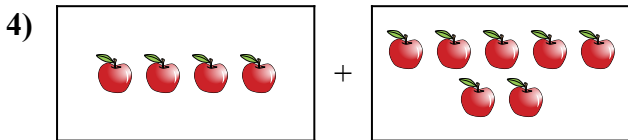
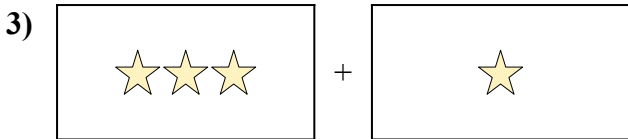
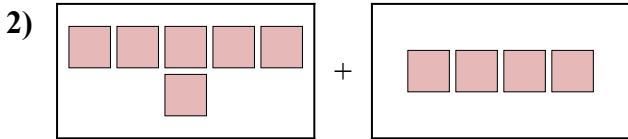
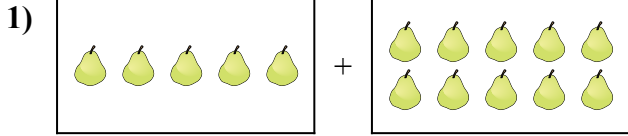
10.  $9 + 7 = 16$





Điền dạng bài toán trực quan dưới dạng một phương trình có đáp án.

Câu trả lời

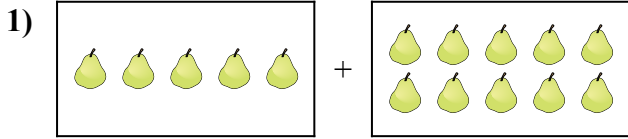


1. \_\_\_\_\_
2. \_\_\_\_\_
3. \_\_\_\_\_
4. \_\_\_\_\_
5. \_\_\_\_\_
6. \_\_\_\_\_
7. \_\_\_\_\_
8. \_\_\_\_\_
9. \_\_\_\_\_
10. \_\_\_\_\_

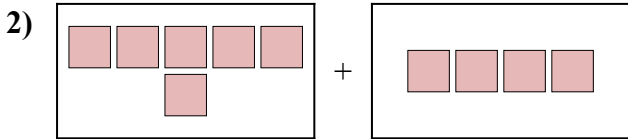


Điền đặt bài toán trực quan dưới dạng một phương trình có đáp án.

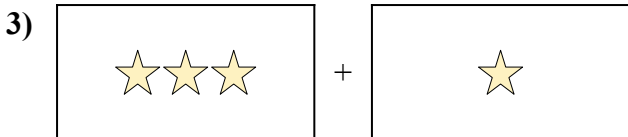
**Câu trả lời**



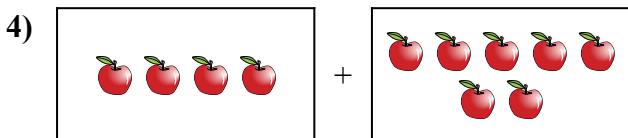
1. **5 + 10 = 15**



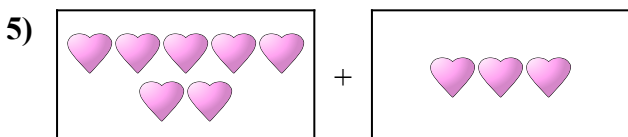
2. **6 + 4 = 10**



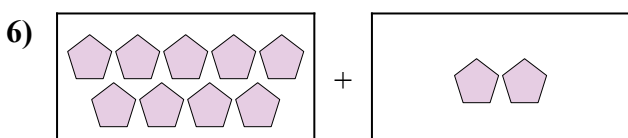
3. **3 + 1 = 4**



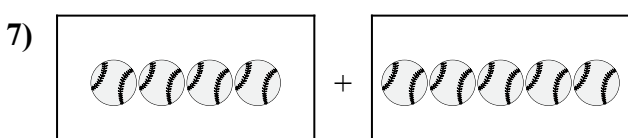
4. **4 + 7 = 11**



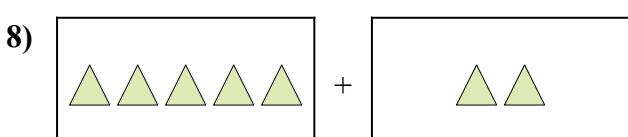
5. **7 + 3 = 10**



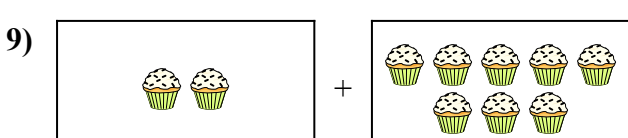
6. **9 + 2 = 11**



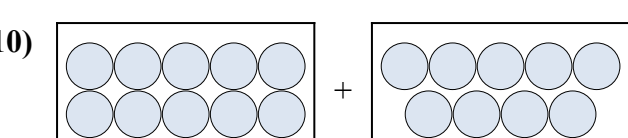
7. **4 + 5 = 9**



8. **5 + 2 = 7**



9. **2 + 8 = 10**

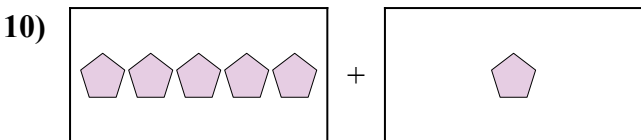
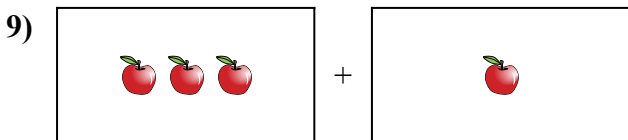
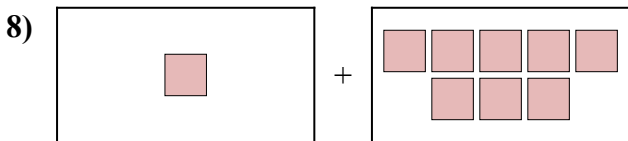
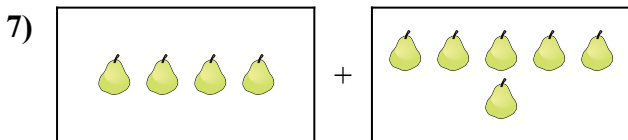

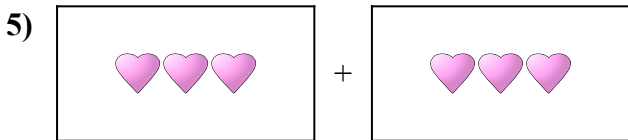
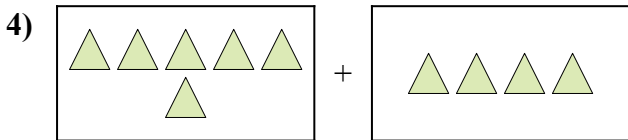
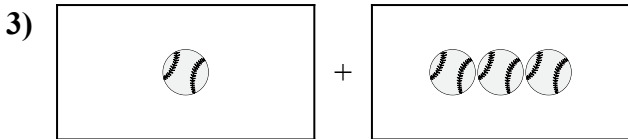
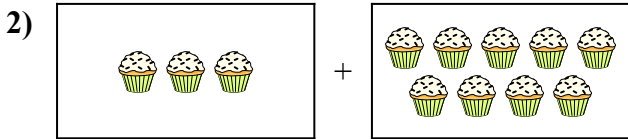
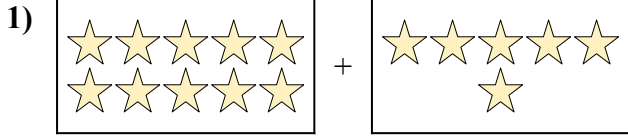


10. **10 + 9 = 19**



Điền dạng bài toán trực quan dưới dạng một phương trình có đáp án.

Câu trả lời

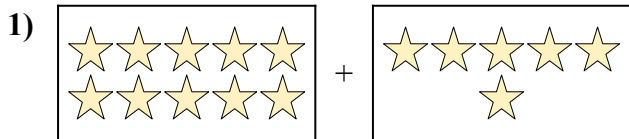


1. \_\_\_\_\_
2. \_\_\_\_\_
3. \_\_\_\_\_
4. \_\_\_\_\_
5. \_\_\_\_\_
6. \_\_\_\_\_
7. \_\_\_\_\_
8. \_\_\_\_\_
9. \_\_\_\_\_
10. \_\_\_\_\_




Điền dạng bài toán trực quan dưới dạng một phương trình có đáp án.

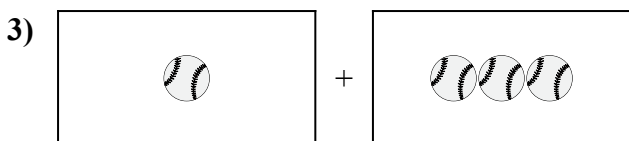
**Câu trả lời**



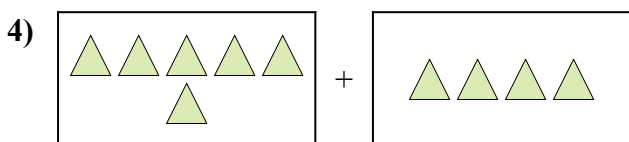
1. **10 + 6 = 16**



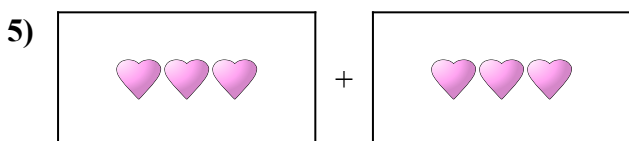
2. **3 + 9 = 12**




3. **1 + 3 = 4**



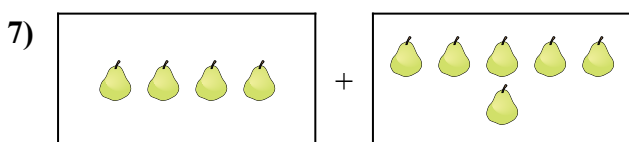
4. **6 + 4 = 10**



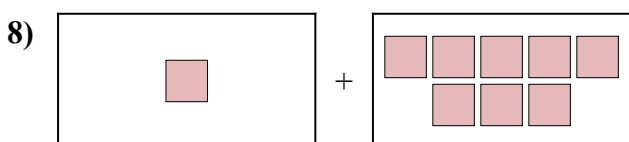
5. **3 + 3 = 6**



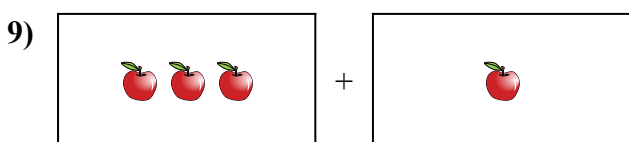
6. **7 + 3 = 10**



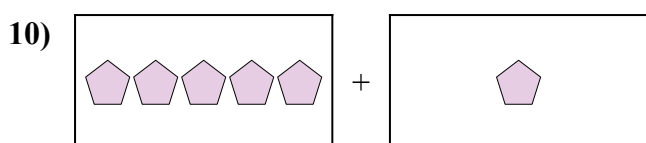
7. **4 + 6 = 10**



8. **1 + 8 = 9**



9. **3 + 1 = 4**



10. **5 + 1 = 6**