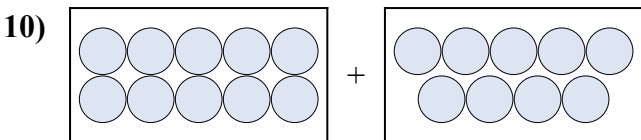
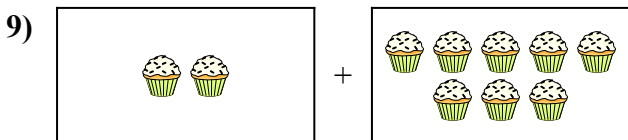
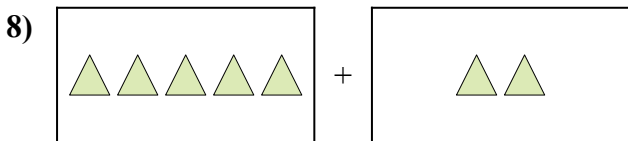
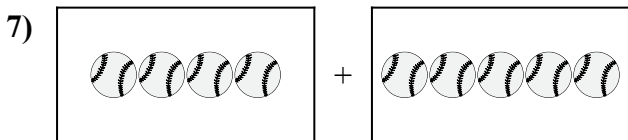
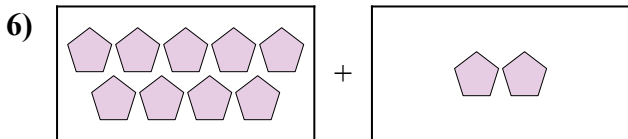
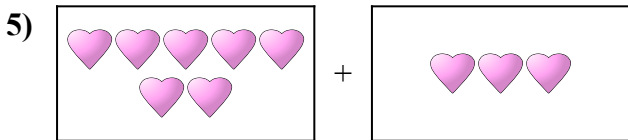
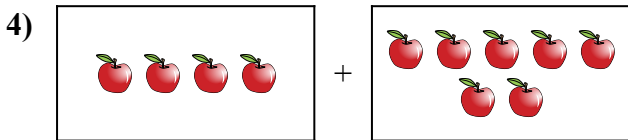
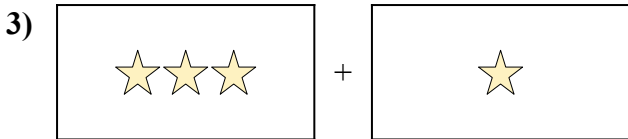
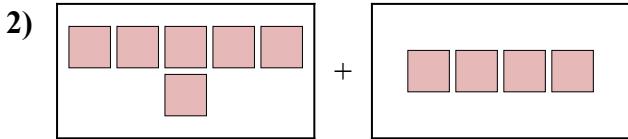
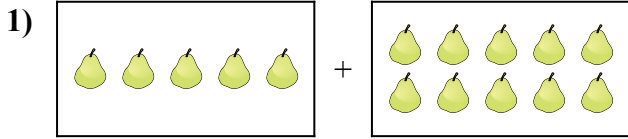




Điền dạng bài toán trực quan dưới dạng một phương trình có đáp án.

Câu trả lời

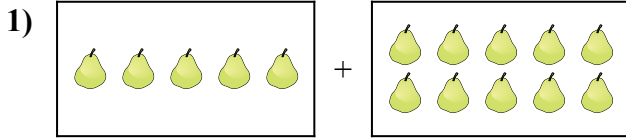


1. _____
2. _____
3. _____
4. _____
5. _____
6. _____
7. _____
8. _____
9. _____
10. _____

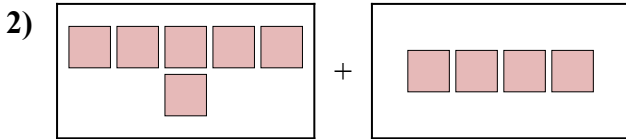


Điền dạng bài toán trực quan dưới dạng một phương trình có đáp án.

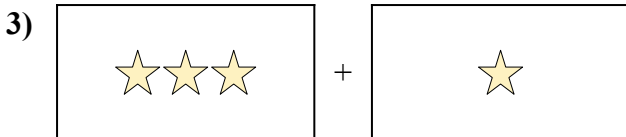
Câu trả lời



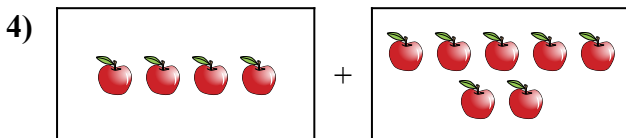
1. $5 + 10 = 15$



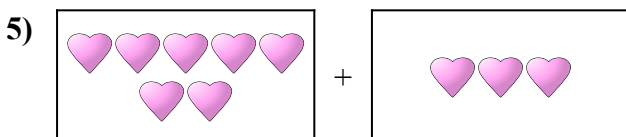
2. $6 + 4 = 10$



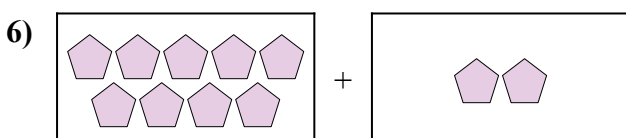
3. $3 + 1 = 4$



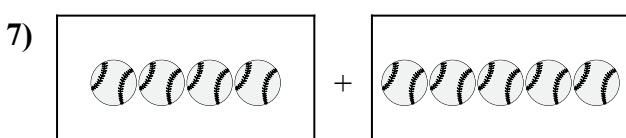
4. $4 + 7 = 11$



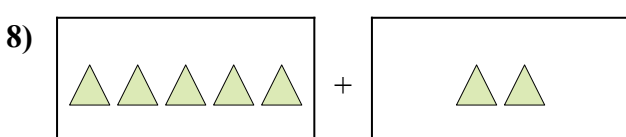
5. $7 + 3 = 10$



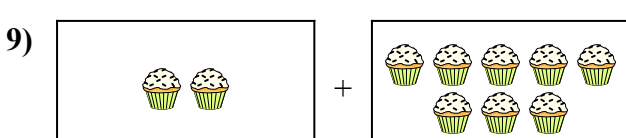
6. $9 + 2 = 11$



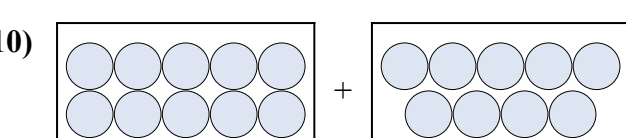
7. $4 + 5 = 9$



8. $5 + 2 = 7$



9. $2 + 8 = 10$



10. $10 + 9 = 19$