
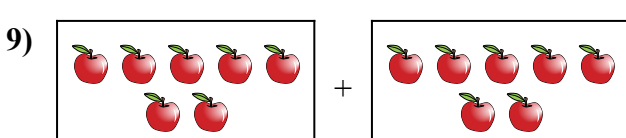
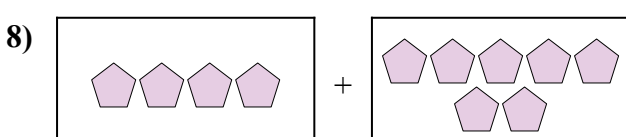
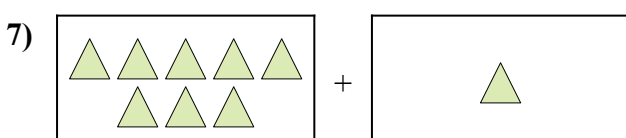
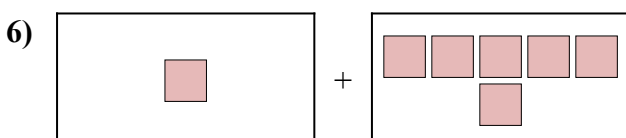
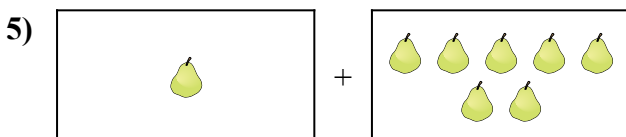
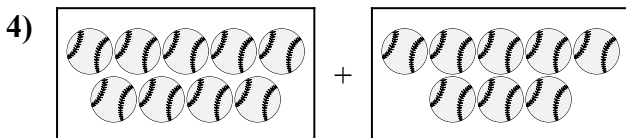
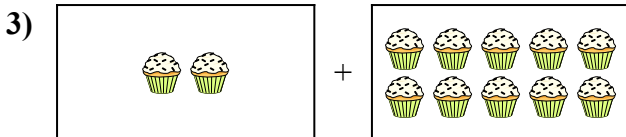
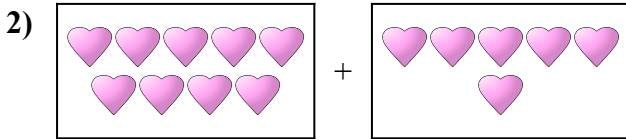
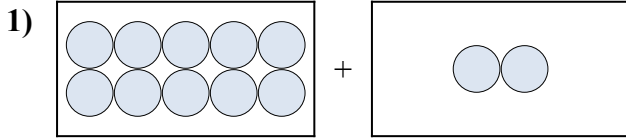




Diễn đạt bài toán trực quan dưới dạng một phương trình có đáp án.

Câu trả lời

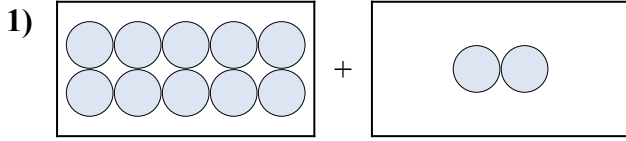


1. _____
2. _____
3. _____
4. _____
5. _____
6. _____
7. _____
8. _____
9. _____
10. _____

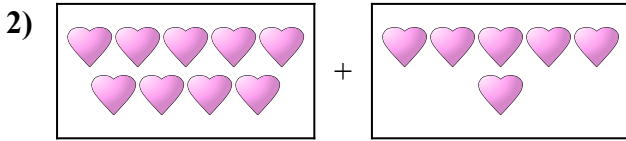


Diễn đạt bài toán trực quan dưới dạng một phương trình có đáp án.

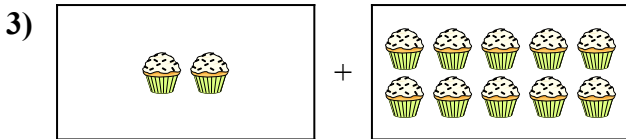
Câu trả lời



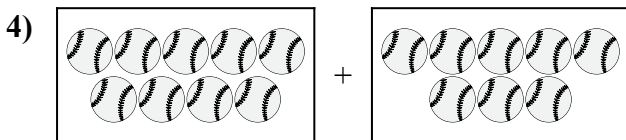
1. $10 + 2 = 12$



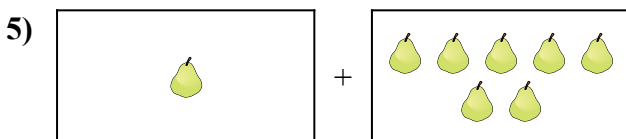
2. $9 + 6 = 15$



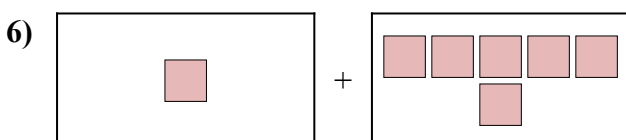
3. $2 + 10 = 12$



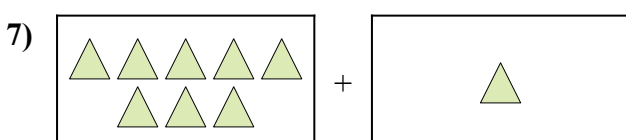
4. $9 + 8 = 17$



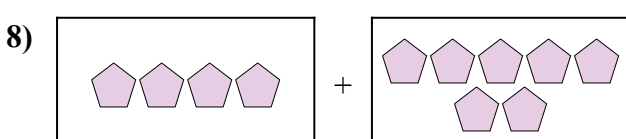
5. $1 + 7 = 8$



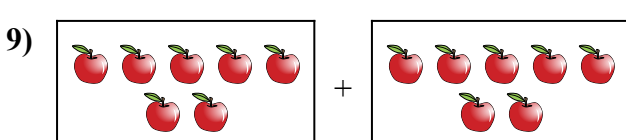
6. $1 + 6 = 7$




7. $8 + 1 = 9$



8. $4 + 7 = 11$



9. $7 + 7 = 14$



10. $9 + 7 = 16$