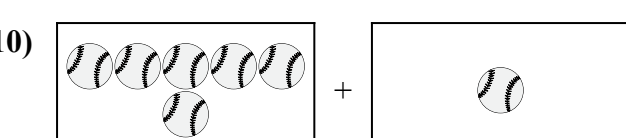
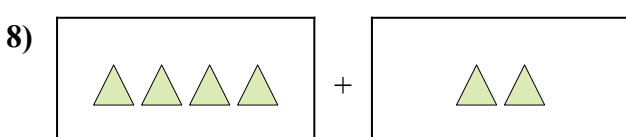
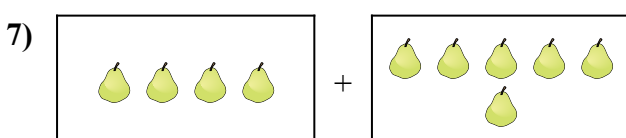
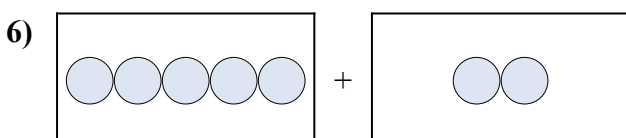
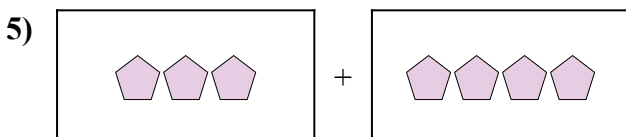
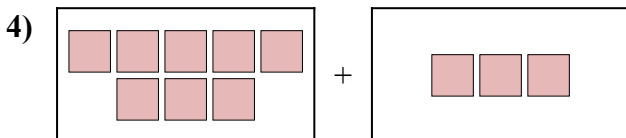

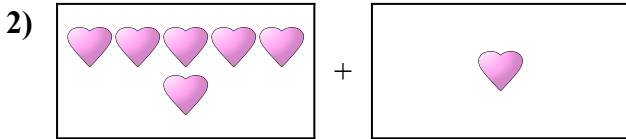
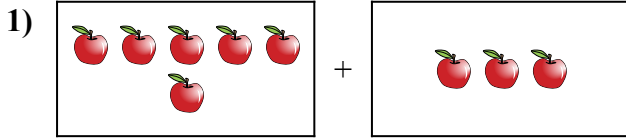




Diễn đạt bài toán trực quan dưới dạng một phương trình có đáp án.

Câu trả lời

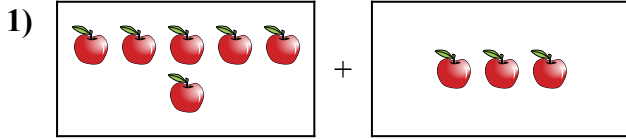


1. _____
2. _____
3. _____
4. _____
5. _____
6. _____
7. _____
8. _____
9. _____
10. _____

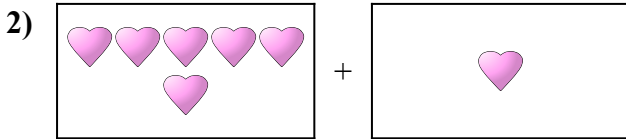


Diễn đạt bài toán trực quan dưới dạng một phương trình có đáp án.


Câu trả lời



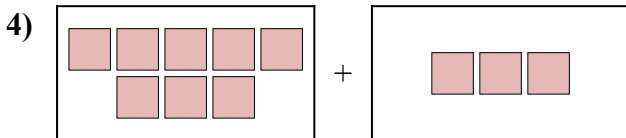
1. $6 + 3 = 9$



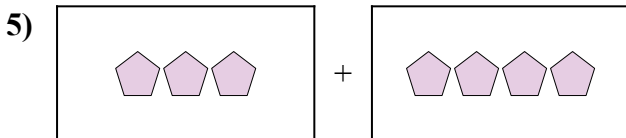
2. $6 + 1 = 7$



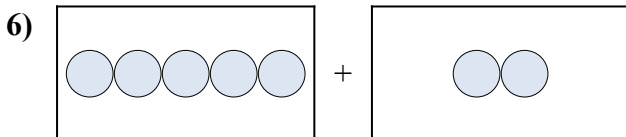
3. $10 + 4 = 14$



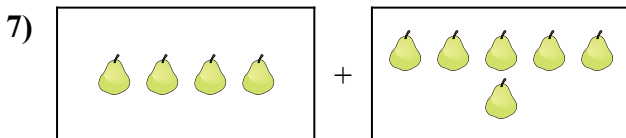
4. $8 + 3 = 11$



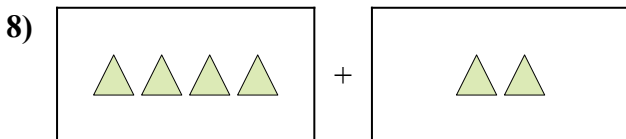
5. $3 + 4 = 7$



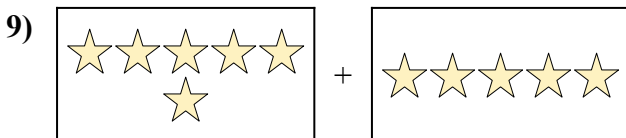
6. $5 + 2 = 7$



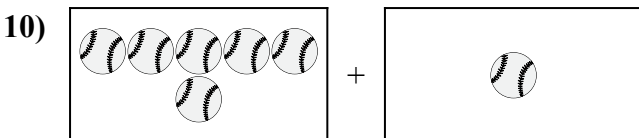
7. $4 + 6 = 10$



8. $4 + 2 = 6$



9. $6 + 5 = 11$



10. $6 + 1 = 7$