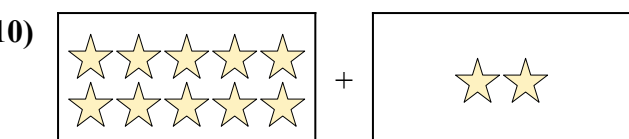
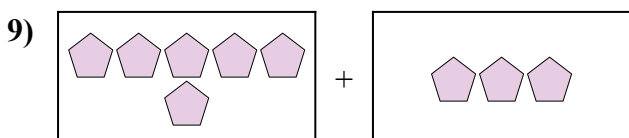
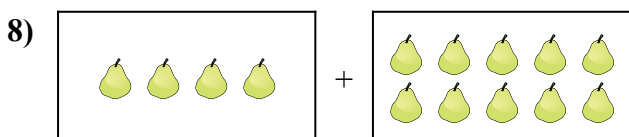
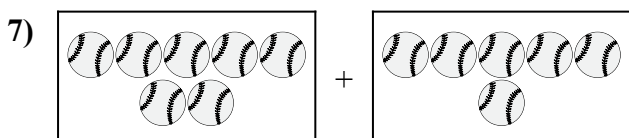

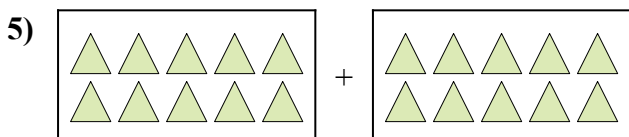
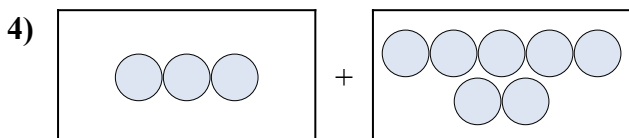

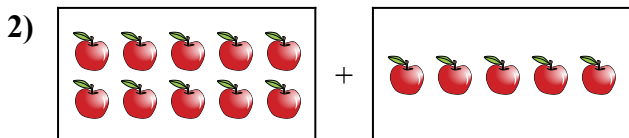
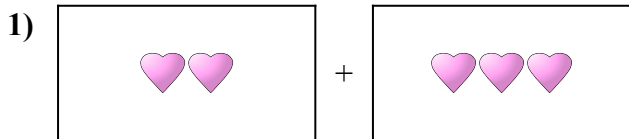




Điền dạng bài toán trực quan dưới dạng một phương trình có đáp án.

Câu trả lời



1. _____

2. _____

3. _____

4. _____

5. _____

6. _____

7. _____

8. _____

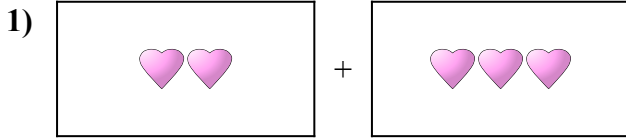
9. _____

10. _____

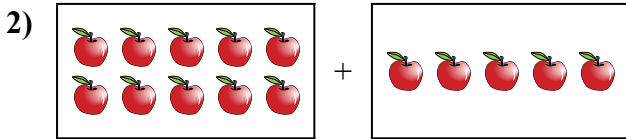


Điền dạng bài toán trực quan dưới dạng một phương trình có đáp án.

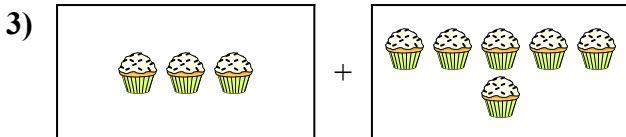
Câu trả lời



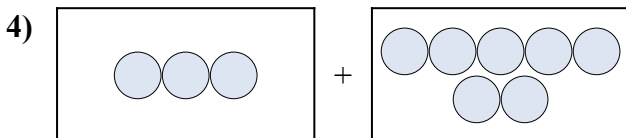
1. $2 + 3 = 5$



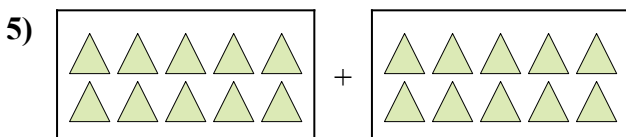
2. $10 + 5 = 15$




3. $3 + 6 = 9$



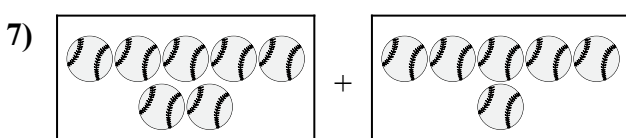
4. $3 + 7 = 10$



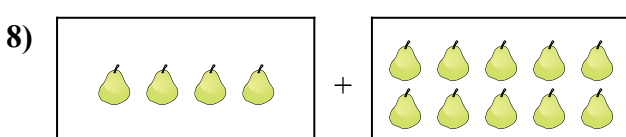
5. $10 + 10 = 20$



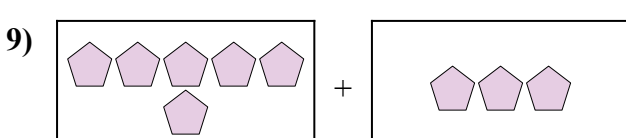
6. $10 + 3 = 13$



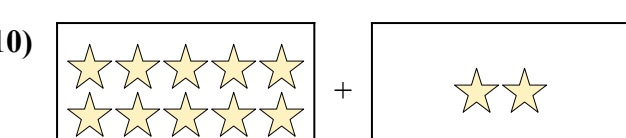
7. $7 + 6 = 13$



8. $4 + 10 = 14$



9. $6 + 3 = 9$



10. $10 + 2 = 12$