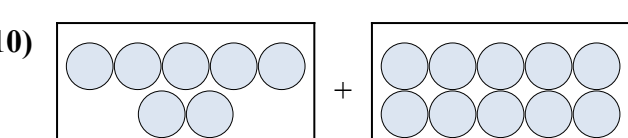

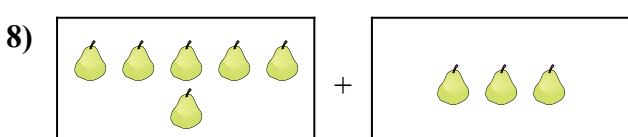

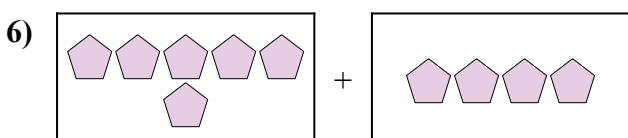
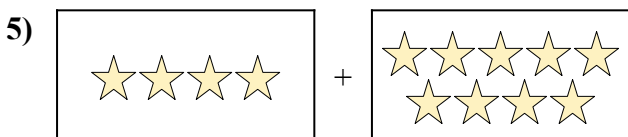
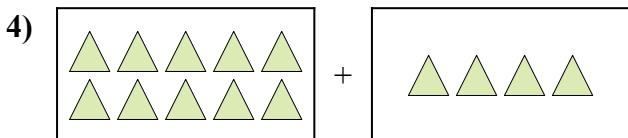
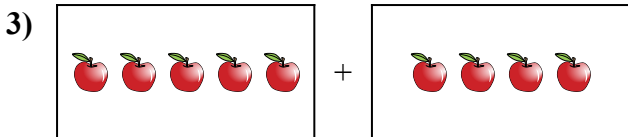
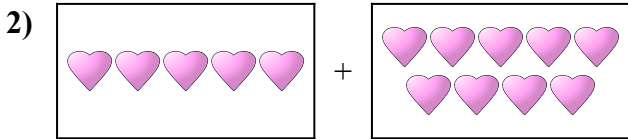
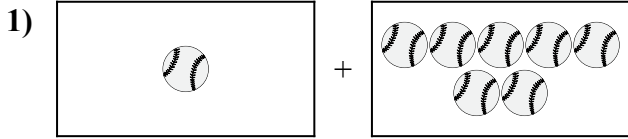




Diễn đạt bài toán trực quan dưới dạng một phương trình có đáp án.

Câu trả lời

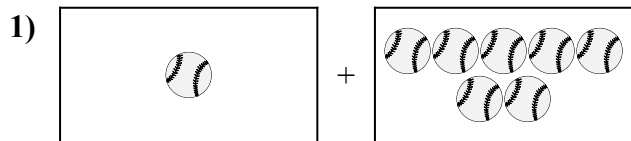


1. \_\_\_\_\_
2. \_\_\_\_\_
3. \_\_\_\_\_
4. \_\_\_\_\_
5. \_\_\_\_\_
6. \_\_\_\_\_
7. \_\_\_\_\_
8. \_\_\_\_\_
9. \_\_\_\_\_
10. \_\_\_\_\_

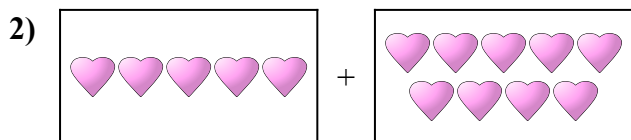


Diễn đạt bài toán trực quan dưới dạng một phương trình có đáp án.

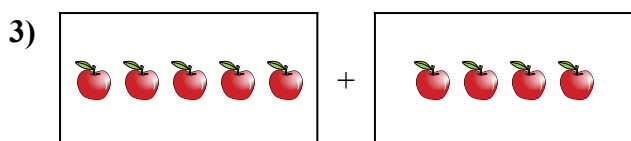
**Câu trả lời**



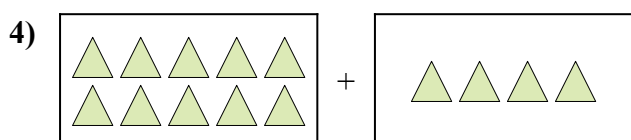
1. 1 + 7 = 8



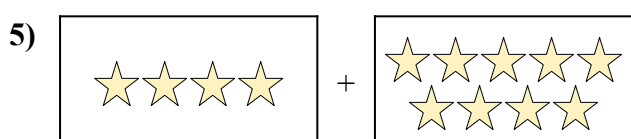
2. 5 + 9 = 14



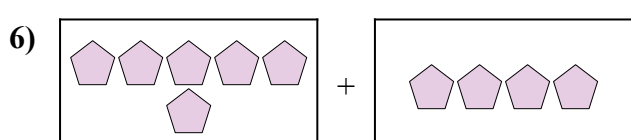
3. 5 + 4 = 9




4. 10 + 4 = 14



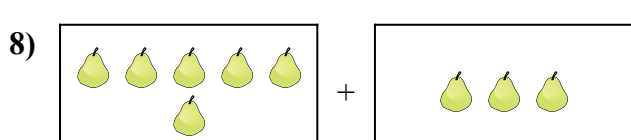
5. 4 + 9 = 13




6. 6 + 4 = 10



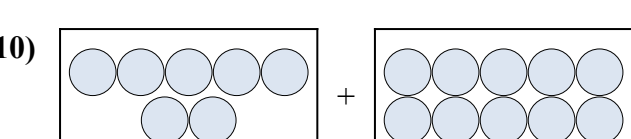
7. 6 + 10 = 16



8. 6 + 3 = 9



9. 7 + 4 = 11



10. 7 + 10 = 17