

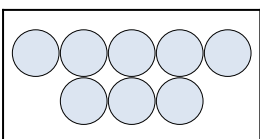
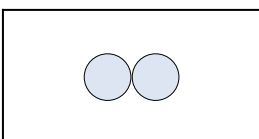








Điền dạng bài toán trực quan dưới dạng một phương trình có đáp án.

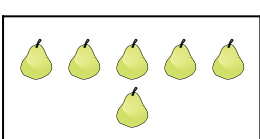
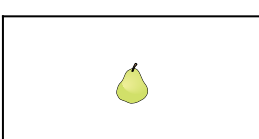
Câu trả lời

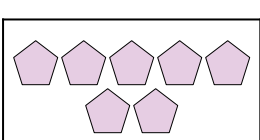
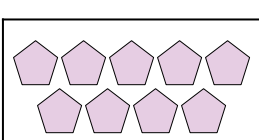
1)  + 

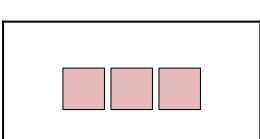
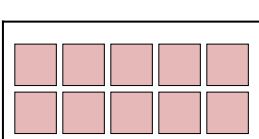
2)  + 



3)  + 



4)  + 


5)  + 

6)  + 

7)  + 

8)  + 

9)  + 


10)  + 

1. _____
2. _____
3. _____
4. _____
5. _____
6. _____
7. _____
8. _____
9. _____
10. _____

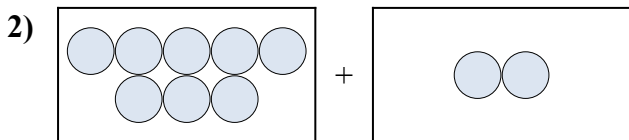


Điền đặt bài toán trực quan dưới dạng một phương trình có đáp án.

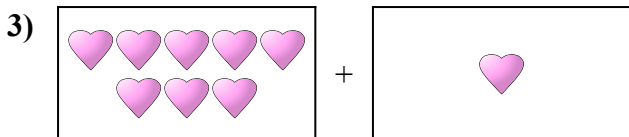
Câu trả lời



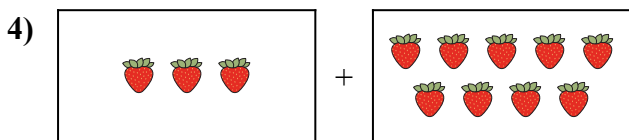
1. **9 + 1 = 10**



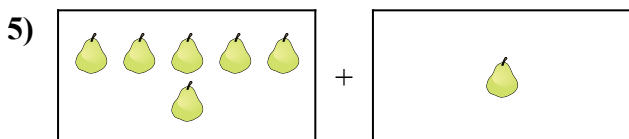
2. **8 + 2 = 10**



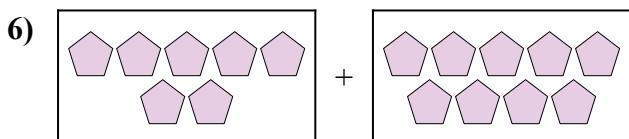
3. **8 + 1 = 9**



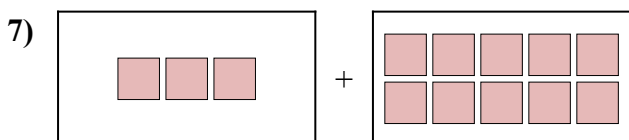
4. **3 + 9 = 12**



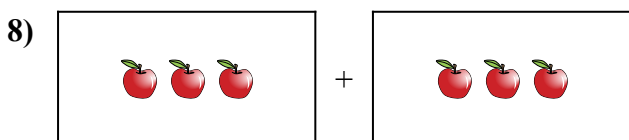
5. **6 + 1 = 7**



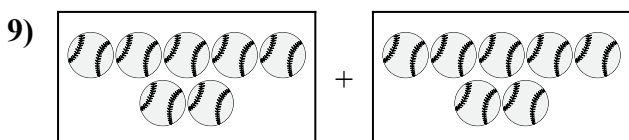
6. **7 + 9 = 16**



7. **3 + 10 = 13**



8. **3 + 3 = 6**



9. **7 + 7 = 14**



10. **5 + 2 = 7**