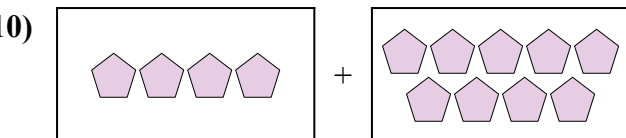
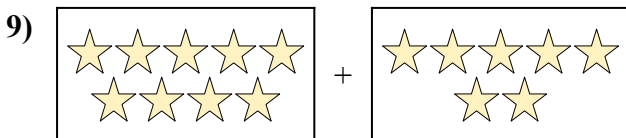
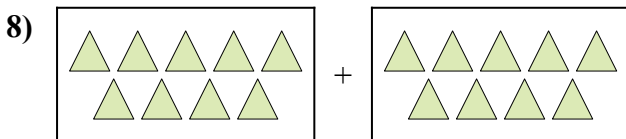

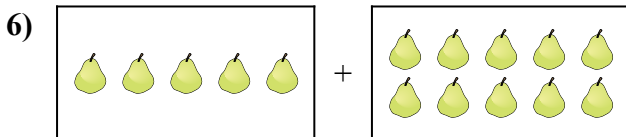
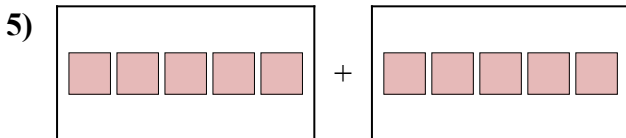
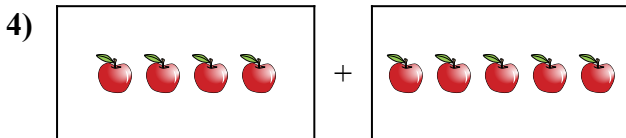

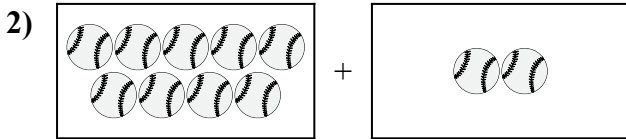
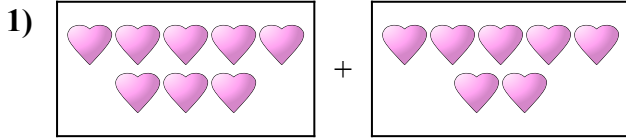




Diễn đạt bài toán trực quan dưới dạng một phương trình có đáp án.

**Câu trả lời**

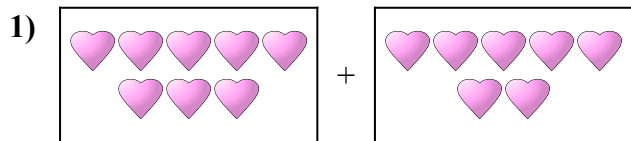


1. \_\_\_\_\_
2. \_\_\_\_\_
3. \_\_\_\_\_
4. \_\_\_\_\_
5. \_\_\_\_\_
6. \_\_\_\_\_
7. \_\_\_\_\_
8. \_\_\_\_\_
9. \_\_\_\_\_
10. \_\_\_\_\_

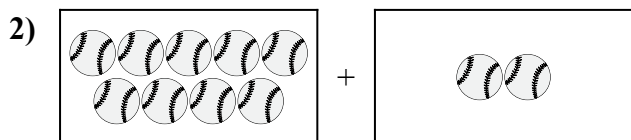


Diễn đạt bài toán trực quan dưới dạng một phương trình có đáp án.


**Câu trả lời**



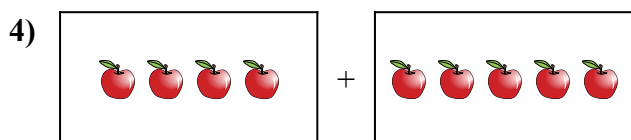
1.  $8 + 7 = 15$



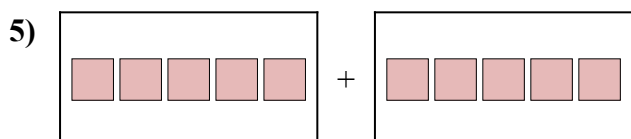
2.  $9 + 2 = 11$



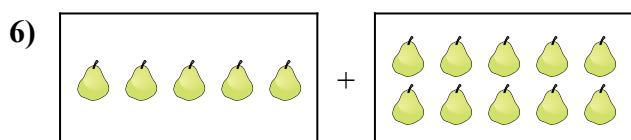
3.  $8 + 7 = 15$




4.  $4 + 5 = 9$



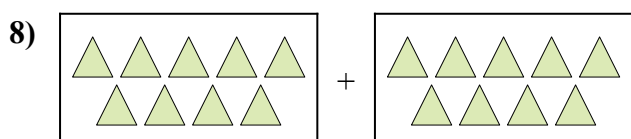
5.  $5 + 5 = 10$



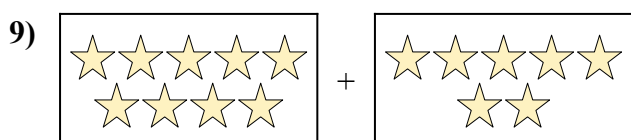
6.  $5 + 10 = 15$



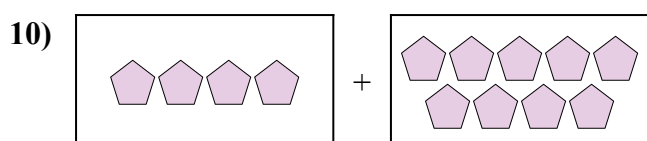
7.  $5 + 7 = 12$



8.  $9 + 9 = 18$



9.  $9 + 7 = 16$



10.  $4 + 9 = 13$