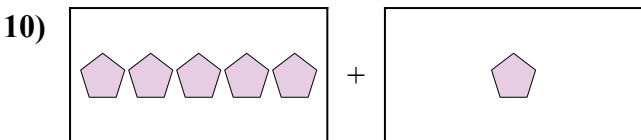
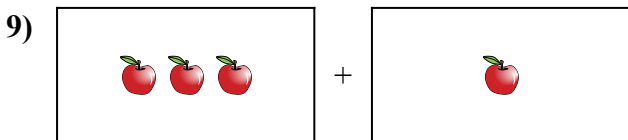
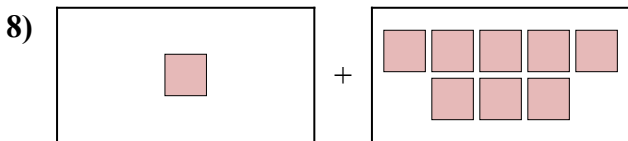
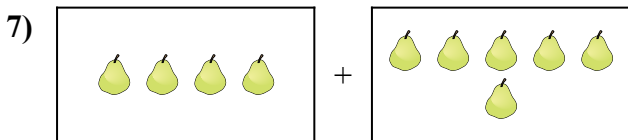

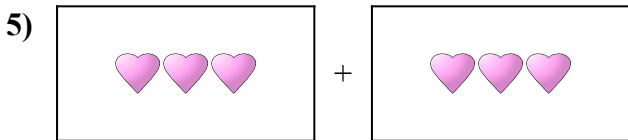
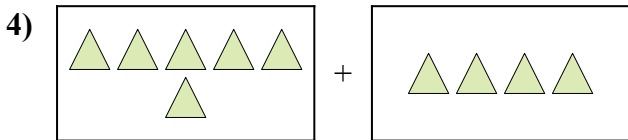
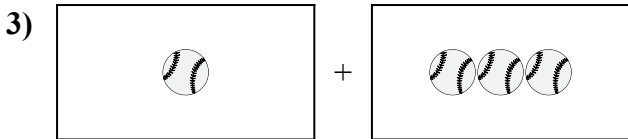
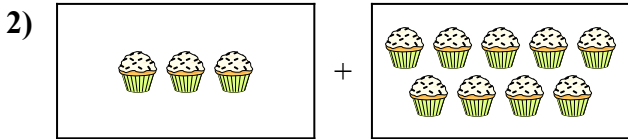
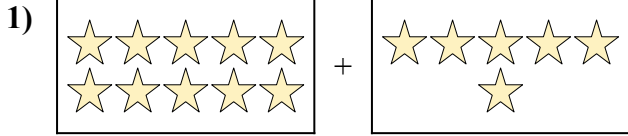




Điền dạng bài toán trực quan dưới dạng một phương trình có đáp án.

Câu trả lời

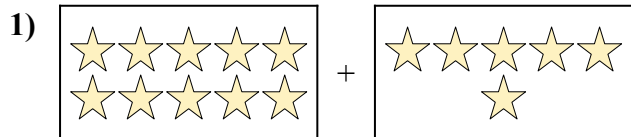


1. _____
2. _____
3. _____
4. _____
5. _____
6. _____
7. _____
8. _____
9. _____
10. _____




Điền dạng bài toán trực quan dưới dạng một phương trình có đáp án.

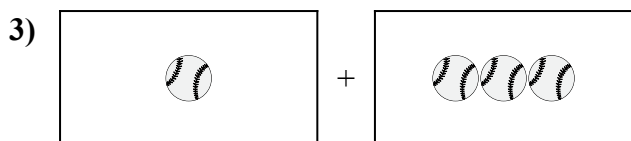
Câu trả lời



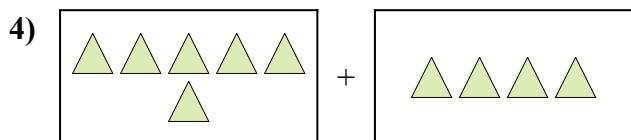
1. $10 + 6 = 16$



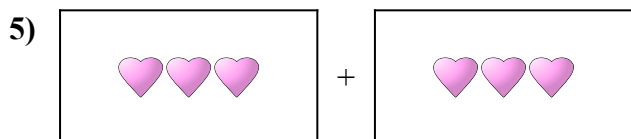
2. $3 + 9 = 12$




3. $1 + 3 = 4$



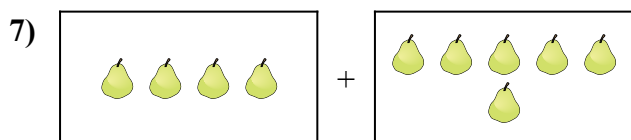
4. $6 + 4 = 10$



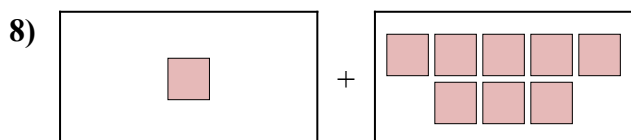
5. $3 + 3 = 6$



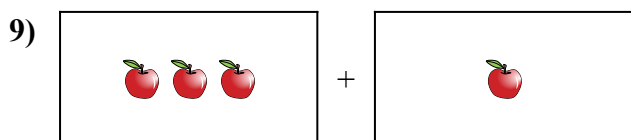
6. $7 + 3 = 10$



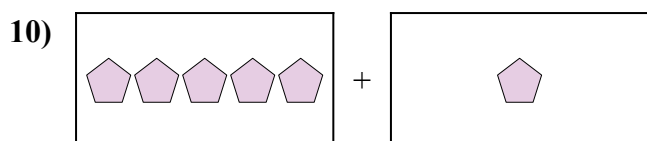
7. $4 + 6 = 10$



8. $1 + 8 = 9$



9. $3 + 1 = 4$



10. $5 + 1 = 6$