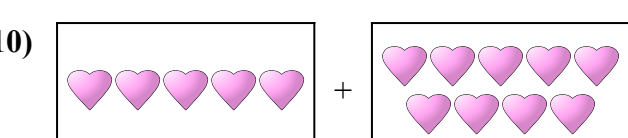

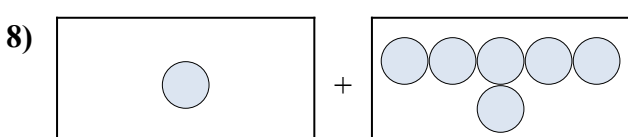
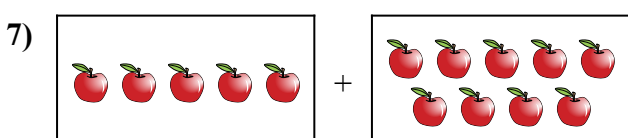

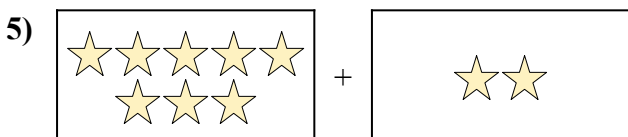
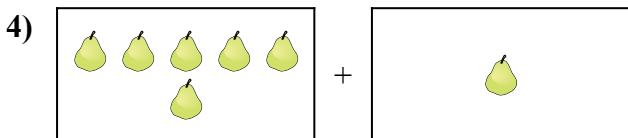
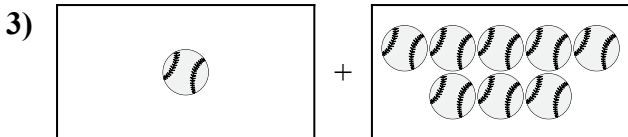
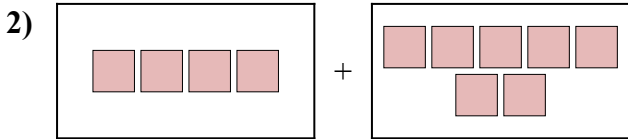
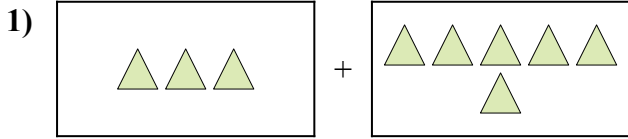




Điền dạng bài toán trực quan dưới dạng một phương trình có đáp án.

Câu trả lời

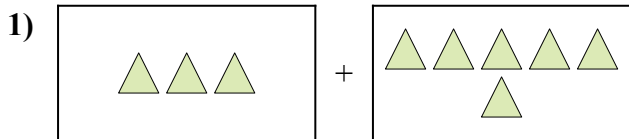


1. _____
2. _____
3. _____
4. _____
5. _____
6. _____
7. _____
8. _____
9. _____
10. _____

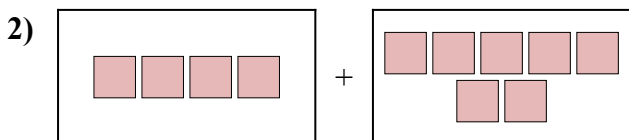


Điền dạng bài toán trực quan dưới dạng một phương trình có đáp án.

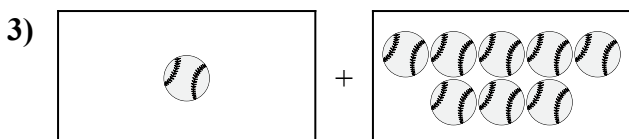
Câu trả lời



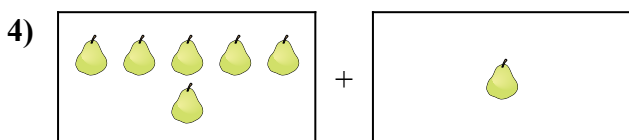
1. $3 + 6 = 9$



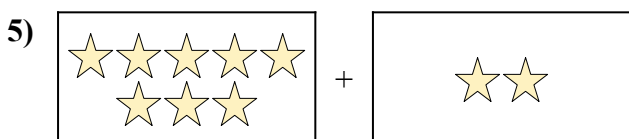
2. $4 + 7 = 11$




3. $1 + 8 = 9$



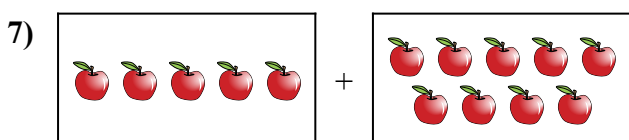
4. $6 + 1 = 7$



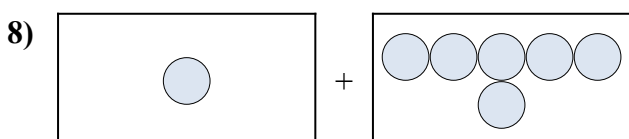
5. $8 + 2 = 10$



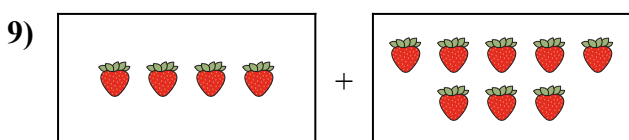
6. $10 + 9 = 19$



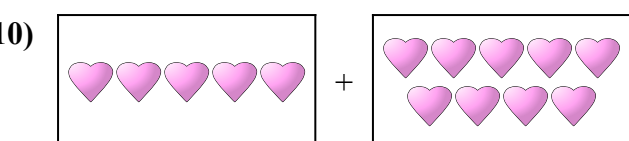
7. $5 + 9 = 14$



8. $1 + 6 = 7$



9. $4 + 8 = 12$



10. $5 + 9 = 14$