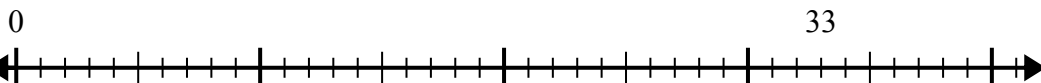




Sử dụng trục số để giải bài toán chia.

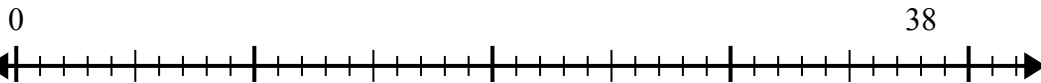
Câu trả lời

1) $33:7=$



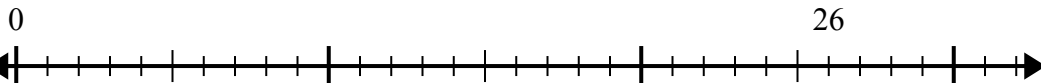
1. _____

2) $38:5=$



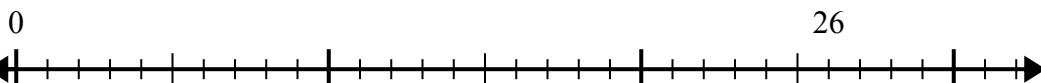
2. _____

3) $26:7=$



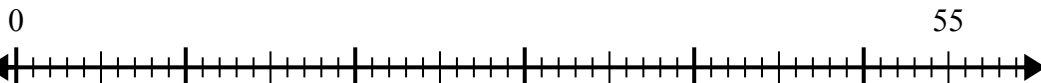
3. _____

4) $26:4=$



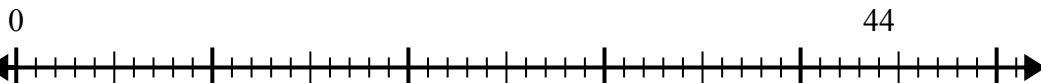
4. _____

5) $55:8=$



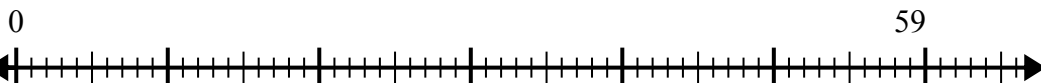
5. _____

6) $44:6=$



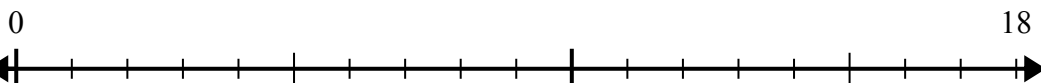
6. _____

7) $59:8=$



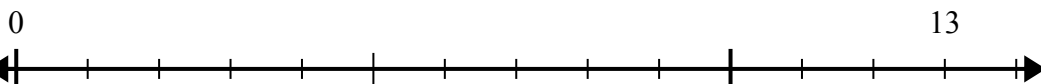
7. _____

8) $18:5=$



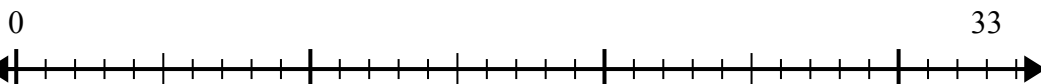
8. _____

9) $13:4=$



9. _____

10) $33:5=$

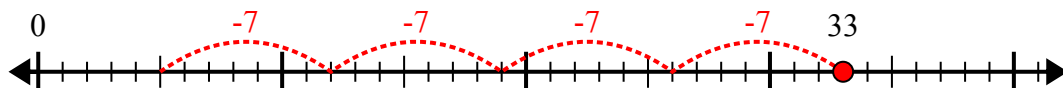


10. _____

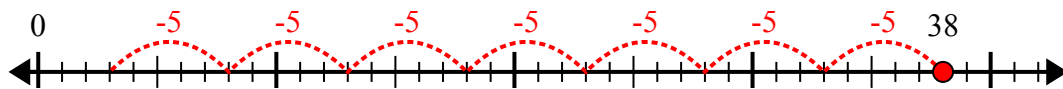


Sử dụng trục số để giải bài toán chia.

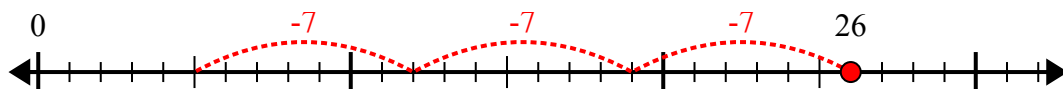
1) $33:7=$



2) $38:5=$



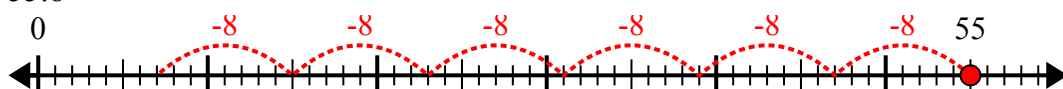
3) $26:7=$



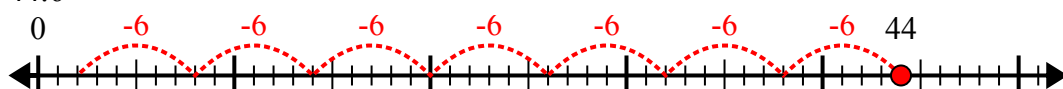
4) $26:4=$



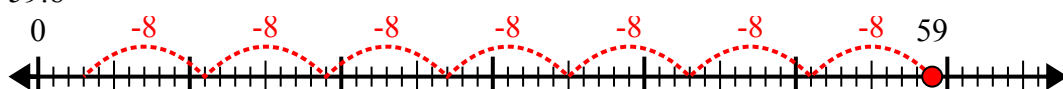
5) $55:8=$



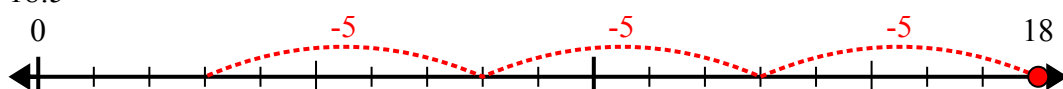
6) $44:6=$



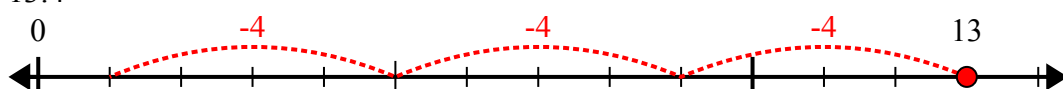
7) $59:8=$



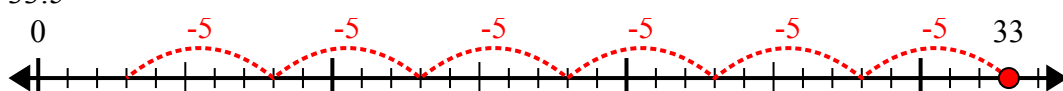
8) $18:5=$



9) $13:4=$



10) $33:5=$



Câu trả lời

1. **4 dư 5**

2. **7 dư 3**

3. **3 dư 5**

4. **6 dư 2**

5. **6 dư 7**

6. **7 dư 2**

7. **7 dư 3**

8. **3 dư 3**

9. **3 dư 1**

10. **6 dư 3**