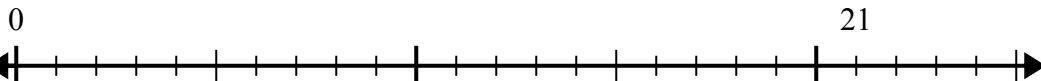


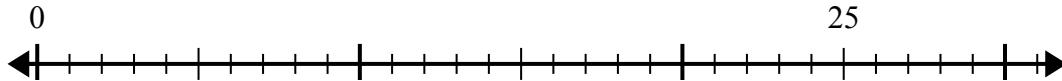


Sử dụng trục số để giải bài toán chia.

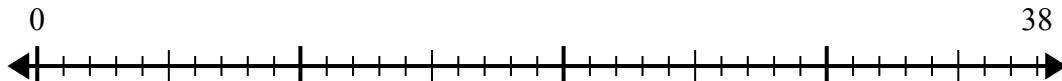
1) $21:5=$



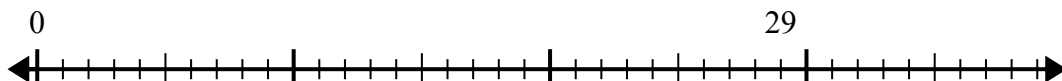
2) $25:6=$



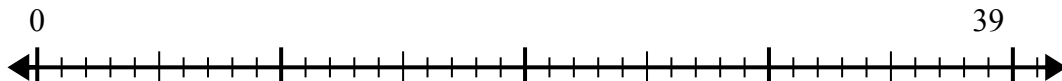
3) $38:8=$



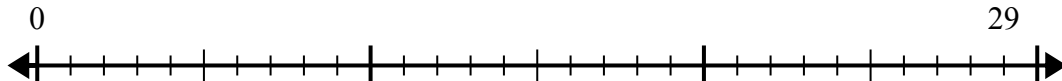
4) $29:7=$



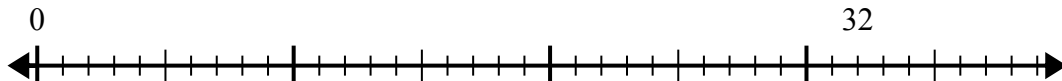
5) $39:5=$



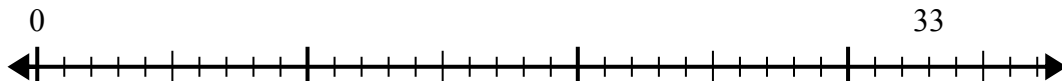
6) $29:4=$



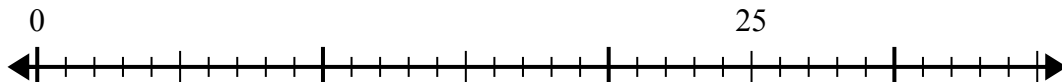
7) $32:6=$



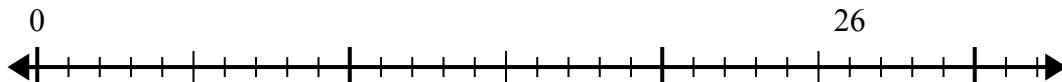
8) $33:4=$



9) $25:4=$



10) $26:7=$



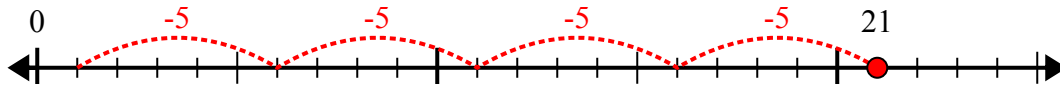
Câu trả lời

1. _____
2. _____
3. _____
4. _____
5. _____
6. _____
7. _____
8. _____
9. _____
10. _____

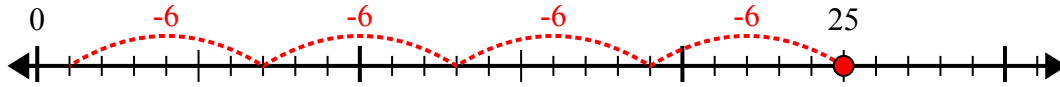


Sử dụng trục số để giải bài toán chia.

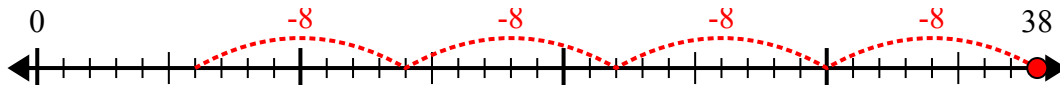
1) $21:5=$



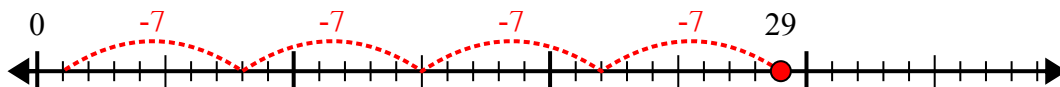
2) $25:6=$



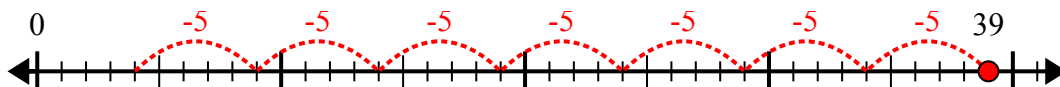
3) $38:8=$



4) $29:7=$



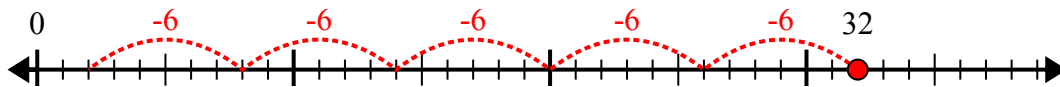
5) $39:5=$



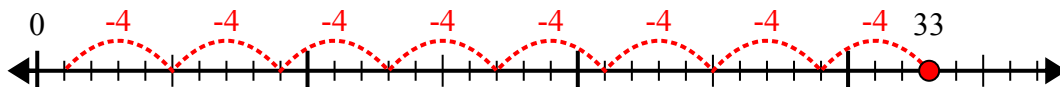
6) $29:4=$



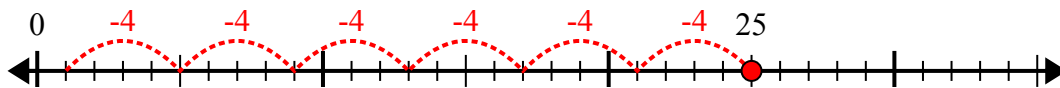
7) $32:6=$



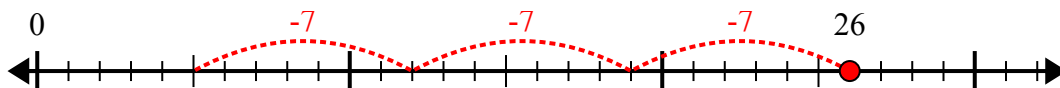
8) $33:4=$



9) $25:4=$



10) $26:7=$



Câu trả lời

1. **4 dư 1**

2. **4 dư 1**

3. **4 dư 6**

4. **4 dư 1**

5. **7 dư 4**

6. **7 dư 1**

7. **5 dư 2**

8. **8 dư 1**

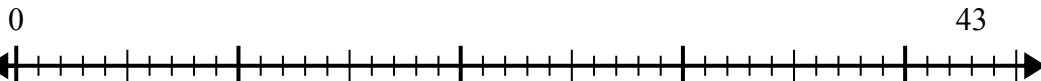
9. **6 dư 1**

10. **3 dư 5**

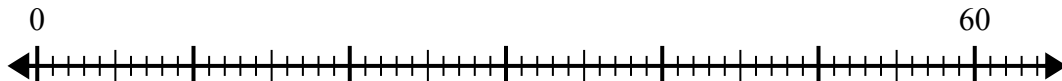


Sử dụng trục số để giải bài toán chia.

1) $43:5=$



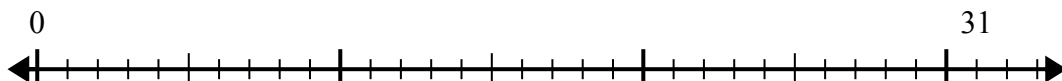
2) $60:7=$



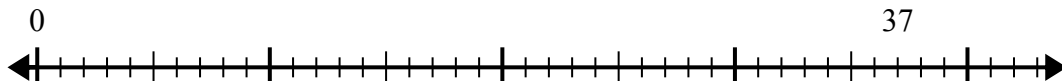
3) $16:5=$



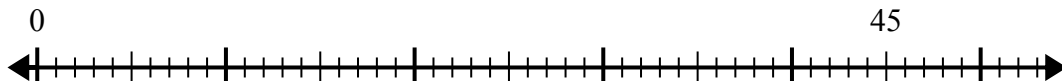
4) $31:4=$



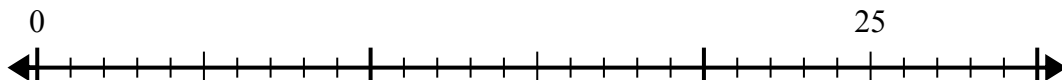
5) $37:7=$



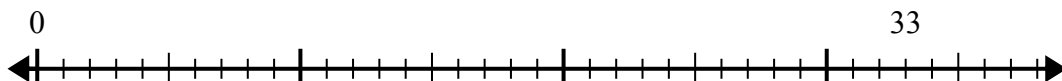
6) $45:8=$



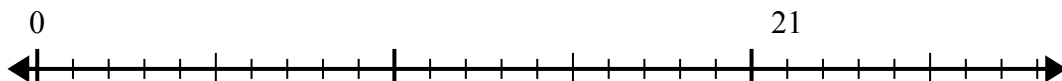
7) $25:4=$



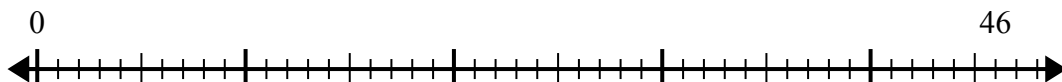
8) $33:5=$



9) $21:4=$



10) $46:6=$



Câu trả lời

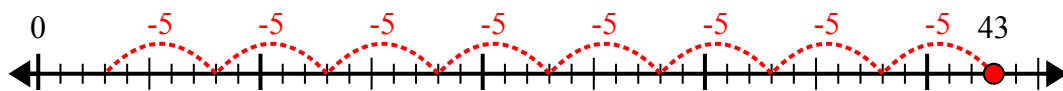
1. _____
2. _____
3. _____
4. _____
5. _____
6. _____
7. _____
8. _____
9. _____
10. _____



Sử dụng trục số để giải bài toán chia.

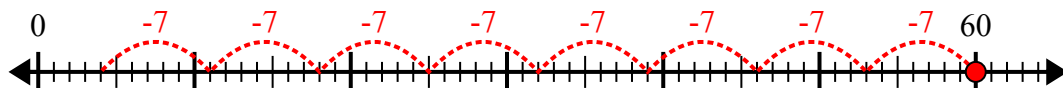
Câu trả lời

1) $43:5=$



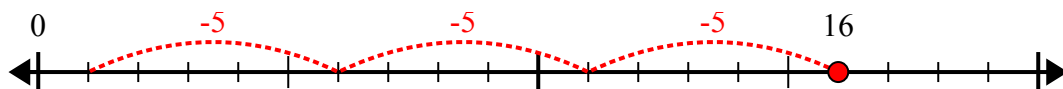
1. **8 dư 3**

2) $60:7=$



2. **8 dư 4**

3) $16:5=$



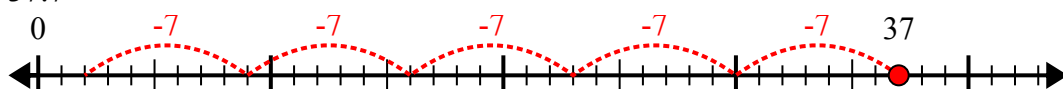
3. **3 dư 1**

4) $31:4=$



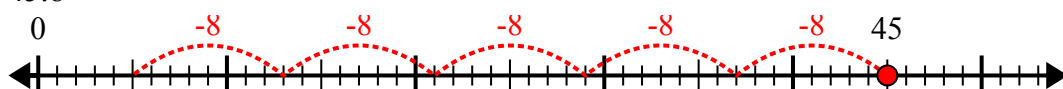
4. **7 dư 3**

5) $37:7=$



5. **5 dư 2**

6) $45:8=$



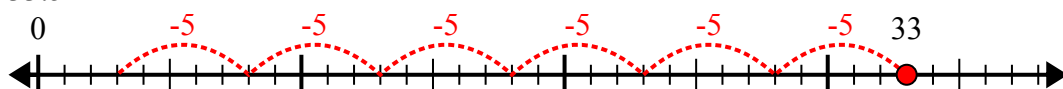
6. **5 dư 5**

7) $25:4=$



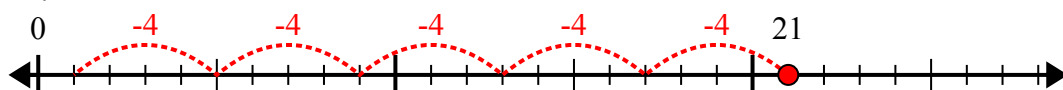
7. **6 dư 1**

8) $33:5=$



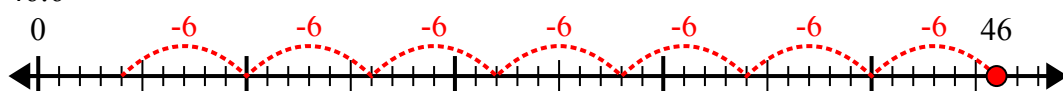
8. **6 dư 3**

9) $21:4=$



9. **5 dư 1**

10) $46:6=$



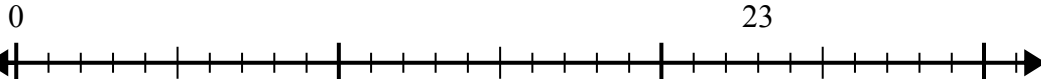
10. **7 dư 4**



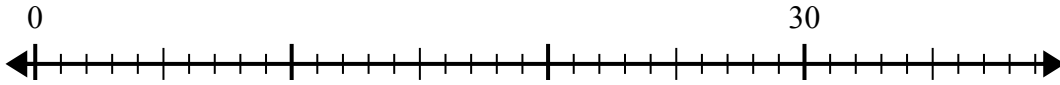
Sử dụng trục số để giải bài toán chia.

Câu trả lời

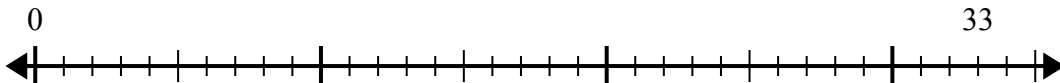
1) $23:5=$



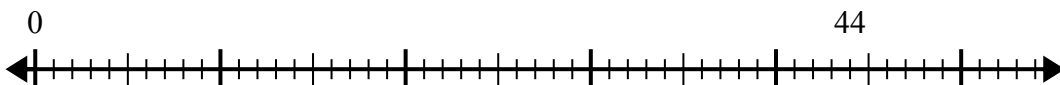
2) $30:4=$



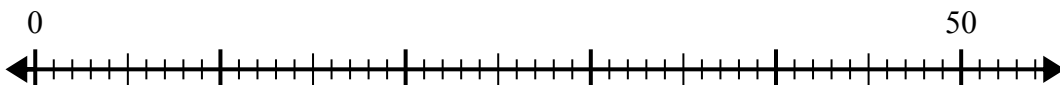
3) $33:6=$



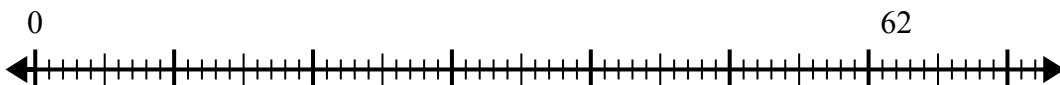
4) $44:6=$



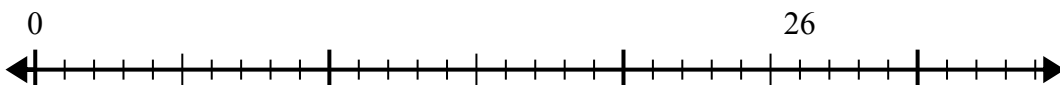
5) $50:6=$



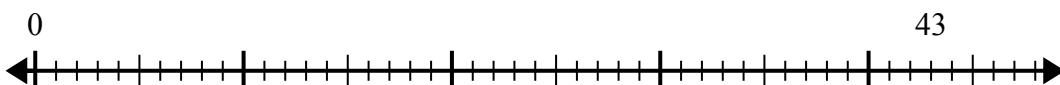
6) $62:8=$



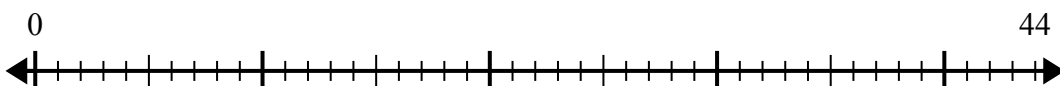
7) $26:6=$



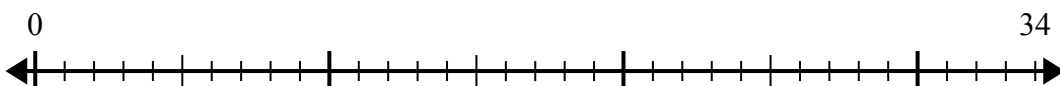
8) $43:8=$



9) $44:7=$



10) $34:4=$



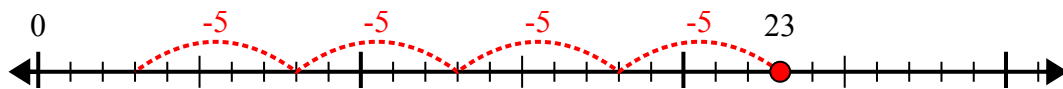
1. _____
2. _____
3. _____
4. _____
5. _____
6. _____
7. _____
8. _____
9. _____
10. _____



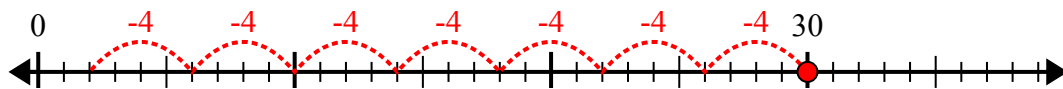
Sử dụng trục số để giải bài toán chia.

Câu trả lời

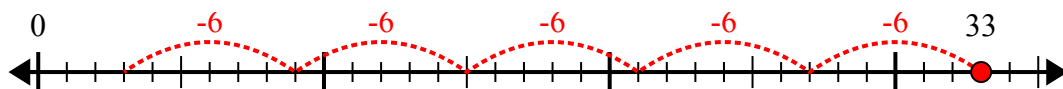
1) $23:5=$



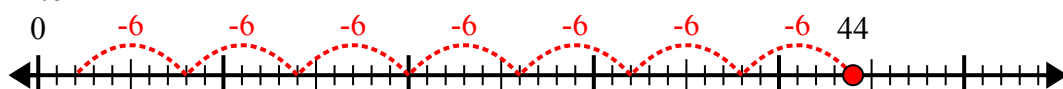
2) $30:4=$



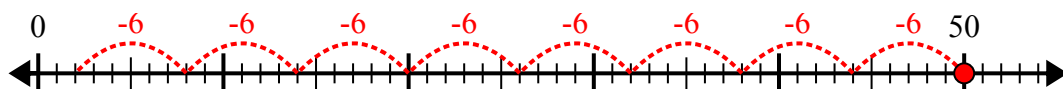
3) $33:6=$



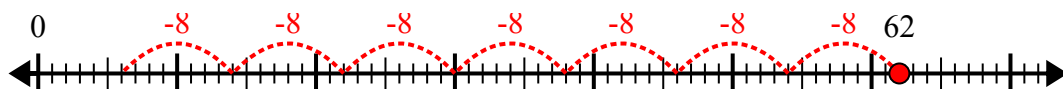
4) $44:6=$



5) $50:6=$



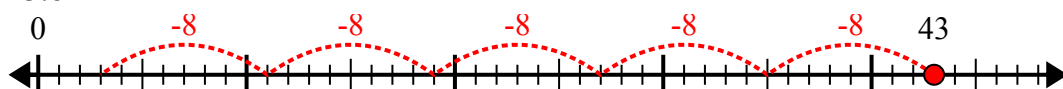
6) $62:8=$



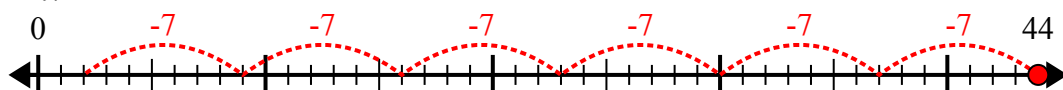
7) $26:6=$



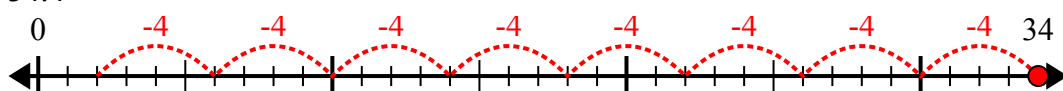
8) $43:8=$



9) $44:7=$



10) $34:4=$



1. **4 dư 3**

2. **7 dư 2**

3. **5 dư 3**

4. **7 dư 2**

5. **8 dư 2**

6. **7 dư 6**

7. **4 dư 2**

8. **5 dư 3**

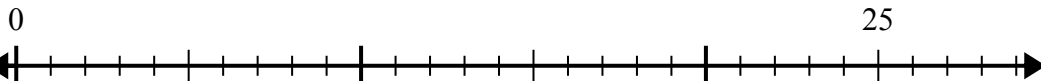
9. **6 dư 2**

10. **8 dư 2**

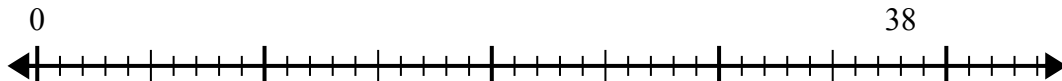


Sử dụng trục số để giải bài toán chia.

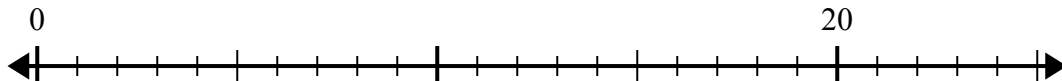
1) $25:6=$



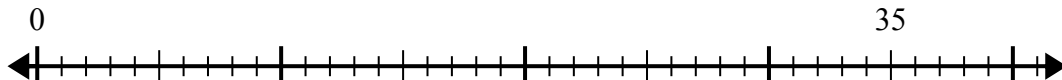
2) $38:7=$



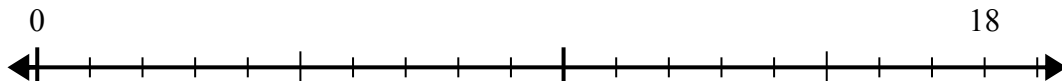
3) $20:6=$



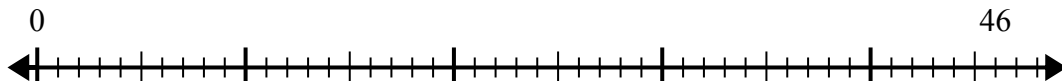
4) $35:6=$



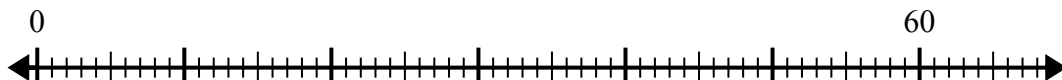
5) $18:5=$



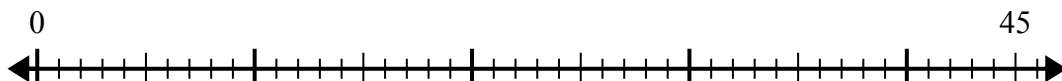
6) $46:6=$



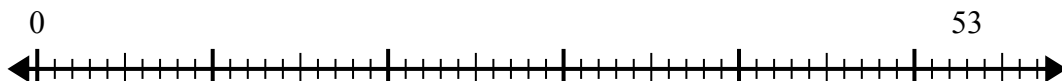
7) $60:8=$



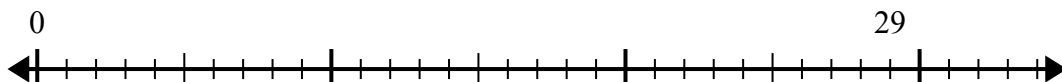
8) $45:7=$



9) $53:8=$



10) $29:4=$



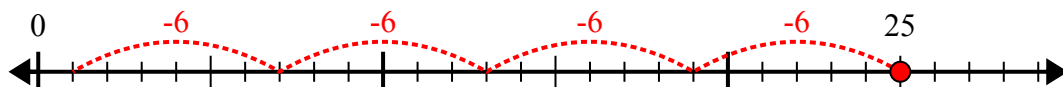
Câu trả lời

1. _____
2. _____
3. _____
4. _____
5. _____
6. _____
7. _____
8. _____
9. _____
10. _____

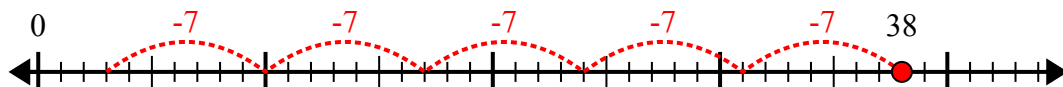


Sử dụng trục số để giải bài toán chia.

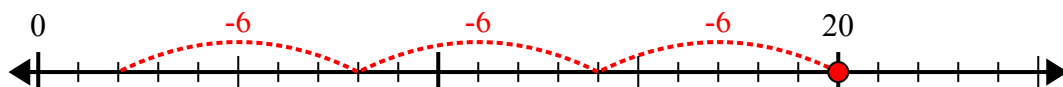
1) $25:6=$



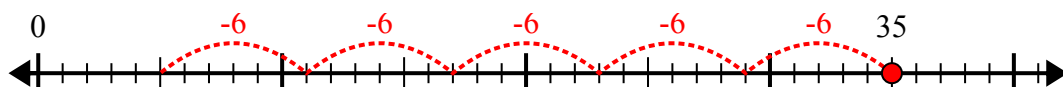
2) $38:7=$



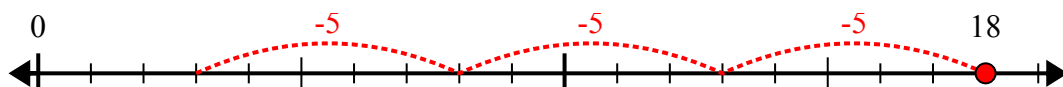
3) $20:6=$



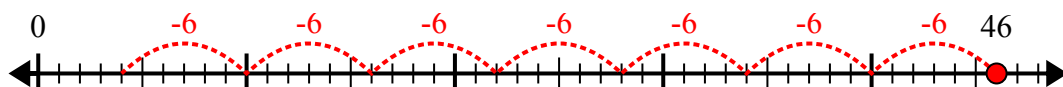
4) $35:6=$



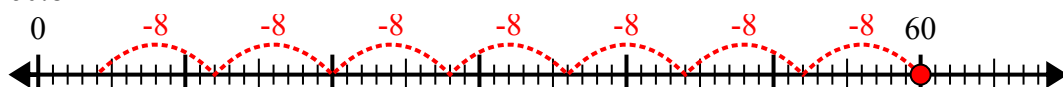
5) $18:5=$



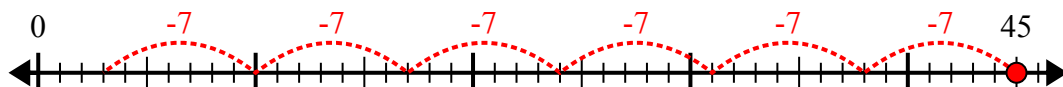
6) $46:6=$



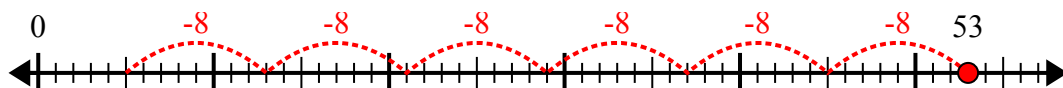
7) $60:8=$



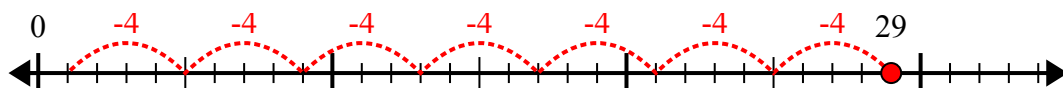
8) $45:7=$



9) $53:8=$



10) $29:4=$



Câu trả lời

1. 4 dư 1
2. 5 dư 3
3. 3 dư 2
4. 5 dư 5
5. 3 dư 3
6. 7 dư 4
7. 7 dư 4
8. 6 dư 3
9. 6 dư 5
10. 7 dư 1

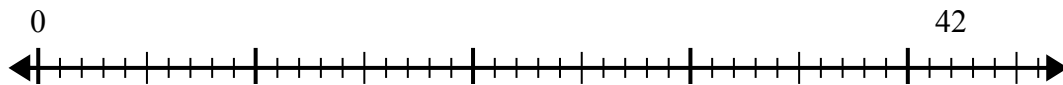


Sử dụng trục số để giải bài toán chia.

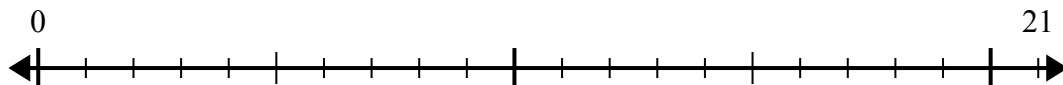
1) $59:7=$



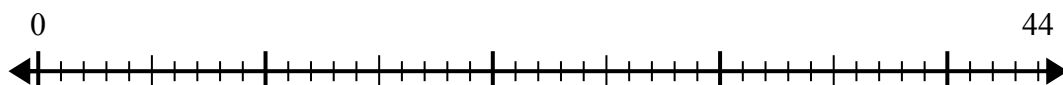
2) $42:5=$



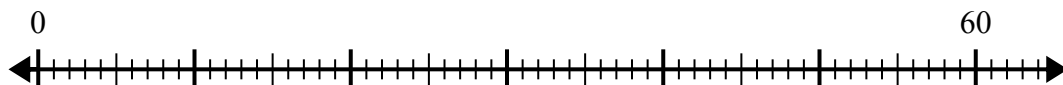
3) $21:4=$



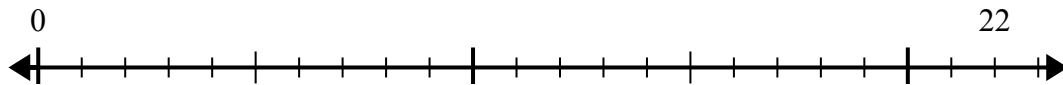
4) $44:7=$



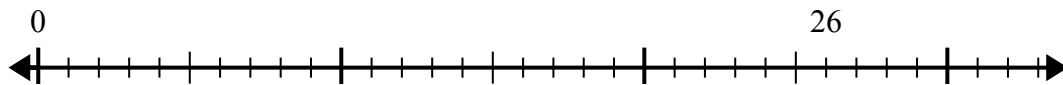
5) $60:8=$



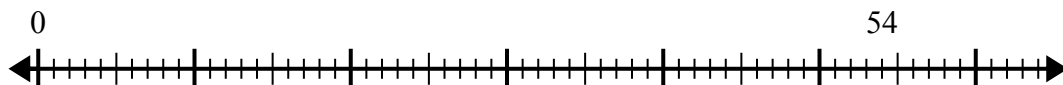
6) $22:5=$



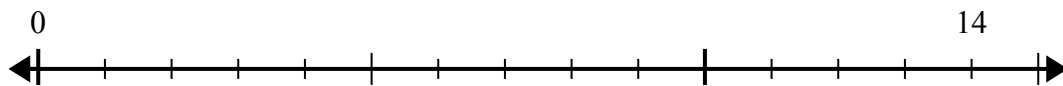
7) $26:4=$



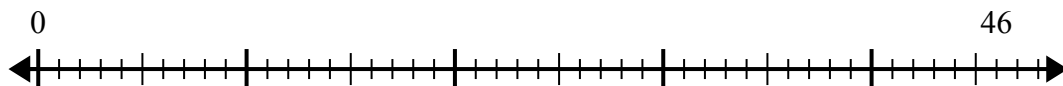
8) $54:8=$



9) $14:4=$



10) $46:6=$



Câu trả lời

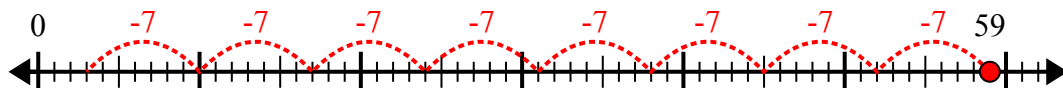
1. _____
2. _____
3. _____
4. _____
5. _____
6. _____
7. _____
8. _____
9. _____
10. _____



Sử dụng trục số để giải bài toán chia.

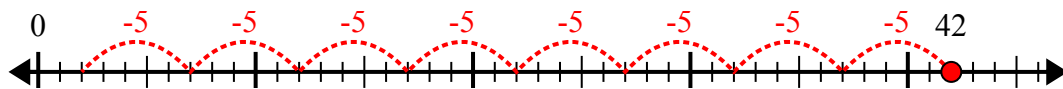
Câu trả lời

1) $59:7=$



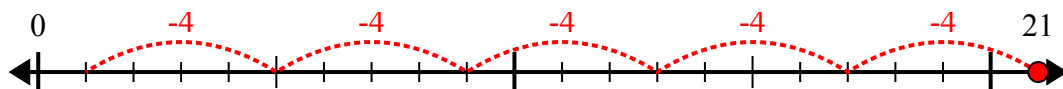
1. 8 dư 3

2) $42:5=$



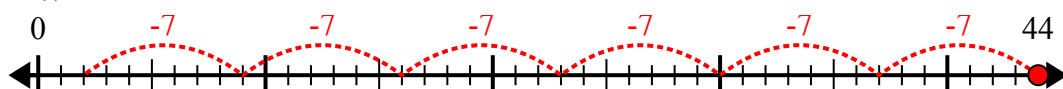
2. 8 dư 2

3) $21:4=$



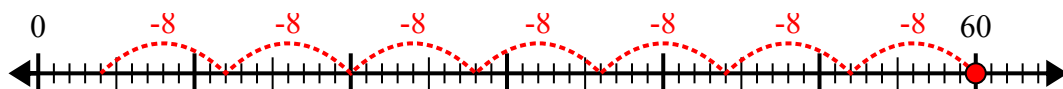
3. 5 dư 1

4) $44:7=$



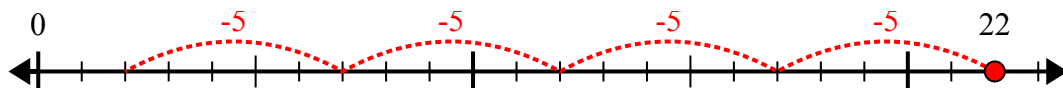
4. 6 dư 2

5) $60:8=$



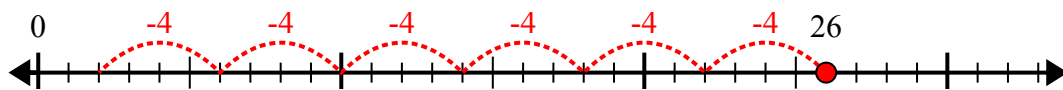
5. 7 dư 4

6) $22:5=$



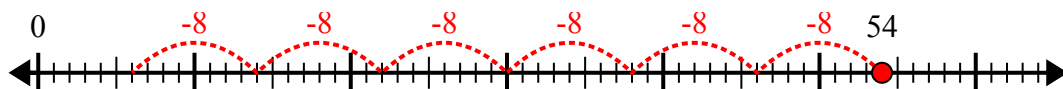
6. 4 dư 2

7) $26:4=$



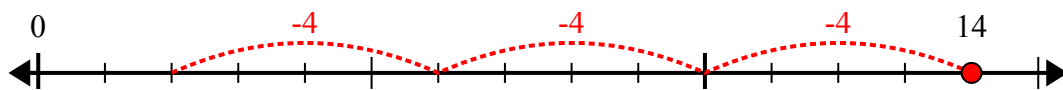
7. 6 dư 2

8) $54:8=$



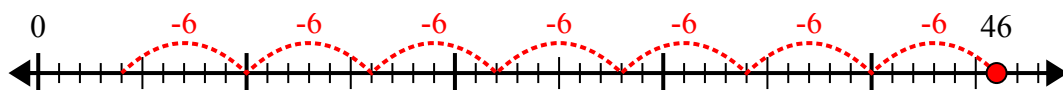
8. 6 dư 6

9) $14:4=$



9. 3 dư 2

10) $46:6=$

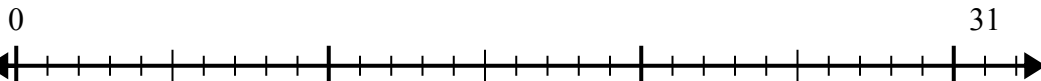


10. 7 dư 4

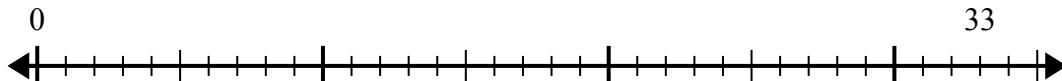


Sử dụng trục số để giải bài toán chia.

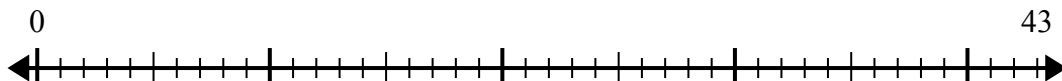
1) $31:6=$



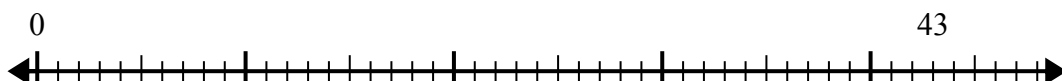
2) $33:4=$



3) $43:7=$



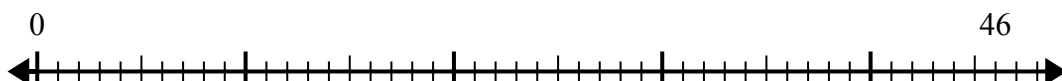
4) $43:5=$



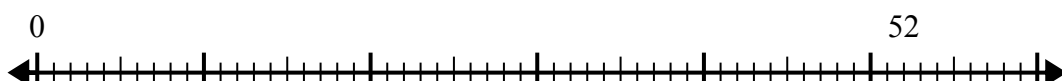
5) $41:8=$



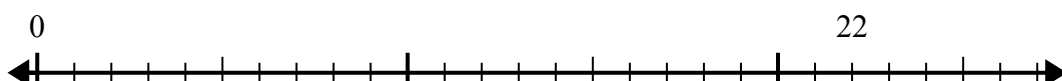
6) $46:6=$



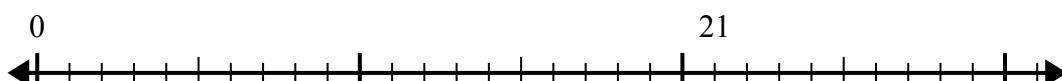
7) $52:6=$



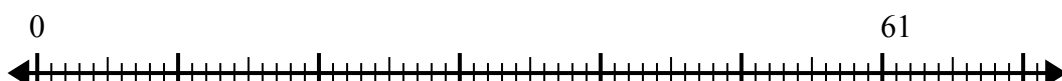
8) $22:4=$



9) $21:5=$



10) $61:8=$



Câu trả lời

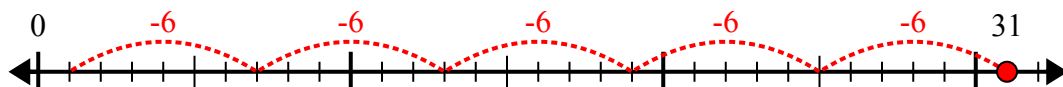
1. _____
2. _____
3. _____
4. _____
5. _____
6. _____
7. _____
8. _____
9. _____
10. _____



Sử dụng trục số để giải bài toán chia.

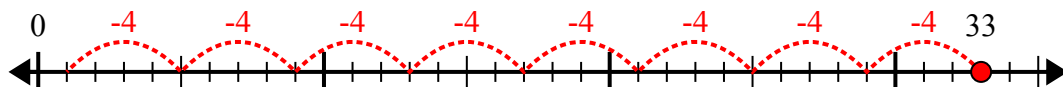
Câu trả lời

1) $31:6=$



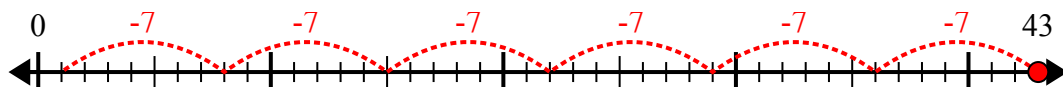
1. **5 dư 1**

2) $33:4=$



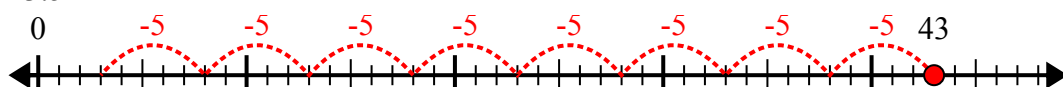
2. **8 dư 1**

3) $43:7=$



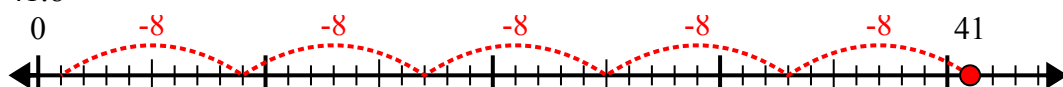
3. **6 dư 1**

4) $43:5=$



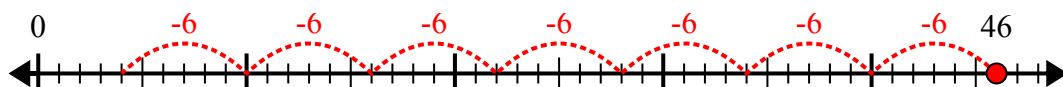
4. **8 dư 3**

5) $41:8=$



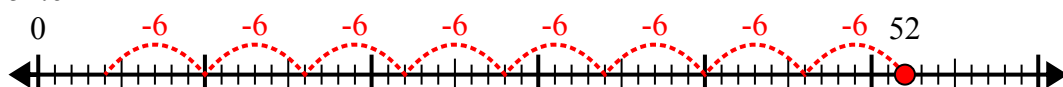
5. **5 dư 1**

6) $46:6=$



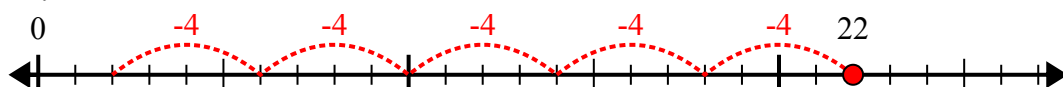
6. **7 dư 4**

7) $52:6=$



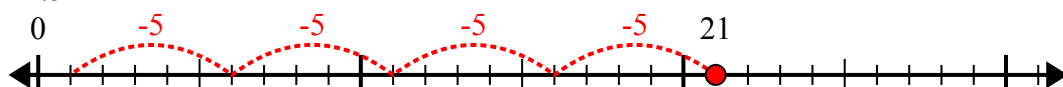
7. **8 dư 4**

8) $22:4=$



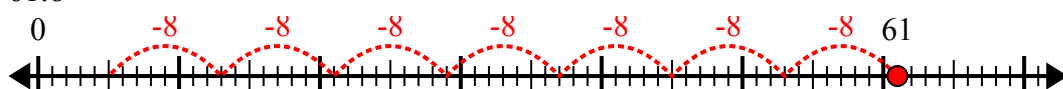
8. **5 dư 2**

9) $21:5=$



9. **4 dư 1**

10) $61:8=$



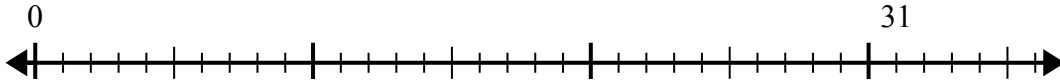
10. **7 dư 5**



Sử dụng trục số để giải bài toán chia.

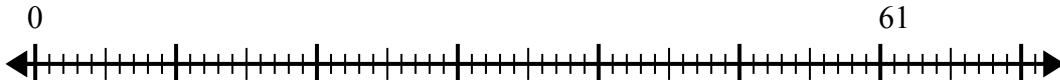
Câu trả lời

1) $31:8=$
0



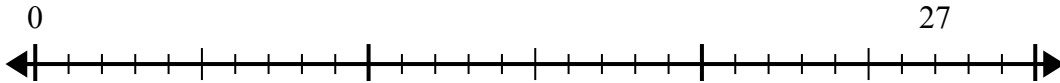
1. _____

2) $61:8=$
0



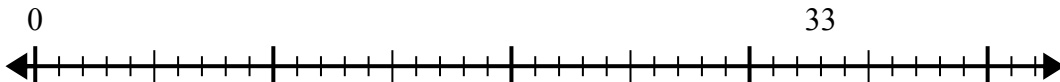
2. _____

3) $27:4=$
0



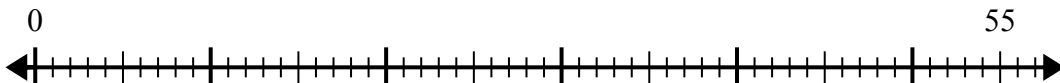
3. _____

4) $33:4=$
0



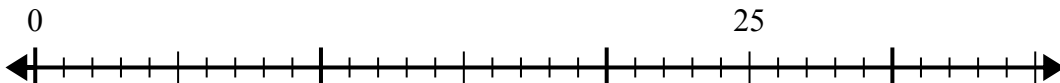
4. _____

5) $55:8=$
0



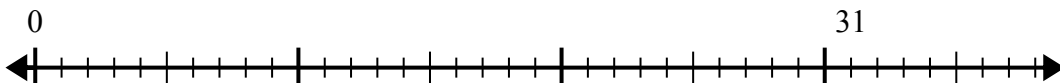
5. _____

6) $25:6=$
0



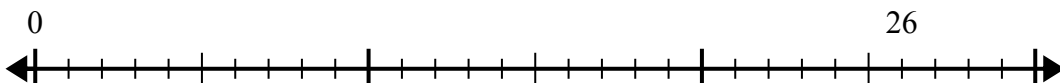
6. _____

7) $31:4=$
0



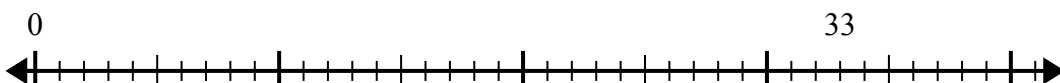
7. _____

8) $26:7=$
0



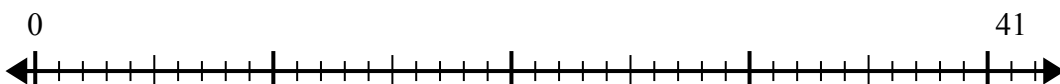
8. _____

9) $33:7=$
0



9. _____

10) $41:5=$
0

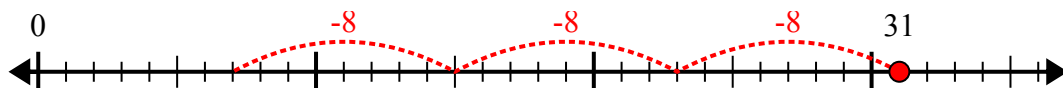


10. _____

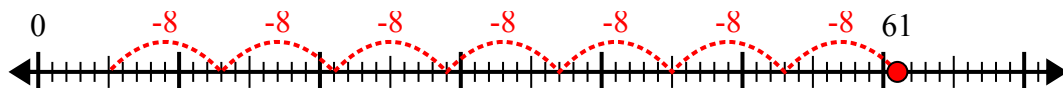


Sử dụng trục số để giải bài toán chia.

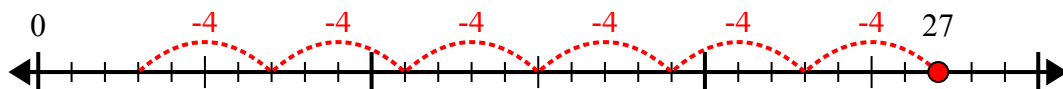
1) $31:8=$



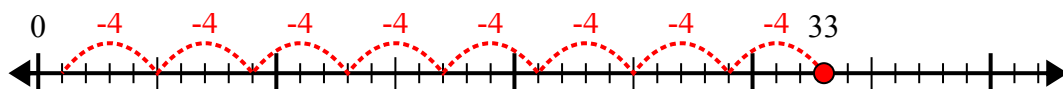
2) $61:8=$



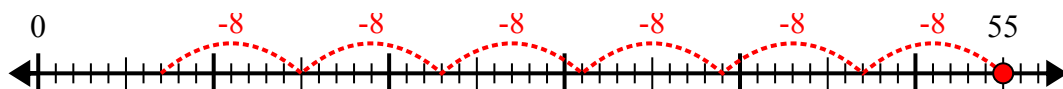
3) $27:4=$



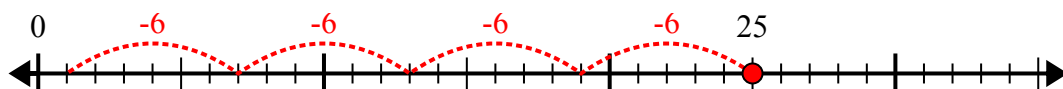
4) $33:4=$



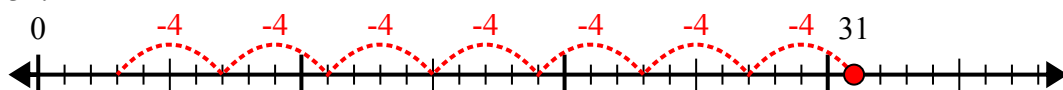
5) $55:8=$



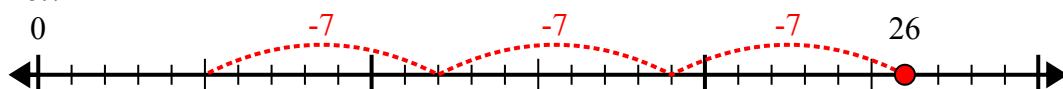
6) $25:6=$



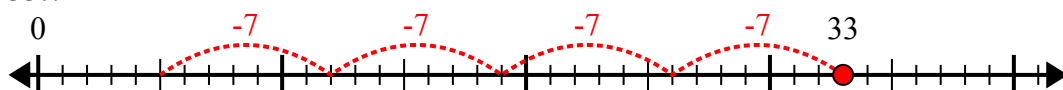
7) $31:4=$



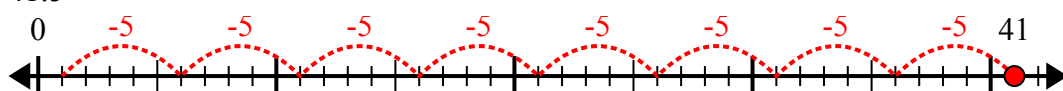
8) $26:7=$



9) $33:7=$



10) $41:5=$



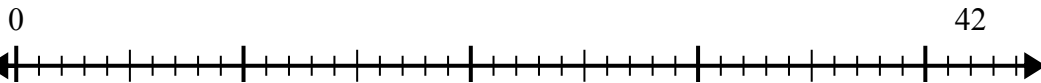
Câu trả lời

1. 3 dư 7
2. 7 dư 5
3. 6 dư 3
4. 8 dư 1
5. 6 dư 7
6. 4 dư 1
7. 7 dư 3
8. 3 dư 5
9. 4 dư 5
10. 8 dư 1

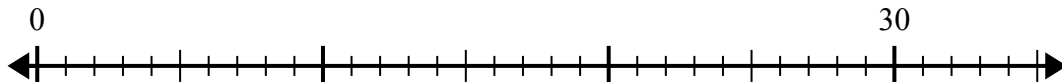


Sử dụng trục số để giải bài toán chia.

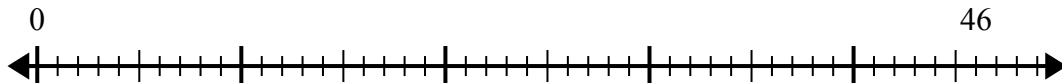
1) $42:5=$



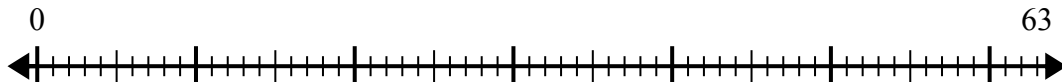
2) $30:4=$



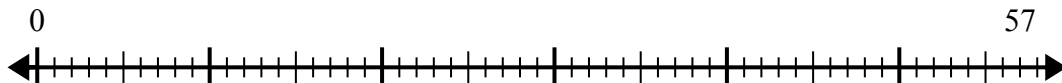
3) $46:6=$



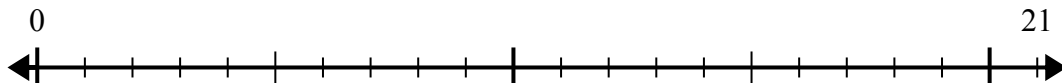
4) $63:8=$



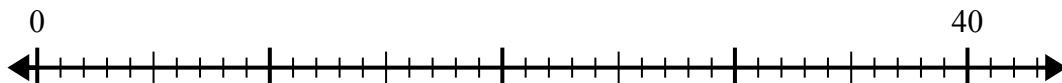
5) $57:7=$



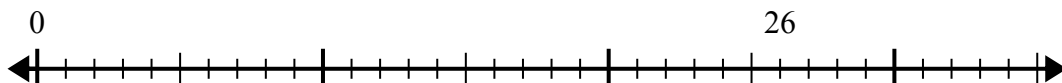
6) $21:5=$



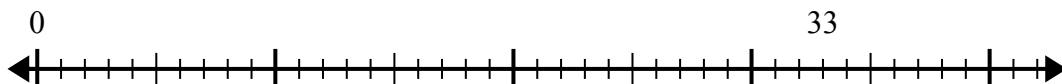
7) $40:7=$



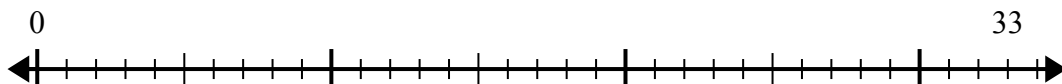
8) $26:8=$



9) $33:5=$



10) $33:4=$



Câu trả lời

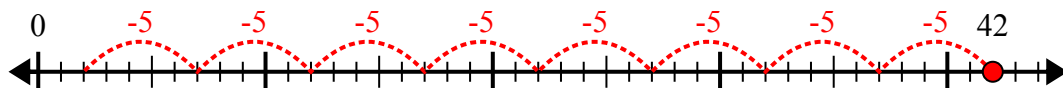
1. _____
2. _____
3. _____
4. _____
5. _____
6. _____
7. _____
8. _____
9. _____
10. _____



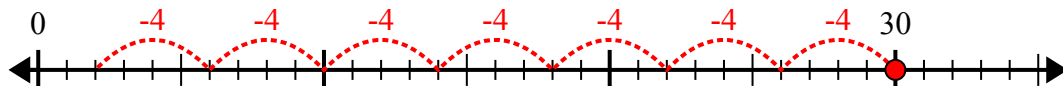
Sử dụng trục số để giải bài toán chia.

Câu trả lời

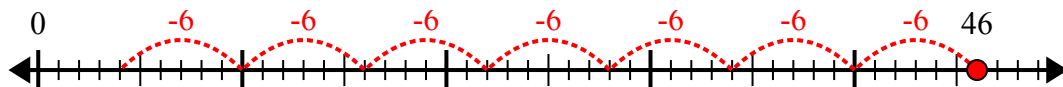
1) $42:5=$



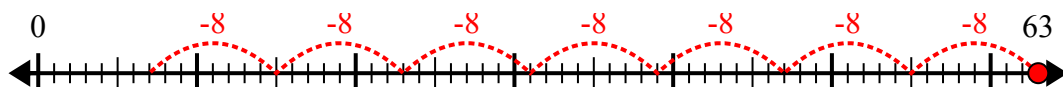
2) $30:4=$



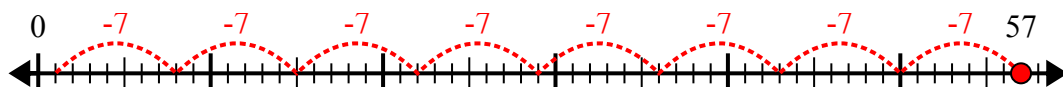
3) $46:6=$



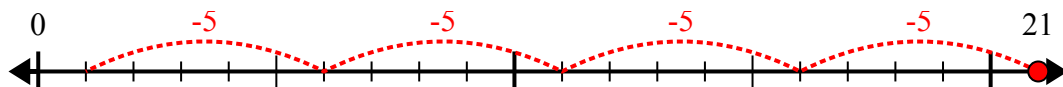
4) $63:8=$



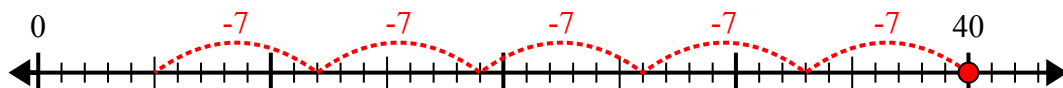
5) $57:7=$



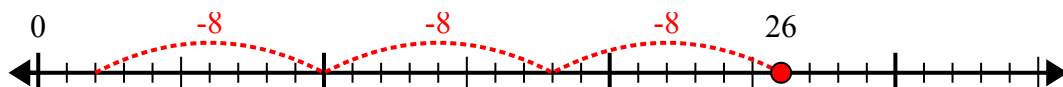
6) $21:5=$



7) $40:7=$



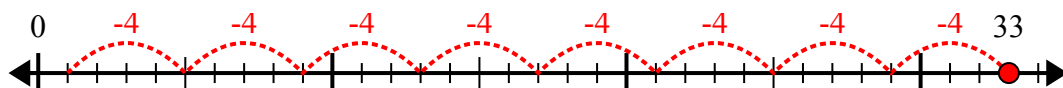
8) $26:8=$



9) $33:5=$



10) $33:4=$



1. **8 dư 2**

2. **7 dư 2**

3. **7 dư 4**

4. **7 dư 7**

5. **8 dư 1**

6. **4 dư 1**

7. **5 dư 5**

8. **3 dư 2**

9. **6 dư 3**

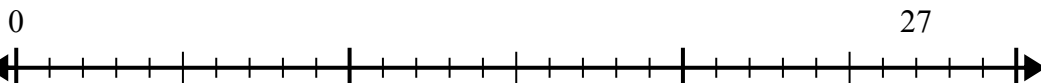
10. **8 dư 1**



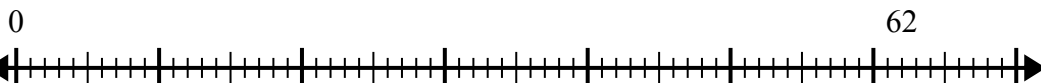
Sử dụng trục số để giải bài toán chia.

Câu trả lời

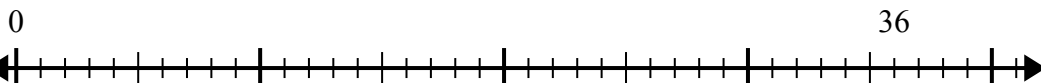
1) $27:4=$



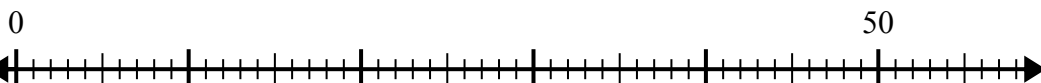
2) $62:8=$



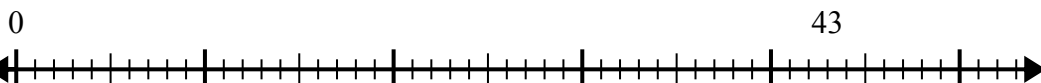
3) $36:5=$



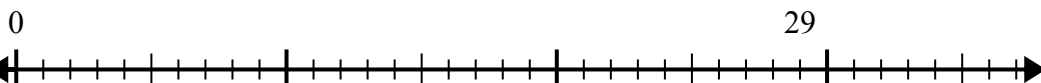
4) $50:8=$



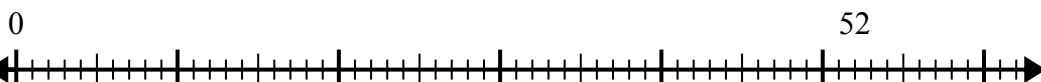
5) $43:6=$



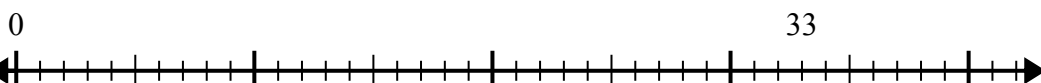
6) $29:6=$



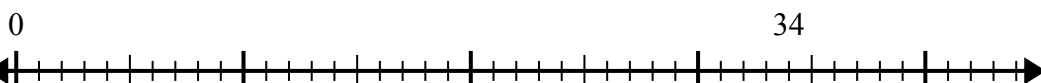
7) $52:6=$



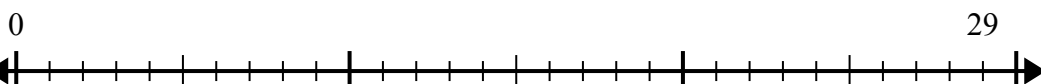
8) $33:5=$



9) $34:7=$



10) $29:4=$



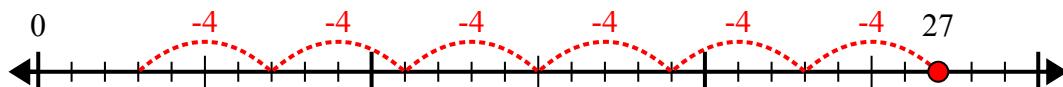
1. _____
2. _____
3. _____
4. _____
5. _____
6. _____
7. _____
8. _____
9. _____
10. _____



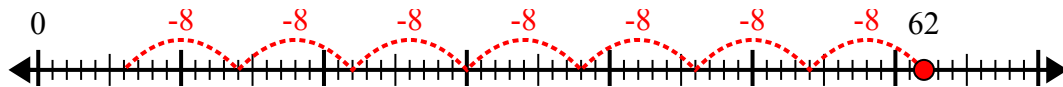
Sử dụng trục số để giải bài toán chia.

Câu trả lời

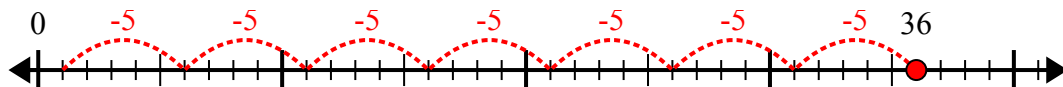
1) $27:4=$



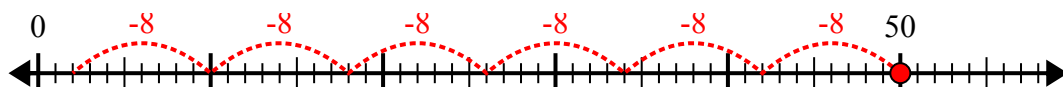
2) $62:8=$



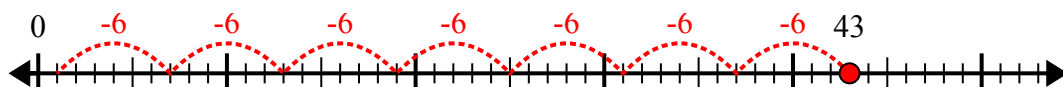
3) $36:5=$



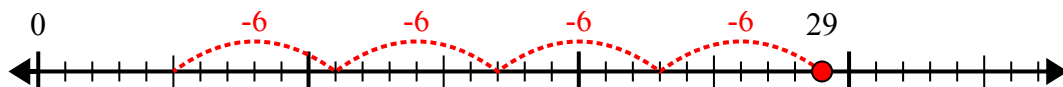
4) $50:8=$



5) $43:6=$



6) $29:6=$



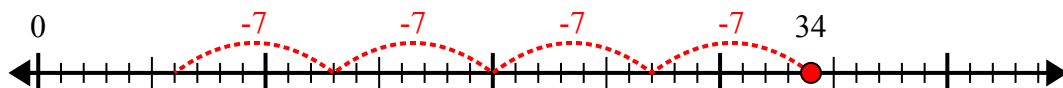
7) $52:6=$



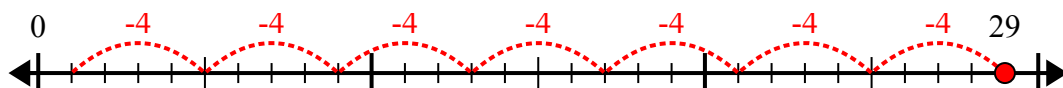
8) $33:5=$



9) $34:7=$



10) $29:4=$



1. **6 dư 3**

2. **7 dư 6**

3. **7 dư 1**

4. **6 dư 2**

5. **7 dư 1**

6. **4 dư 5**

7. **8 dư 4**

8. **6 dư 3**

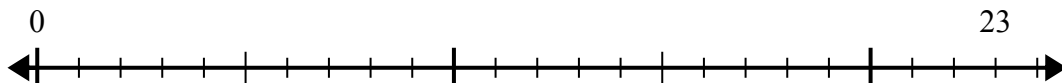
9. **4 dư 6**

10. **7 dư 1**

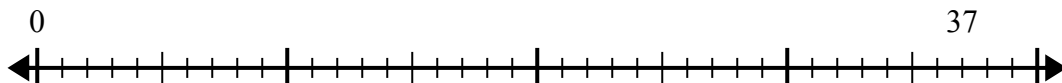


Sử dụng trục số để giải bài toán chia.

1) $23:4=$



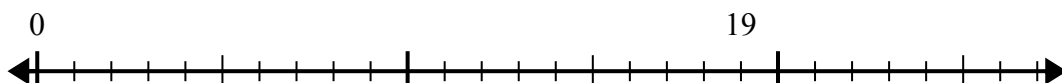
2) $37:8=$



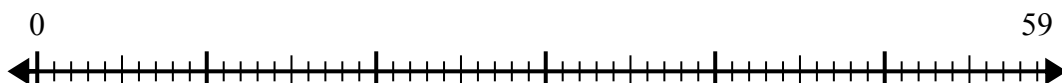
3) $15:4=$



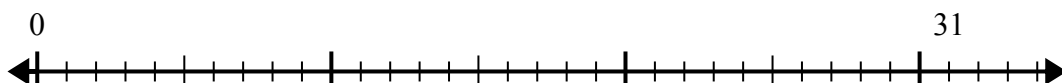
4) $19:6=$




5) $59:8=$



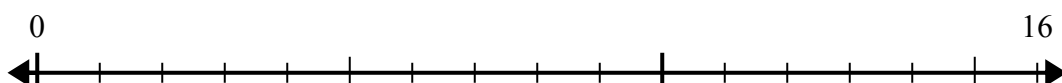
6) $31:8=$



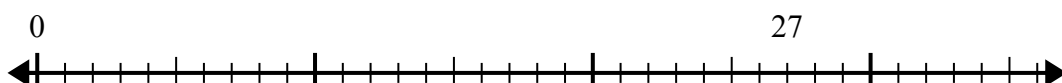
7) $60:7=$



8) $16:5=$



9) $27:4=$



10) $42:5=$



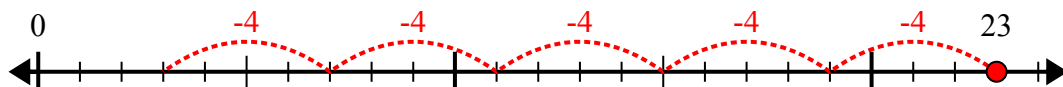
Câu trả lời

1. _____
2. _____
3. _____
4. _____
5. _____
6. _____
7. _____
8. _____
9. _____
10. _____

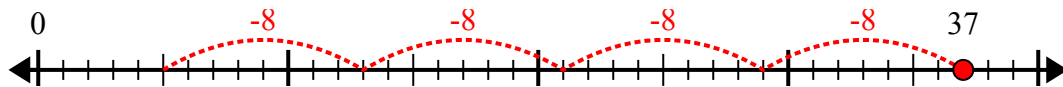


Sử dụng trục số để giải bài toán chia.

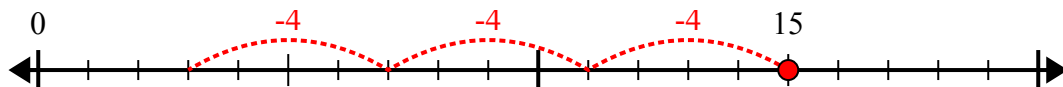
1) $23:4=$



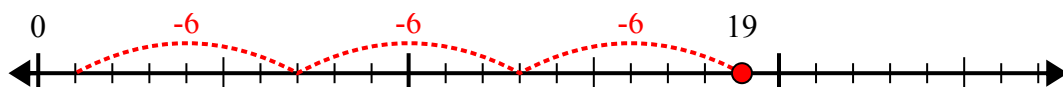
2) $37:8=$



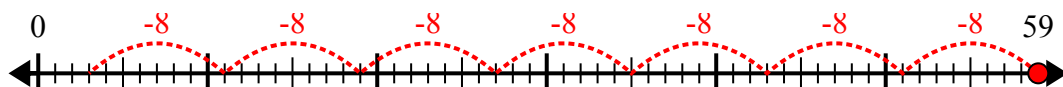
3) $15:4=$



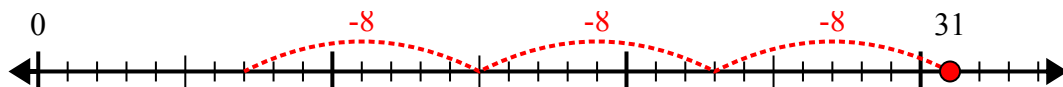
4) $19:6=$



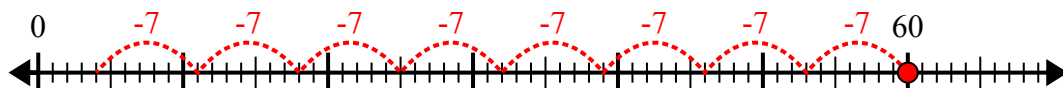
5) $59:8=$



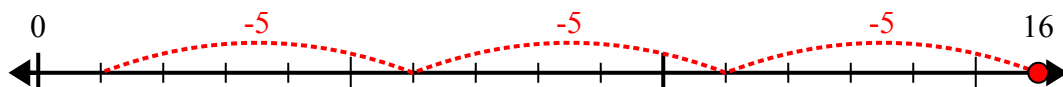
6) $31:8=$



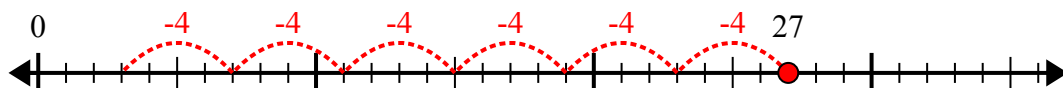
7) $60:7=$



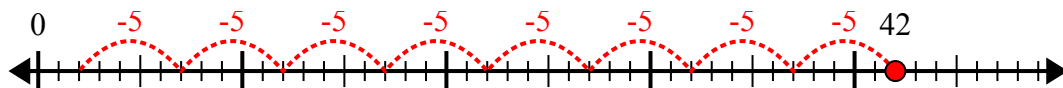
8) $16:5=$



9) $27:4=$



10) $42:5=$



Câu trả lời

1. **5 dư 3**

2. **4 dư 5**

3. **3 dư 3**

4. **3 dư 1**

5. **7 dư 3**

6. **3 dư 7**

7. **8 dư 4**

8. **3 dư 1**

9. **6 dư 3**

10. **8 dư 2**