

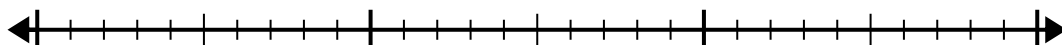


Sử dụng trục số để giải bài toán chia.

1) $27:4=$

0

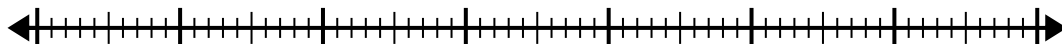
27



2) $62:8=$

0

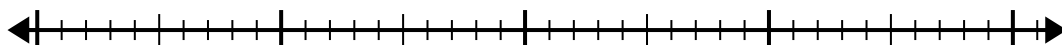
62



3) $36:5=$

0

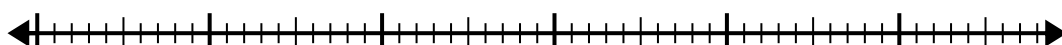
36



4) $50:8=$

0

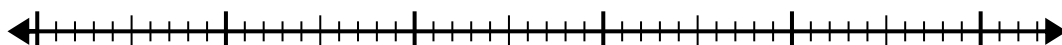
50



5) $43:6=$

0

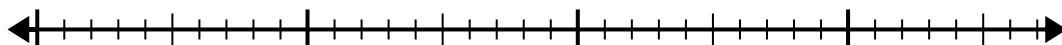
43



6) $29:6=$

0

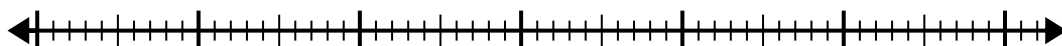
29



7) $52:6=$

0

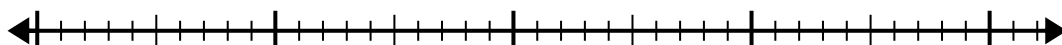
52



8) $33:5=$

0

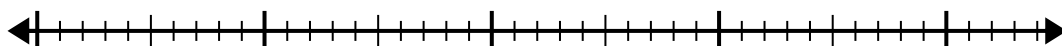
33



9) $34:7=$

0

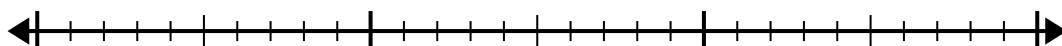
34



10) $29:4=$

0

29



Câu trả lời

1. _____

2. _____

3. _____

4. _____

5. _____

6. _____

7. _____

8. _____

9. _____

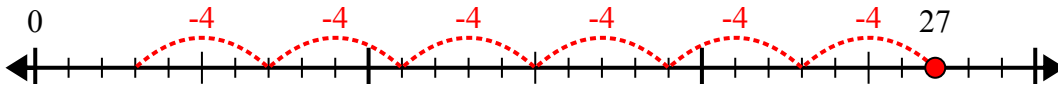
10. _____



Sử dụng trục số để giải bài toán chia.

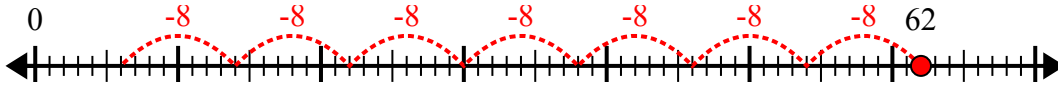
Câu trả lời

1) $27:4=$



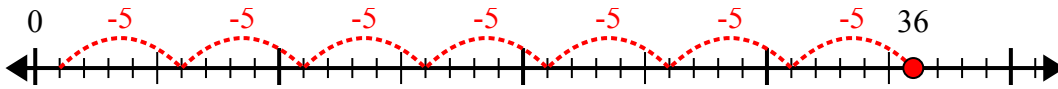
1. 6 dư 3

2) $62:8=$



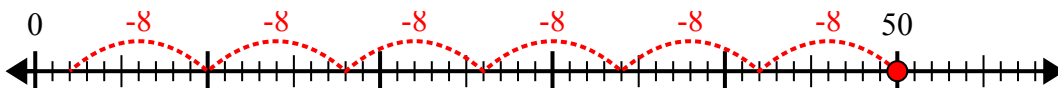
2. 7 dư 6

3) $36:5=$



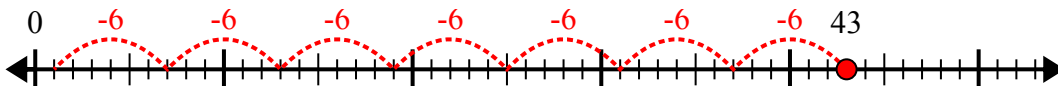
3. 7 dư 1

4) $50:8=$



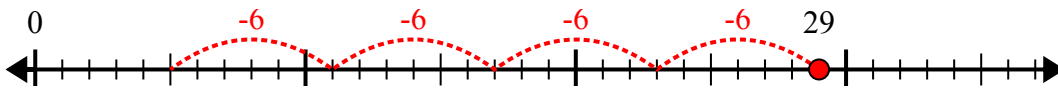
4. 6 dư 2

5) $43:6=$



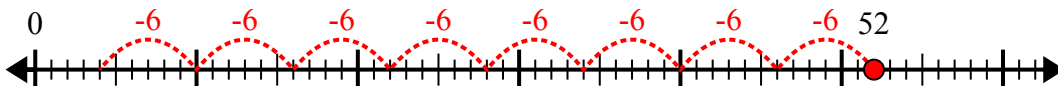
5. 7 dư 1

6) $29:6=$



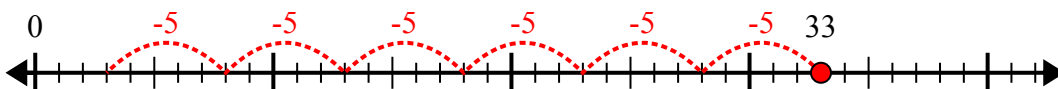
6. 4 dư 5

7) $52:6=$



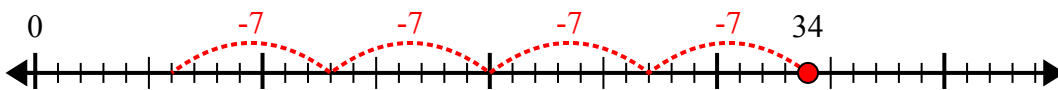
7. 8 dư 4

8) $33:5=$



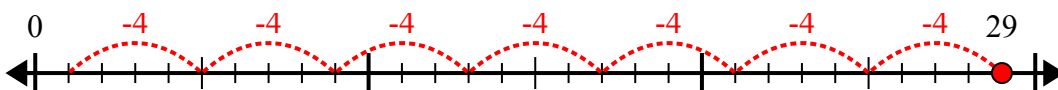
8. 6 dư 3

9) $34:7=$



9. 4 dư 6

10) $29:4=$



10. 7 dư 1