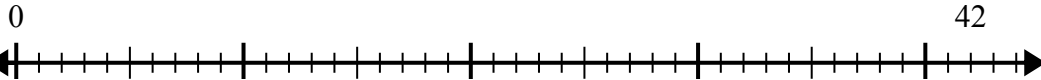


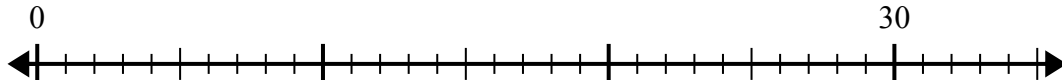


Sử dụng trục số để giải bài toán chia.

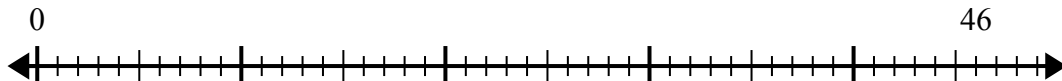
1) $42:5=$



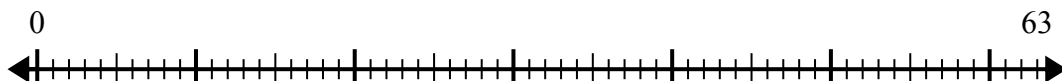
2) $30:4=$



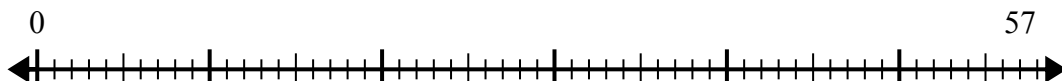
3) $46:6=$



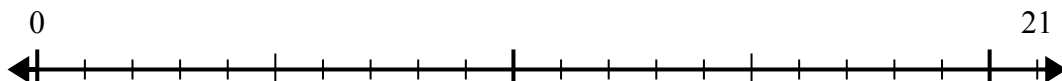
4) $63:8=$



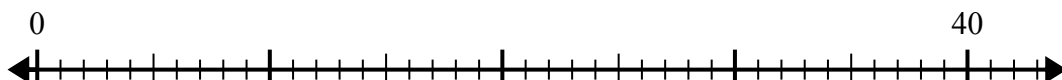
5) $57:7=$



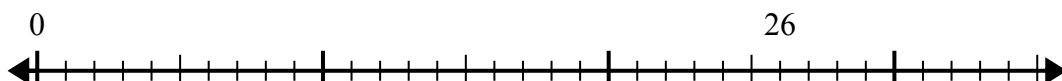
6) $21:5=$



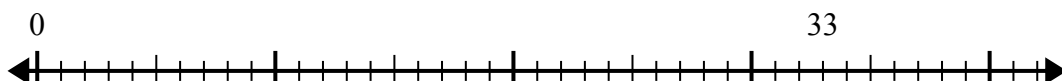
7) $40:7=$



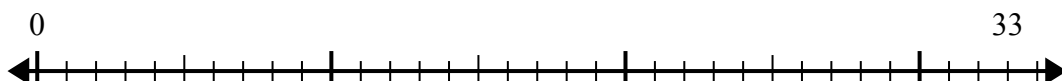
8) $26:8=$



9) $33:5=$



10) $33:4=$



Câu trả lời

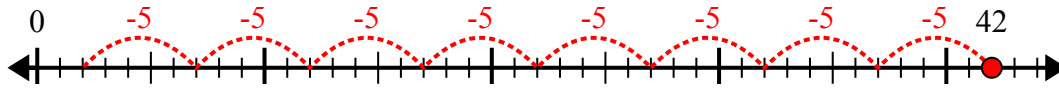
1. _____
2. _____
3. _____
4. _____
5. _____
6. _____
7. _____
8. _____
9. _____
10. _____



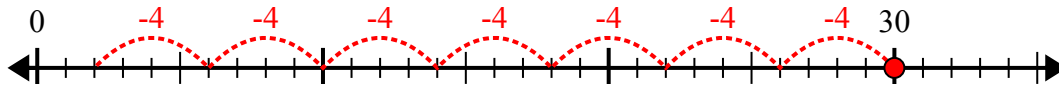
Sử dụng trục số để giải bài toán chia.

Câu trả lời

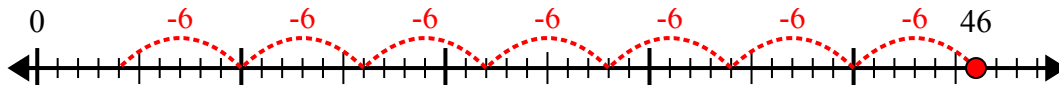
1) $42:5=$



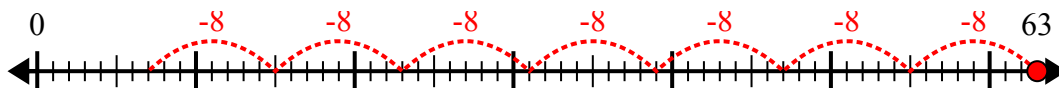
2) $30:4=$



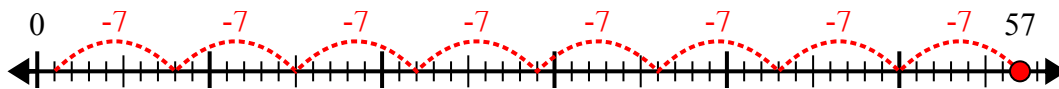
3) $46:6=$



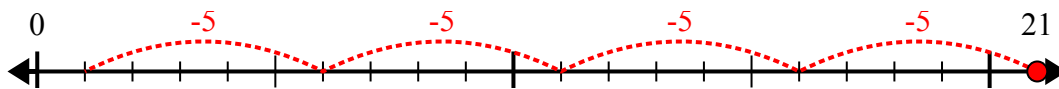
4) $63:8=$



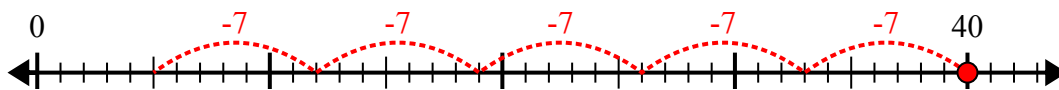
5) $57:7=$



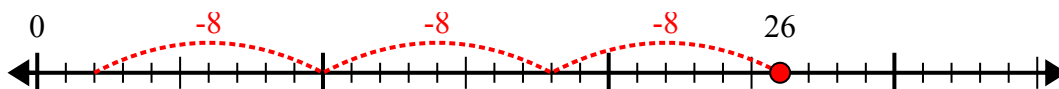
6) $21:5=$



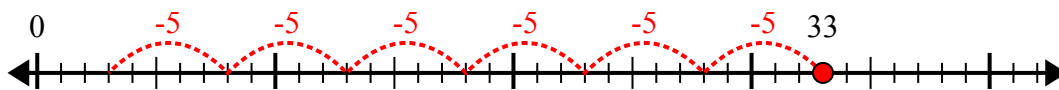
7) $40:7=$



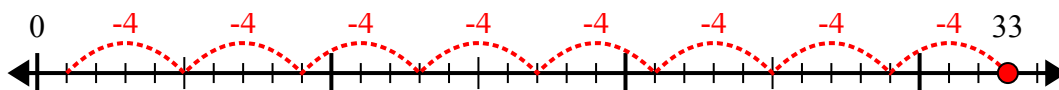
8) $26:8=$



9) $33:5=$



10) $33:4=$



1. 8 dư 2
2. 7 dư 2
3. 7 dư 4
4. 7 dư 7
5. 8 dư 1
6. 4 dư 1
7. 5 dư 5
8. 3 dư 2
9. 6 dư 3
10. 8 dư 1