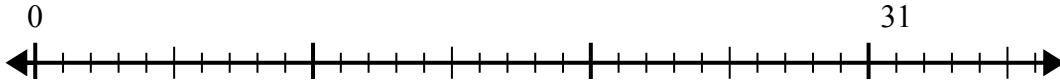


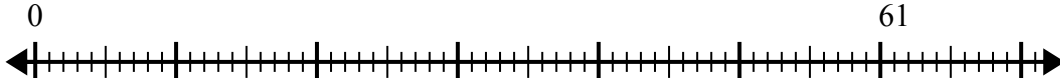


Sử dụng trục số để giải bài toán chia.

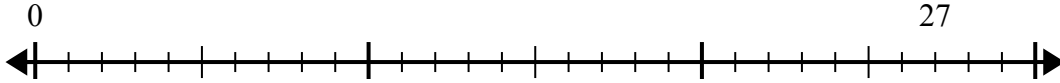
1) $31:8=$
0



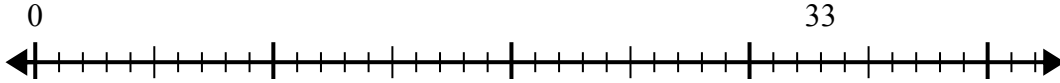
2) $61:8=$
0



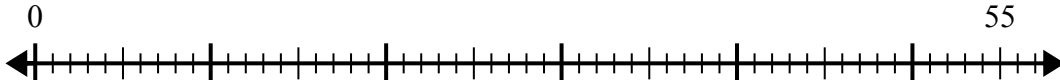
3) $27:4=$
0



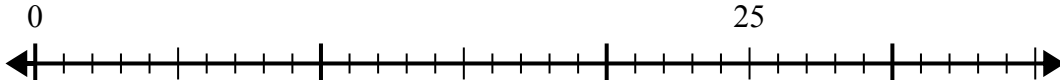
4) $33:4=$
0



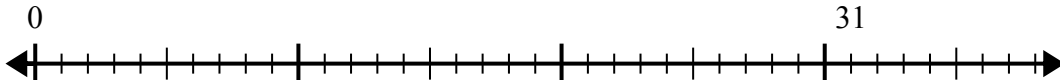
5) $55:8=$
0



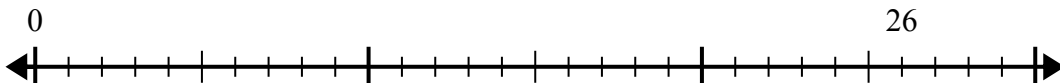
6) $25:6=$
0



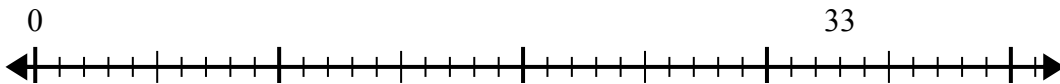
7) $31:4=$
0



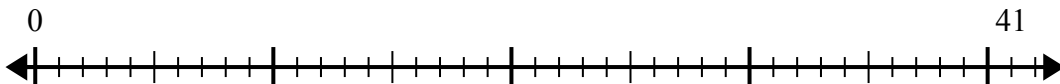
8) $26:7=$
0



9) $33:7=$
0



10) $41:5=$
0



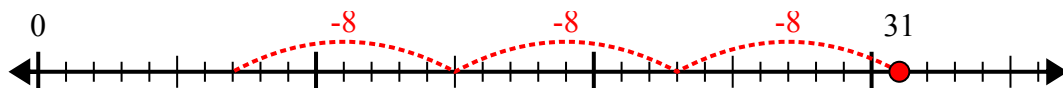
Câu trả lời

1. _____
2. _____
3. _____
4. _____
5. _____
6. _____
7. _____
8. _____
9. _____
10. _____

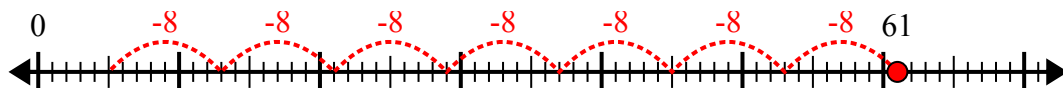


Sử dụng trục số để giải bài toán chia.

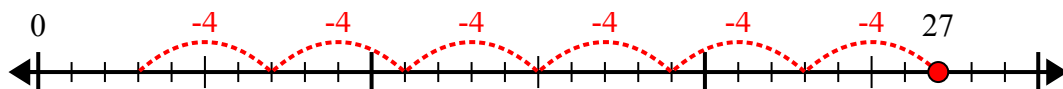
1) $31:8=$



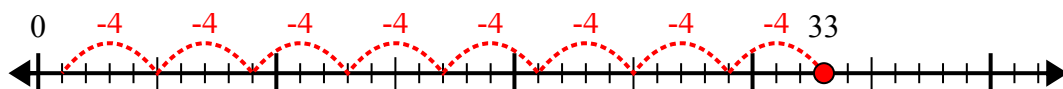
2) $61:8=$



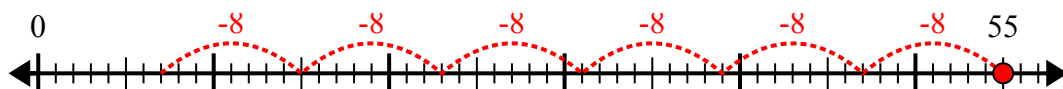
3) $27:4=$



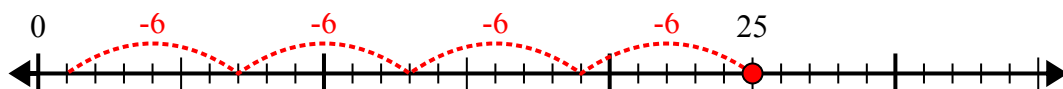
4) $33:4=$



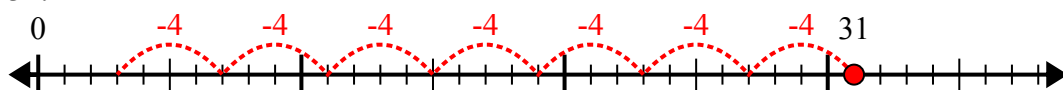
5) $55:8=$



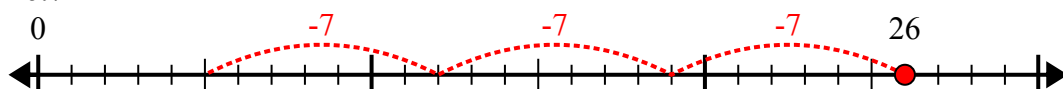
6) $25:6=$



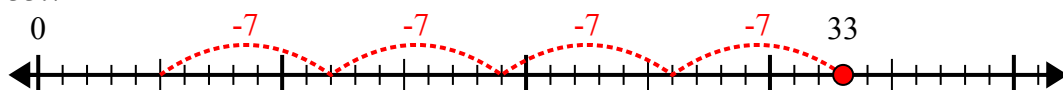
7) $31:4=$



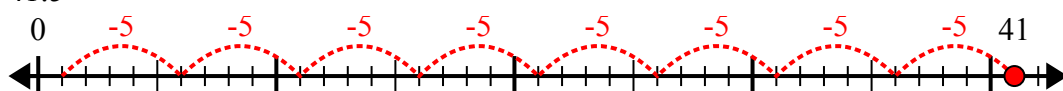
8) $26:7=$



9) $33:7=$



10) $41:5=$



Câu trả lời

1. 3 dư 7

2. 7 dư 5

3. 6 dư 3

4. 8 dư 1

5. 6 dư 7

6. 4 dư 1

7. 7 dư 3

8. 3 dư 5

9. 4 dư 5

10. 8 dư 1