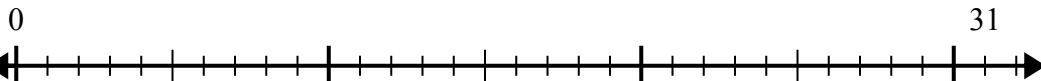


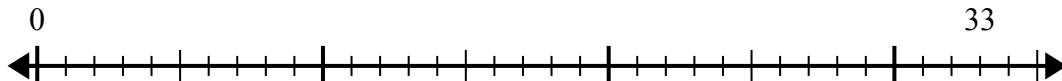


Sử dụng trục số để giải bài toán chia.

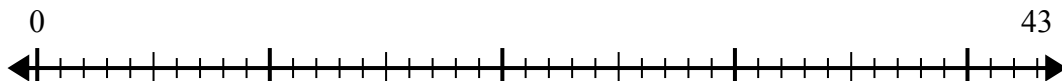
1) $31:6=$



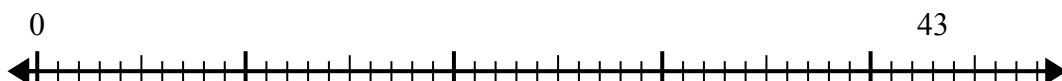
2) $33:4=$



3) $43:7=$



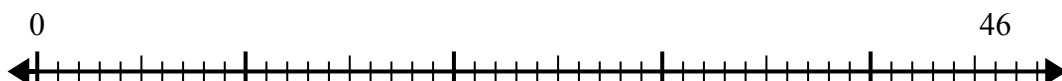
4) $43:5=$



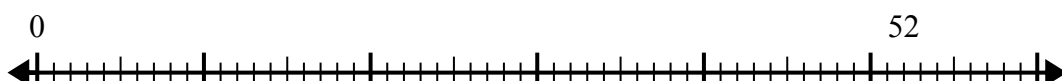
5) $41:8=$



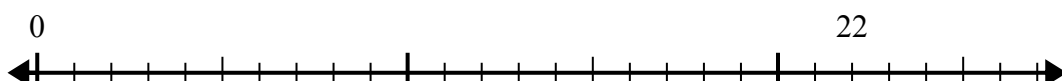
6) $46:6=$



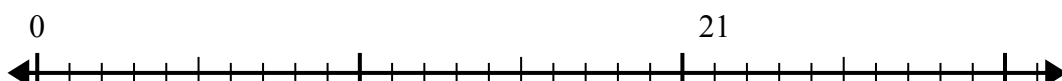
7) $52:6=$



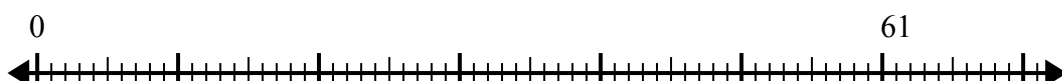
8) $22:4=$



9) $21:5=$



10) $61:8=$



Câu trả lời

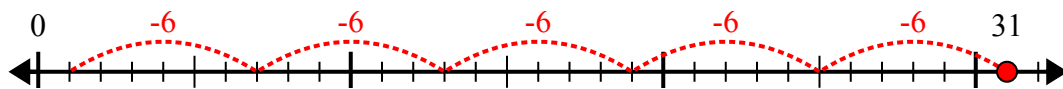
1. _____
2. _____
3. _____
4. _____
5. _____
6. _____
7. _____
8. _____
9. _____
10. _____



Sử dụng trục số để giải bài toán chia.

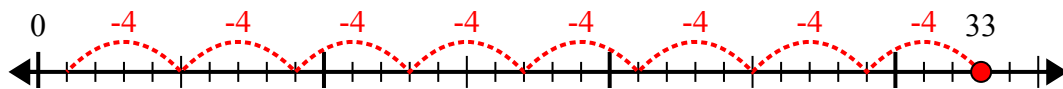
Câu trả lời

1) $31:6=$



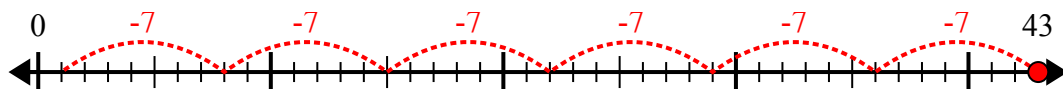
1. **5 dư 1**

2) $33:4=$



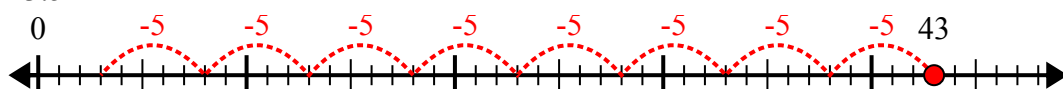
2. **8 dư 1**

3) $43:7=$



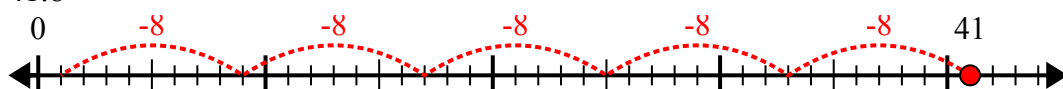
3. **6 dư 1**

4) $43:5=$



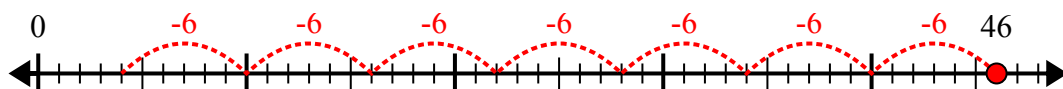
4. **8 dư 3**

5) $41:8=$



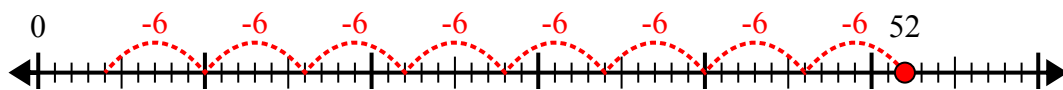
5. **5 dư 1**

6) $46:6=$



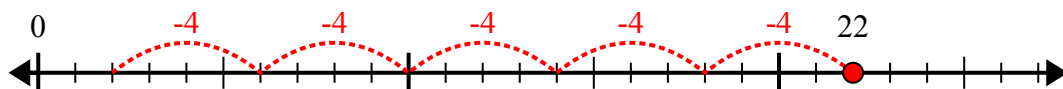
6. **7 dư 4**

7) $52:6=$



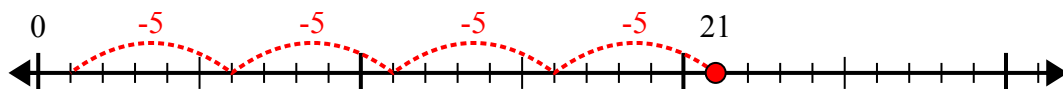
7. **8 dư 4**

8) $22:4=$



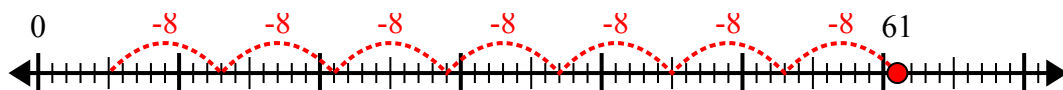
8. **5 dư 2**

9) $21:5=$



9. **4 dư 1**

10) $61:8=$



10. **7 dư 5**