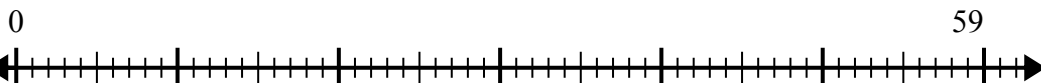




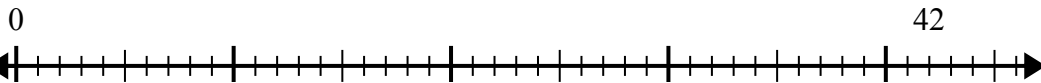
Sử dụng trục số để giải bài toán chia.

Câu trả lời

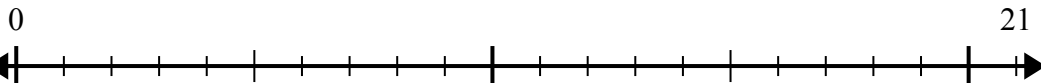
1) $59:7=$



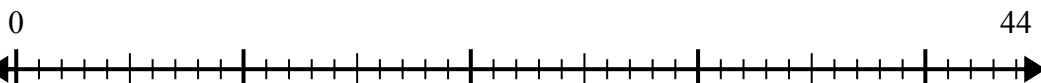
2) $42:5=$



3) $21:4=$



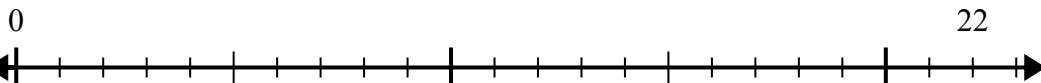
4) $44:7=$



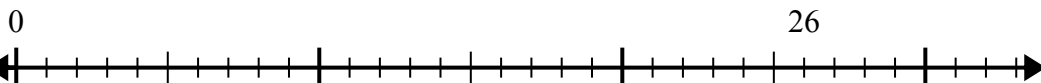
5) $60:8=$



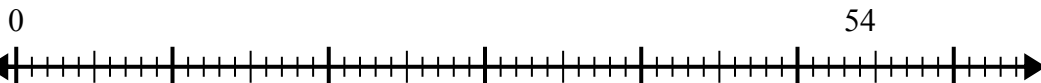
6) $22:5=$



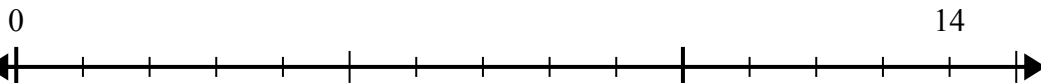
7) $26:4=$



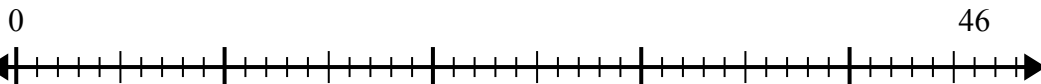
8) $54:8=$



9) $14:4=$



10) $46:6=$



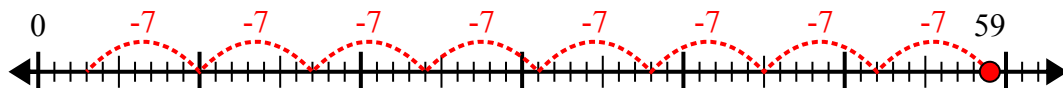
1. _____
2. _____
3. _____
4. _____
5. _____
6. _____
7. _____
8. _____
9. _____
10. _____



Sử dụng trục số để giải bài toán chia.

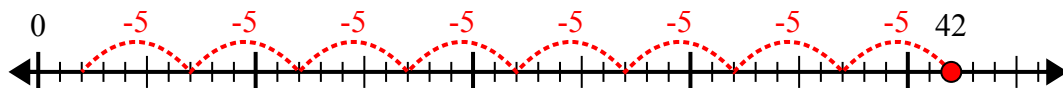
Câu trả lời

1) $59:7=$



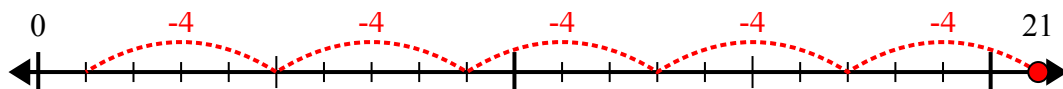
1. 8 dư 3

2) $42:5=$



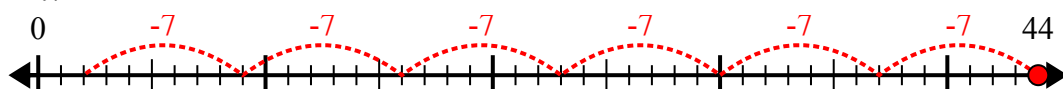
2. 8 dư 2

3) $21:4=$



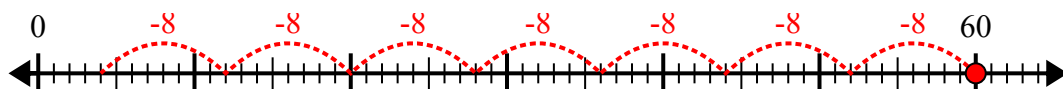
3. 5 dư 1

4) $44:7=$



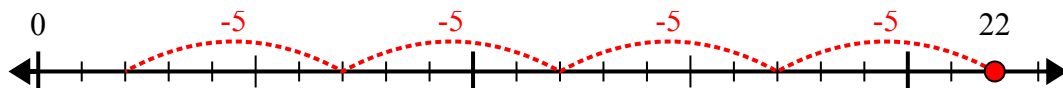
4. 6 dư 2

5) $60:8=$



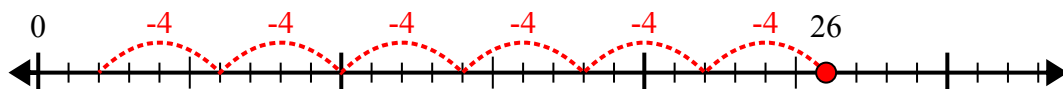
5. 7 dư 4

6) $22:5=$



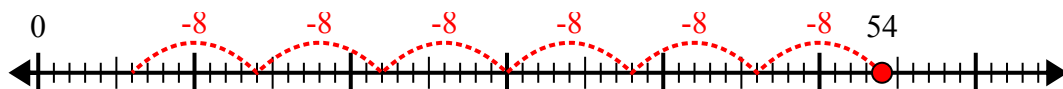
6. 4 dư 2

7) $26:4=$



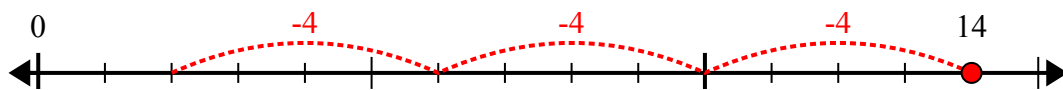
7. 6 dư 2

8) $54:8=$



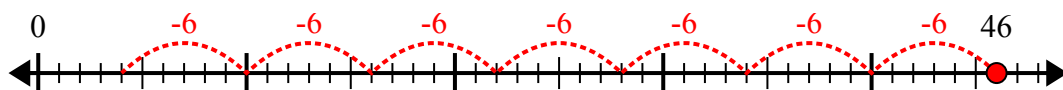
8. 6 dư 6

9) $14:4=$



9. 3 dư 2

10) $46:6=$



10. 7 dư 4