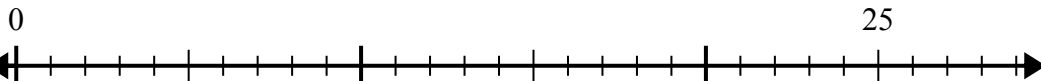


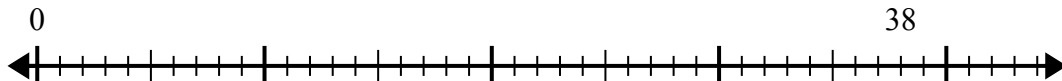


Sử dụng trục số để giải bài toán chia.

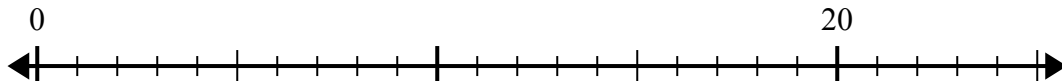
1) $25:6=$



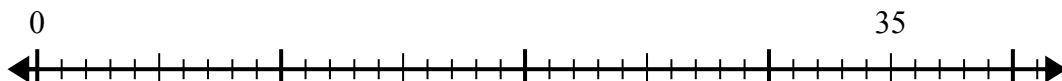
2) $38:7=$



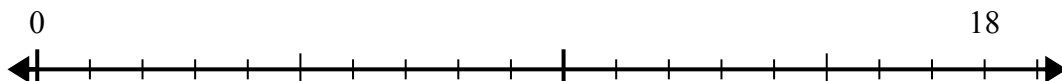
3) $20:6=$



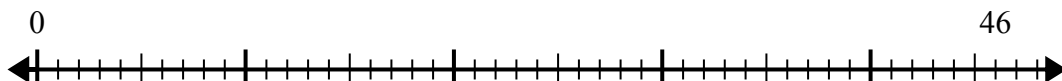
4) $35:6=$



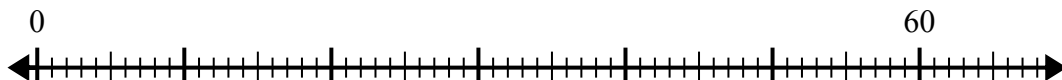
5) $18:5=$



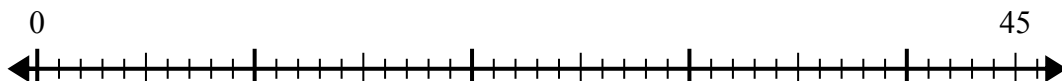
6) $46:6=$



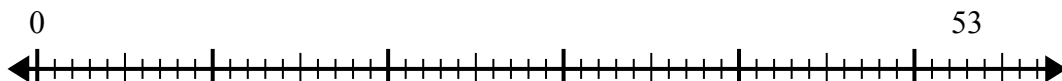
7) $60:8=$



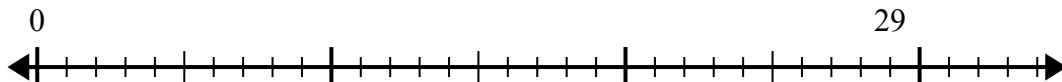
8) $45:7=$



9) $53:8=$



10) $29:4=$



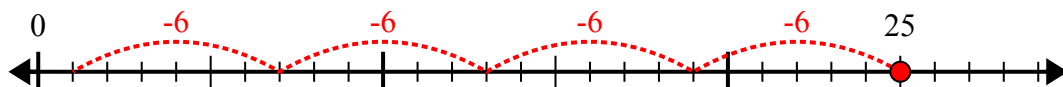
Câu trả lời

1. _____
2. _____
3. _____
4. _____
5. _____
6. _____
7. _____
8. _____
9. _____
10. _____

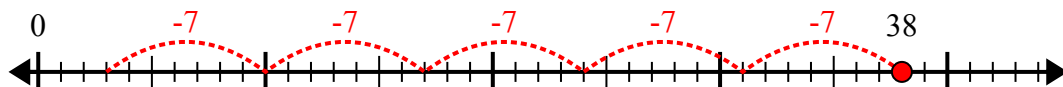


Sử dụng trục số để giải bài toán chia.

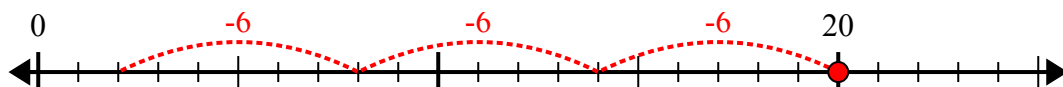
1) $25:6=$



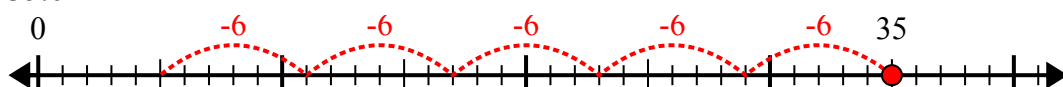
2) $38:7=$



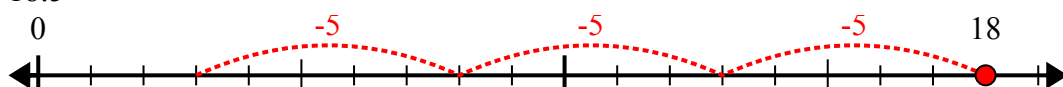
3) $20:6=$



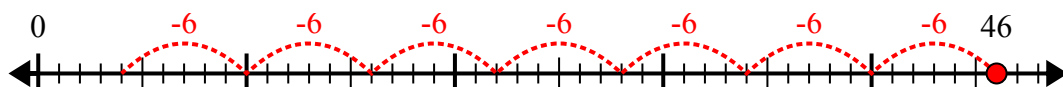
4) $35:6=$



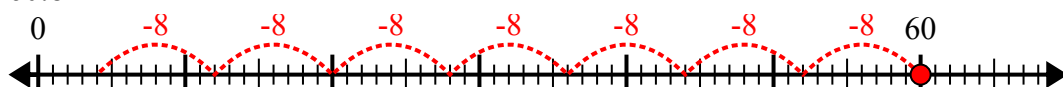
5) $18:5=$



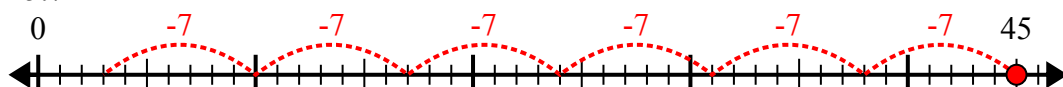
6) $46:6=$



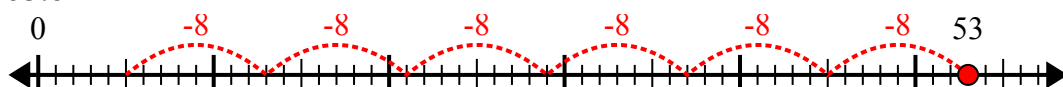
7) $60:8=$



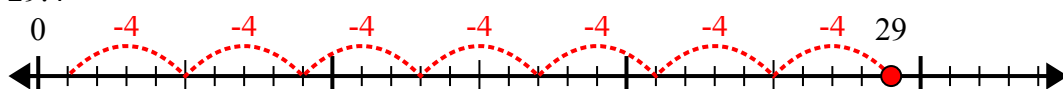
8) $45:7=$



9) $53:8=$



10) $29:4=$



Câu trả lời

1. 4 dư 1
2. 5 dư 3
3. 3 dư 2
4. 5 dư 5
5. 3 dư 3
6. 7 dư 4
7. 7 dư 4
8. 6 dư 3
9. 6 dư 5
10. 7 dư 1