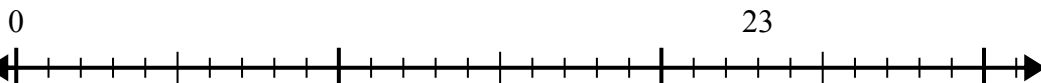




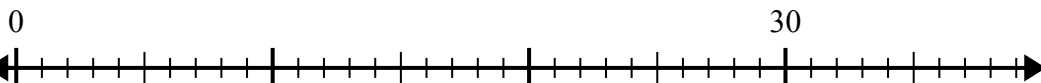
Sử dụng trục số để giải bài toán chia.

**Câu trả lời**

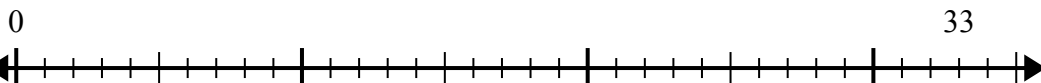
1)  $23:5=$



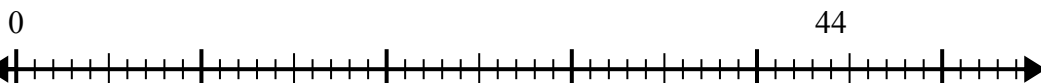
2)  $30:4=$



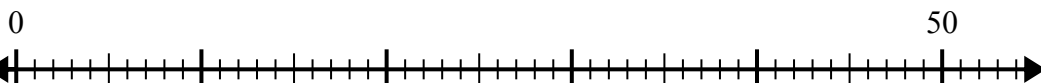
3)  $33:6=$



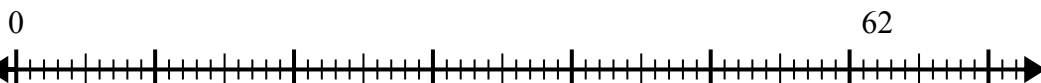
4)  $44:6=$



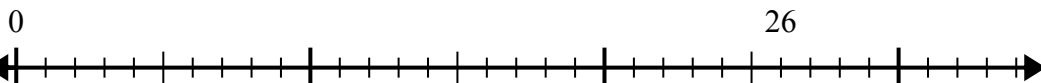
5)  $50:6=$



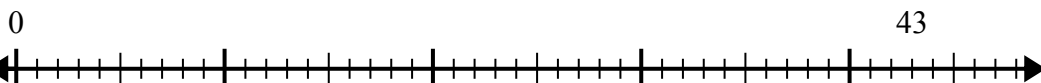
6)  $62:8=$



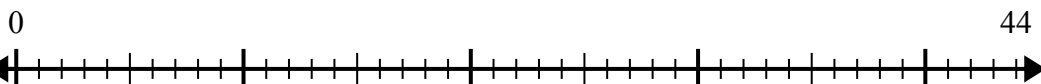
7)  $26:6=$



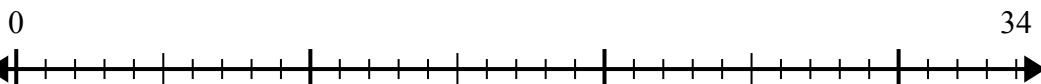
8)  $43:8=$



9)  $44:7=$



10)  $34:4=$



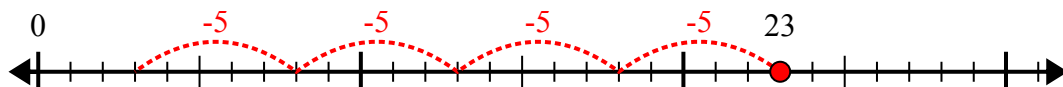
1. \_\_\_\_\_
2. \_\_\_\_\_
3. \_\_\_\_\_
4. \_\_\_\_\_
5. \_\_\_\_\_
6. \_\_\_\_\_
7. \_\_\_\_\_
8. \_\_\_\_\_
9. \_\_\_\_\_
10. \_\_\_\_\_



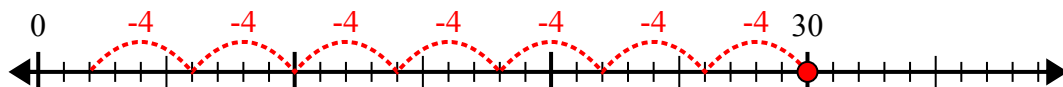
Sử dụng trục số để giải bài toán chia.

**Câu trả lời**

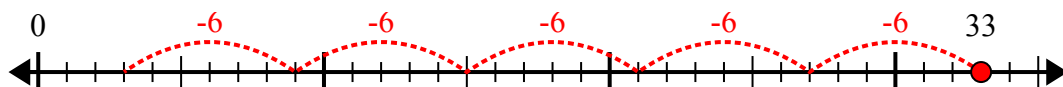
1)  $23:5=$



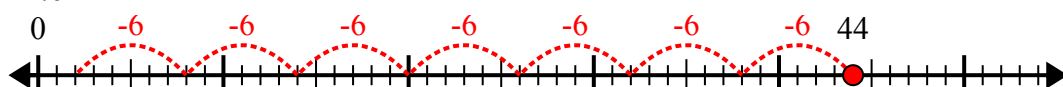
2)  $30:4=$



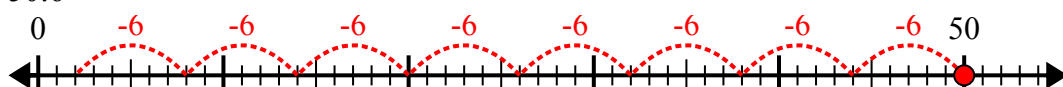
3)  $33:6=$



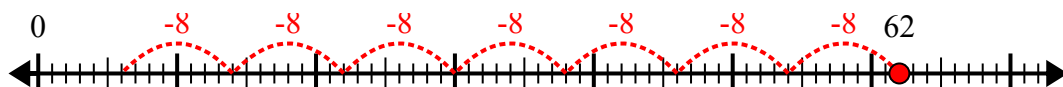
4)  $44:6=$



5)  $50:6=$



6)  $62:8=$



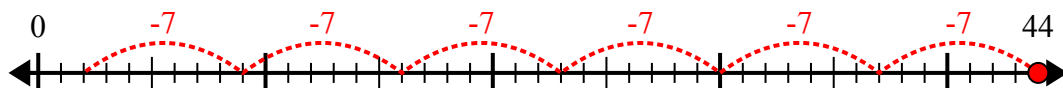
7)  $26:6=$



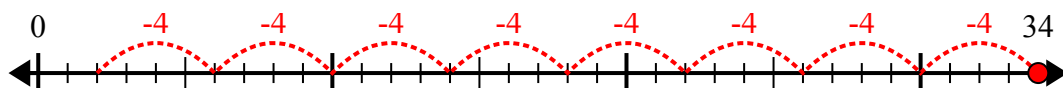
8)  $43:8=$



9)  $44:7=$



10)  $34:4=$



1. 4 dư 3
2. 7 dư 2
3. 5 dư 3
4. 7 dư 2
5. 8 dư 2
6. 7 dư 6
7. 4 dư 2
8. 5 dư 3
9. 6 dư 2
10. 8 dư 2