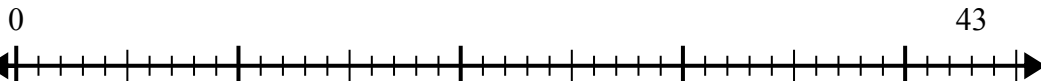




Sử dụng trục số để giải bài toán chia.

1)  $43:5=$



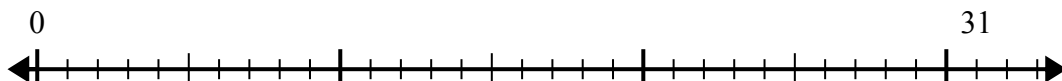
2)  $60:7=$



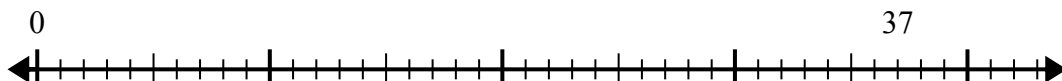
3)  $16:5=$



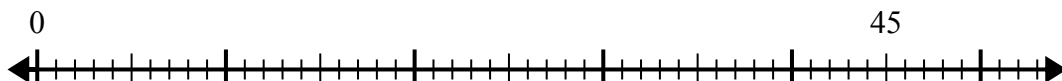
4)  $31:4=$



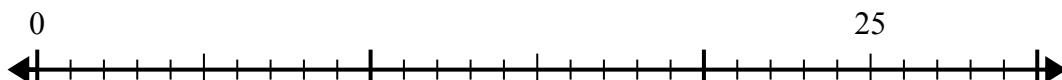
5)  $37:7=$



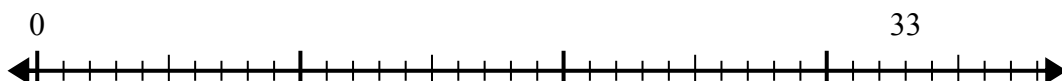
6)  $45:8=$



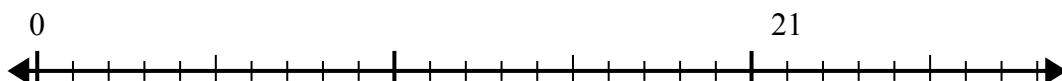
7)  $25:4=$



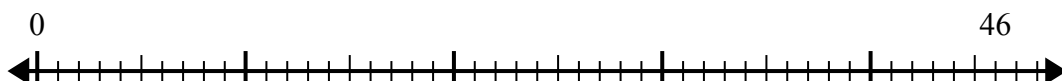
8)  $33:5=$



9)  $21:4=$



10)  $46:6=$



**Câu trả lời**

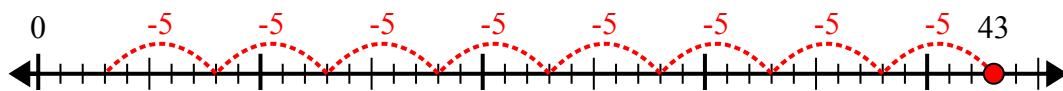
1. \_\_\_\_\_
2. \_\_\_\_\_
3. \_\_\_\_\_
4. \_\_\_\_\_
5. \_\_\_\_\_
6. \_\_\_\_\_
7. \_\_\_\_\_
8. \_\_\_\_\_
9. \_\_\_\_\_
10. \_\_\_\_\_



Sử dụng trục số để giải bài toán chia.

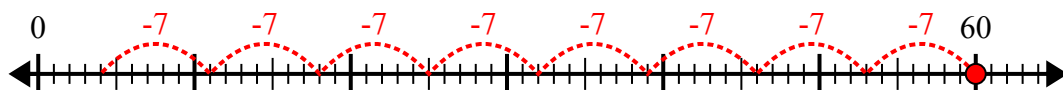
**Câu trả lời**

1)  $43:5=$



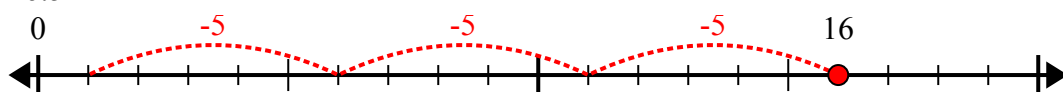
1. 8 dư 3

2)  $60:7=$



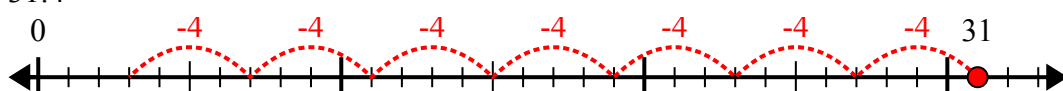
2. 8 dư 4

3)  $16:5=$



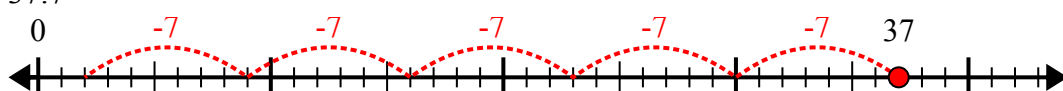
3. 3 dư 1

4)  $31:4=$



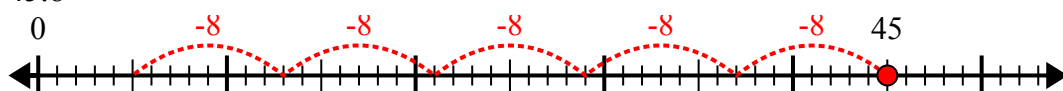
4. 7 dư 3

5)  $37:7=$



5. 5 dư 2

6)  $45:8=$



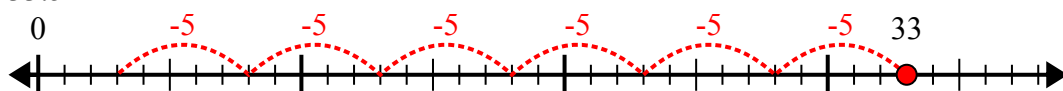
6. 5 dư 5

7)  $25:4=$



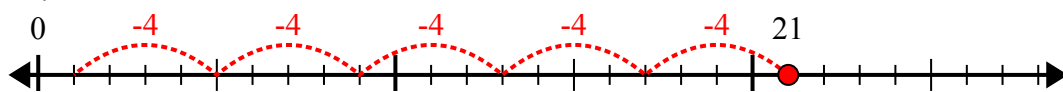
7. 6 dư 1

8)  $33:5=$



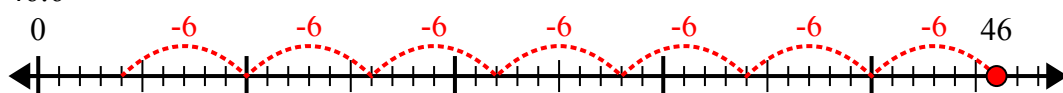
8. 6 dư 3

9)  $21:4=$



9. 5 dư 1

10)  $46:6=$



10. 7 dư 4