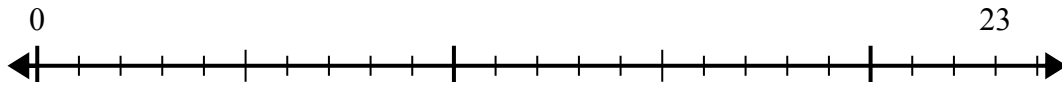


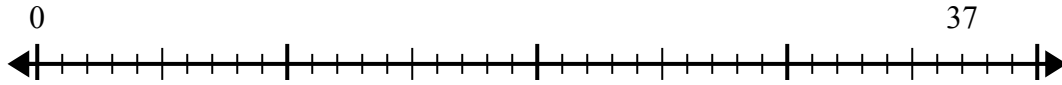


Sử dụng trục số để giải bài toán chia.

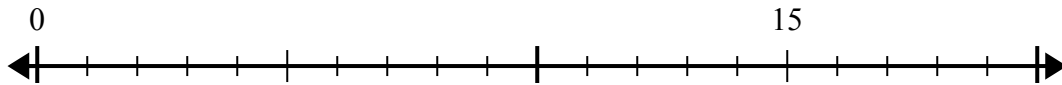
1) $23:4=$



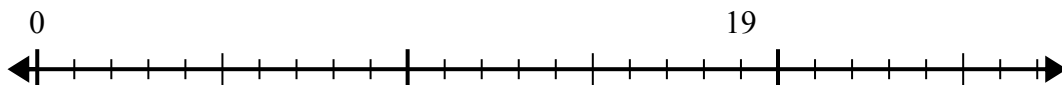
2) $37:8=$



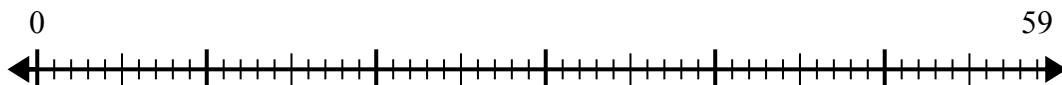
3) $15:4=$



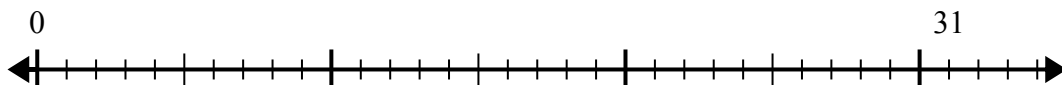
4) $19:6=$



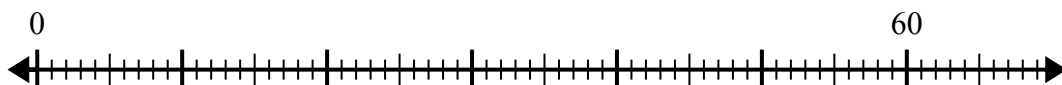
5) $59:8=$



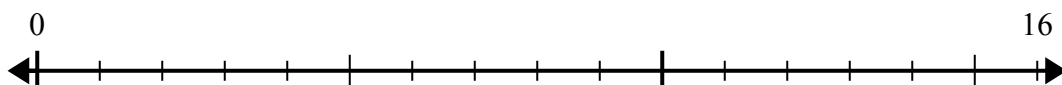
6) $31:8=$



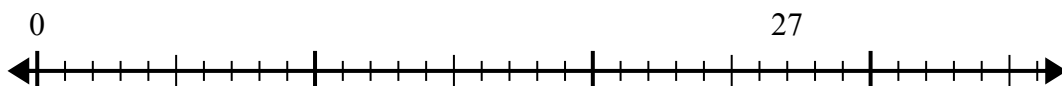
7) $60:7=$



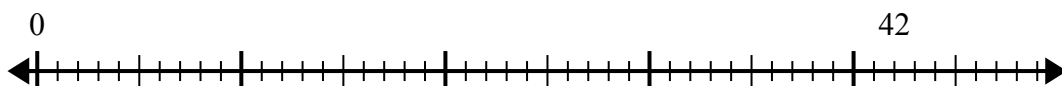
8) $16:5=$



9) $27:4=$



10) $42:5=$



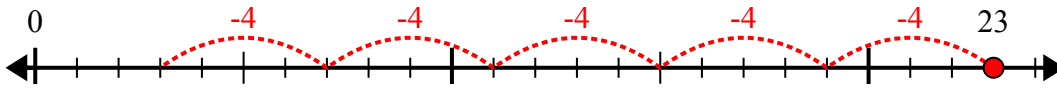
Câu trả lời

1. _____
2. _____
3. _____
4. _____
5. _____
6. _____
7. _____
8. _____
9. _____
10. _____

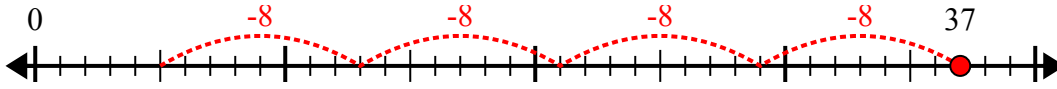


Sử dụng trục số để giải bài toán chia.

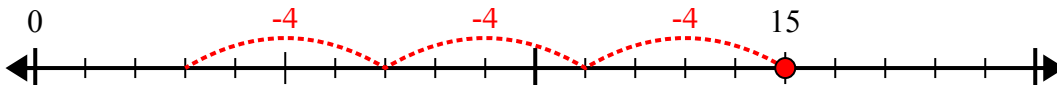
1) $23:4=$



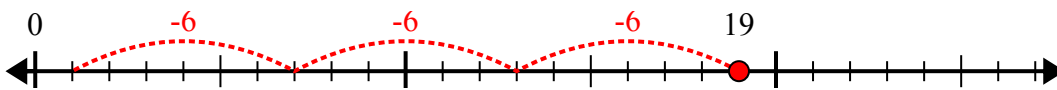
2) $37:8=$



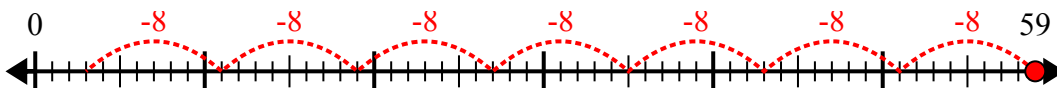
3) $15:4=$



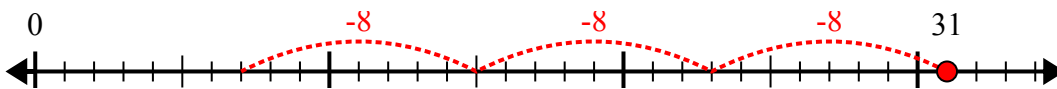
4) $19:6=$



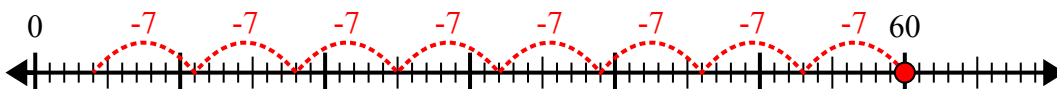
5) $59:8=$



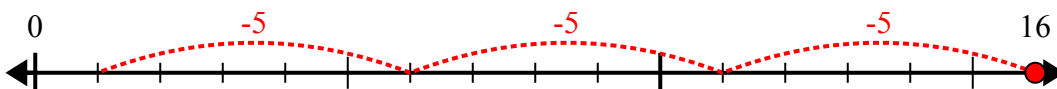
6) $31:8=$



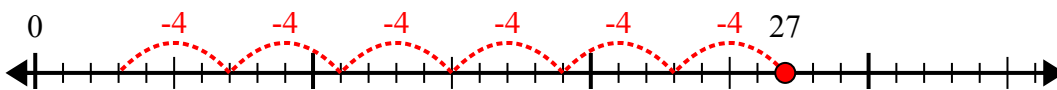
7) $60:7=$



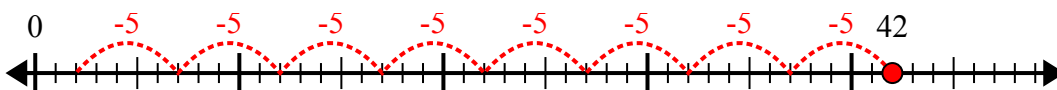
8) $16:5=$



9) $27:4=$



10) $42:5=$



Câu trả lời

1. 5 dư 3
2. 4 dư 5
3. 3 dư 3
4. 3 dư 1
5. 7 dư 3
6. 3 dư 7
7. 8 dư 4
8. 3 dư 1
9. 6 dư 3
10. 8 dư 2