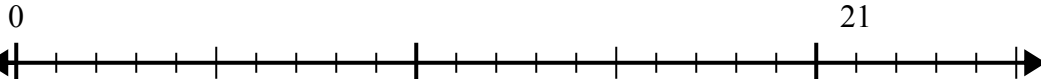


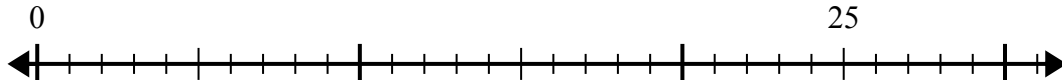


Sử dụng trục số để giải bài toán chia.

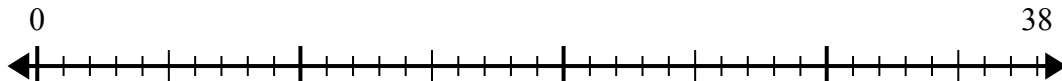
1) $21:5=$



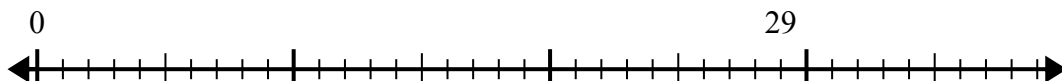
2) $25:6=$



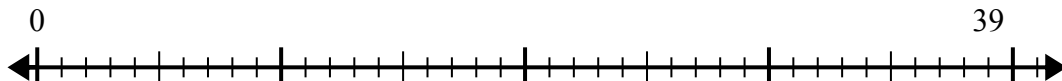
3) $38:8=$



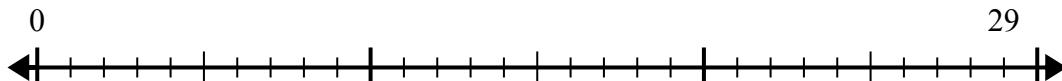
4) $29:7=$



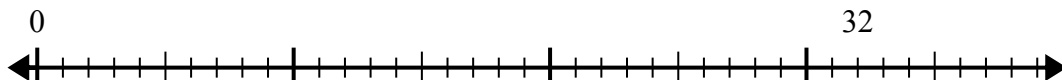
5) $39:5=$



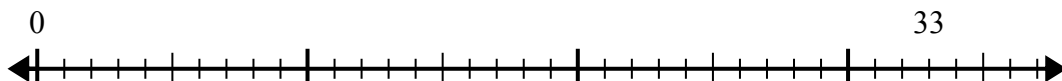
6) $29:4=$



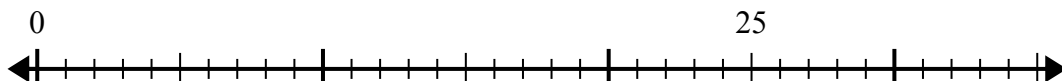
7) $32:6=$



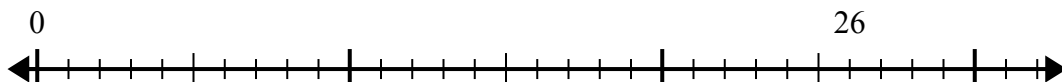
8) $33:4=$



9) $25:4=$



10) $26:7=$



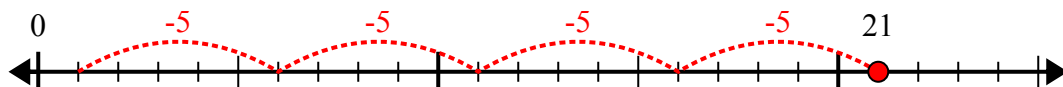
Câu trả lời

1. _____
2. _____
3. _____
4. _____
5. _____
6. _____
7. _____
8. _____
9. _____
10. _____

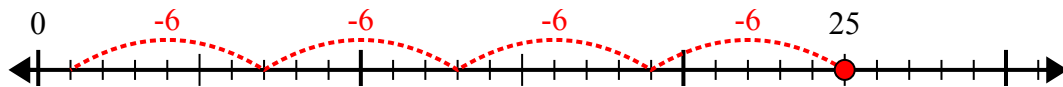


Sử dụng trục số để giải bài toán chia.

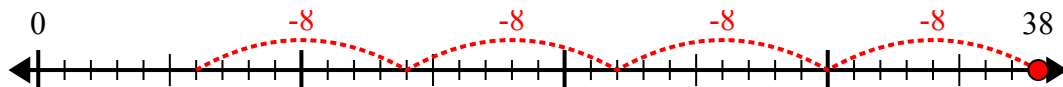
1) $21:5=$



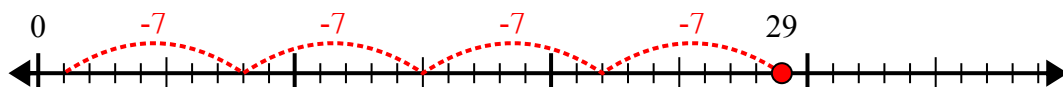
2) $25:6=$



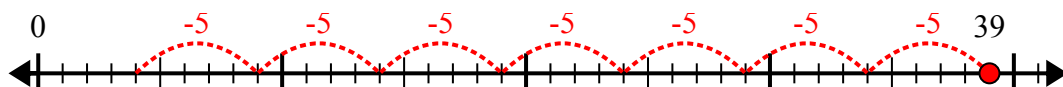
3) $38:8=$



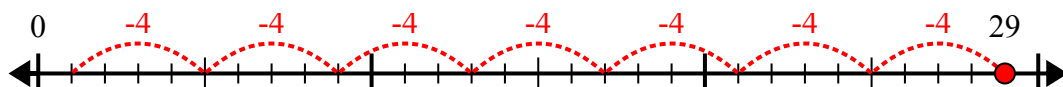
4) $29:7=$



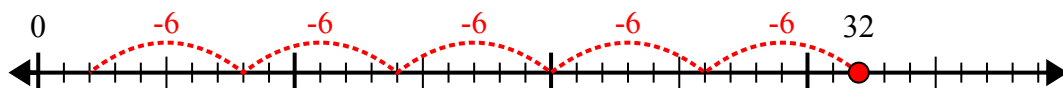
5) $39:5=$



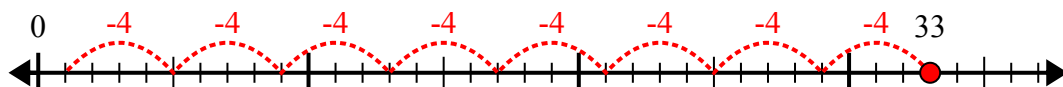
6) $29:4=$



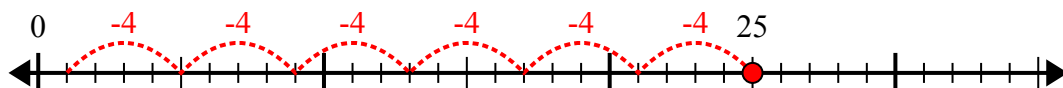
7) $32:6=$



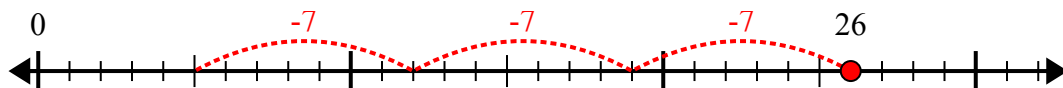
8) $33:4=$



9) $25:4=$



10) $26:7=$



Câu trả lời

1. **4 dư 1**

2. **4 dư 1**

3. **4 dư 6**

4. **4 dư 1**

5. **7 dư 4**

6. **7 dư 1**

7. **5 dư 2**

8. **8 dư 1**

9. **6 dư 1**

10. **3 dư 5**