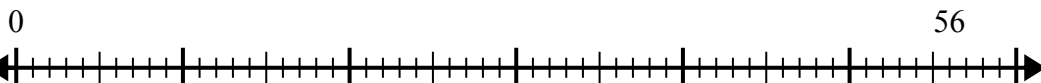




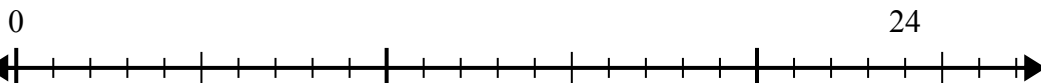
Sử dụng trục số để giải bài toán chia.

Câu trả lời

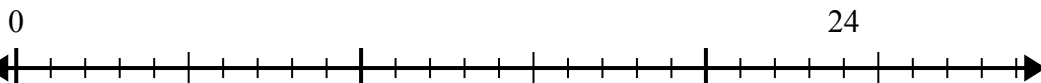
1) $56:7=$



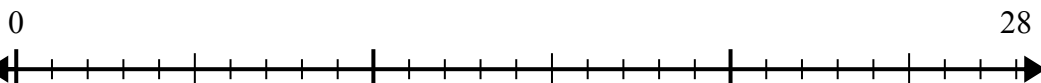
2) $24:4=$



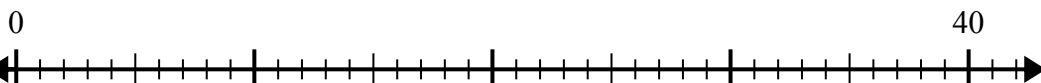
3) $24:6=$



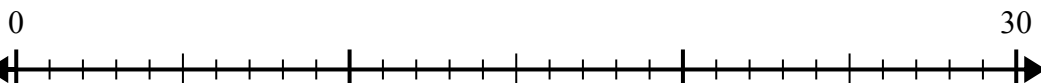
4) $28:4=$



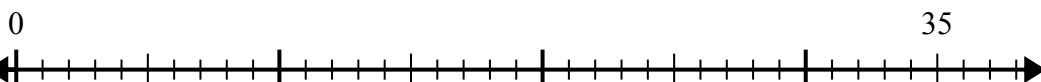
5) $40:8=$



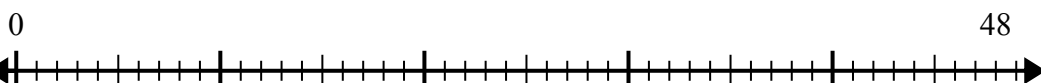
6) $30:6=$



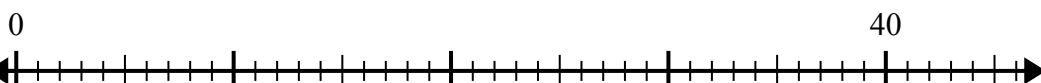
7) $35:5=$



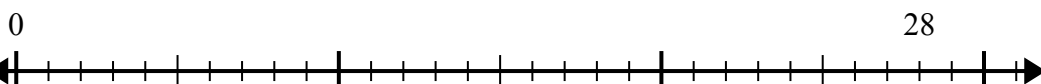
8) $48:8=$



9) $40:5=$



10) $28:7=$



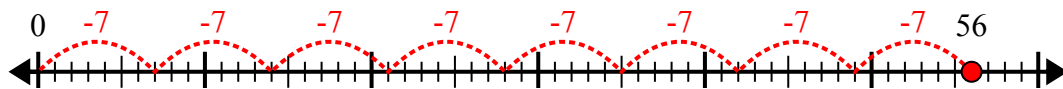
1. _____
2. _____
3. _____
4. _____
5. _____
6. _____
7. _____
8. _____
9. _____
10. _____



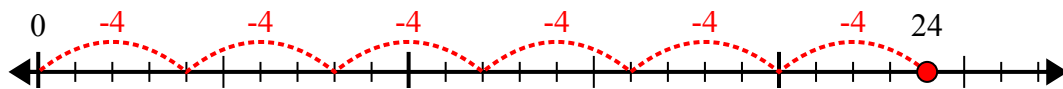
Sử dụng trục số để giải bài toán chia.

Câu trả lời

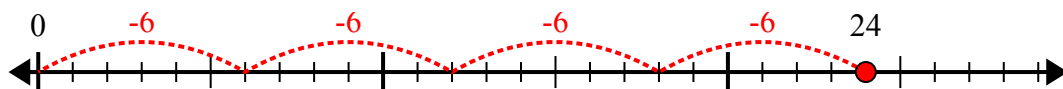
1) $56:7=$



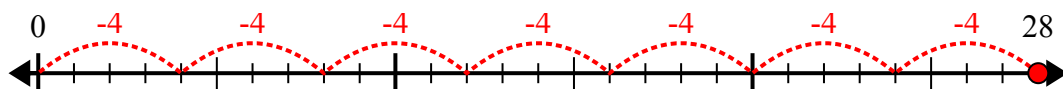
2) $24:4=$



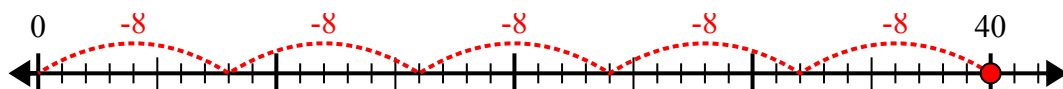
3) $24:6=$



4) $28:4=$



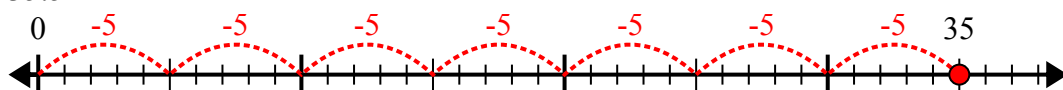
5) $40:8=$



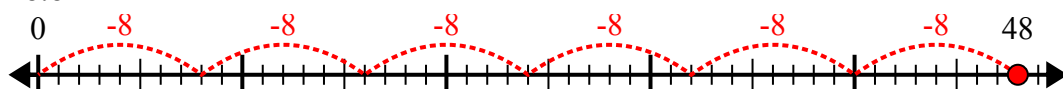
6) $30:6=$



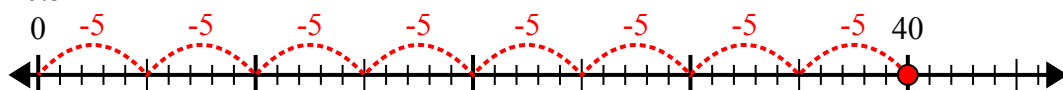
7) $35:5=$



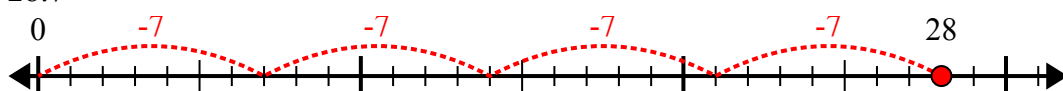
8) $48:8=$



9) $40:5=$



10) $28:7=$



1. 8

2. 6

3. 4

4. 7

5. 5

6. 5

7. 7

8. 6

9. 8

10. 4