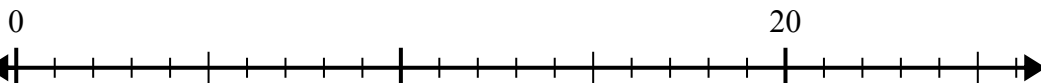




Sử dụng trục số để giải bài toán chia.

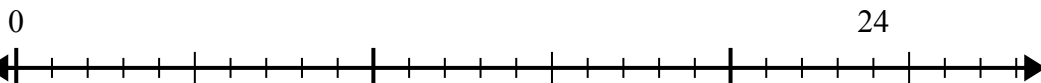
Câu trả lời

1) $20:5=$



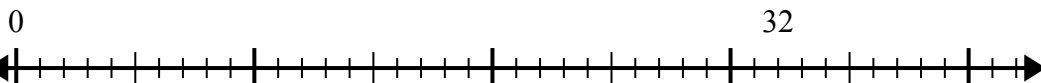
1. _____

2) $24:6=$



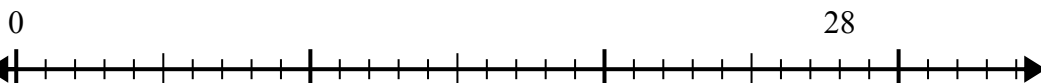
2. _____

3) $32:8=$



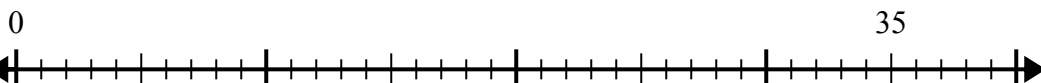
3. _____

4) $28:7=$



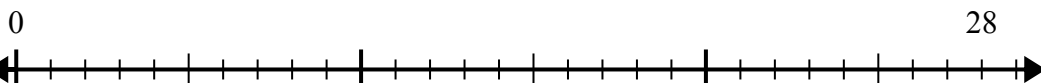
4. _____

5) $35:5=$



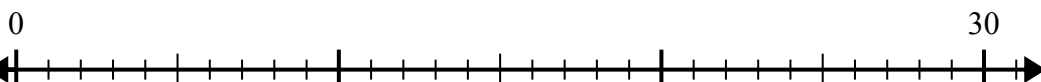
5. _____

6) $28:4=$



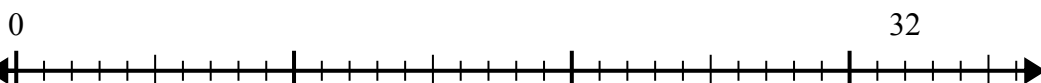
6. _____

7) $30:6=$



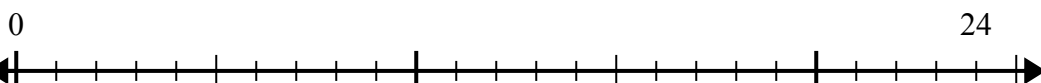
7. _____

8) $32:4=$



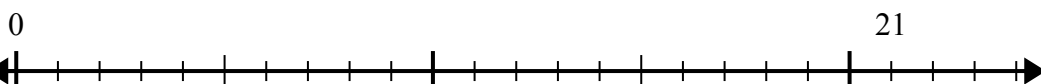
8. _____

9) $24:4=$



9. _____

10) $21:7=$



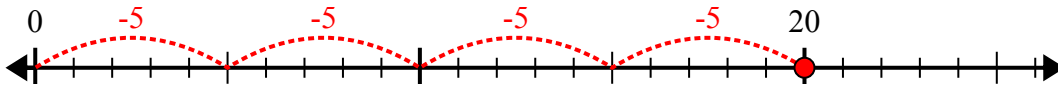
10. _____



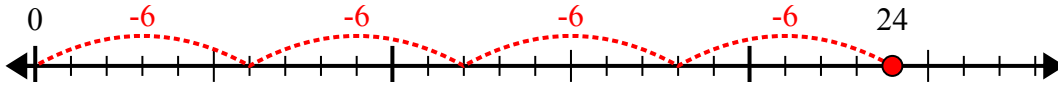
Sử dụng trục số để giải bài toán chia.

Câu trả lời

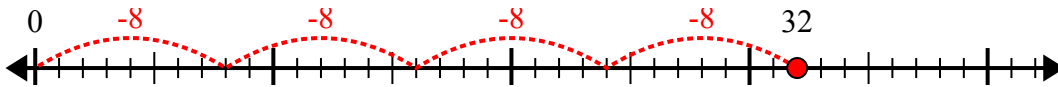
1) $20:5=$



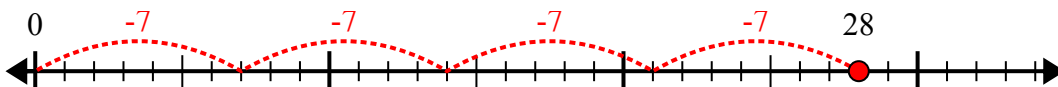
2) $24:6=$



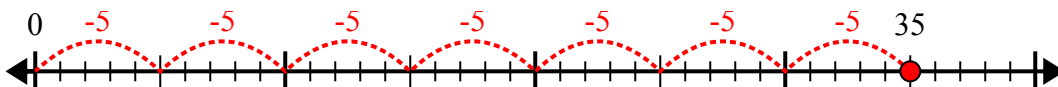
3) $32:8=$



4) $28:7=$



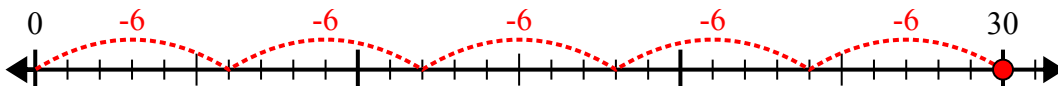
5) $35:5=$



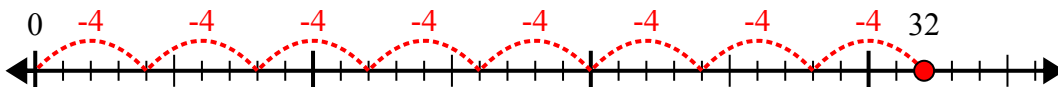
6) $28:4=$



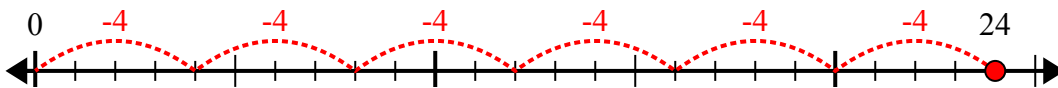
7) $30:6=$



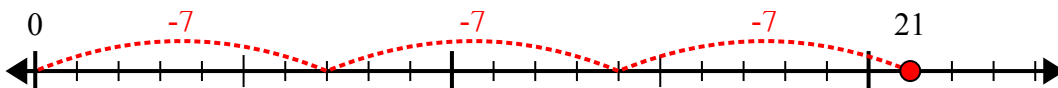
8) $32:4=$



9) $24:4=$



10) $21:7=$



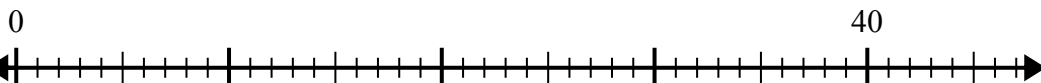
1. 4
2. 4
3. 4
4. 4
5. 7
6. 7
7. 5
8. 8
9. 6
10. 3



Sử dụng trục số để giải bài toán chia.

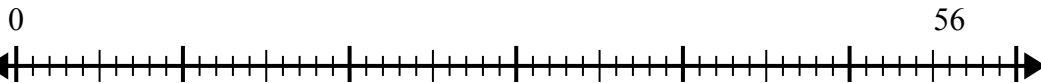
Câu trả lời

1) $40:5=$



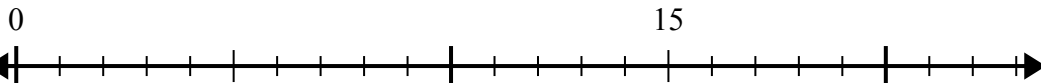
1. _____

2) $56:7=$



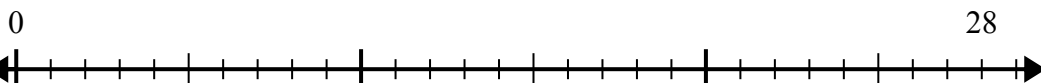
2. _____

3) $15:5=$



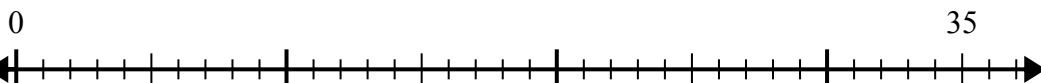
3. _____

4) $28:4=$



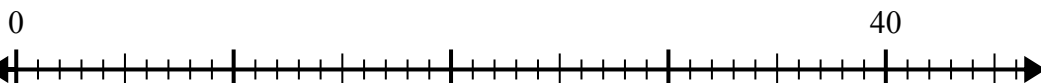
4. _____

5) $35:7=$



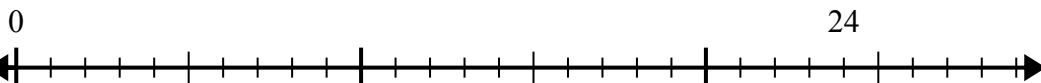
5. _____

6) $40:8=$



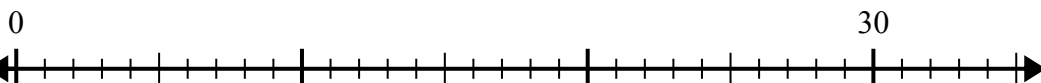
6. _____

7) $24:4=$



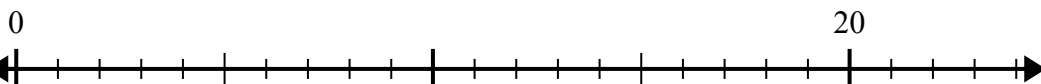
7. _____

8) $30:5=$



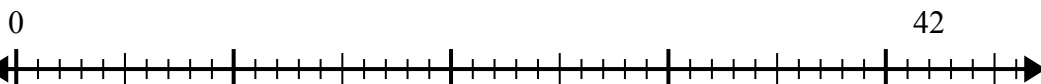
8. _____

9) $20:4=$



9. _____

10) $42:6=$



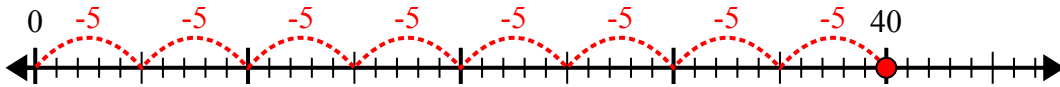
10. _____



Sử dụng trục số để giải bài toán chia.

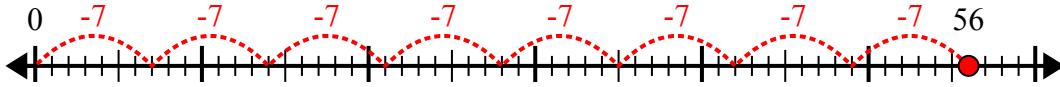
Câu trả lời

1) $40:5=$



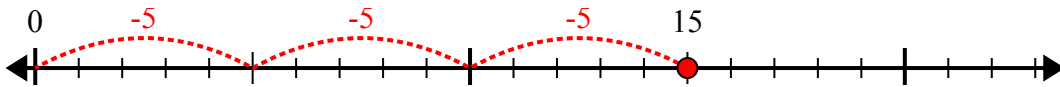
1. 8

2) $56:7=$



2. 8

3) $15:5=$



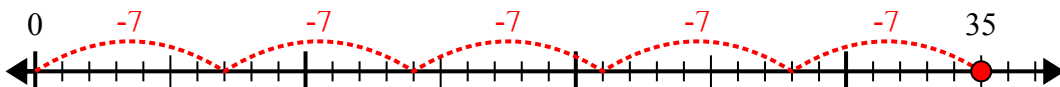
3. 3

4) $28:4=$



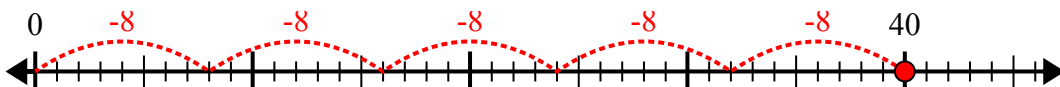
4. 7

5) $35:7=$



5. 5

6) $40:8=$



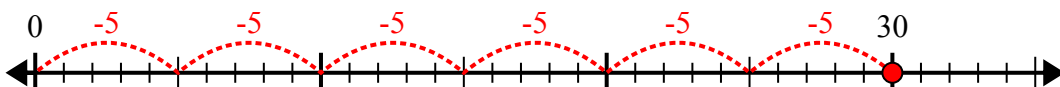
6. 5

7) $24:4=$



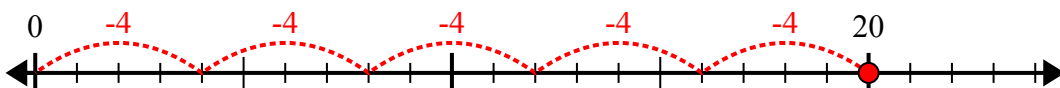
7. 6

8) $30:5=$



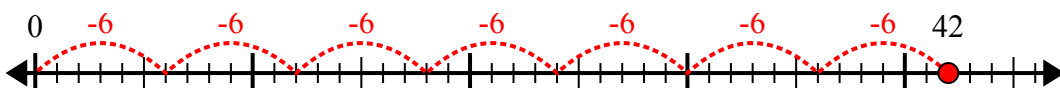
8. 6

9) $20:4=$



9. 5

10) $42:6=$



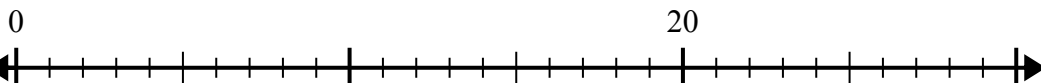
10. 7



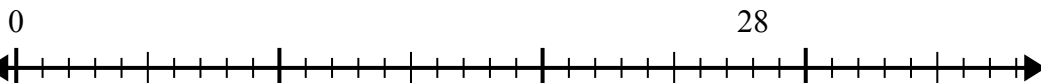
Sử dụng trục số để giải bài toán chia.

Câu trả lời

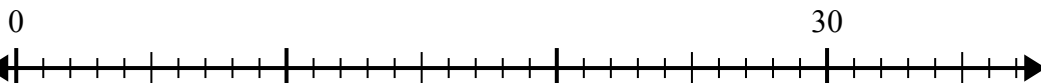
1) $20:5=$



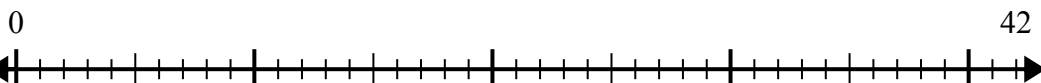
2) $28:4=$



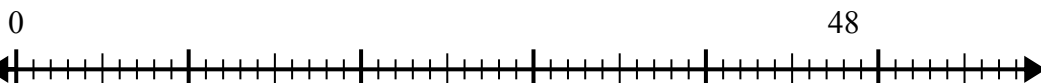
3) $30:6=$



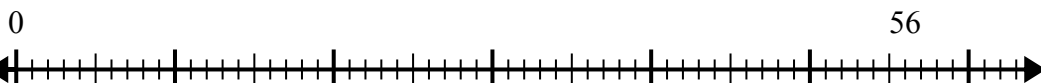
4) $42:6=$



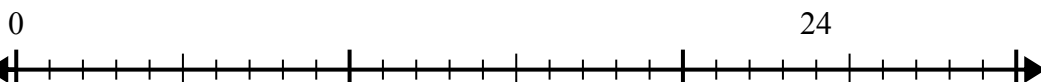
5) $48:6=$



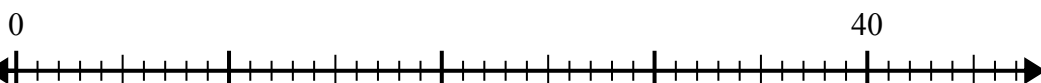
6) $56:8=$



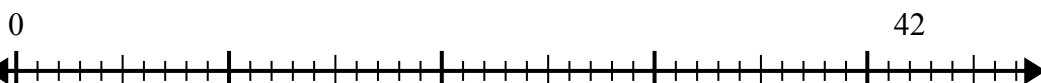
7) $24:6=$



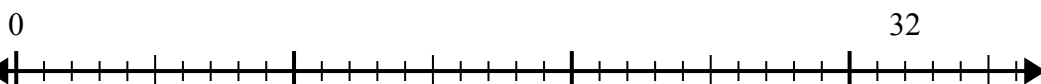
8) $40:8=$



9) $42:7=$



10) $32:4=$



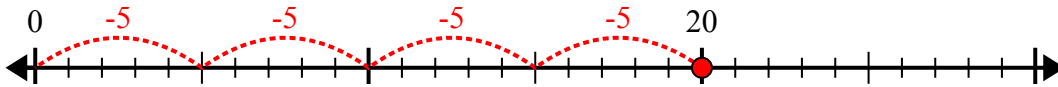
1. _____
2. _____
3. _____
4. _____
5. _____
6. _____
7. _____
8. _____
9. _____
10. _____



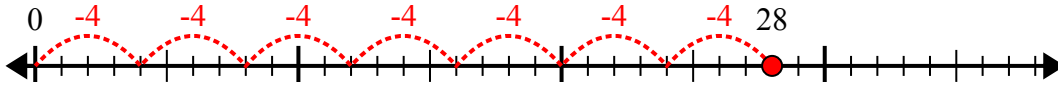
Sử dụng trục số để giải bài toán chia.

Câu trả lời

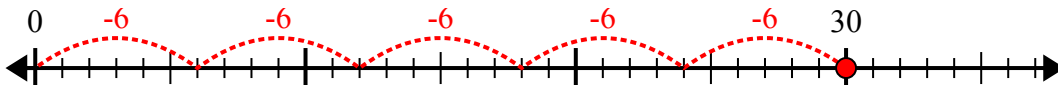
1) $20:5=$



2) $28:4=$



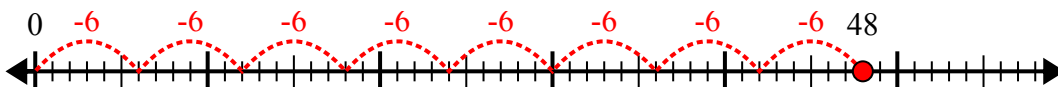
3) $30:6=$



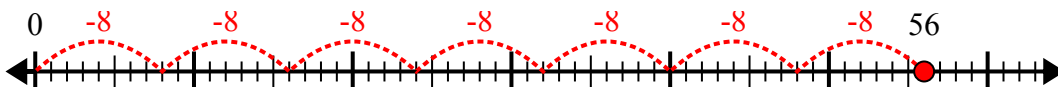
4) $42:6=$



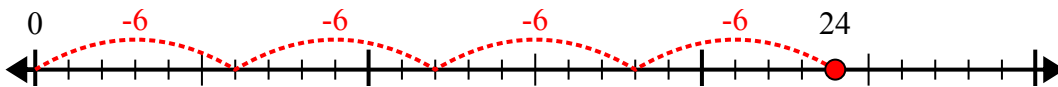
5) $48:6=$



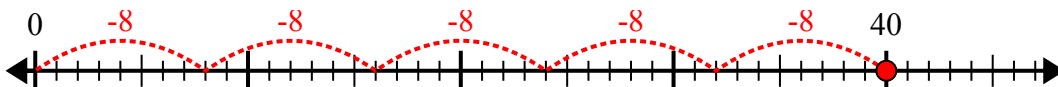
6) $56:8=$



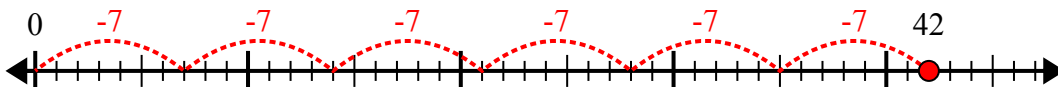
7) $24:6=$



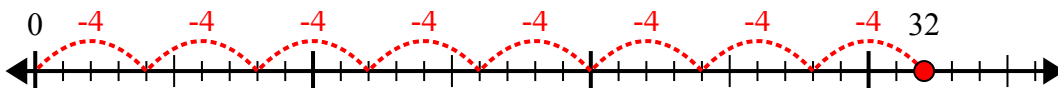
8) $40:8=$



9) $42:7=$



10) $32:4=$



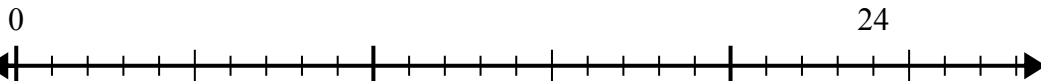
1. 4
2. 7
3. 5
4. 7
5. 8
6. 7
7. 4
8. 5
9. 6
10. 8



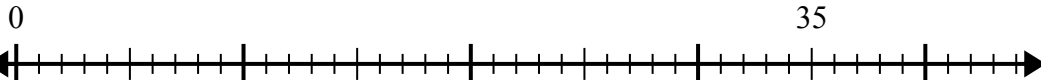
Sử dụng trục số để giải bài toán chia.

Câu trả lời

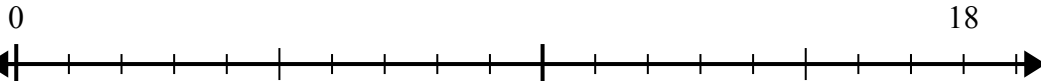
1) $24:6=$



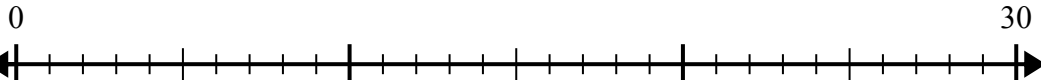
2) $35:7=$



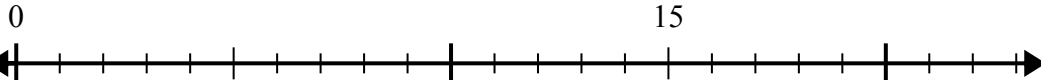
3) $18:6=$



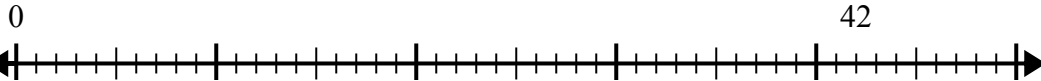
4) $30:6=$



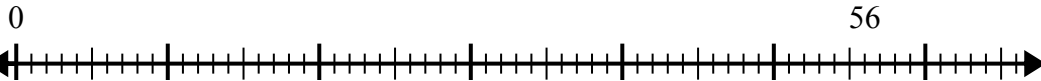
5) $15:5=$



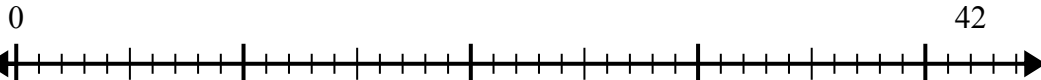
6) $42:6=$



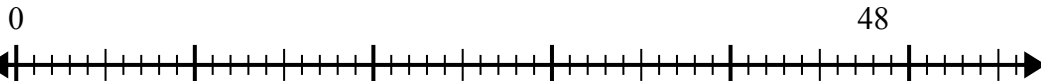
7) $56:8=$



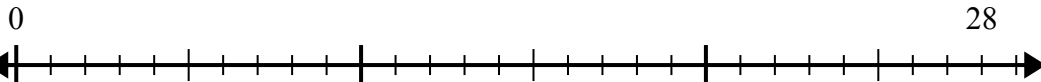
8) $42:7=$



9) $48:8=$



10) $28:4=$

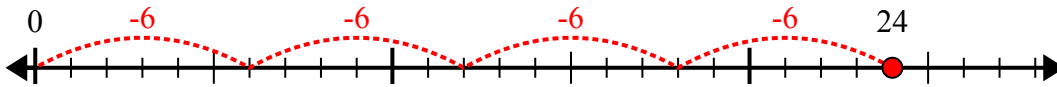


1. _____
2. _____
3. _____
4. _____
5. _____
6. _____
7. _____
8. _____
9. _____
10. _____

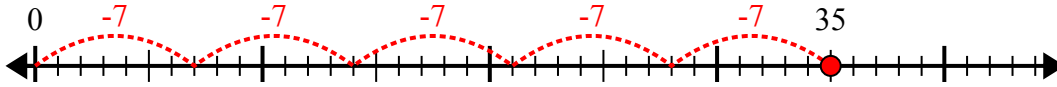


Sử dụng trục số để giải bài toán chia.

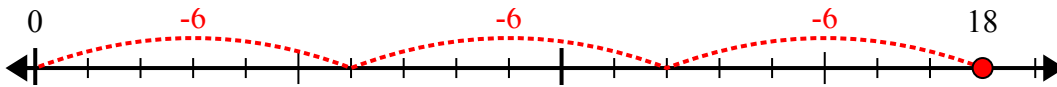
1) $24:6=$



2) $35:7=$



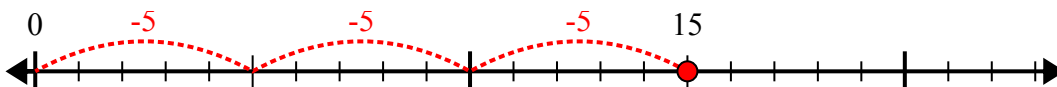
3) $18:6=$



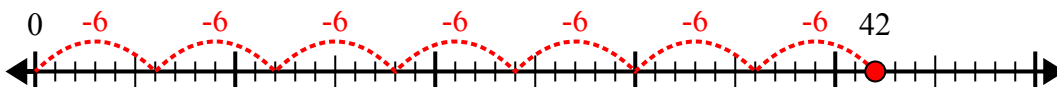
4) $30:6=$



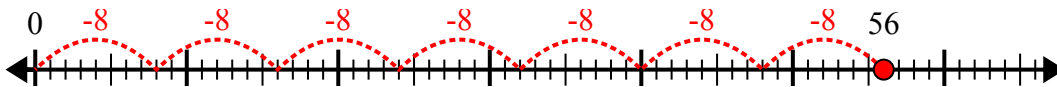
5) $15:5=$



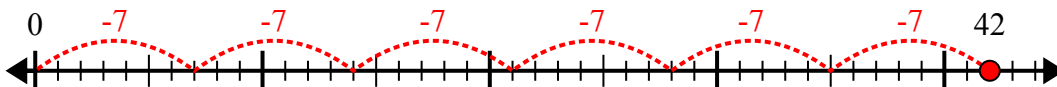
6) $42:6=$



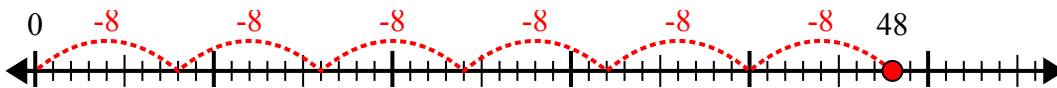
7) $56:8=$



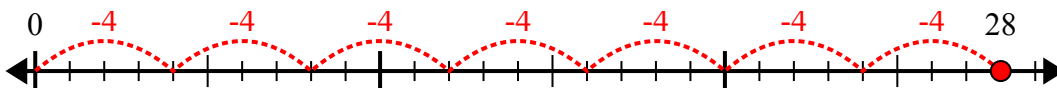
8) $42:7=$



9) $48:8=$



10) $28:4=$



Câu trả lời

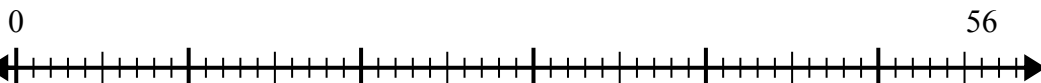
1. 4
2. 5
3. 3
4. 5
5. 3
6. 7
7. 7
8. 6
9. 6
10. 7



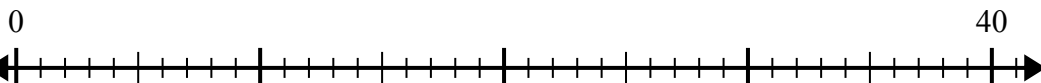
Sử dụng trục số để giải bài toán chia.

Câu trả lời

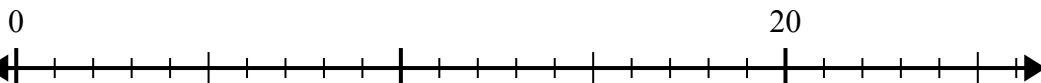
1) $56:7=$



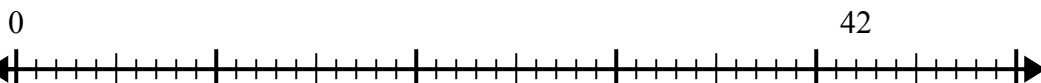
2) $40:5=$



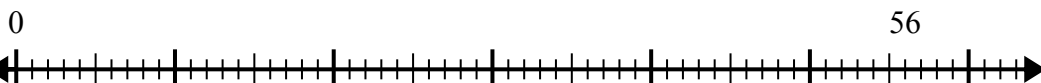
3) $20:4=$



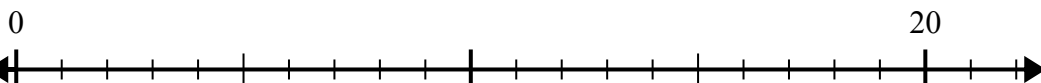
4) $42:7=$



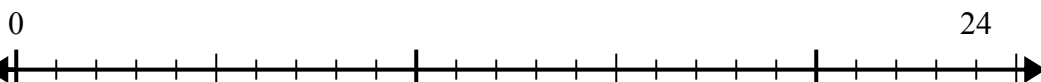
5) $56:8=$



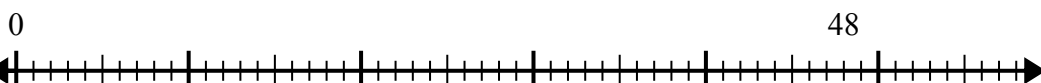
6) $20:5=$



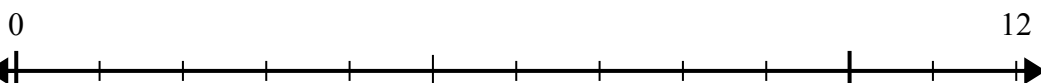
7) $24:4=$



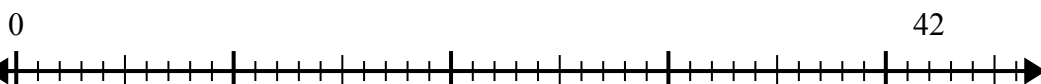
8) $48:8=$



9) $12:4=$



10) $42:6=$



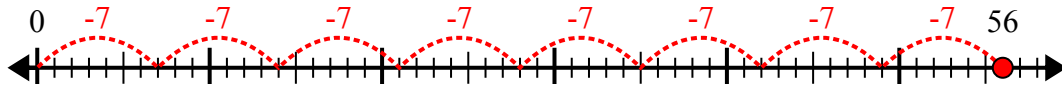
1. _____
2. _____
3. _____
4. _____
5. _____
6. _____
7. _____
8. _____
9. _____
10. _____



Sử dụng trục số để giải bài toán chia.

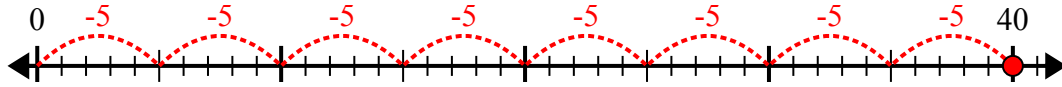
Câu trả lời

1) $56:7=$



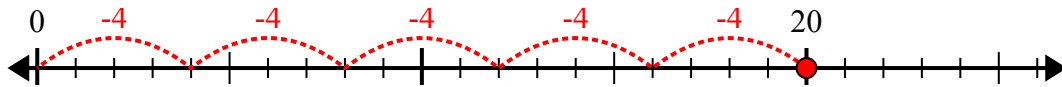
1. 8

2) $40:5=$



2. 8

3) $20:4=$



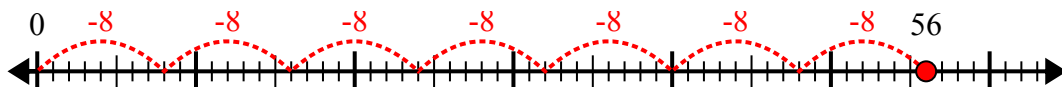
3. 5

4) $42:7=$



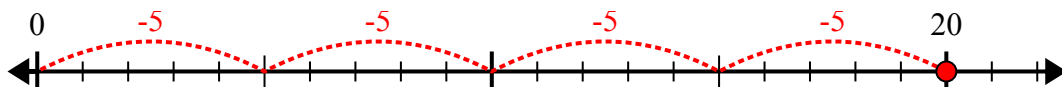
4. 6

5) $56:8=$



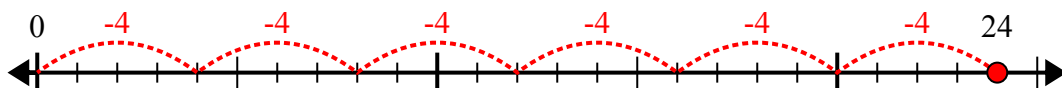
5. 7

6) $20:5=$



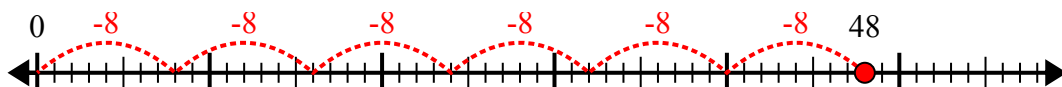
6. 4

7) $24:4=$



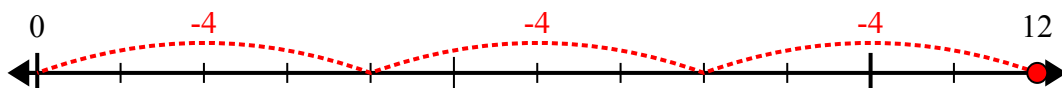
7. 6

8) $48:8=$



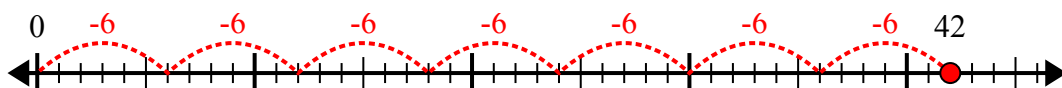
8. 6

9) $12:4=$



9. 3

10) $42:6=$



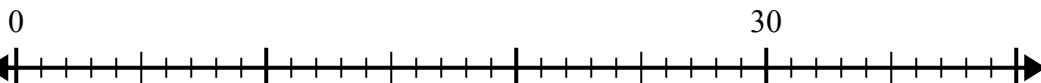
10. 7



Sử dụng trục số để giải bài toán chia.

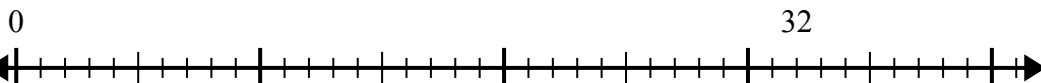
Câu trả lời

1) $30:6=$



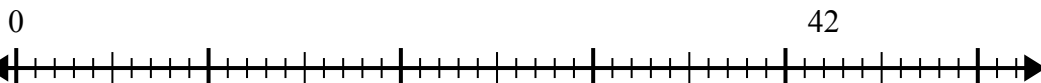
1. _____

2) $32:4=$



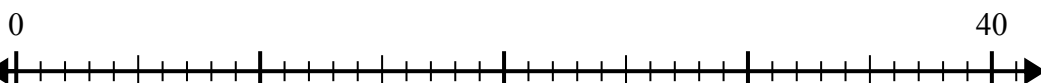
2. _____

3) $42:7=$



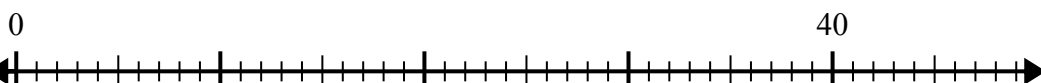
3. _____

4) $40:5=$



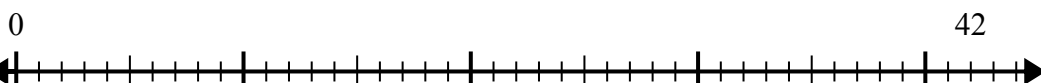
4. _____

5) $40:8=$



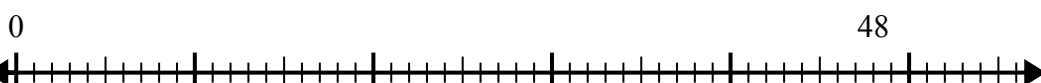
5. _____

6) $42:6=$



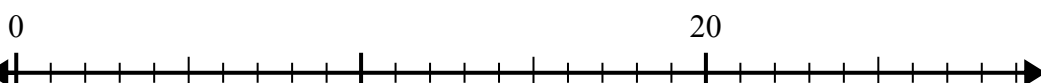
6. _____

7) $48:6=$



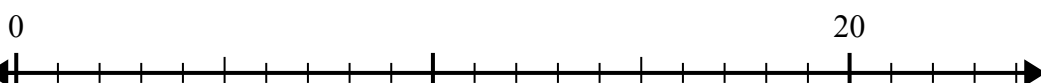
7. _____

8) $20:4=$



8. _____

9) $20:5=$



9. _____

10) $56:8=$



10. _____

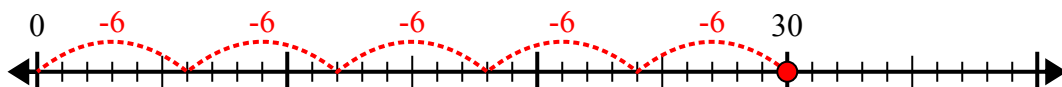
10. _____



Sử dụng trục số để giải bài toán chia.

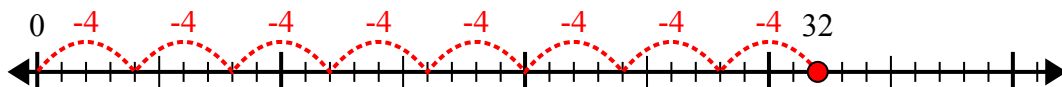
Câu trả lời

1) $30:6=$



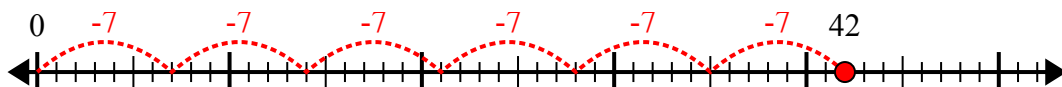
1. 5

2) $32:4=$



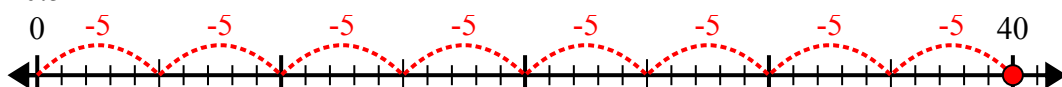
2. 8

3) $42:7=$



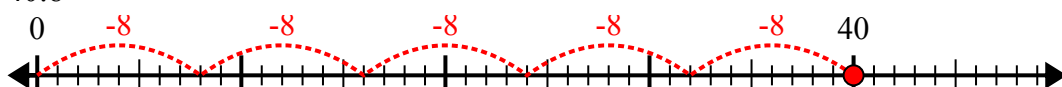
3. 6

4) $40:5=$



4. 8

5) $40:8=$



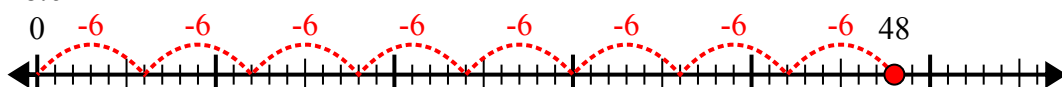
5. 5

6) $42:6=$



6. 7

7) $48:6=$



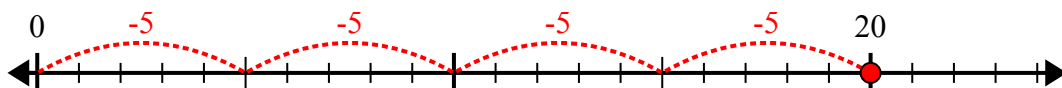
7. 8

8) $20:4=$



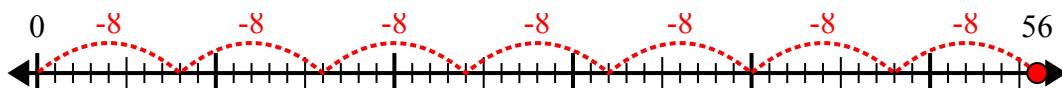
8. 5

9) $20:5=$



9. 4

10) $56:8=$



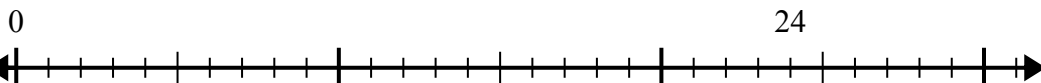
10. 7



Sử dụng trục số để giải bài toán chia.

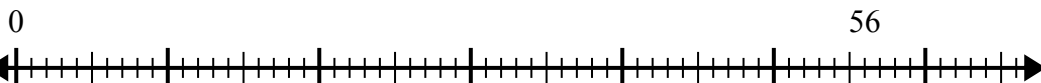
Câu trả lời

1) $24:8=$



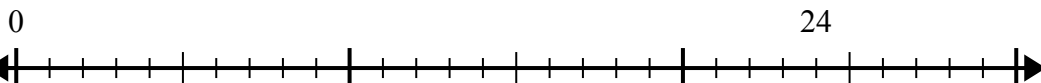
1. _____

2) $56:8=$



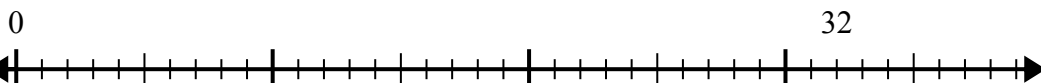
2. _____

3) $24:4=$



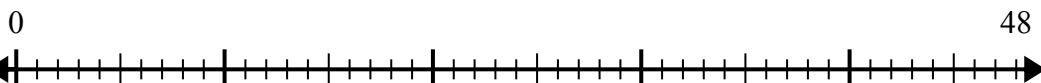
3. _____

4) $32:4=$



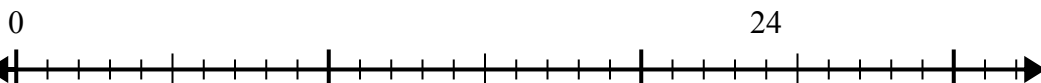
4. _____

5) $48:8=$



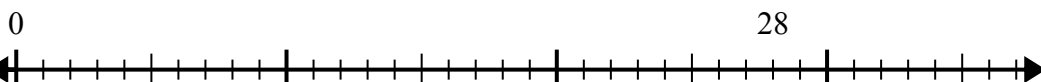
5. _____

6) $24:6=$



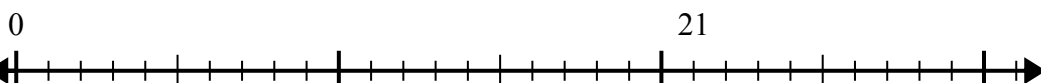
6. _____

7) $28:4=$



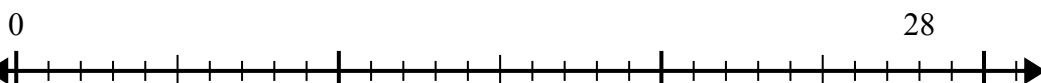
7. _____

8) $21:7=$



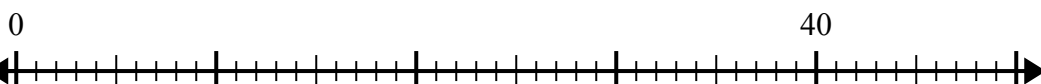
8. _____

9) $28:7=$



9. _____

10) $40:5=$



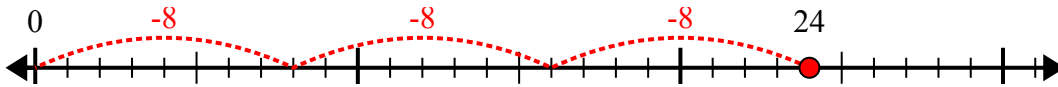
10. _____



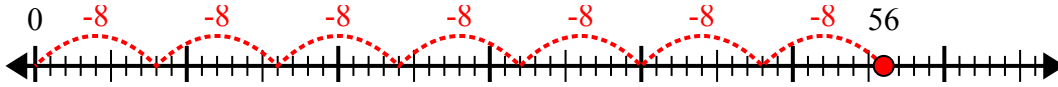
Sử dụng trục số để giải bài toán chia.

Câu trả lời

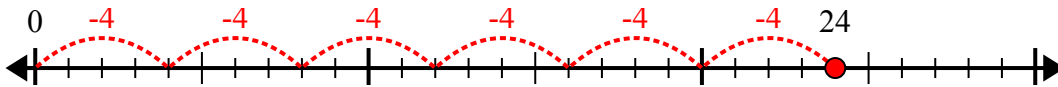
1) $24:8=$



2) $56:8=$



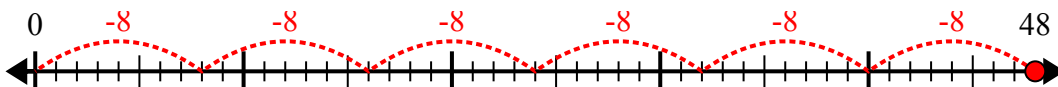
3) $24:4=$



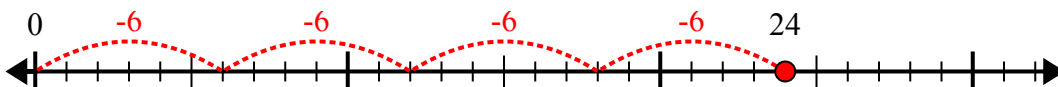
4) $32:4=$



5) $48:8=$



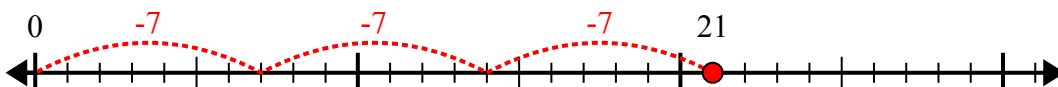
6) $24:6=$



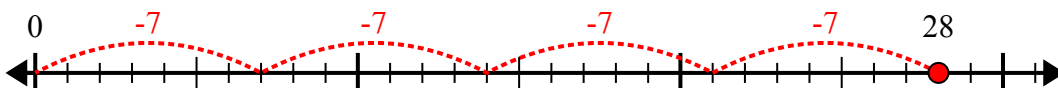
7) $28:4=$



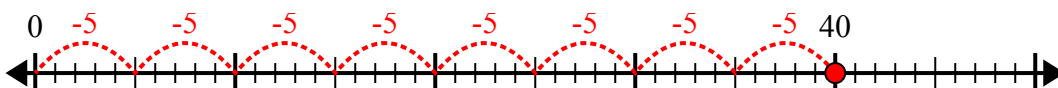
8) $21:7=$



9) $28:7=$



10) $40:5=$



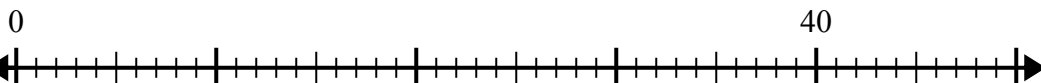
1. 3
2. 7
3. 6
4. 8
5. 6
6. 4
7. 7
8. 3
9. 4
10. 8



Sử dụng trục số để giải bài toán chia.

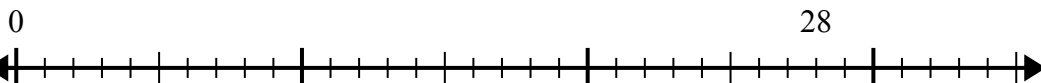
Câu trả lời

1) $40:5=$



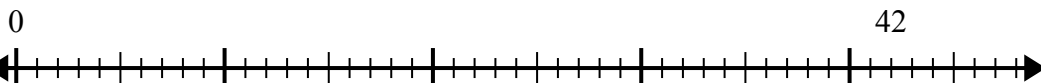
1. _____

2) $28:4=$



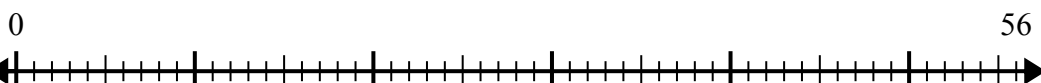
2. _____

3) $42:6=$



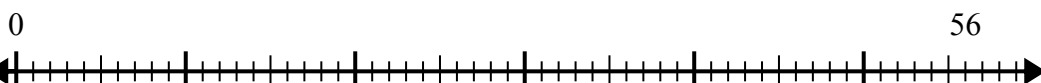
3. _____

4) $56:8=$



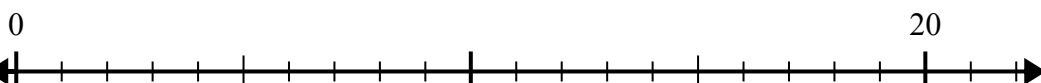
4. _____

5) $56:7=$



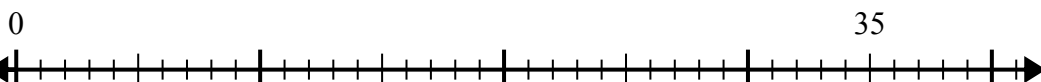
5. _____

6) $20:5=$



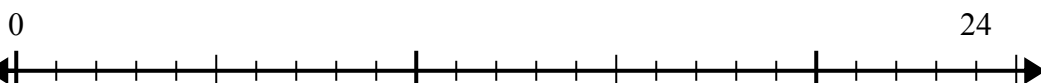
6. _____

7) $35:7=$



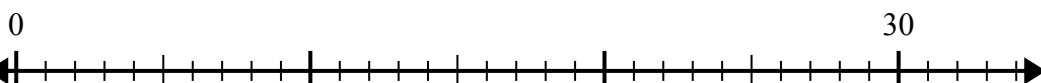
7. _____

8) $24:8=$



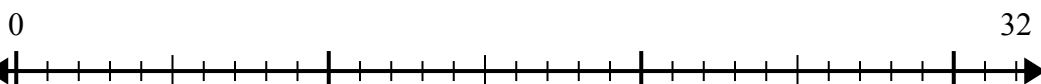
8. _____

9) $30:5=$



9. _____

10) $32:4=$



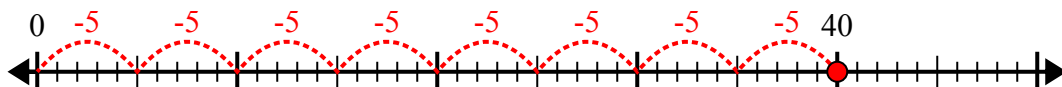
10. _____



Sử dụng trục số để giải bài toán chia.

Câu trả lời

1) $40:5=$



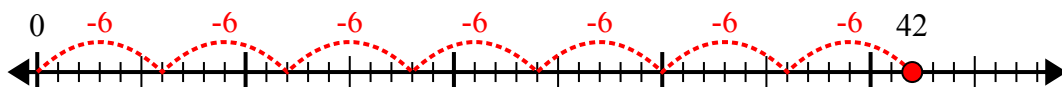
1. 8

2) $28:4=$



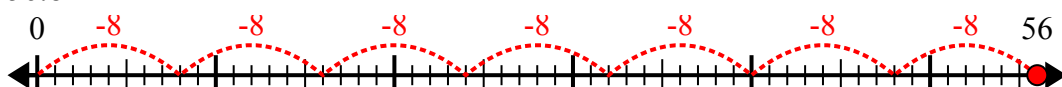
2. 7

3) $42:6=$



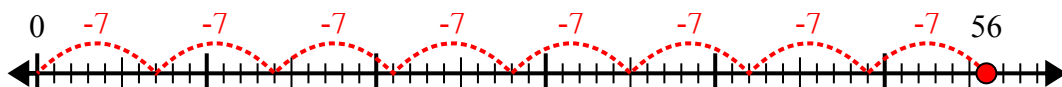
3. 7

4) $56:8=$



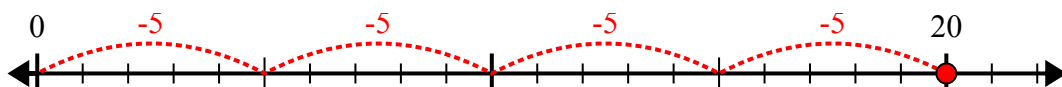
4. 7

5) $56:7=$



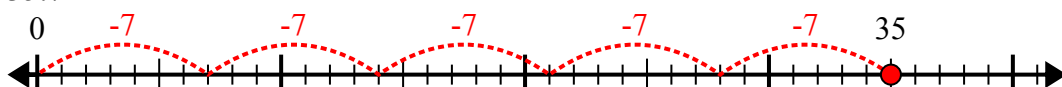
5. 8

6) $20:5=$



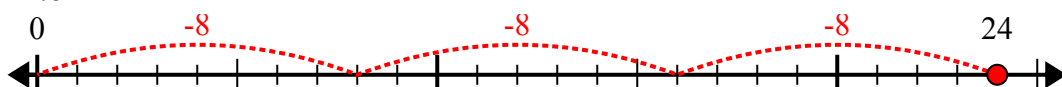
6. 4

7) $35:7=$



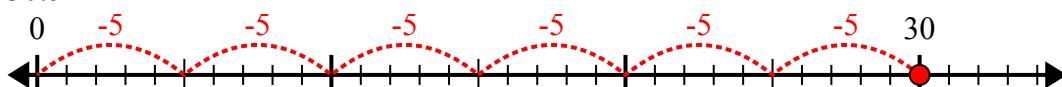
7. 5

8) $24:8=$



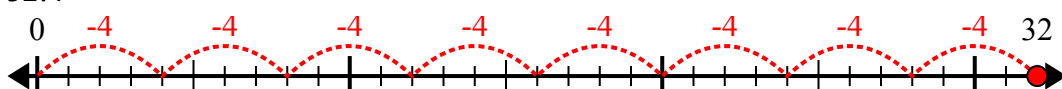
8. 3

9) $30:5=$



9. 6

10) $32:4=$



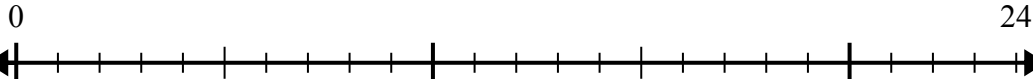
10. 8



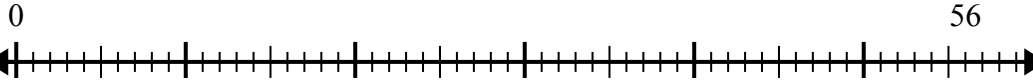
Sử dụng trục số để giải bài toán chia.

Câu trả lời

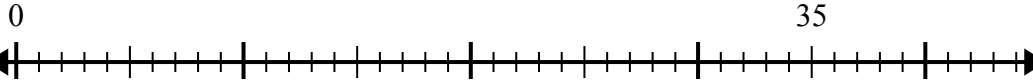
1) $24:4=$



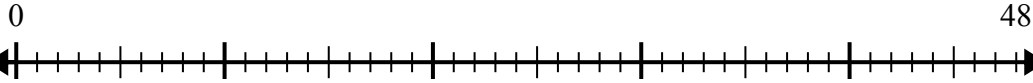
2) $56:8=$



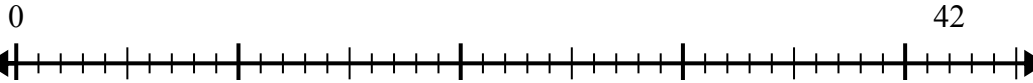
3) $35:5=$



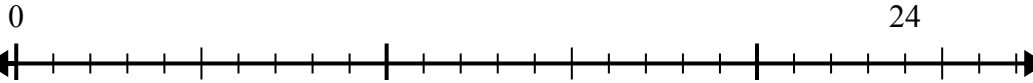
4) $48:8=$



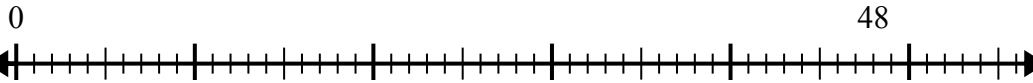
5) $42:6=$



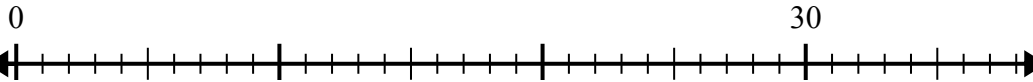
6) $24:6=$



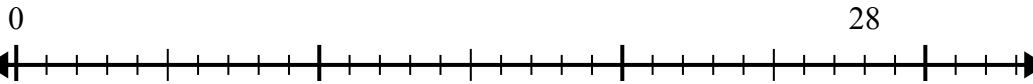
7) $48:6=$



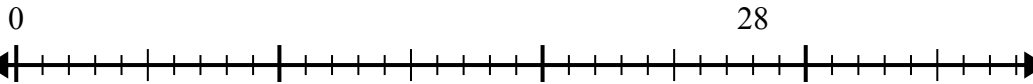
8) $30:5=$



9) $28:7=$



10) $28:4=$

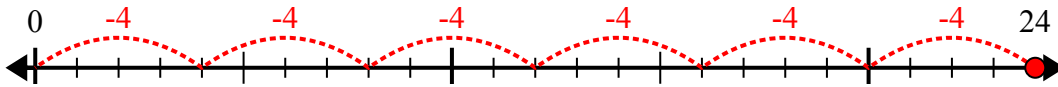


1. _____
2. _____
3. _____
4. _____
5. _____
6. _____
7. _____
8. _____
9. _____
10. _____

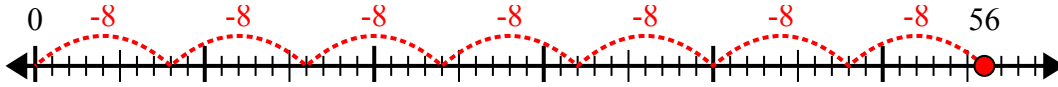


Sử dụng trục số để giải bài toán chia.

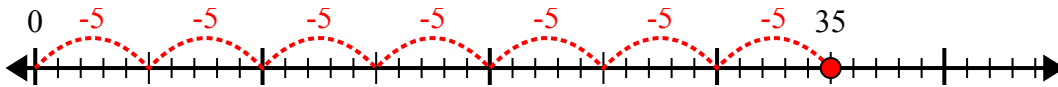
1) $24:4=$



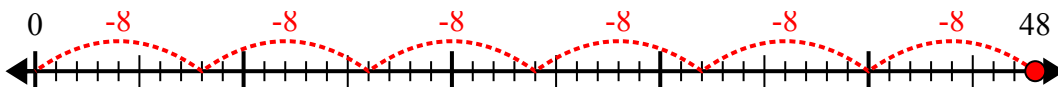
2) $56:8=$



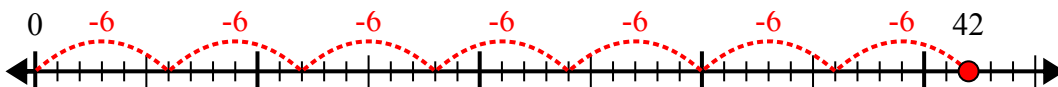
3) $35:5=$



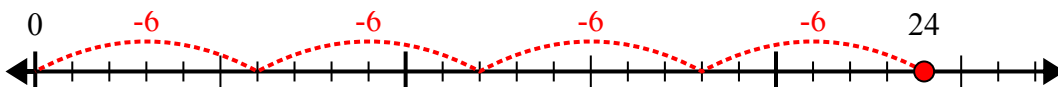
4) $48:8=$



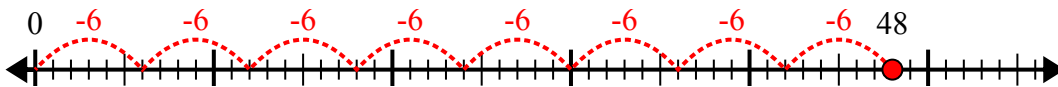
5) $42:6=$



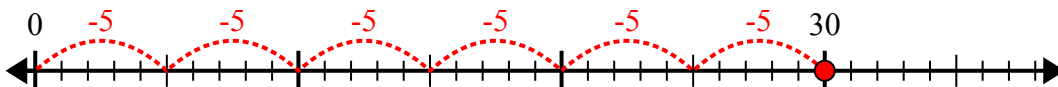
6) $24:6=$



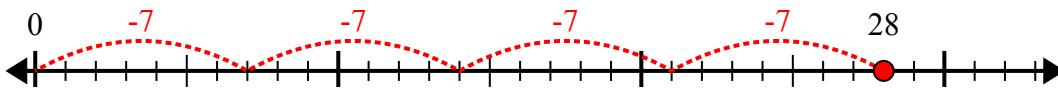
7) $48:6=$



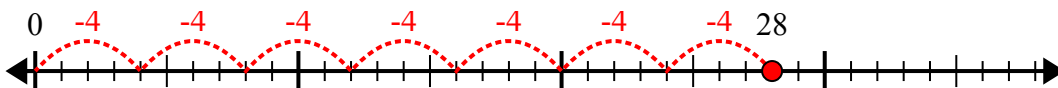
8) $30:5=$



9) $28:7=$



10) $28:4=$



Câu trả lời

1. 6

2. 7

3. 7

4. 6

5. 7

6. 4

7. 8

8. 6

9. 4

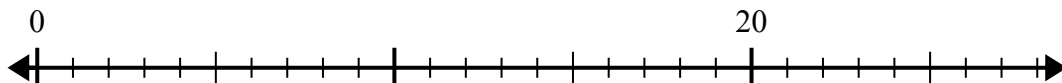
10. 7



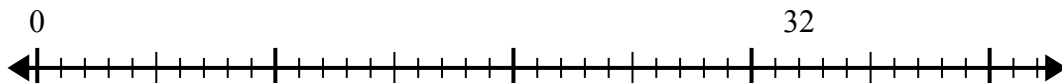
Sử dụng trục số để giải bài toán chia.

Câu trả lời

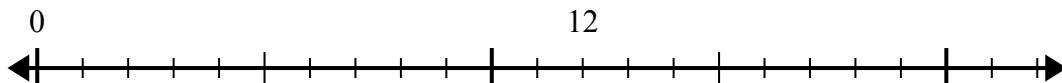
1) $20:4=$



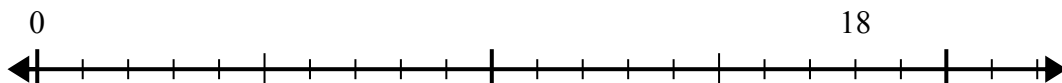
2) $32:8=$



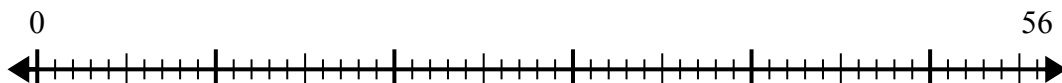
3) $12:4=$



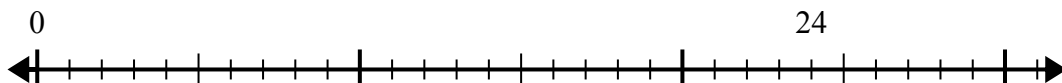
4) $18:6=$



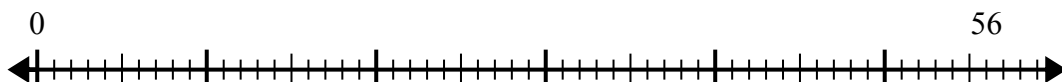
5) $56:8=$



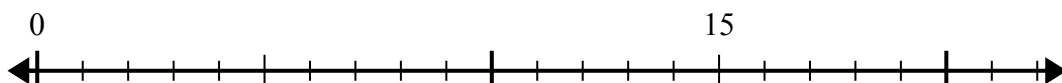
6) $24:8=$



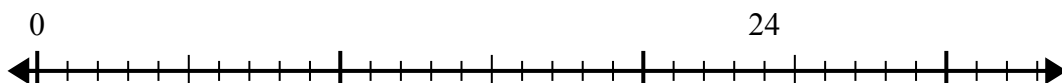
7) $56:7=$



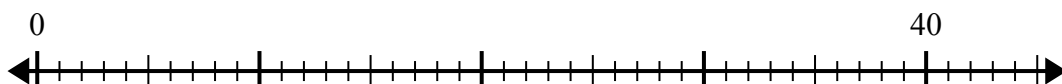
8) $15:5=$



9) $24:4=$



10) $40:5=$



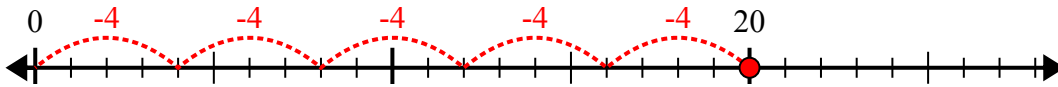
1. _____
2. _____
3. _____
4. _____
5. _____
6. _____
7. _____
8. _____
9. _____
10. _____



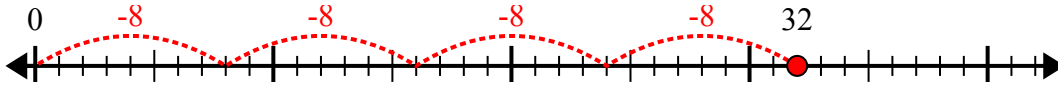
Sử dụng trục số để giải bài toán chia.

Câu trả lời

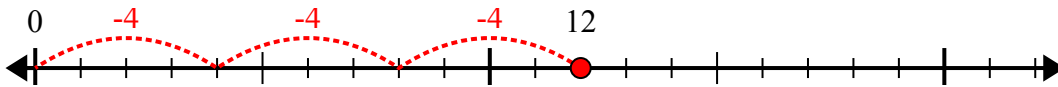
1) $20:4=$



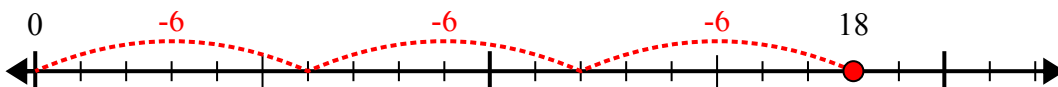
2) $32:8=$



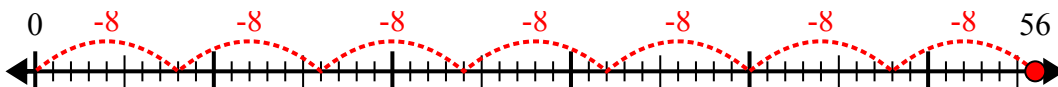
3) $12:4=$



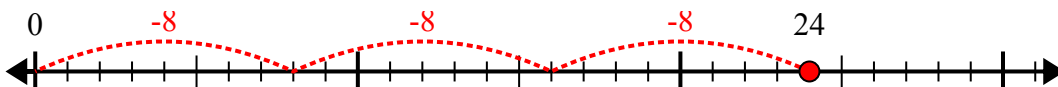
4) $18:6=$



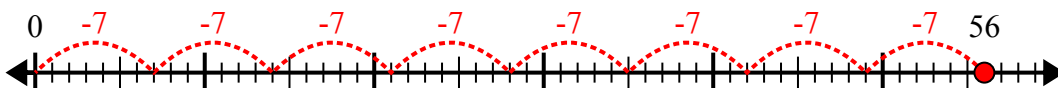
5) $56:8=$



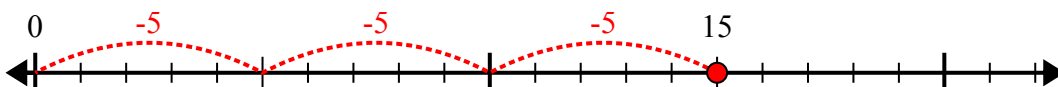
6) $24:8=$



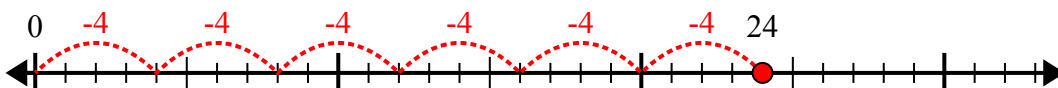
7) $56:7=$



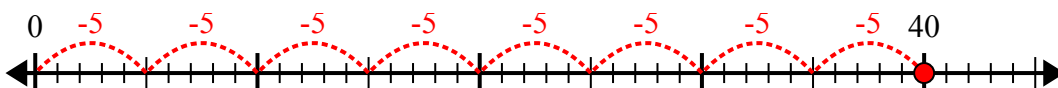
8) $15:5=$



9) $24:4=$



10) $40:5=$



1. 5
2. 4
3. 3
4. 3
5. 7
6. 3
7. 8
8. 3
9. 6
10. 8