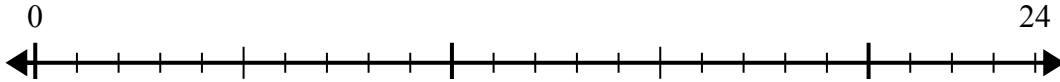




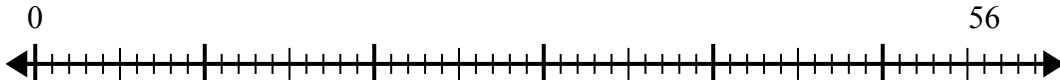
Sử dụng trục số để giải bài toán chia.

Câu trả lời

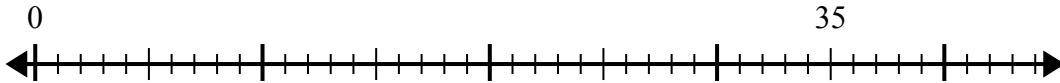
1) $24:4=$
0



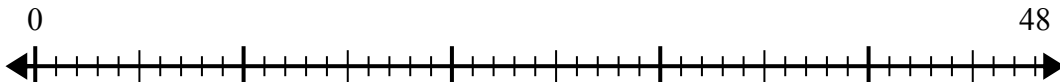
2) $56:8=$
0



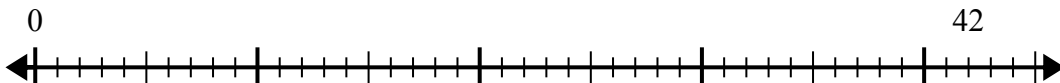
3) $35:5=$
0



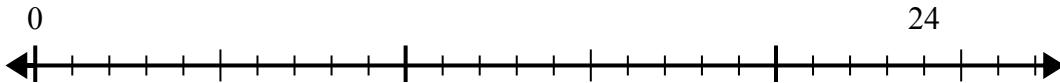
4) $48:8=$
0



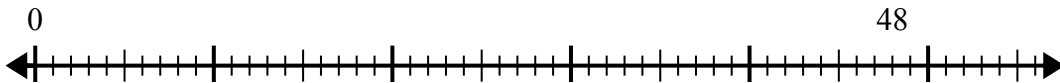
5) $42:6=$
0



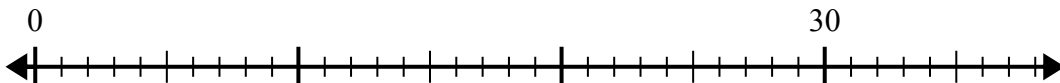
6) $24:6=$
0



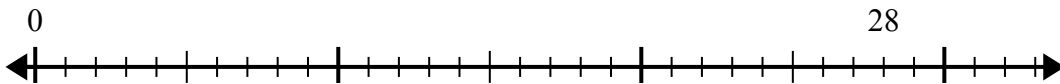
7) $48:6=$
0



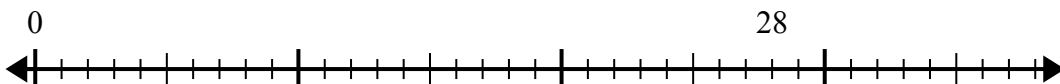
8) $30:5=$
0



9) $28:7=$
0



10) $28:4=$
0

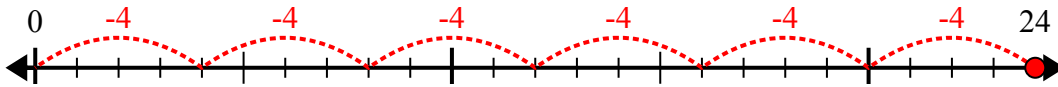


1. _____
2. _____
3. _____
4. _____
5. _____
6. _____
7. _____
8. _____
9. _____
10. _____

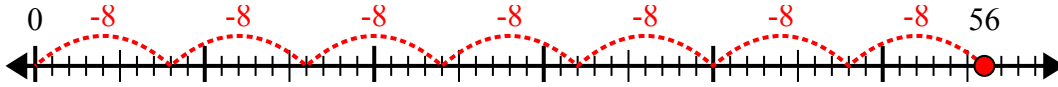


Sử dụng trục số để giải bài toán chia.

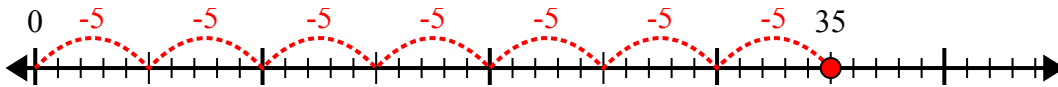
1) $24:4=$



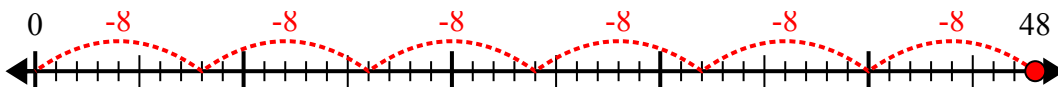
2) $56:8=$



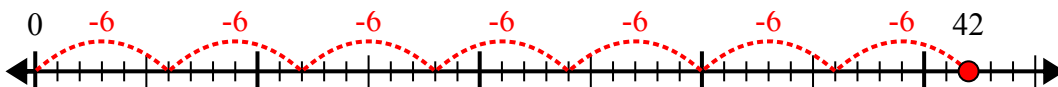
3) $35:5=$



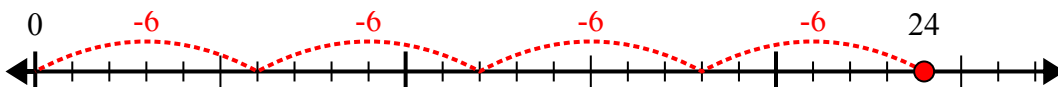
4) $48:8=$



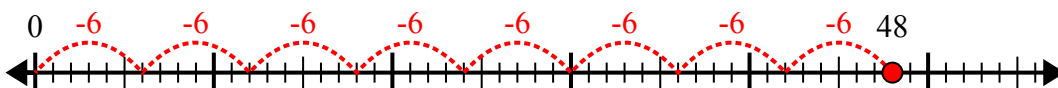
5) $42:6=$



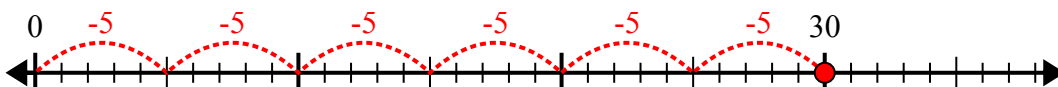
6) $24:6=$



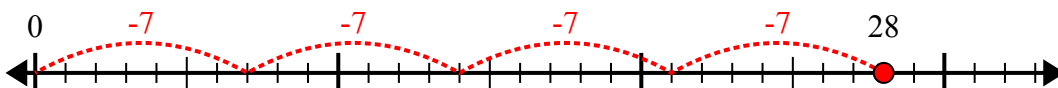
7) $48:6=$



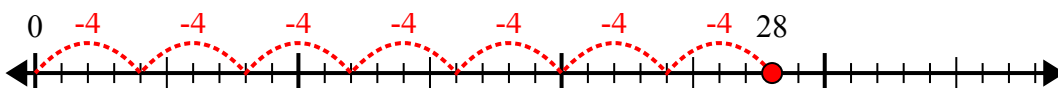
8) $30:5=$



9) $28:7=$



10) $28:4=$



Câu trả lời

1. **6**
2. **7**
3. **7**
4. **6**
5. **7**
6. **4**
7. **8**
8. **6**
9. **4**
10. **7**