



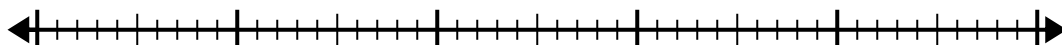
Sử dụng trục số để giải bài toán chia.

**Câu trả lời**

1)  $40:5=$

0

40

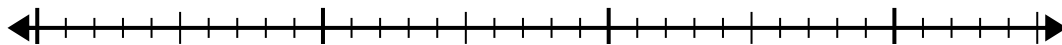


1. \_\_\_\_\_

2)  $28:4=$

0

28

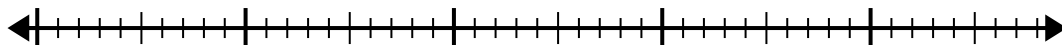


2. \_\_\_\_\_

3)  $42:6=$

0

42

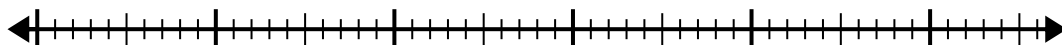


3. \_\_\_\_\_

4)  $56:8=$

0

56

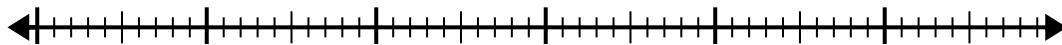


4. \_\_\_\_\_

5)  $56:7=$

0

56

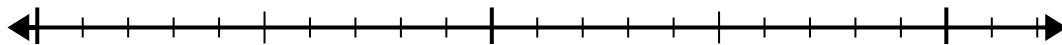


5. \_\_\_\_\_

6)  $20:5=$

0

20

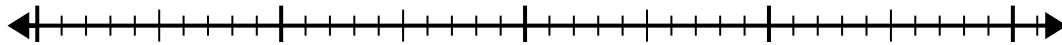


6. \_\_\_\_\_

7)  $35:7=$

0

35

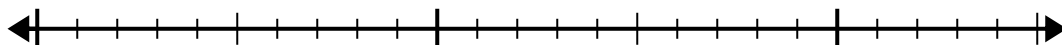


7. \_\_\_\_\_

8)  $24:8=$

0

24

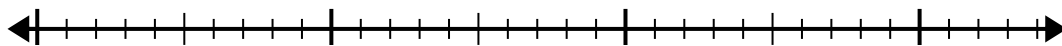


8. \_\_\_\_\_

9)  $30:5=$

0

30

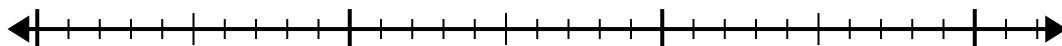


9. \_\_\_\_\_

10)  $32:4=$

0

32



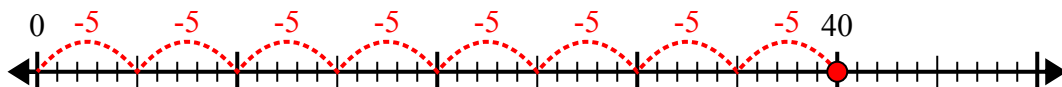
10. \_\_\_\_\_



Sử dụng trục số để giải bài toán chia.

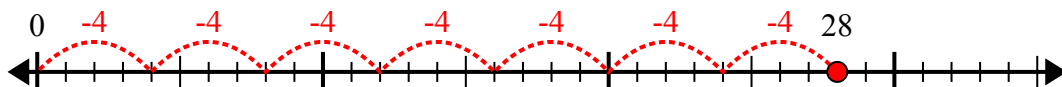
**Câu trả lời**

1)  $40:5=$



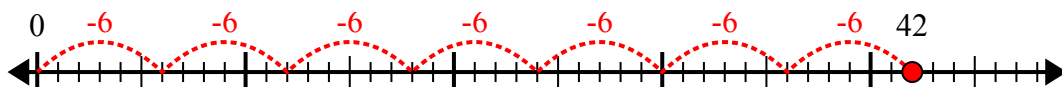
1. 8

2)  $28:4=$



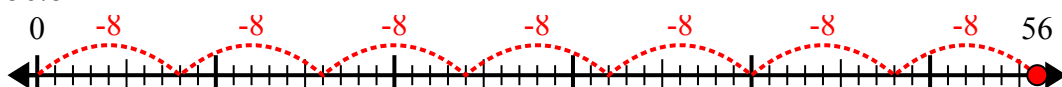
2. 7

3)  $42:6=$



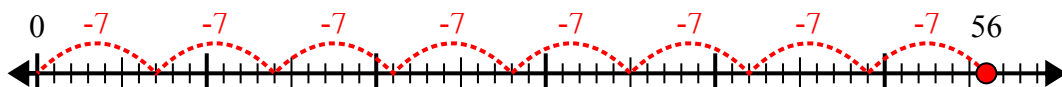
3. 7

4)  $56:8=$



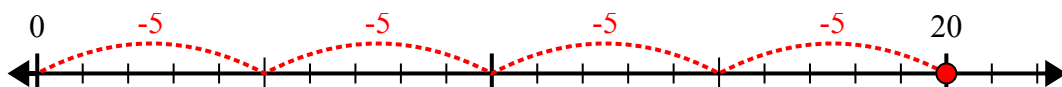
4. 7

5)  $56:7=$



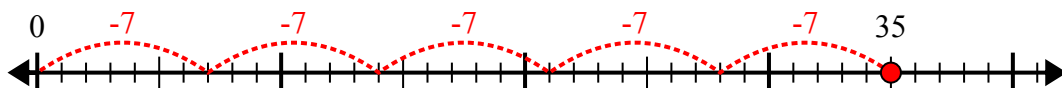
5. 8

6)  $20:5=$



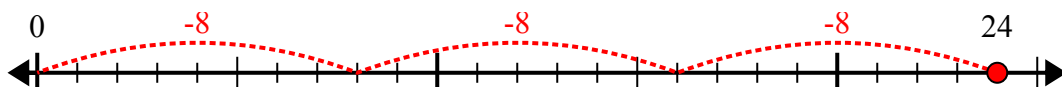
6. 4

7)  $35:7=$



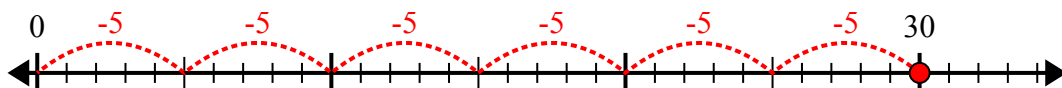
7. 5

8)  $24:8=$



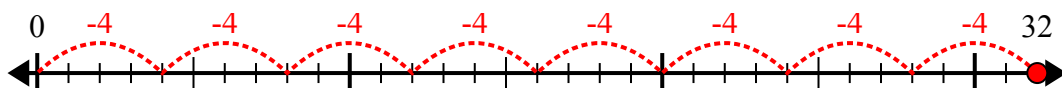
8. 3

9)  $30:5=$



9. 6

10)  $32:4=$



10. 8