

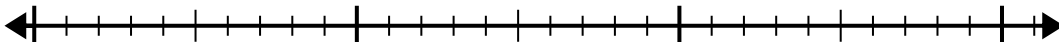


Sử dụng trục số để giải bài toán chia.

**Câu trả lời**

1)  $24:8=$   
0

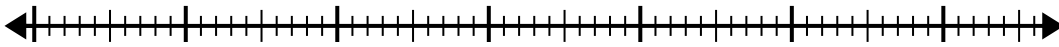
24



1. \_\_\_\_\_

2)  $56:8=$   
0

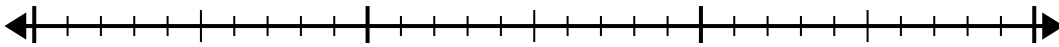
56



2. \_\_\_\_\_

3)  $24:4=$   
0

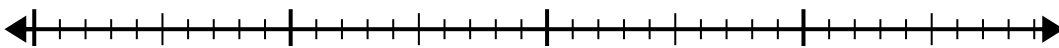
24



3. \_\_\_\_\_

4)  $32:4=$   
0

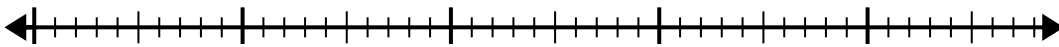
32



4. \_\_\_\_\_

5)  $48:8=$   
0

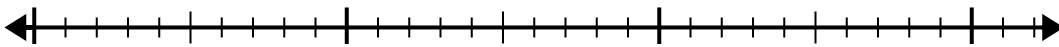
48



5. \_\_\_\_\_

6)  $24:6=$   
0

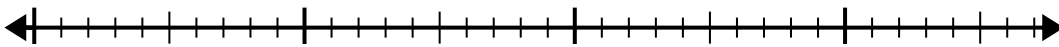
24



6. \_\_\_\_\_

7)  $28:4=$   
0

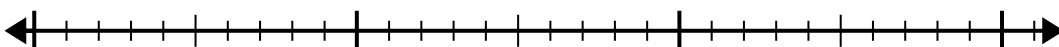
28



7. \_\_\_\_\_

8)  $21:7=$   
0

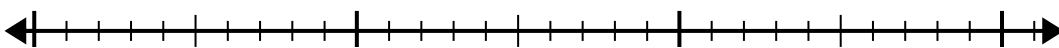
21



8. \_\_\_\_\_

9)  $28:7=$   
0

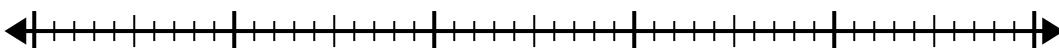
28



9. \_\_\_\_\_

10)  $40:5=$   
0

40



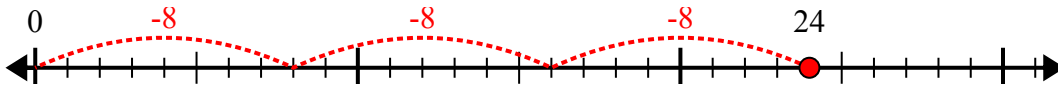
10. \_\_\_\_\_



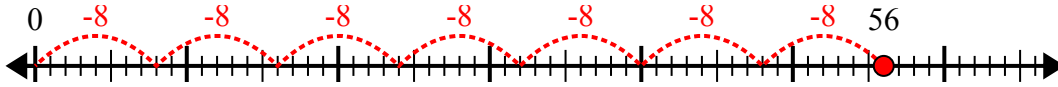
Sử dụng trục số để giải bài toán chia.

**Câu trả lời**

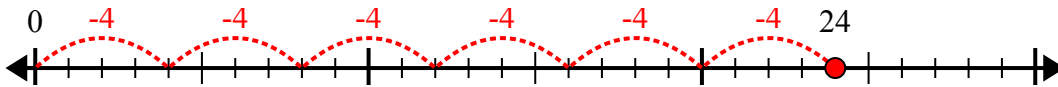
1)  $24:8=$



2)  $56:8=$



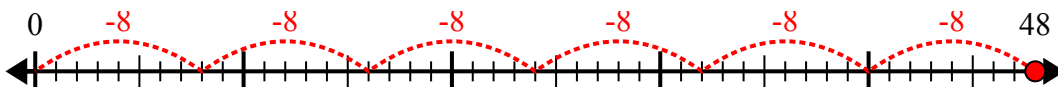
3)  $24:4=$



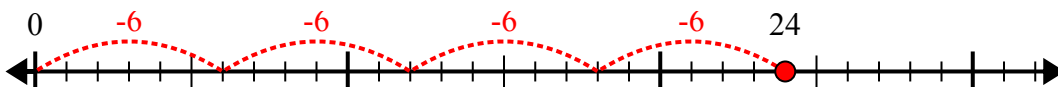
4)  $32:4=$



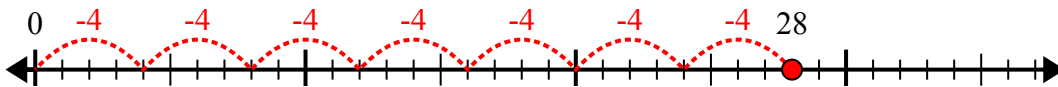
5)  $48:8=$



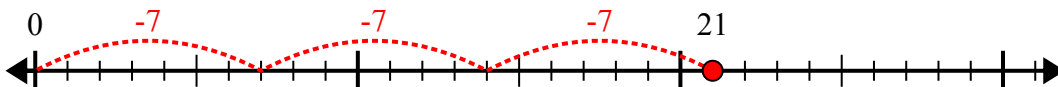
6)  $24:6=$



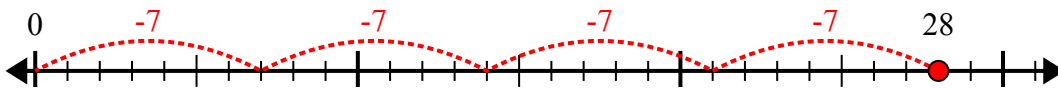
7)  $28:4=$



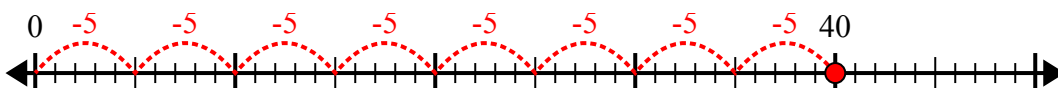
8)  $21:7=$



9)  $28:7=$



10)  $40:5=$



1. 3

2. 7

3. 6

4. 8

5. 6

6. 4

7. 7

8. 3

9. 4

10. 8