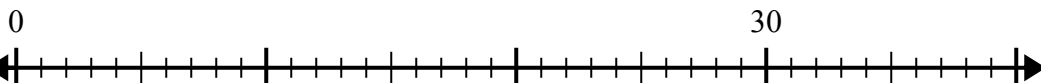




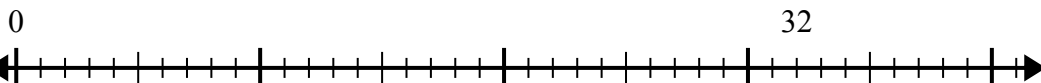
Sử dụng trục số để giải bài toán chia.

Câu trả lời

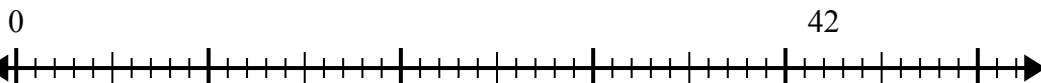
1) $30:6=$



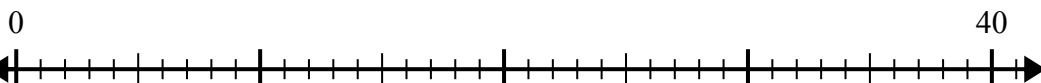
2) $32:4=$



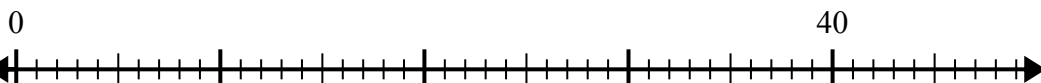
3) $42:7=$



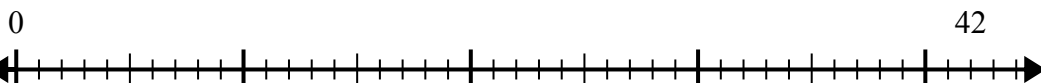
4) $40:5=$



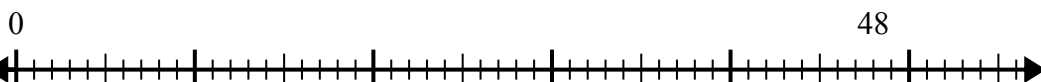
5) $40:8=$



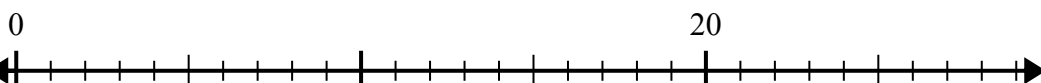
6) $42:6=$



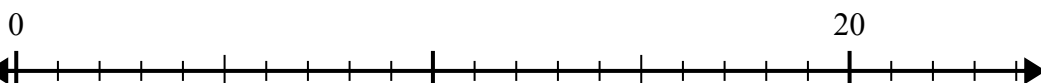
7) $48:6=$



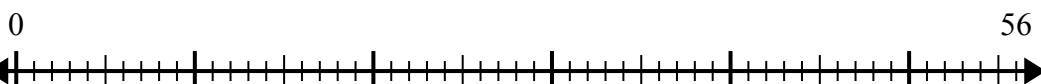
8) $20:4=$



9) $20:5=$



10) $56:8=$



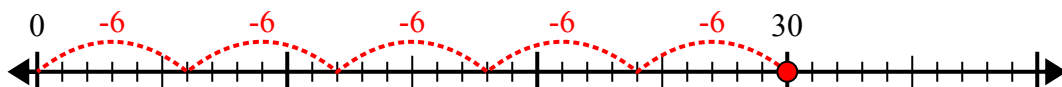
1. _____
2. _____
3. _____
4. _____
5. _____
6. _____
7. _____
8. _____
9. _____
10. _____



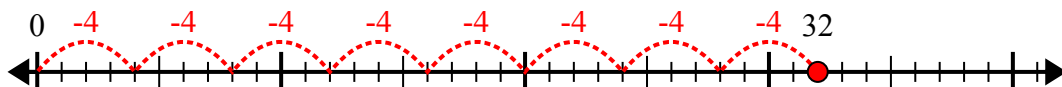
Sử dụng trục số để giải bài toán chia.

Câu trả lời

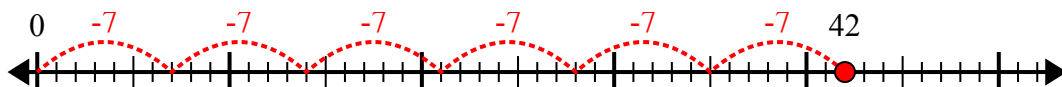
1) $30:6=$



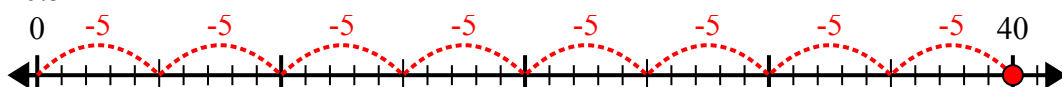
2) $32:4=$



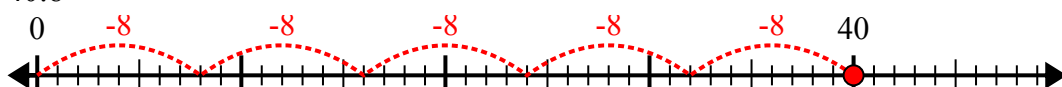
3) $42:7=$



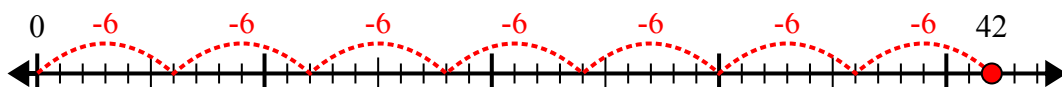
4) $40:5=$



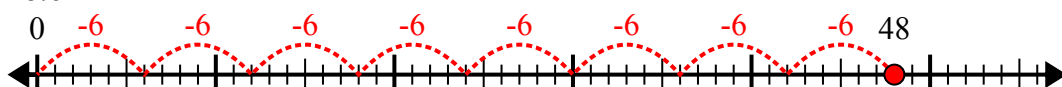
5) $40:8=$



6) $42:6=$



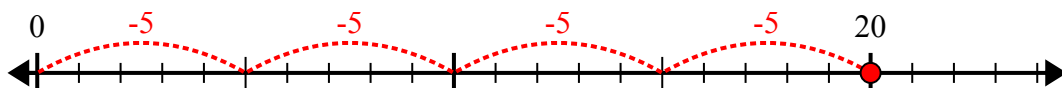
7) $48:6=$



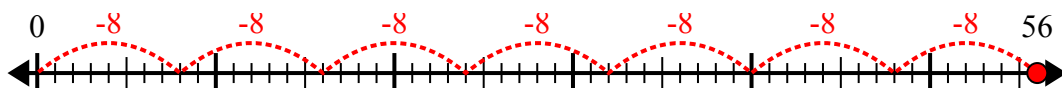
8) $20:4=$



9) $20:5=$



10) $56:8=$



1. 5

2. 8

3. 6

4. 8

5. 5

6. 7

7. 8

8. 5

9. 4

10. 7