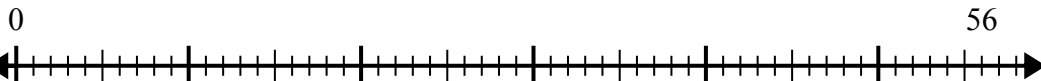




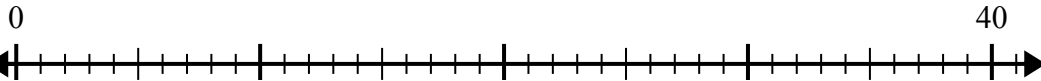
Sử dụng trục số để giải bài toán chia.

**Câu trả lời**

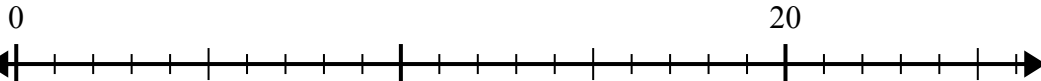
1)  $56:7=$



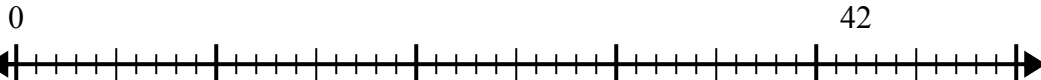
2)  $40:5=$



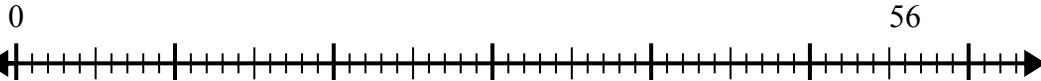
3)  $20:4=$



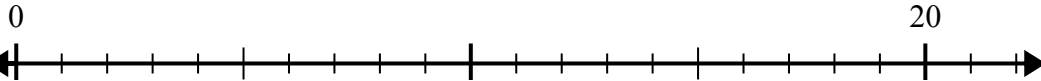
4)  $42:7=$



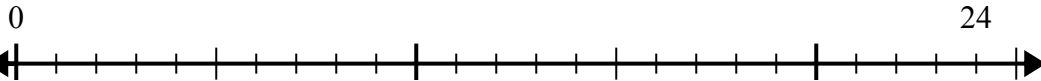
5)  $56:8=$



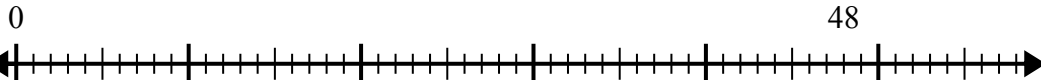
6)  $20:5=$



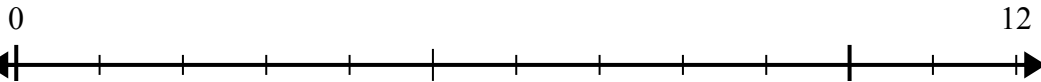
7)  $24:4=$



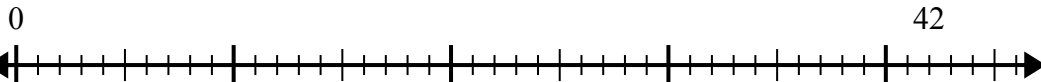
8)  $48:8=$



9)  $12:4=$



10)  $42:6=$

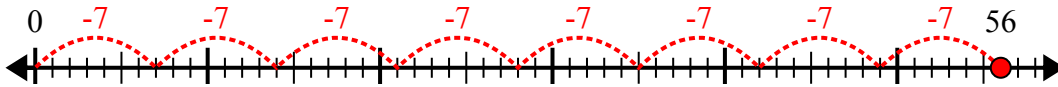


1. \_\_\_\_\_
2. \_\_\_\_\_
3. \_\_\_\_\_
4. \_\_\_\_\_
5. \_\_\_\_\_
6. \_\_\_\_\_
7. \_\_\_\_\_
8. \_\_\_\_\_
9. \_\_\_\_\_
10. \_\_\_\_\_

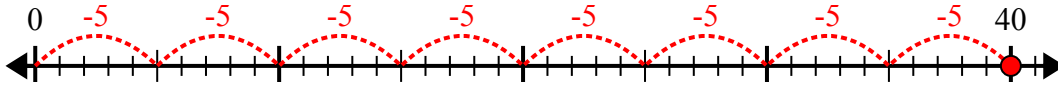


Sử dụng trục số để giải bài toán chia.

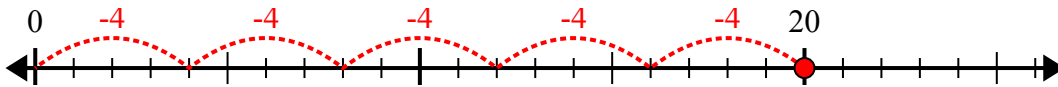
1)  $56:7=$



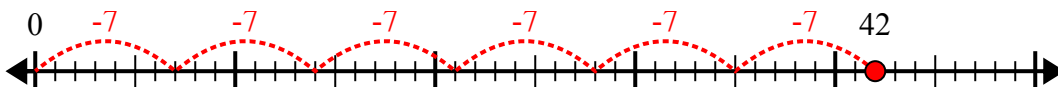
2)  $40:5=$



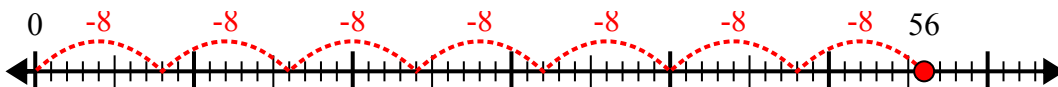
3)  $20:4=$



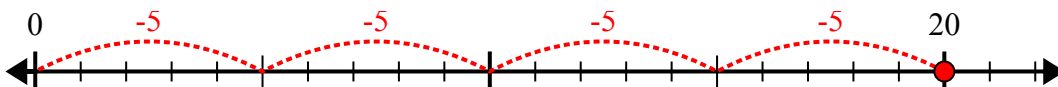
4)  $42:7=$



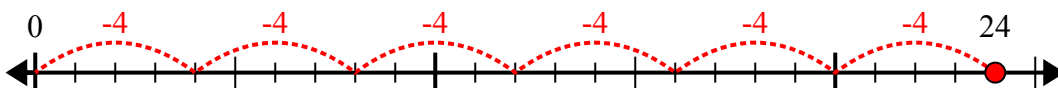
5)  $56:8=$



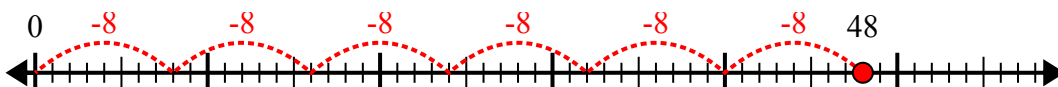
6)  $20:5=$



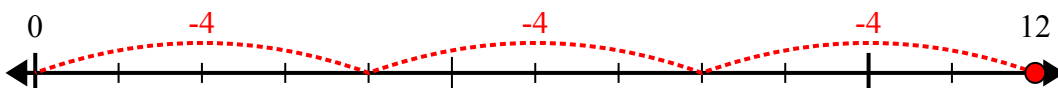
7)  $24:4=$



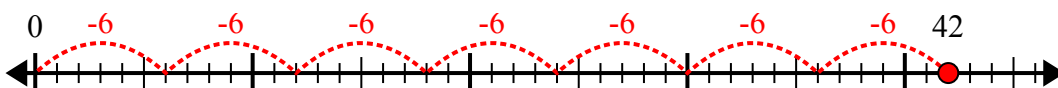
8)  $48:8=$



9)  $12:4=$



10)  $42:6=$



**Câu trả lời**

1. 8

2. 8

3. 5

4. 6

5. 7

6. 4

7. 6

8. 6

9. 3

10. 7