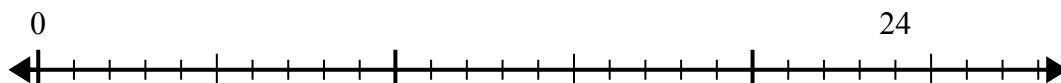


Sử dụng trục số để giải bài toán chia.

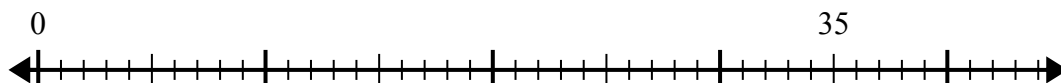
Câu trả lời

1) $24:6=$



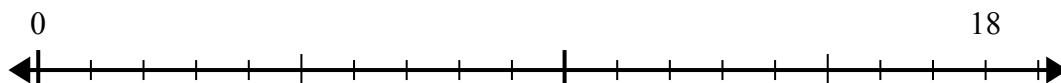
1. _____

2) $35:7=$



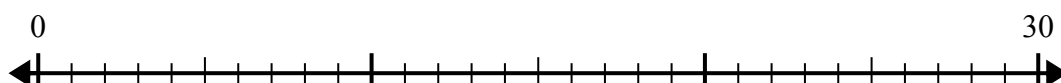
2. _____

3) $18:6=$




3. _____

4) $30:6=$



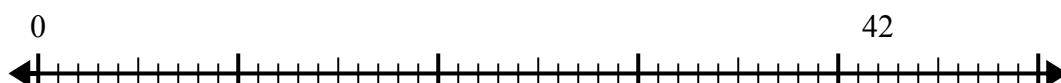
4. _____

5) $15:5=$



5. _____

6) $42:6=$



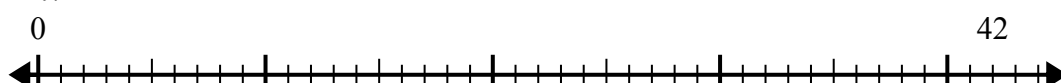
6. _____

7) $56:8=$



7. _____

8) $42:7=$



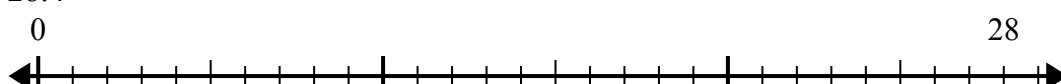
8. _____

9) $48:8=$



9. _____

10) $28:4=$

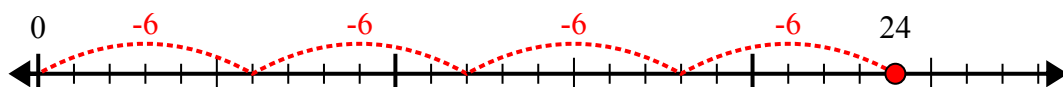


10. _____

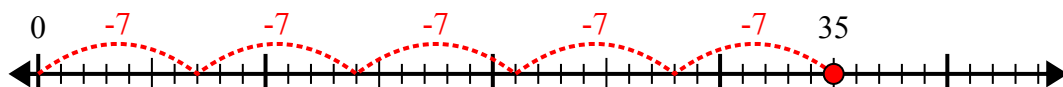


Sử dụng trục số để giải bài toán chia.

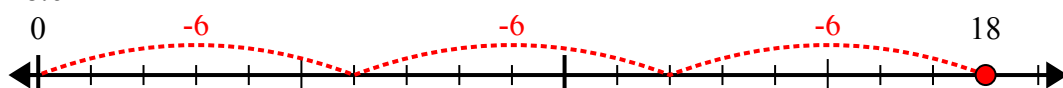
1) $24:6=$



2) $35:7=$



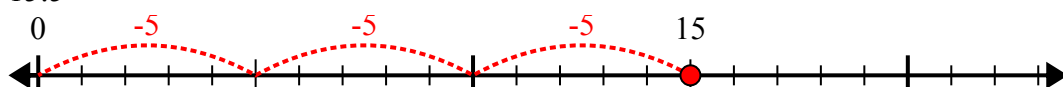
3) $18:6=$



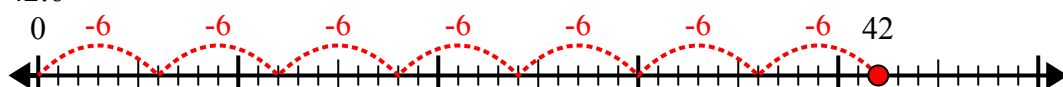
4) $30:6=$



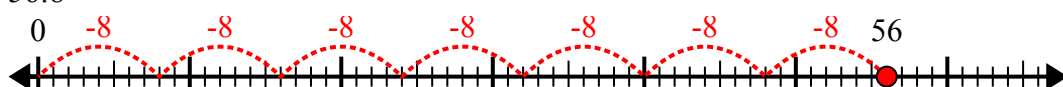
5) $15:5=$



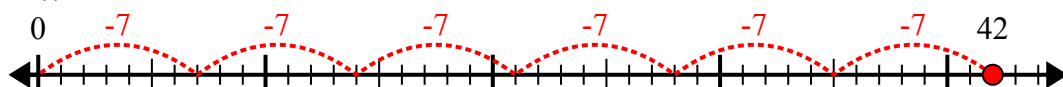
6) $42:6=$



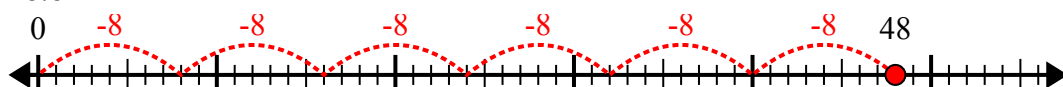
7) $56:8=$



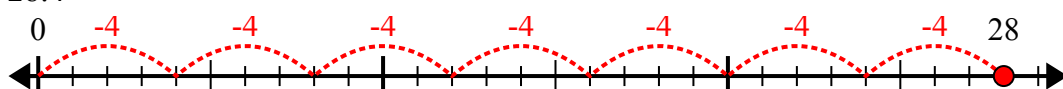
8) $42:7=$



9) $48:8=$



10) $28:4=$



Câu trả lời

1. **4**

2. **5**

3. **3**

4. **5**

5. **3**

6. **7**

7. **7**

8. **6**

9. **6**

10. **7**