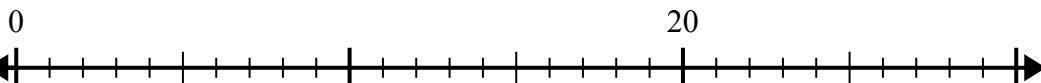




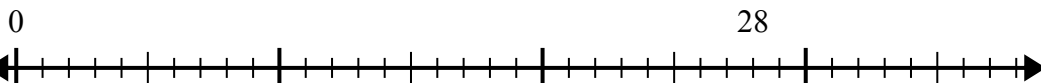
Sử dụng trục số để giải bài toán chia.

Câu trả lời

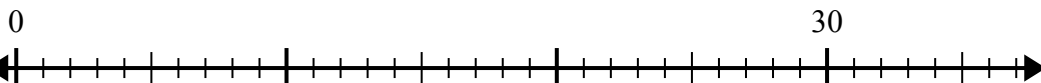
1) $20:5=$



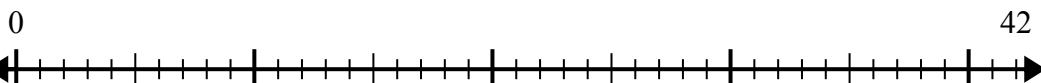
2) $28:4=$



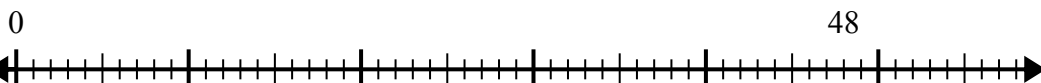
3) $30:6=$



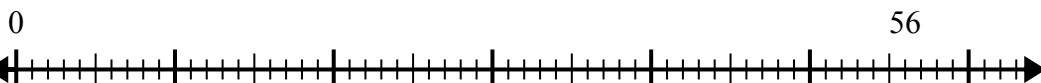
4) $42:6=$



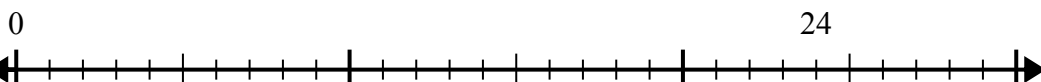
5) $48:6=$



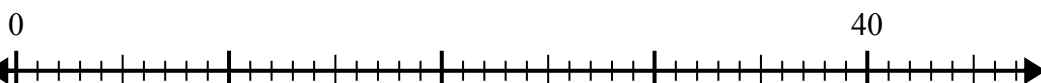
6) $56:8=$



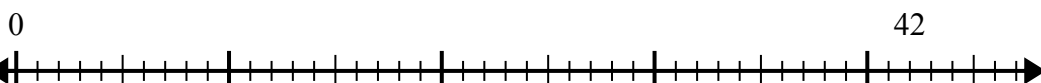
7) $24:6=$



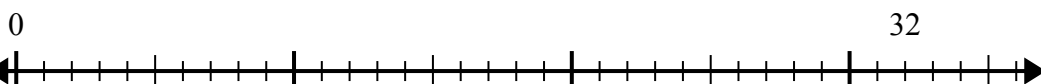
8) $40:8=$



9) $42:7=$



10) $32:4=$



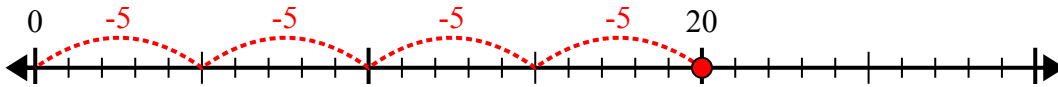
1. _____
2. _____
3. _____
4. _____
5. _____
6. _____
7. _____
8. _____
9. _____
10. _____



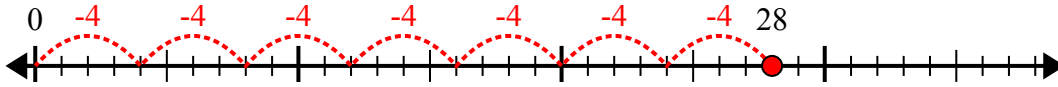
Sử dụng trục số để giải bài toán chia.

Câu trả lời

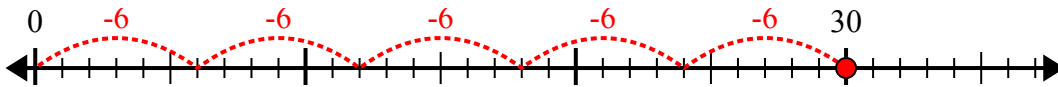
1) $20:5=$



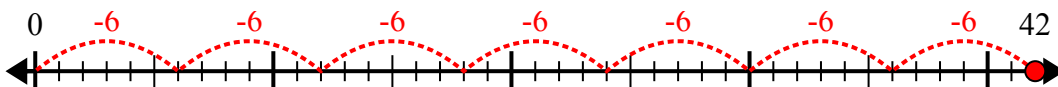
2) $28:4=$



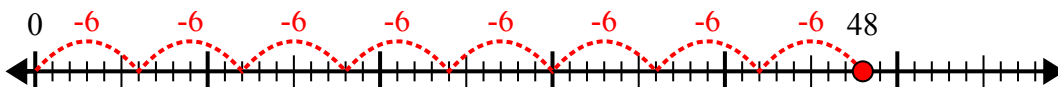
3) $30:6=$



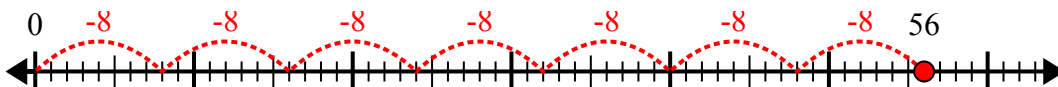
4) $42:6=$



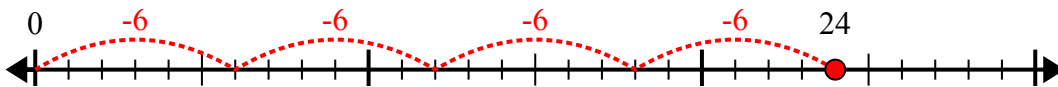
5) $48:6=$



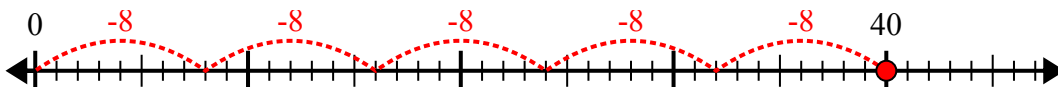
6) $56:8=$



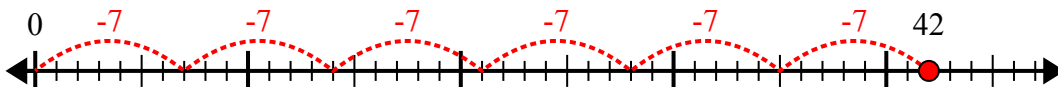
7) $24:6=$



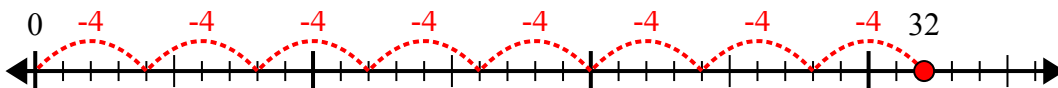
8) $40:8=$



9) $42:7=$



10) $32:4=$



1. 4
2. 7
3. 5
4. 7
5. 8
6. 7
7. 4
8. 5
9. 6
10. 8