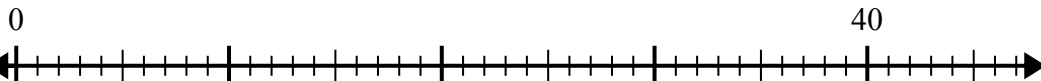


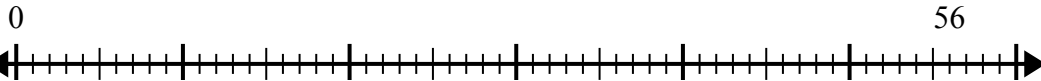


Sử dụng trục số để giải bài toán chia.

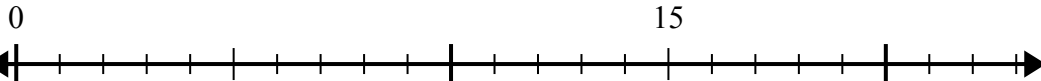
1) $40:5=$



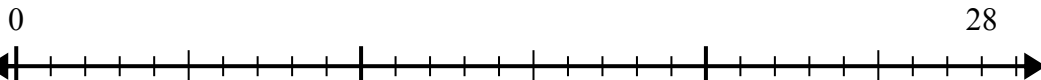
2) $56:7=$



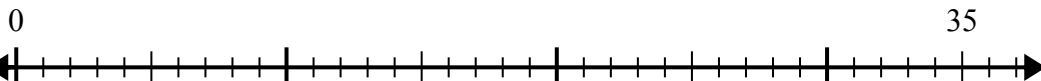
3) $15:5=$



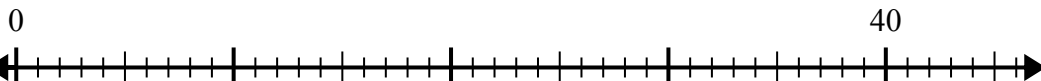
4) $28:4=$



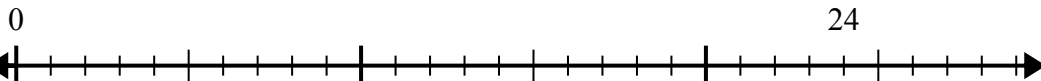
5) $35:7=$



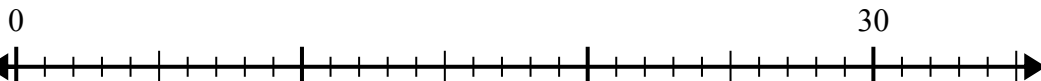
6) $40:8=$



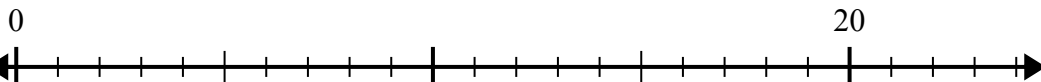
7) $24:4=$



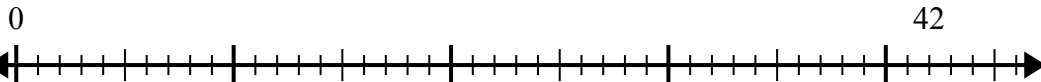
8) $30:5=$



9) $20:4=$



10) $42:6=$



Câu trả lời

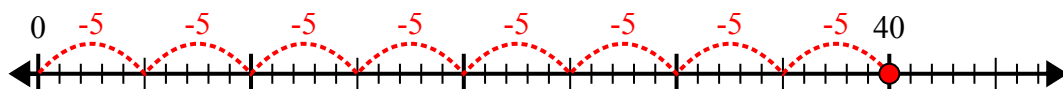
1. _____
2. _____
3. _____
4. _____
5. _____
6. _____
7. _____
8. _____
9. _____
10. _____



Sử dụng trục số để giải bài toán chia.

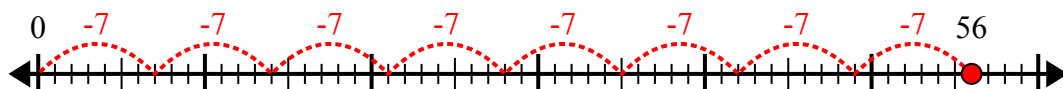
Câu trả lời

1) $40:5=$



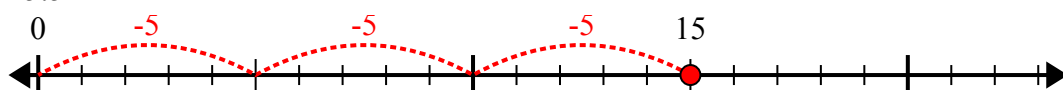
1. 8

2) $56:7=$



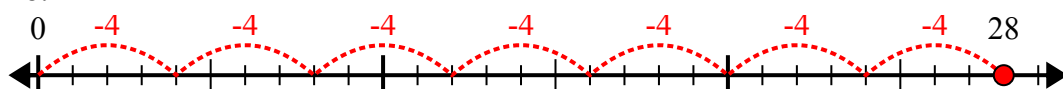
2. 8

3) $15:5=$



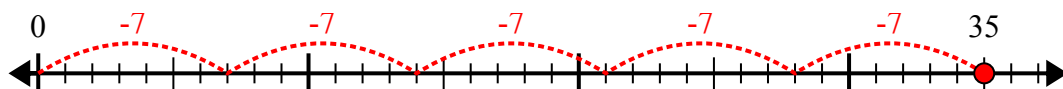
3. 3

4) $28:4=$



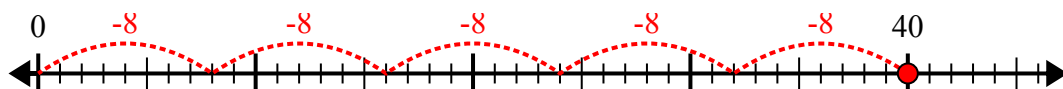
4. 7

5) $35:7=$



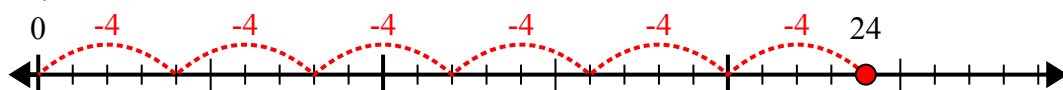
5. 5

6) $40:8=$



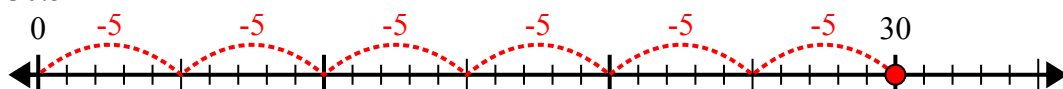
6. 5

7) $24:4=$



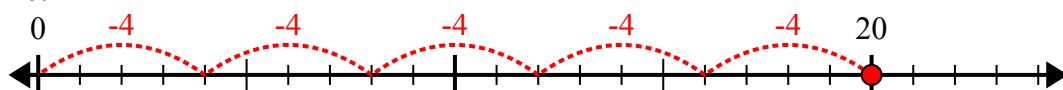
7. 6

8) $30:5=$



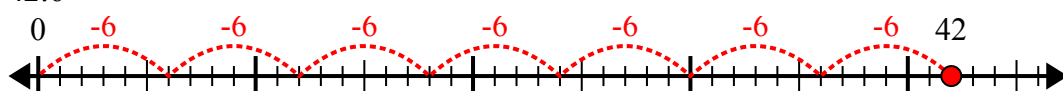
8. 6

9) $20:4=$



9. 5

10) $42:6=$



10. 7