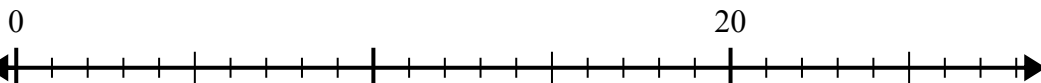




Sử dụng trục số để giải bài toán chia.

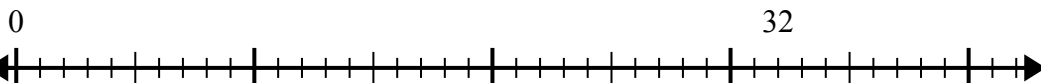
Câu trả lời

1) $20:4=$



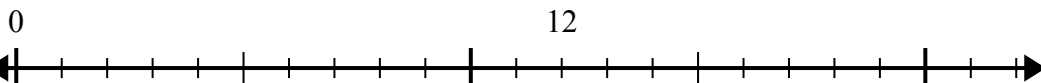
1. _____

2) $32:8=$



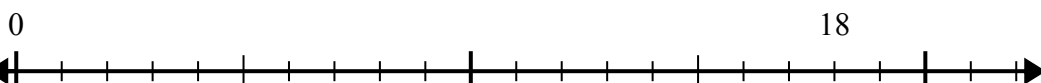
2. _____

3) $12:4=$



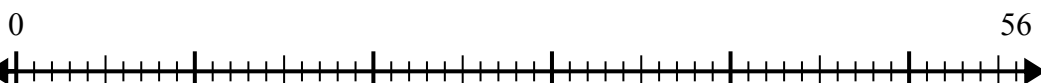
3. _____

4) $18:6=$



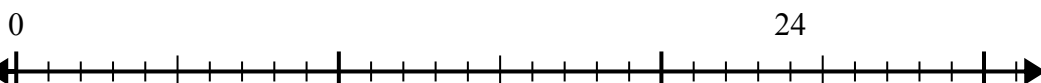
4. _____

5) $56:8=$



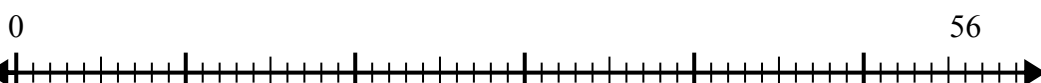
5. _____

6) $24:8=$




6. _____

7) $56:7=$



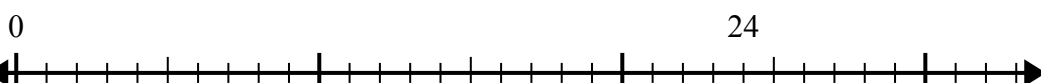
7. _____

8) $15:5=$




8. _____

9) $24:4=$



9. _____

10) $40:5=$

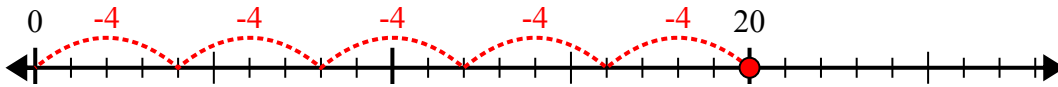


10. _____

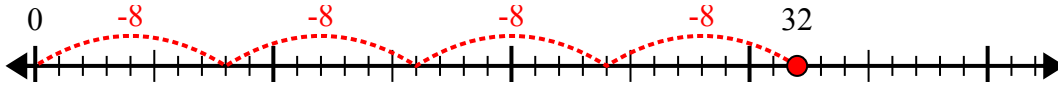


Sử dụng trục số để giải bài toán chia.

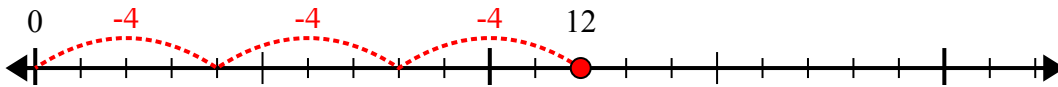
1) $20:4=$



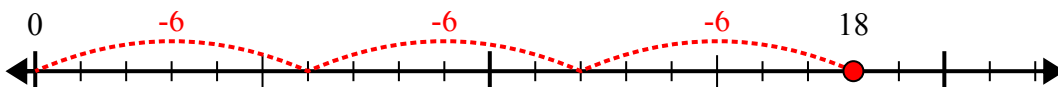
2) $32:8=$



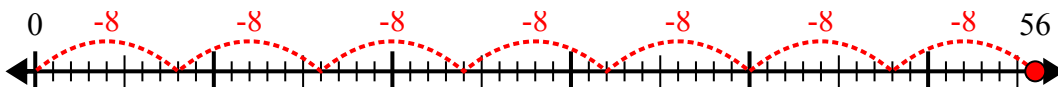
3) $12:4=$



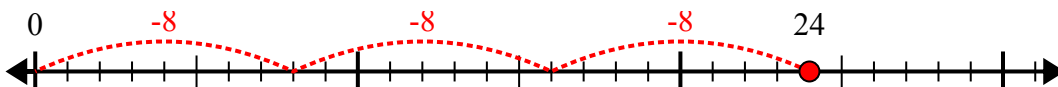
4) $18:6=$



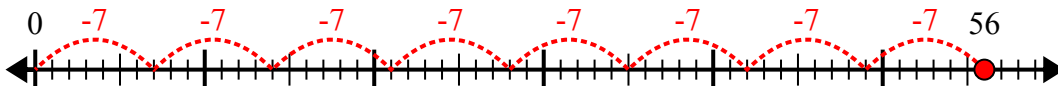
5) $56:8=$



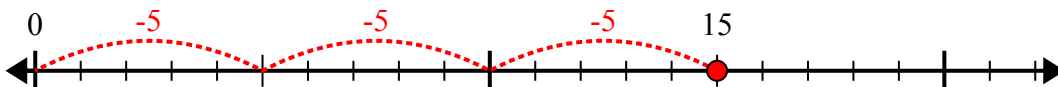
6) $24:8=$



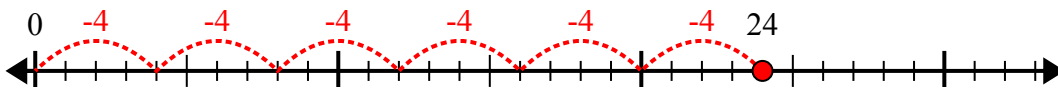
7) $56:7=$



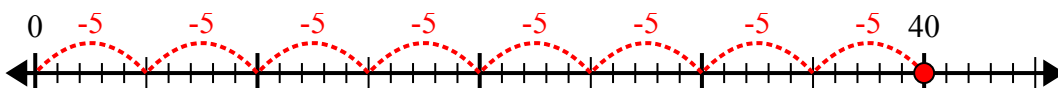
8) $15:5=$



9) $24:4=$



10) $40:5=$



Câu trả lời

1. 5
2. 4
3. 3
4. 3
5. 7
6. 3
7. 8
8. 3
9. 6
10. 8