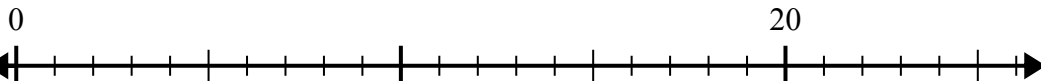




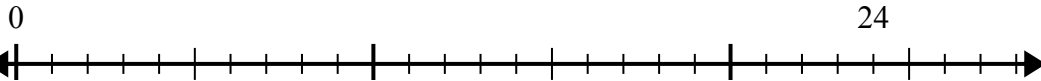
Sử dụng trục số để giải bài toán chia.

**Câu trả lời**

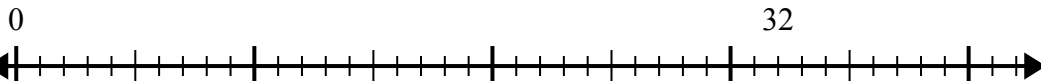
1)  $20:5=$



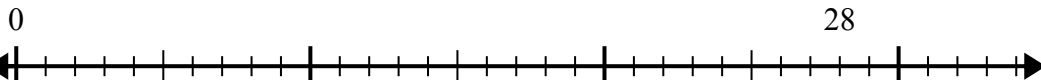
2)  $24:6=$



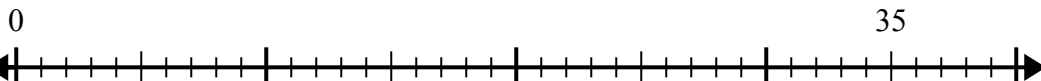
3)  $32:8=$



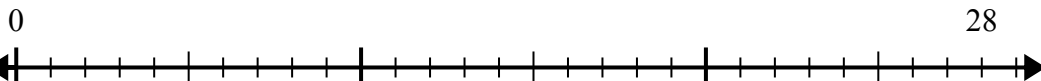
4)  $28:7=$



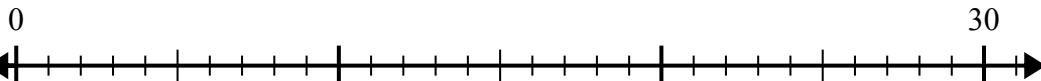
5)  $35:5=$



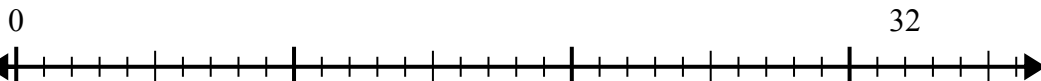
6)  $28:4=$



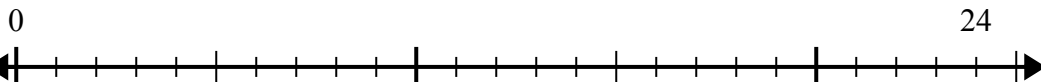
7)  $30:6=$



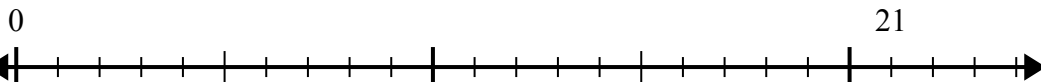
8)  $32:4=$



9)  $24:4=$



10)  $21:7=$



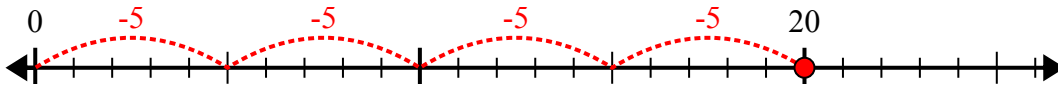
1. \_\_\_\_\_
2. \_\_\_\_\_
3. \_\_\_\_\_
4. \_\_\_\_\_
5. \_\_\_\_\_
6. \_\_\_\_\_
7. \_\_\_\_\_
8. \_\_\_\_\_
9. \_\_\_\_\_
10. \_\_\_\_\_



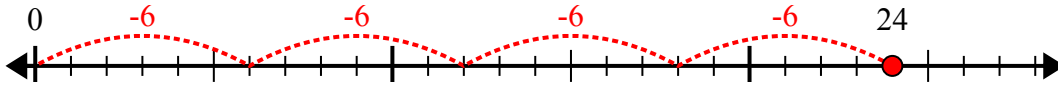
Sử dụng trục số để giải bài toán chia.

**Câu trả lời**

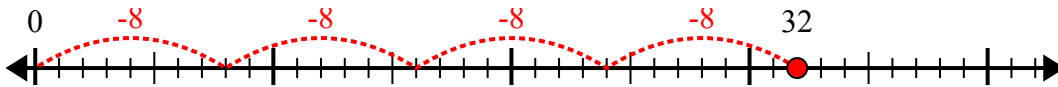
1)  $20:5=$



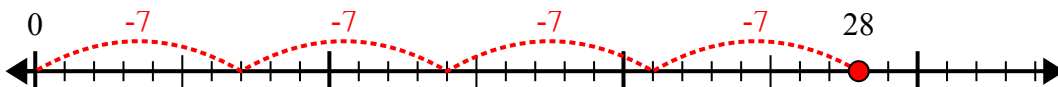
2)  $24:6=$



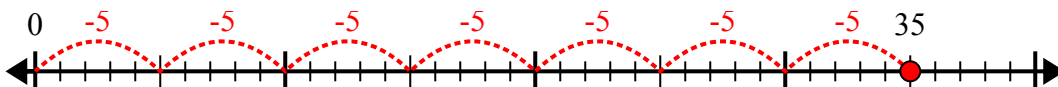
3)  $32:8=$



4)  $28:7=$



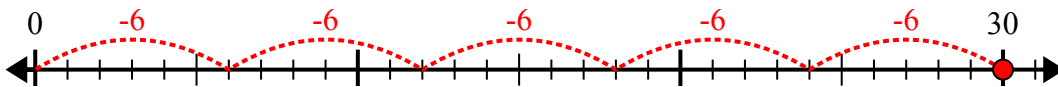
5)  $35:5=$



6)  $28:4=$



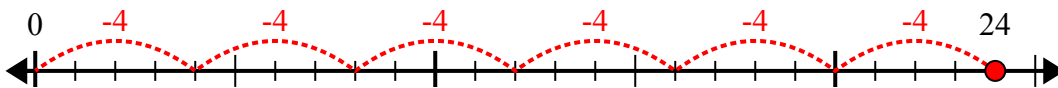
7)  $30:6=$



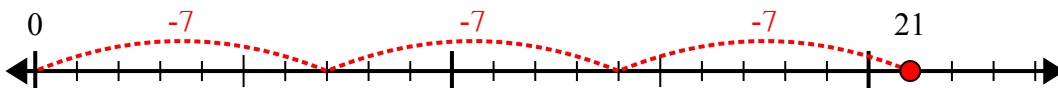
8)  $32:4=$



9)  $24:4=$



10)  $21:7=$



1. 4
2. 4
3. 4
4. 4
5. 7
6. 7
7. 5
8. 8
9. 6
10. 3