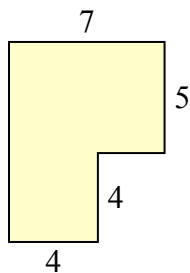




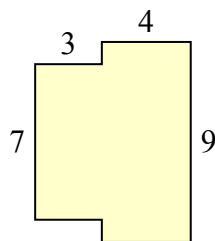
Tìm tổng diện tích của mỗi hình. Đo bằng millimet (mm). Không theo tỉ lệ.

Câu trả lời

1)



2)



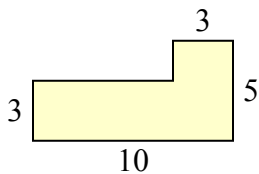
1. _____

2. _____

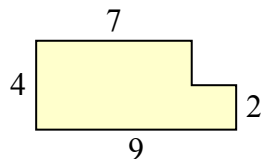
3. _____

4. _____

3)



4)



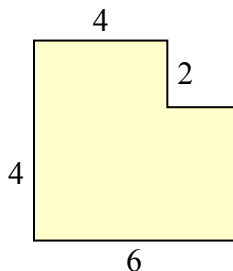
5. _____

6. _____

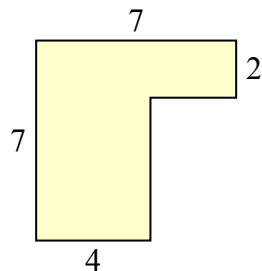
7. _____

8. _____

5)



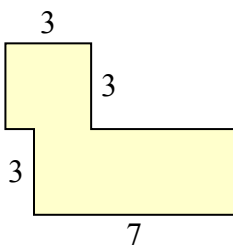
6)



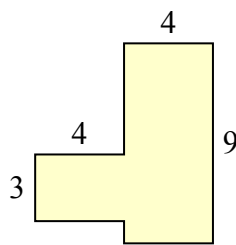
9. _____

10. _____

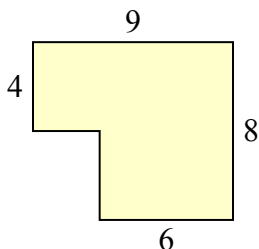
7)



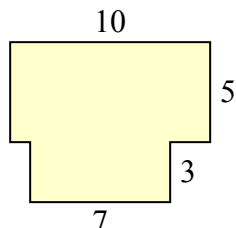
8)



9)



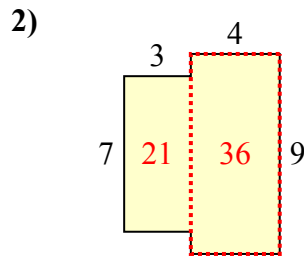
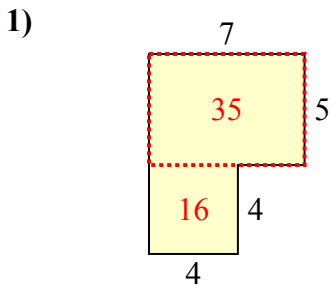
10)





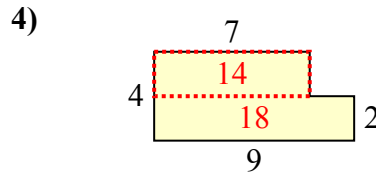
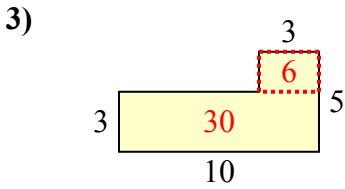
Tìm tổng diện tích của mỗi hình. Đo bằng millimet (mm). Không theo tỉ lệ.

Câu trả lời



1. 51 milimet²

2. 57 milimet²

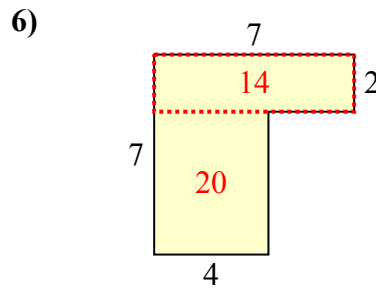
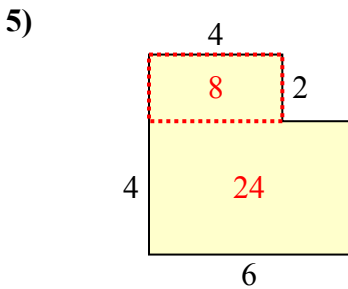


3. 36 milimet²

4. 32 milimet²

5. 32 milimet²

6. 34 milimet²



7. 30 milimet²

8. 48 milimet²

9. 60 milimet²

10. 71 milimet²

