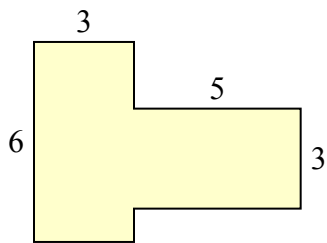




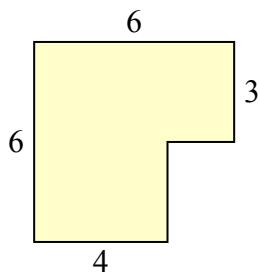
Tìm tổng diện tích của mỗi hình. Đo bằng millimet (mm). Không theo tỉ lệ.

Câu trả lời

1)



2)



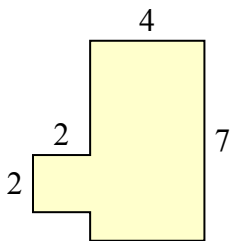
1. _____

2. _____

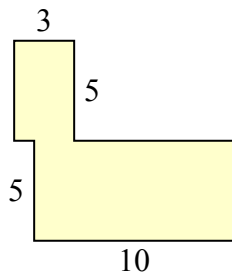
3. _____

4. _____

3)



4)



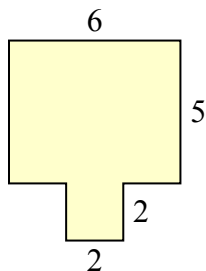
5. _____

6. _____

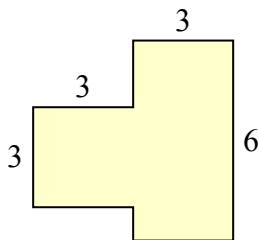
7. _____

8. _____

5)



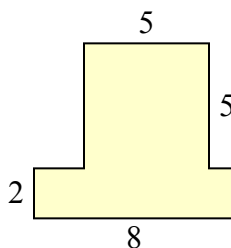
6)



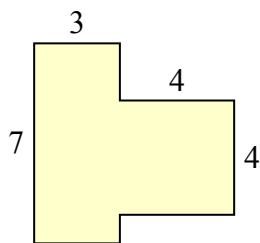
9. _____

10. _____

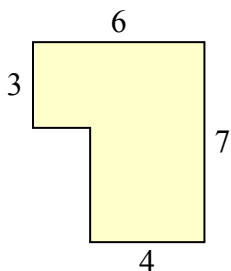
7)



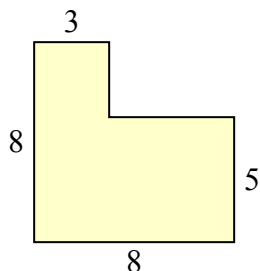
8)



9)



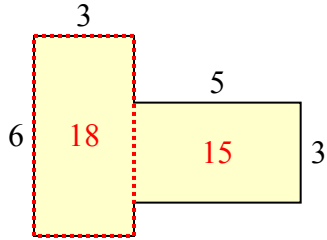
10)



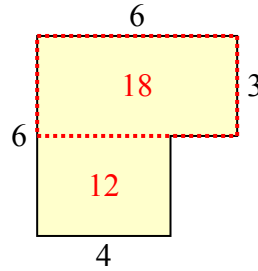


Tìm tổng diện tích của mỗi hình. Đo bằng millimet (mm). Không theo tỉ lệ.

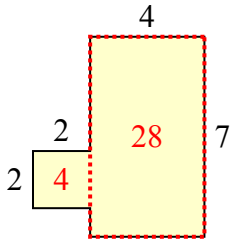
1)



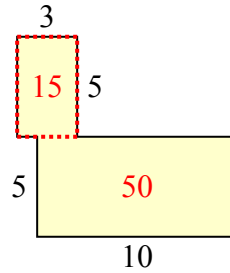
2)



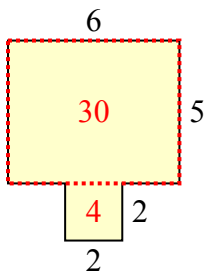
3)



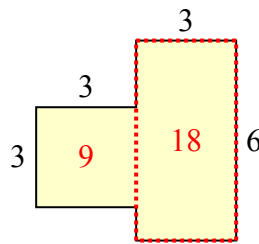
4)



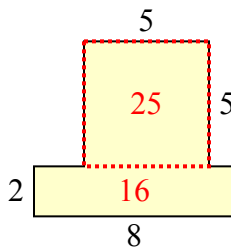
5)



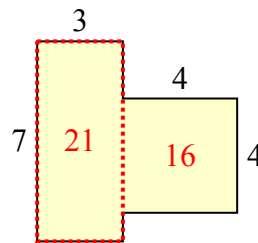
6)



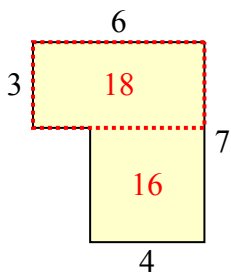
7)



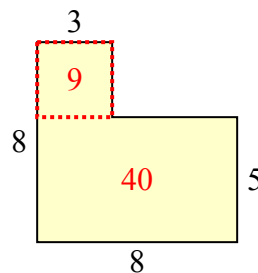
8)



9)



10)



Câu trả lời

1. 33 milimet²
2. 30 milimet²
3. 32 milimet²
4. 65 milimet²
5. 34 milimet²
6. 27 milimet²
7. 41 milimet²
8. 37 milimet²
9. 34 milimet²
10. 49 milimet²