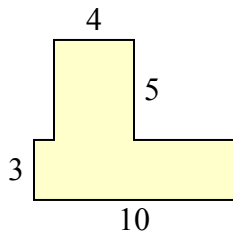




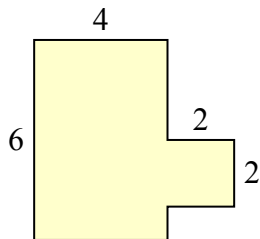
Tìm tổng diện tích của mỗi hình. Đo bằng millimet (mm). Không theo tỉ lệ.

**Câu trả lời**

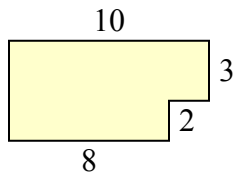
1)



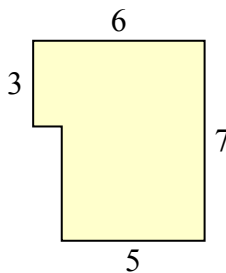
2)



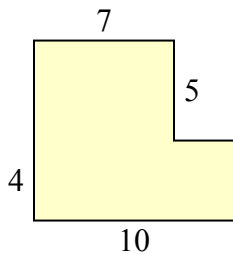
3)



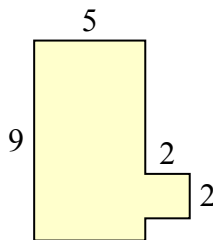
4)



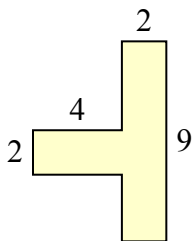
5)



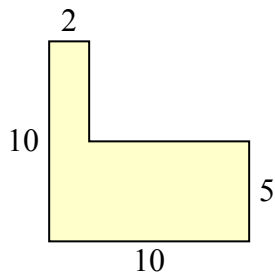
6)



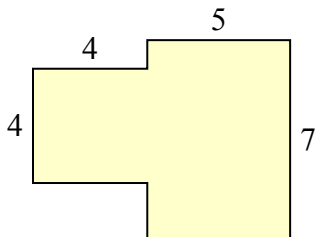
7)



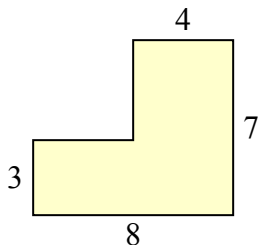
8)



9)



10)

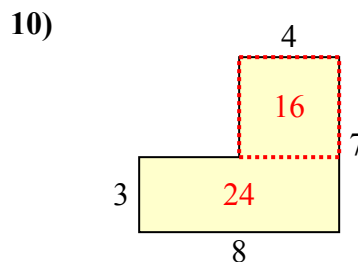
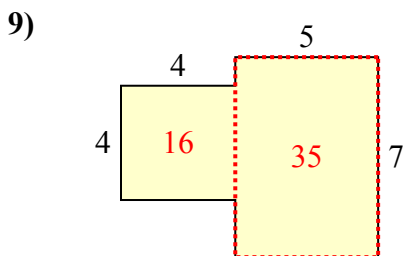
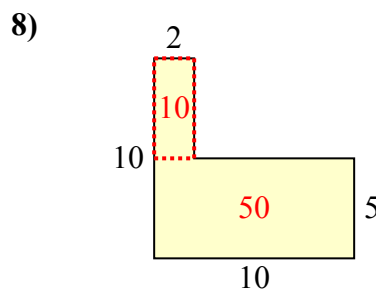
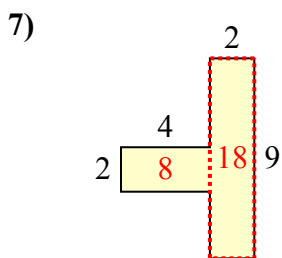
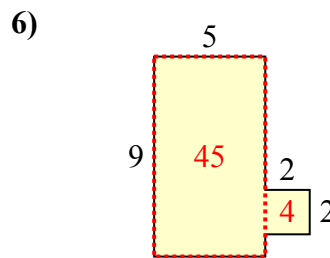
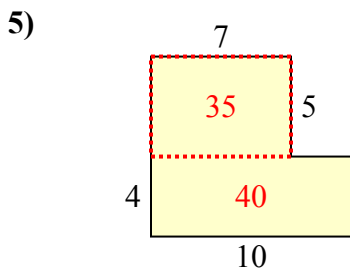
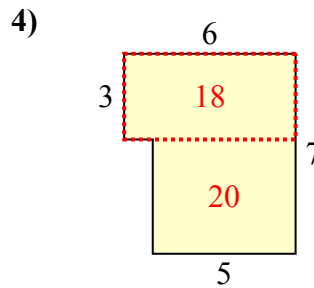
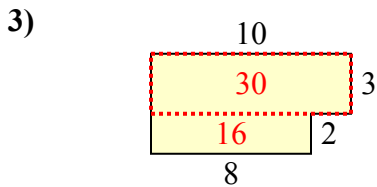
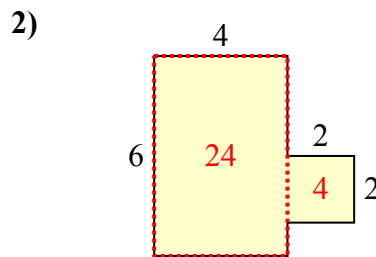
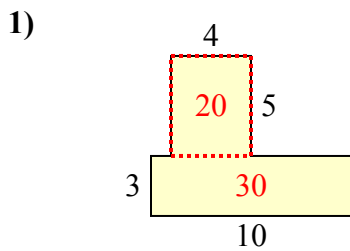


1. \_\_\_\_\_
2. \_\_\_\_\_
3. \_\_\_\_\_
4. \_\_\_\_\_
5. \_\_\_\_\_
6. \_\_\_\_\_
7. \_\_\_\_\_
8. \_\_\_\_\_
9. \_\_\_\_\_
10. \_\_\_\_\_



Tìm tổng diện tích của mỗi hình. Đo bằng millimet (mm). Không theo tỉ lệ.

**Câu trả lời**



1. 50 millimet<sup>2</sup>
2. 28 millimet<sup>2</sup>
3. 46 millimet<sup>2</sup>
4. 38 millimet<sup>2</sup>
5. 75 millimet<sup>2</sup>
6. 49 millimet<sup>2</sup>
7. 26 millimet<sup>2</sup>
8. 60 millimet<sup>2</sup>
9. 51 millimet<sup>2</sup>
10. 40 millimet<sup>2</sup>