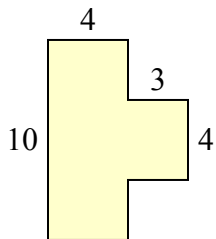




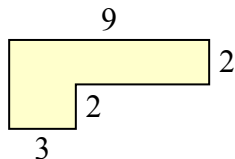
Tìm tổng diện tích của mỗi hình. Đo bằng millimet (mm). Không theo tỉ lệ.

Câu trả lời

1)



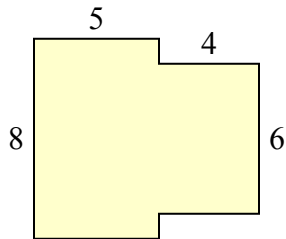
2)



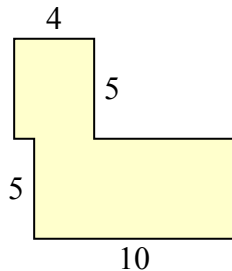
1. _____

2. _____

3)



4)



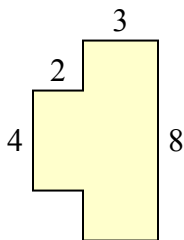
3. _____

4. _____

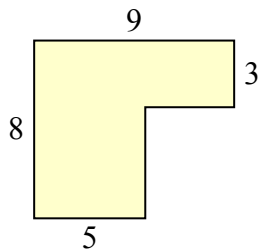
5. _____

6. _____

5)



6)



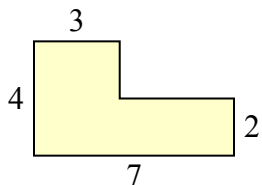
7. _____

8. _____

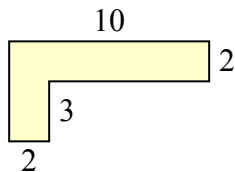
9. _____

10. _____

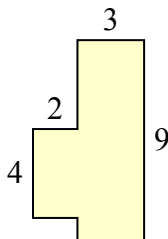
7)



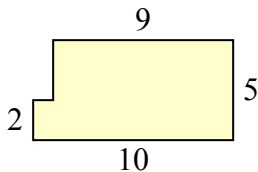
8)



9)

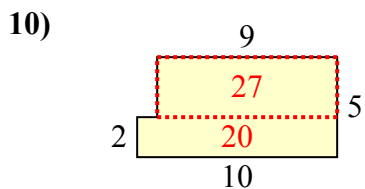
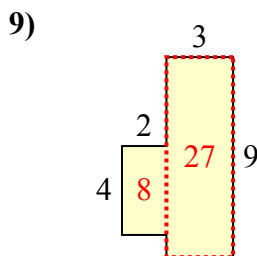
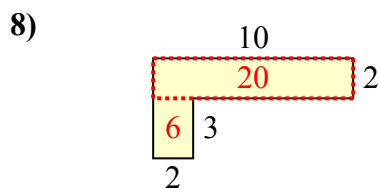
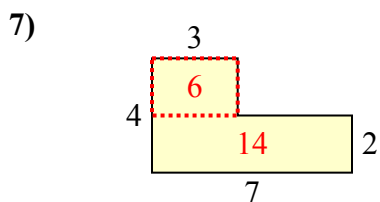
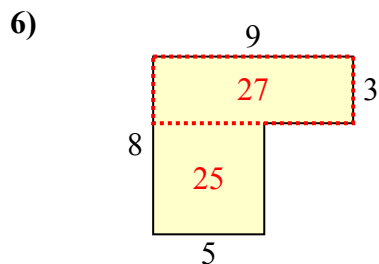
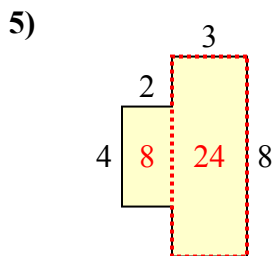
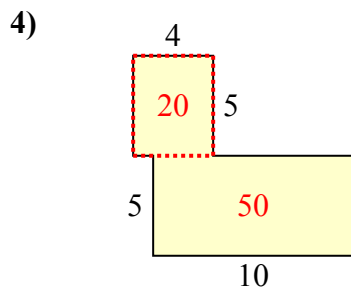
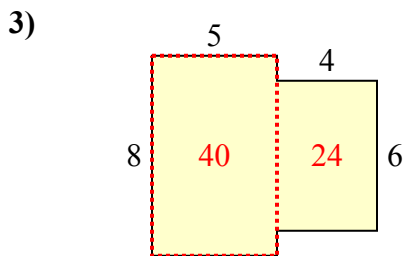
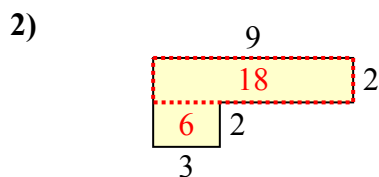
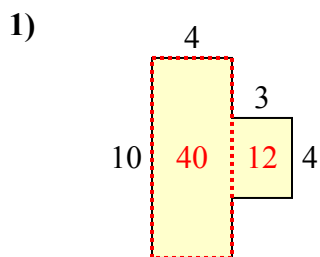


10)





Tìm tổng diện tích của mỗi hình. Đo bằng millimet (mm). Không theo tỉ lệ.



Câu trả lời

1. 52 milimet²

2. 24 milimet²

3. 64 milimet²

4. 70 milimet²

5. 32 milimet²

6. 52 milimet²

7. 20 milimet²

8. 26 milimet²

9. 35 milimet²

10. 47 milimet²