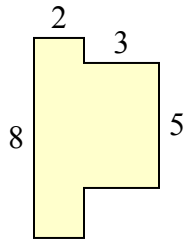




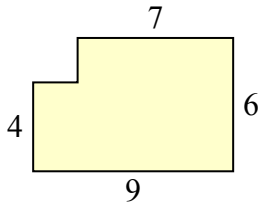
Tìm tổng diện tích của mỗi hình. Đo bằng millimet (mm). Không theo tỉ lệ.

Câu trả lời

1)



2)



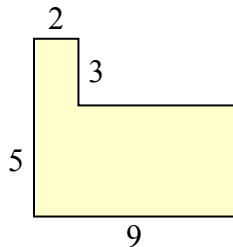
1. _____

2. _____

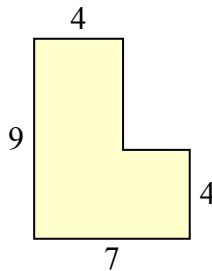
3. _____

4. _____

3)



4)



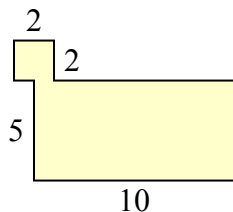
5. _____

6. _____

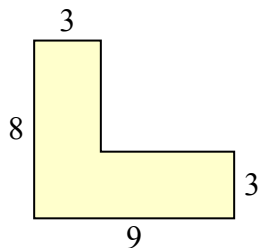
7. _____

8. _____

5)



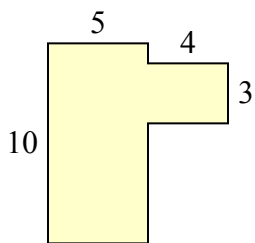
6)



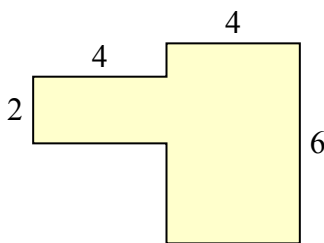
9. _____

10. _____

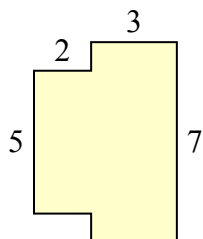
7)



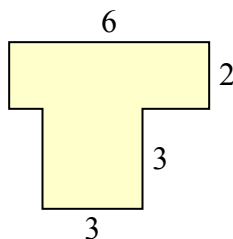
8)



9)



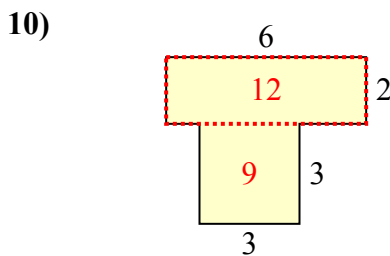
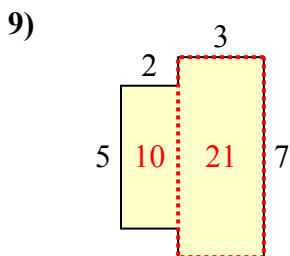
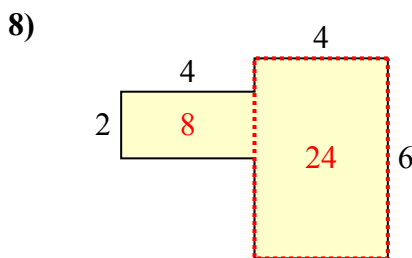
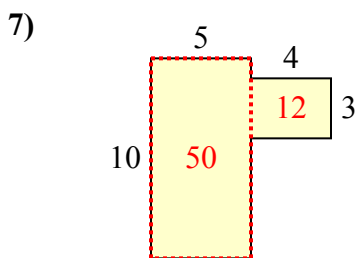
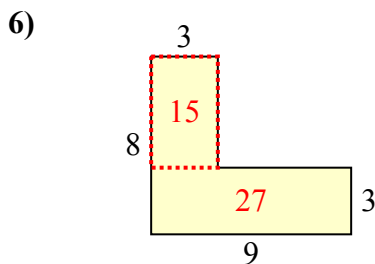
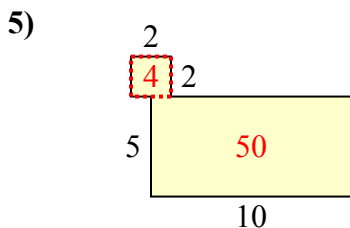
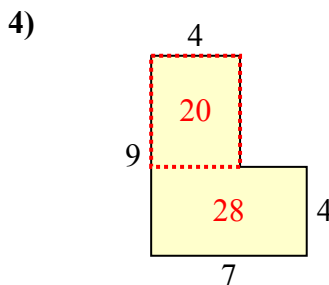
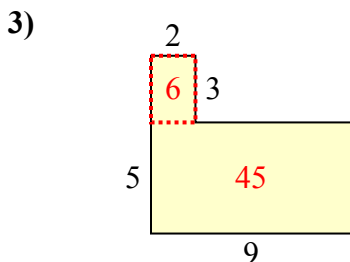
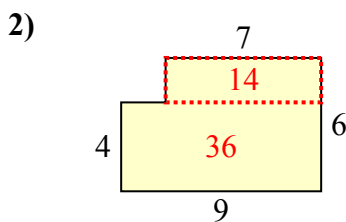
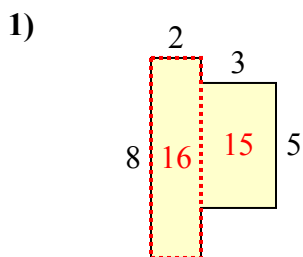
10)





Tìm tổng diện tích của mỗi hình. Đo bằng millimet (mm). Không theo tỉ lệ.

Câu trả lời



1. 31 milimet²

2. 50 milimet²

3. 51 milimet²

4. 48 milimet²

5. 54 milimet²

6. 42 milimet²

7. 62 milimet²

8. 32 milimet²

9. 31 milimet²

10. 21 milimet²