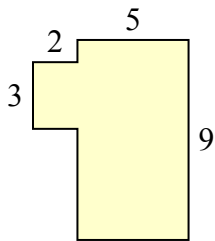




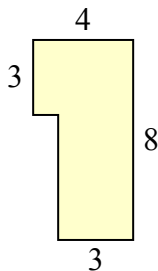
Tìm tổng diện tích của mỗi hình. Đo bằng millimet (mm). Không theo tỉ lệ.

Câu trả lời

1)



2)



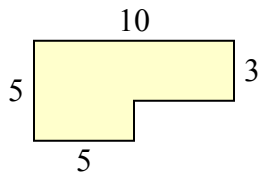
1. _____

2. _____

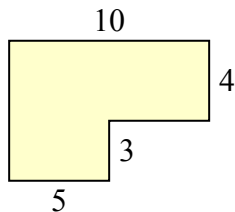
3. _____

4. _____

3)



4)



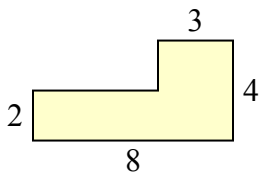
5. _____

6. _____

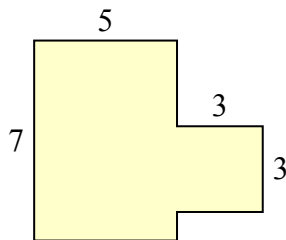
7. _____

8. _____

5)



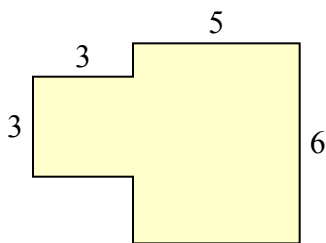
6)



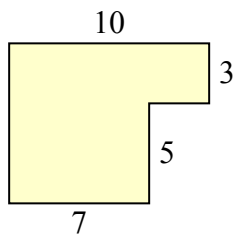
9. _____

10. _____

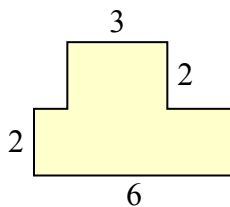
7)



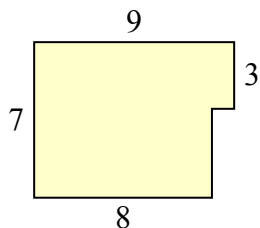
8)



9)



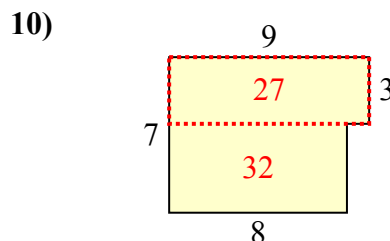
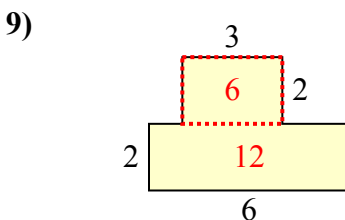
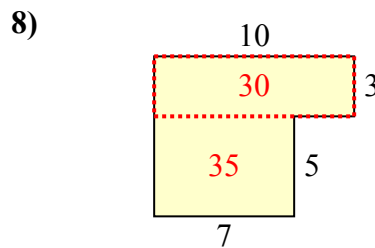
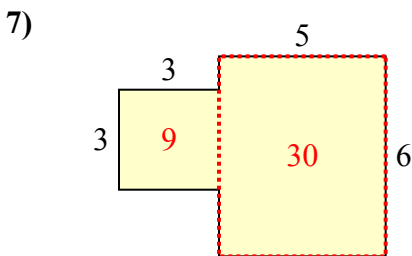
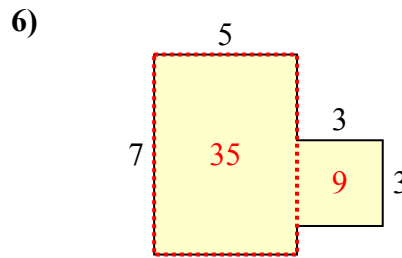
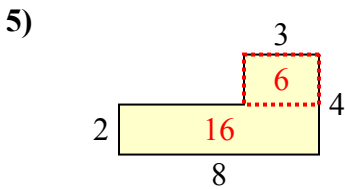
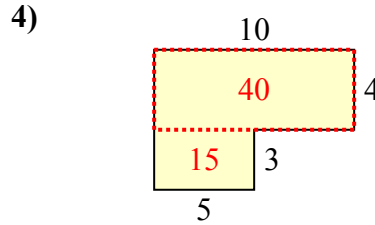
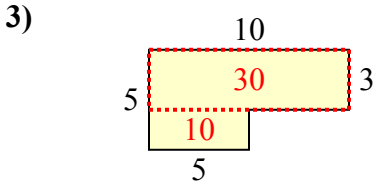
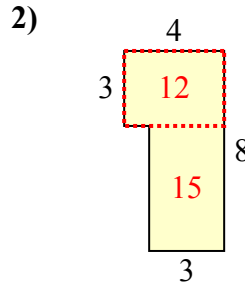
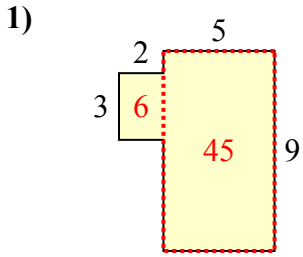
10)





Tìm tổng diện tích của mỗi hình. Đo bằng millimet (mm). Không theo tỉ lệ.

Câu trả lời



1. 51 milimet²
2. 27 milimet²
3. 40 milimet²
4. 55 milimet²
5. 22 milimet²
6. 44 milimet²
7. 39 milimet²
8. 65 milimet²
9. 18 milimet²
10. 59 milimet²