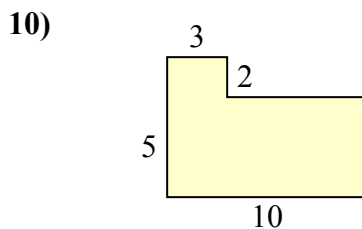
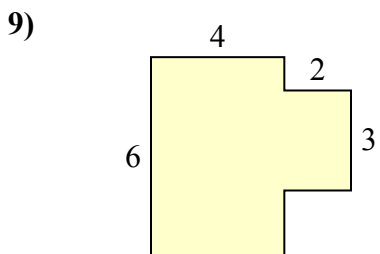
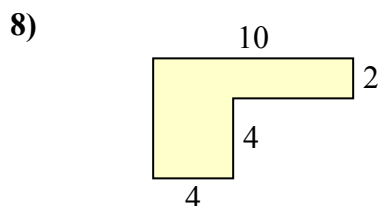
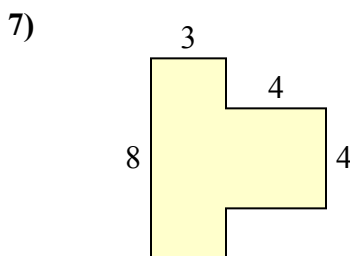
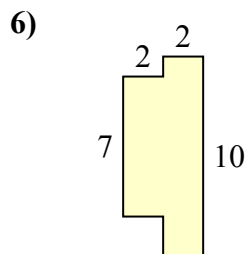
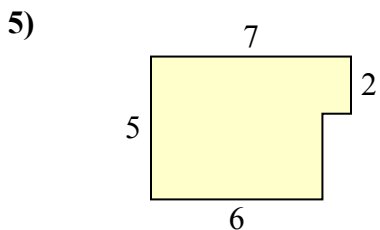
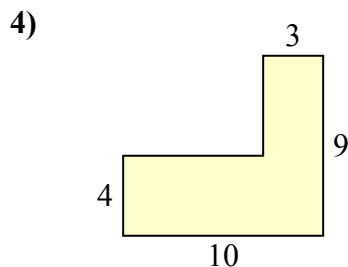
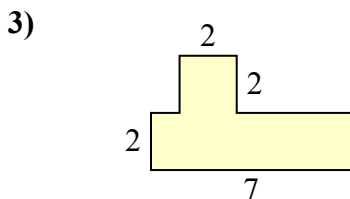
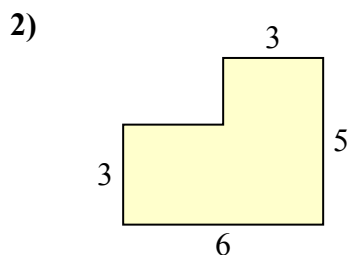
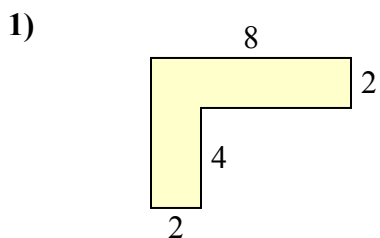




Tìm tổng diện tích của mỗi hình. Đo bằng millimet (mm). Không theo tỉ lệ.

Câu trả lời

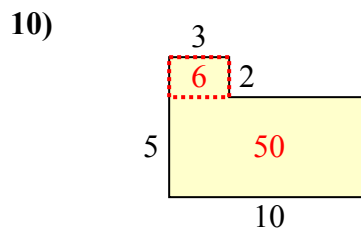
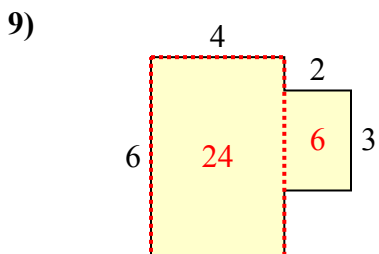
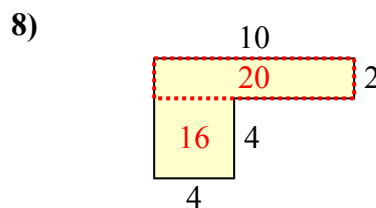
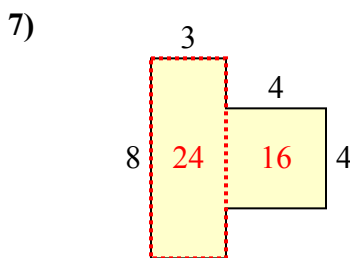
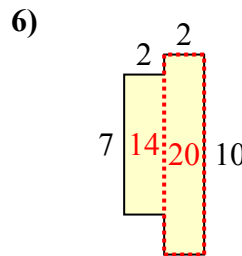
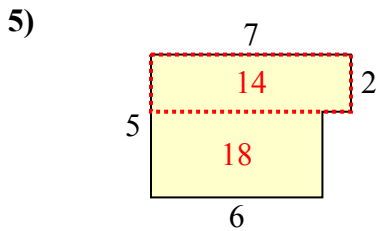
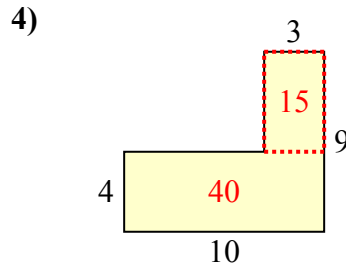
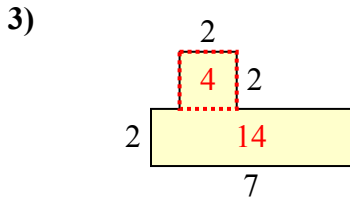
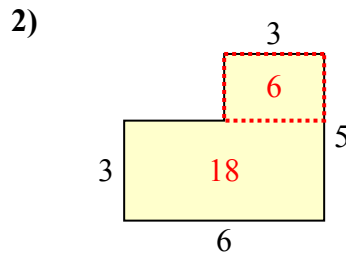
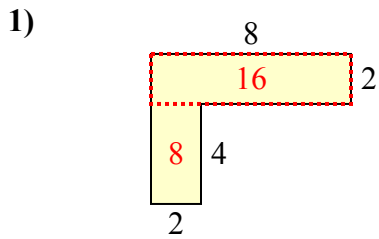


1. _____
2. _____
3. _____
4. _____
5. _____
6. _____
7. _____
8. _____
9. _____
10. _____



Tìm tổng diện tích của mỗi hình. Đo bằng millimet (mm). Không theo tỉ lệ.

Câu trả lời



1. 24 milimet²
2. 24 milimet²
3. 18 milimet²
4. 55 milimet²
5. 32 milimet²
6. 34 milimet²
7. 40 milimet²
8. 36 milimet²
9. 30 milimet²
10. 56 milimet²