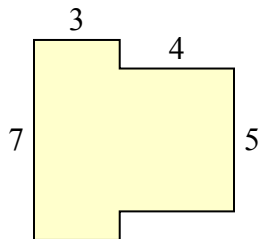




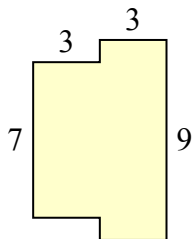
Tìm tổng diện tích của mỗi hình. Đo bằng millimet (mm). Không theo tỉ lệ.

Câu trả lời

1)



2)



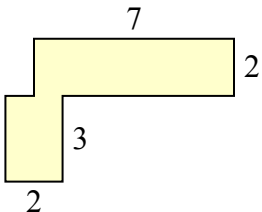
1. _____

2. _____

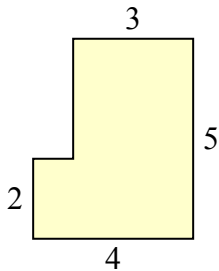
3. _____

4. _____

3)



4)



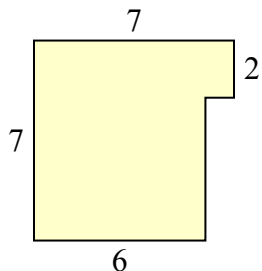
5. _____

6. _____

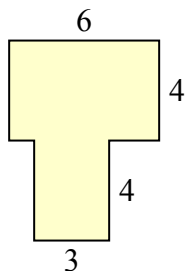
7. _____

8. _____

5)



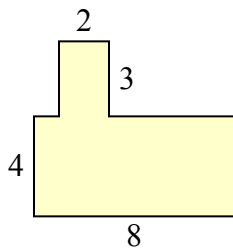
6)



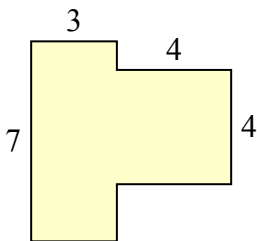
9. _____

10. _____

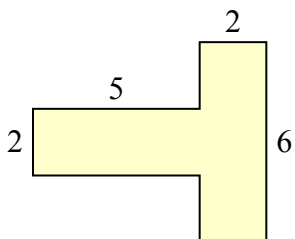
7)



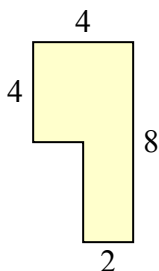
8)



9)



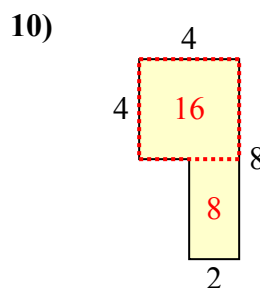
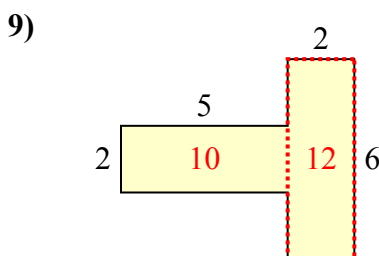
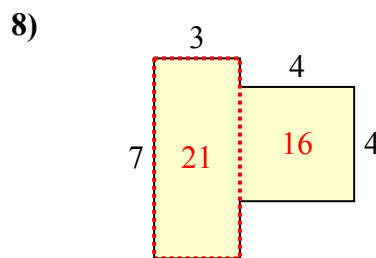
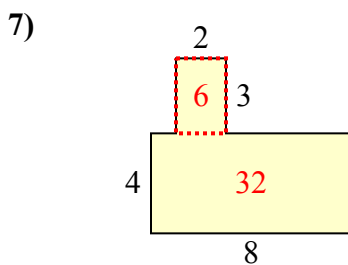
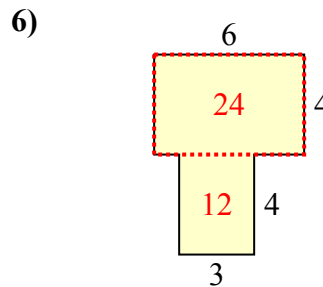
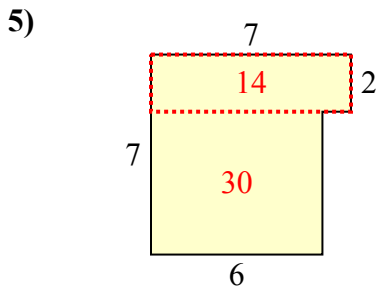
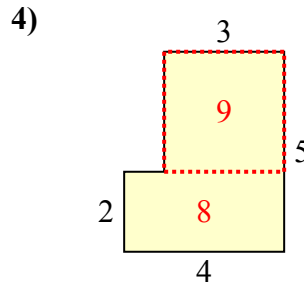
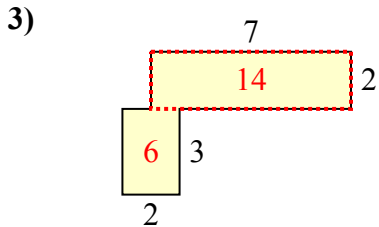
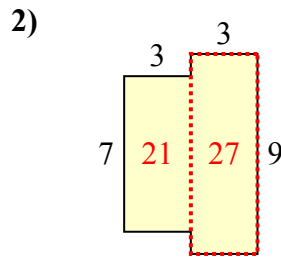
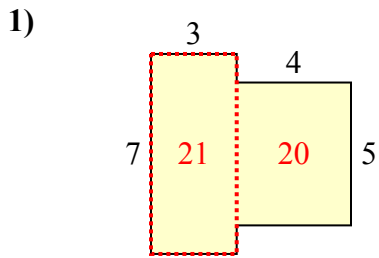
10)





Tìm tổng diện tích của mỗi hình. Đo bằng millimet (mm). Không theo tỉ lệ.

Câu trả lời



1. 41 milimet²
2. 48 milimet²
3. 20 milimet²
4. 17 milimet²
5. 44 milimet²
6. 36 milimet²
7. 38 milimet²
8. 37 milimet²
9. 22 milimet²
10. 24 milimet²