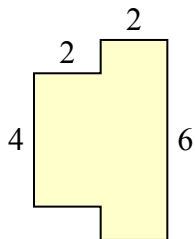




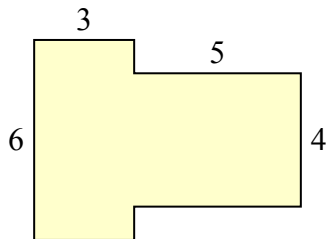
Tìm tổng diện tích của mỗi hình. Đo bằng millimet (mm). Không theo tỉ lệ.

**Câu trả lời**

1)



2)



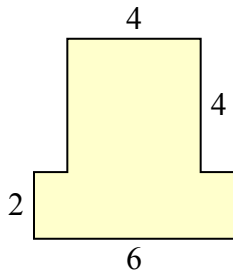
1. \_\_\_\_\_

2. \_\_\_\_\_

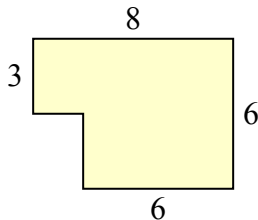
3. \_\_\_\_\_

4. \_\_\_\_\_

3)



4)



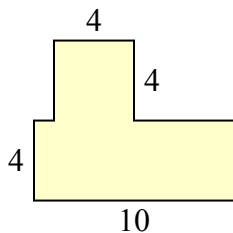
5. \_\_\_\_\_

6. \_\_\_\_\_

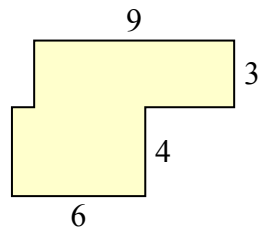
7. \_\_\_\_\_

8. \_\_\_\_\_

5)



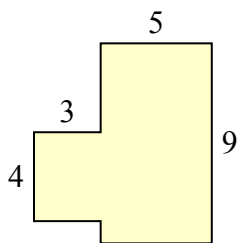
6)



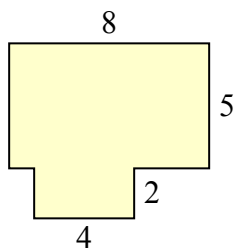
9. \_\_\_\_\_

10. \_\_\_\_\_

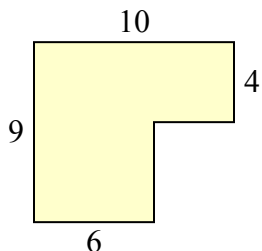
7)



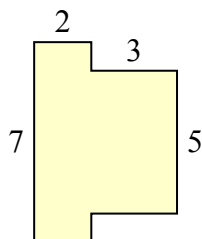
8)



9)



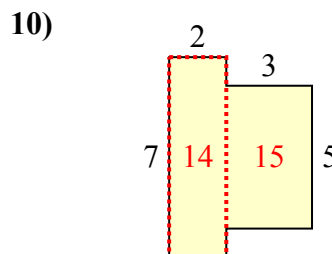
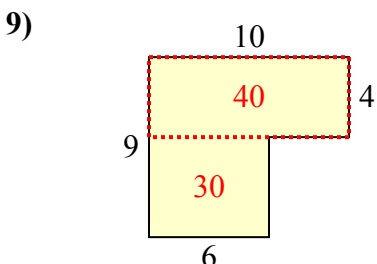
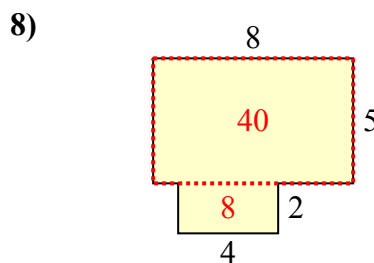
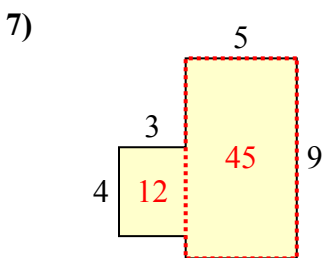
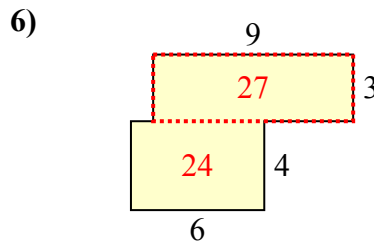
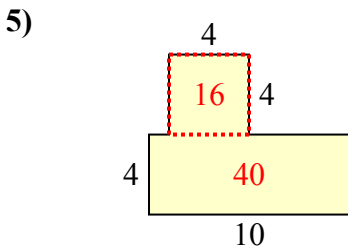
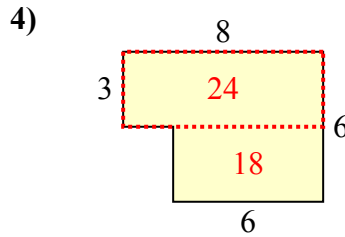
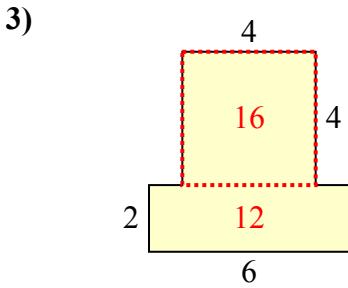
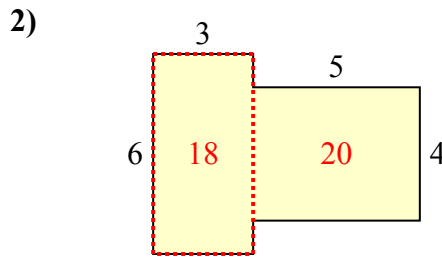
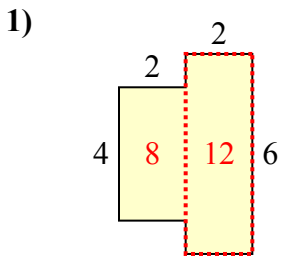
10)





Tìm tổng diện tích của mỗi hình. Đo bằng millimet (mm). Không theo tỉ lệ.

**Câu trả lời**



1. 20 milimet<sup>2</sup>
2. 38 milimet<sup>2</sup>
3. 28 milimet<sup>2</sup>
4. 42 milimet<sup>2</sup>
5. 56 milimet<sup>2</sup>
6. 51 milimet<sup>2</sup>
7. 57 milimet<sup>2</sup>
8. 48 milimet<sup>2</sup>
9. 70 milimet<sup>2</sup>
10. 29 milimet<sup>2</sup>